



Fill in the grid using the chart.

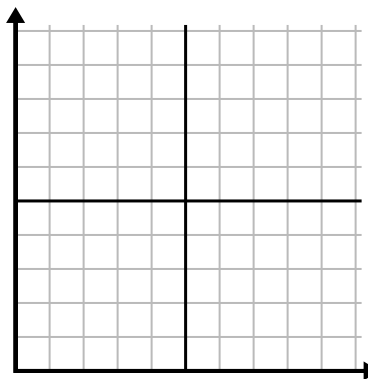
1)

Day	1	2	3	4	5
Money Spent	4	2	7	9	8



2)

Month	1	2	3	4	5	6	7
Electric Bill Price	175	200	100	25	250	125	50



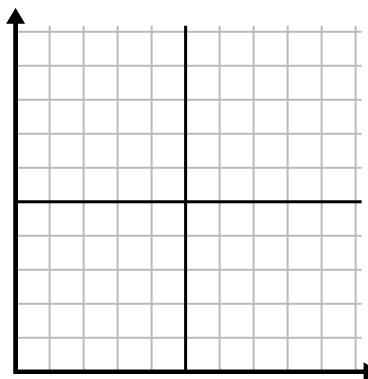
3)

Year	1	2	3	4	5	6
Boxes of Pens Used	6	4	5	10	2	8



4)

Day	1	2	3	4	5
Calories Burned	80	20	140	120	40



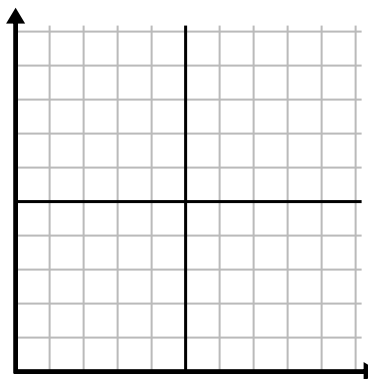
5)

Week	1	2	3	4	5
Hours of TV watched	35	5	20	10	30



6)

Hour	1	2	3	4	5
Amount Sold	5	10	4	7	8

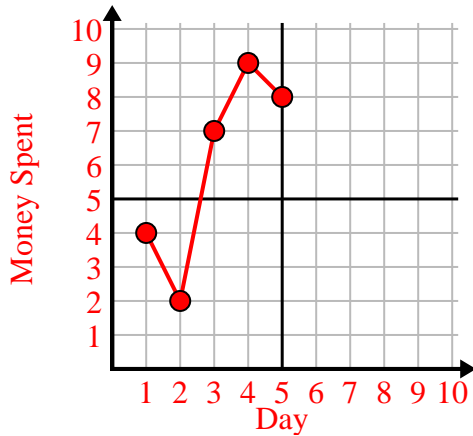




Fill in the grid using the chart.

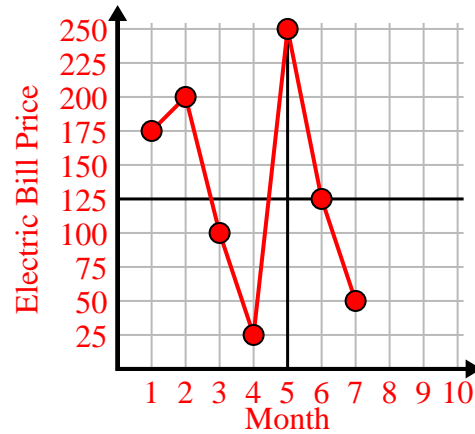
1)

Day	1	2	3	4	5
Money Spent	4	2	7	9	8



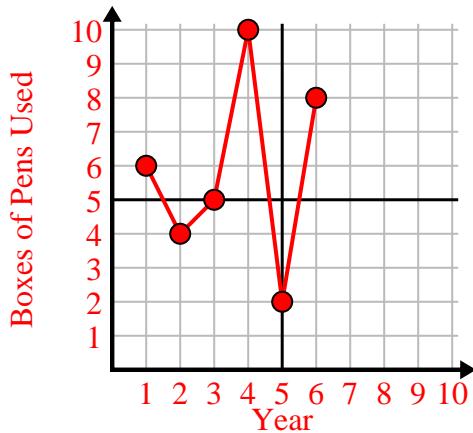
2)

Month	1	2	3	4	5	6	7
Electric Bill Price	175	200	100	25	250	125	50



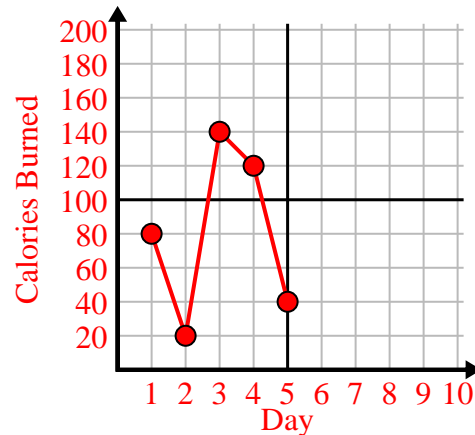
3)

Year	1	2	3	4	5	6
Boxes of Pens Used	6	4	5	10	2	8



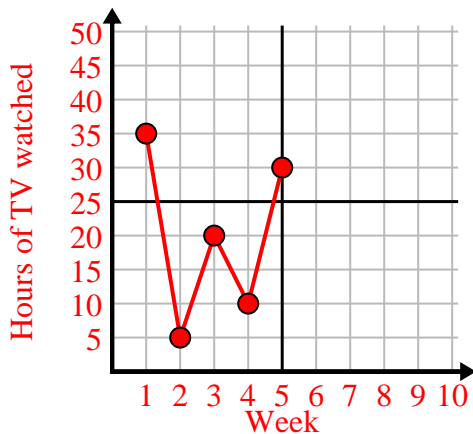
4)

Day	1	2	3	4	5
Calories Burned	80	20	140	120	40



5)

Week	1	2	3	4	5
Hours of TV watched	35	5	20	10	30



6)

Hour	1	2	3	4	5
Amount Sold	5	10	4	7	8

