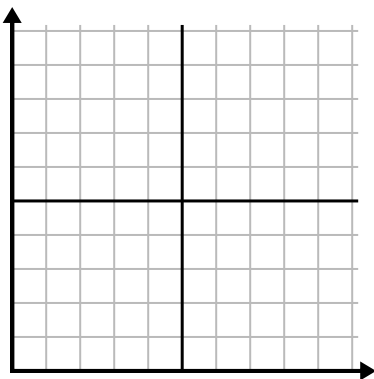




Fill in the grid using the chart.

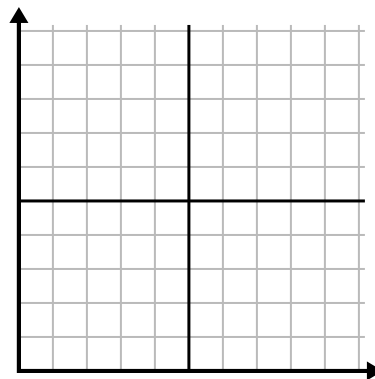
1)

Day	1	2	3	4	5	6	7
Youtube Videos Watched	30	180	270	150	60	90	240



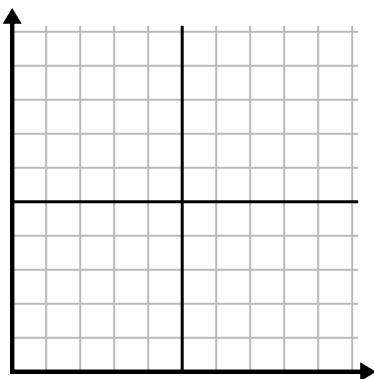
2)

Month	1	2	3	4	5
Electric Bill Price	225	150	75	125	50



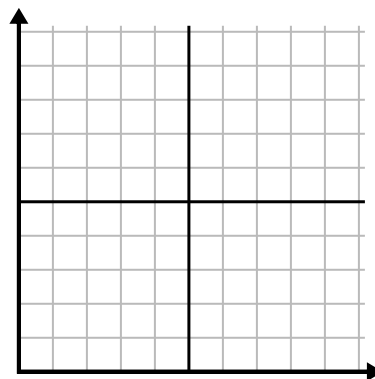
3)

Year	1	2	3	4	5
Ink Cartridges Used	16	2	10	12	8



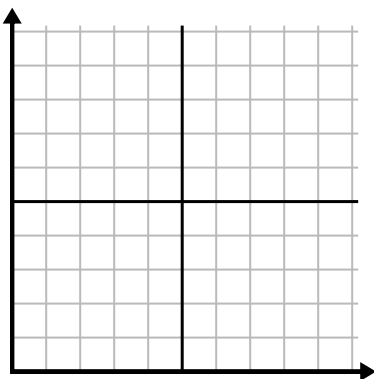
4)

Day	1	2	3	4	5	6
Money Spent	2	7	9	8	5	1



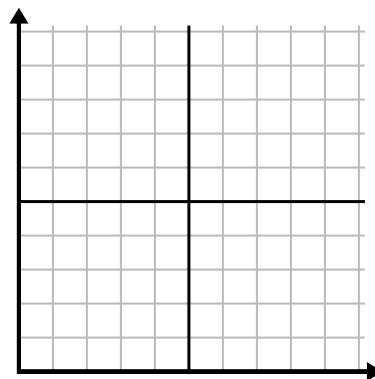
5)

Hour	1	2	3	4	5	6	7
Amount Sold	5	4	2	9	7	6	8



6)

Day	1	2	3	4	5	6
Meals Sold	600	900	700	500	100	400

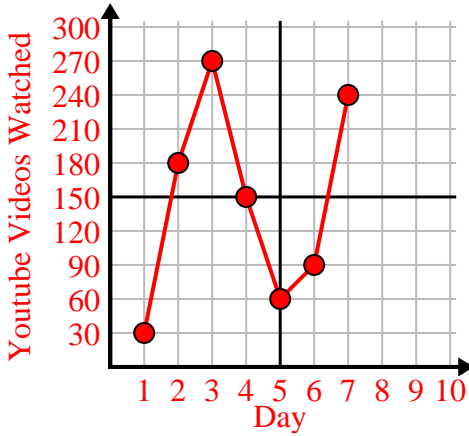




Fill in the grid using the chart.

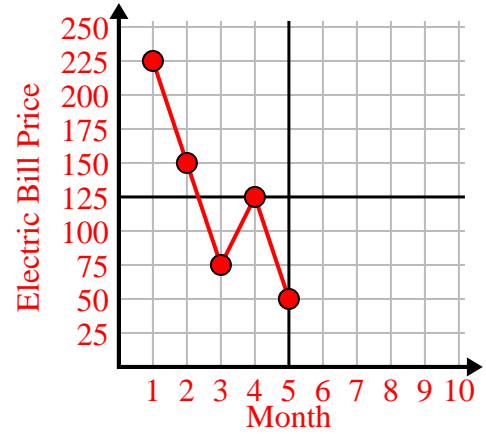
1)

Day	1	2	3	4	5	6	7
Youtube Videos Watched	30	180	270	150	60	90	240



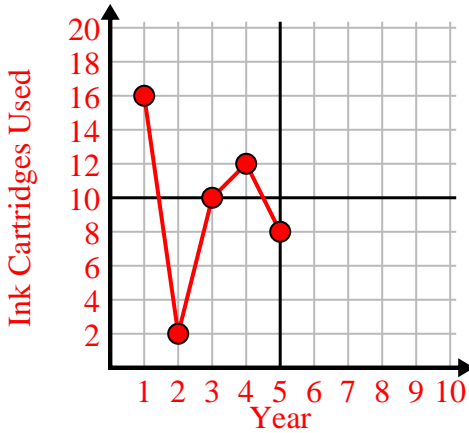
2)

Month	1	2	3	4	5
Electric Bill Price	225	150	75	125	50



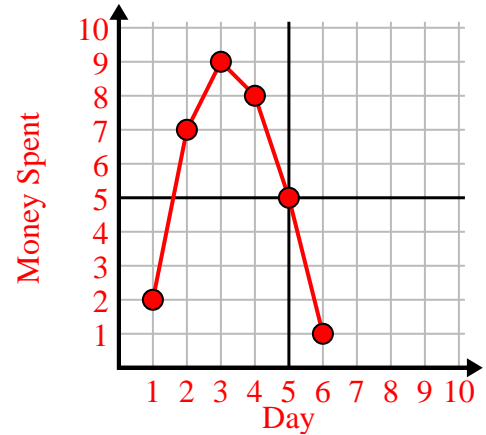
3)

Year	1	2	3	4	5
Ink Cartridges Used	16	2	10	12	8



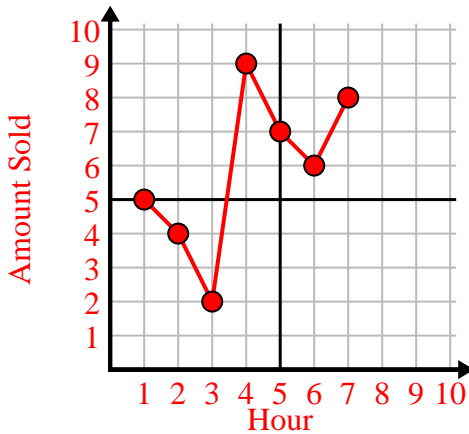
4)

Day	1	2	3	4	5	6
Money Spent	2	7	9	8	5	1



5)

Hour	1	2	3	4	5	6	7
Amount Sold	5	4	2	9	7	6	8



6)

Day	1	2	3	4	5	6
Meals Sold	600	900	700	500	100	400

