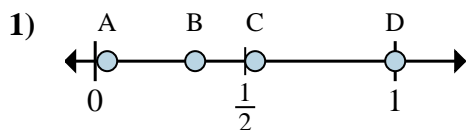
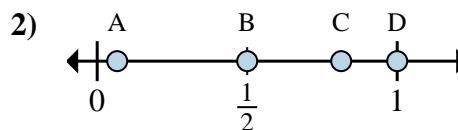
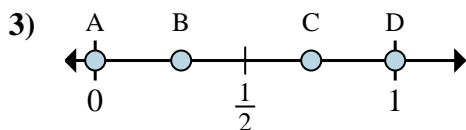
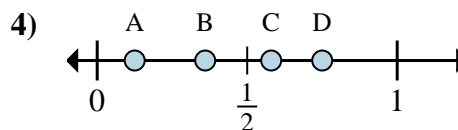
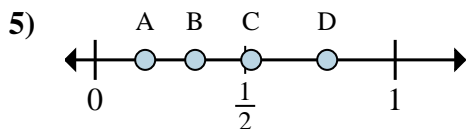
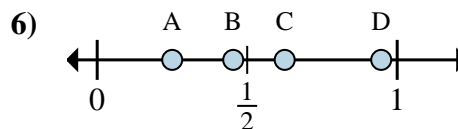
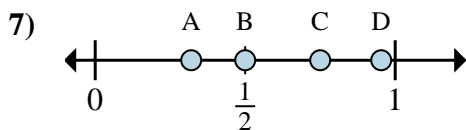
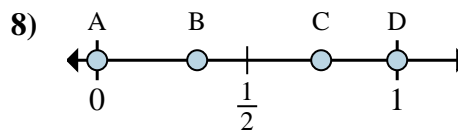




Determine which letter best shows the location of the fraction.

**Answers**a. Which letter best shows  $\frac{1}{3}$ ?b. Which letter best shows  $\frac{3}{3}$ ?a. Which letter best shows  $\frac{1}{2}$ ?b. Which letter best shows  $\frac{2}{2}$ ?a. Which letter best shows  $\frac{0}{6}$ ?b. Which letter best shows  $\frac{6}{6}$ ?a. Which letter best shows  $\frac{1}{8}$ ?b. Which letter best shows  $\frac{6}{8}$ ?a. Which letter best shows  $\frac{2}{6}$ ?b. Which letter best shows  $\frac{1}{6}$ ?a. Which letter best shows  $\frac{5}{8}$ ?b. Which letter best shows  $\frac{2}{8}$ ?a. Which letter best shows  $\frac{3}{4}$ ?b. Which letter best shows  $\frac{2}{4}$ ?a. Which letter best shows  $\frac{0}{6}$ ?b. Which letter best shows  $\frac{6}{6}$ ?

1. \_\_\_\_\_

2. \_\_\_\_\_

3. \_\_\_\_\_

4. \_\_\_\_\_

5. \_\_\_\_\_

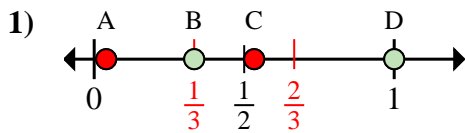
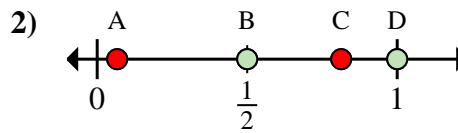
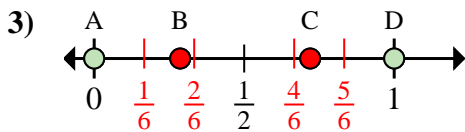
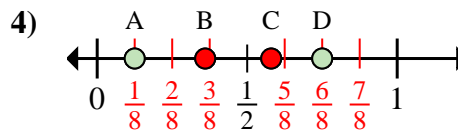
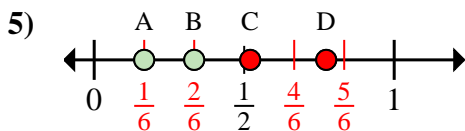
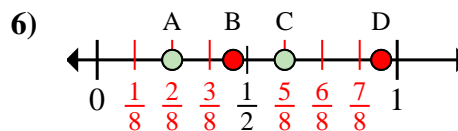
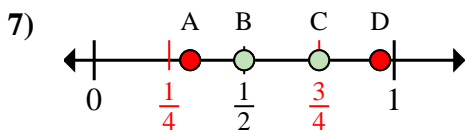
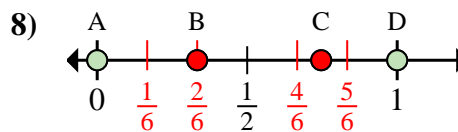
6. \_\_\_\_\_

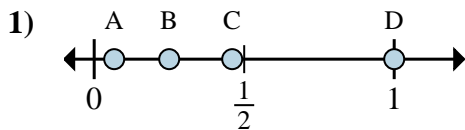
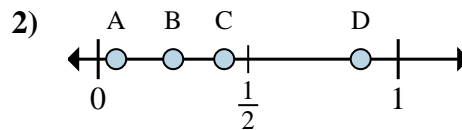
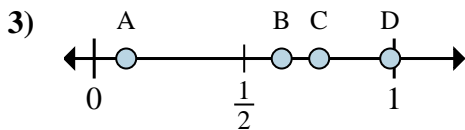
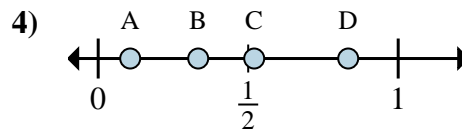
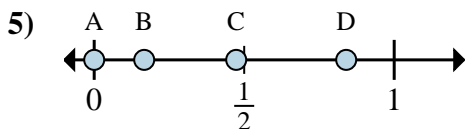
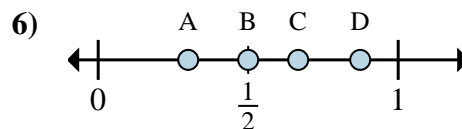
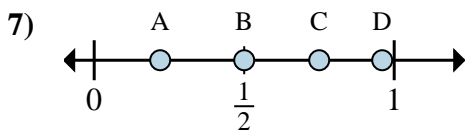
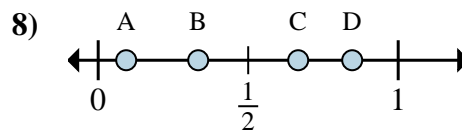
7. \_\_\_\_\_

8. \_\_\_\_\_



Determine which letter best shows the location of the fraction.

**Answers**a. Which letter best shows  $\frac{1}{3}$ ?b. Which letter best shows  $\frac{3}{3}$ ?a. Which letter best shows  $\frac{1}{2}$ ?b. Which letter best shows  $\frac{2}{2}$ ?a. Which letter best shows  $\frac{0}{6}$ ?b. Which letter best shows  $\frac{6}{6}$ ?a. Which letter best shows  $\frac{1}{8}$ ?b. Which letter best shows  $\frac{6}{8}$ ?a. Which letter best shows  $\frac{2}{6}$ ?b. Which letter best shows  $\frac{1}{6}$ ?a. Which letter best shows  $\frac{5}{8}$ ?b. Which letter best shows  $\frac{2}{8}$ ?a. Which letter best shows  $\frac{3}{4}$ ?b. Which letter best shows  $\frac{2}{4}$ ?a. Which letter best shows  $\frac{0}{6}$ ?b. Which letter best shows  $\frac{6}{6}$ ?1. **B** **D**2. **B** **D**3. **A** **D**4. **A** **D**5. **B** **A**6. **C** **A**7. **C** **B**8. **A** **D**

**Determine which letter best shows the location of the fraction.****Answers**a. Which letter best shows  $\frac{4}{4}$ ?b. Which letter best shows  $\frac{1}{4}$ ?a. Which letter best shows  $\frac{7}{8}$ ?b. Which letter best shows  $\frac{2}{8}$ ?a. Which letter best shows  $\frac{5}{8}$ ?b. Which letter best shows  $\frac{6}{8}$ ?a. Which letter best shows  $\frac{5}{6}$ ?b. Which letter best shows  $\frac{2}{6}$ ?a. Which letter best shows  $\frac{0}{6}$ ?b. Which letter best shows  $\frac{1}{6}$ ?a. Which letter best shows  $\frac{3}{6}$ ?b. Which letter best shows  $\frac{4}{6}$ ?a. Which letter best shows  $\frac{3}{4}$ ?b. Which letter best shows  $\frac{2}{4}$ ?a. Which letter best shows  $\frac{2}{3}$ ?b. Which letter best shows  $\frac{1}{3}$ ?

1. \_\_\_\_\_

2. \_\_\_\_\_

3. \_\_\_\_\_

4. \_\_\_\_\_

5. \_\_\_\_\_

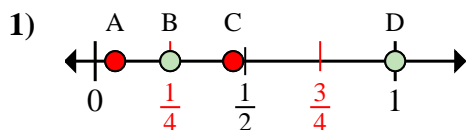
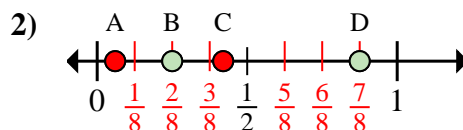
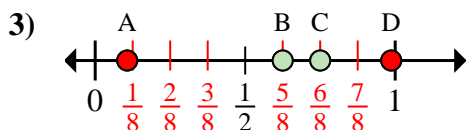
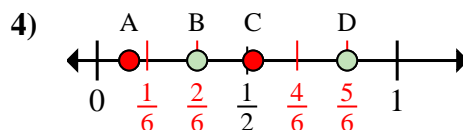
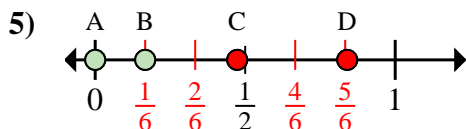
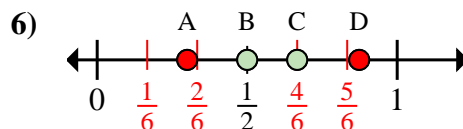
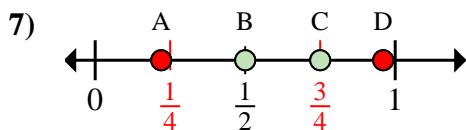
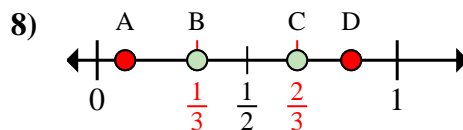
6. \_\_\_\_\_

7. \_\_\_\_\_

8. \_\_\_\_\_

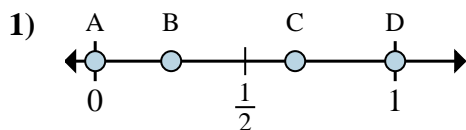
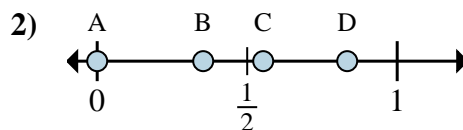
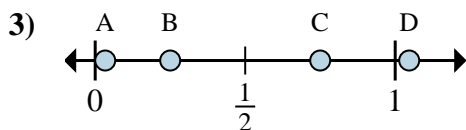
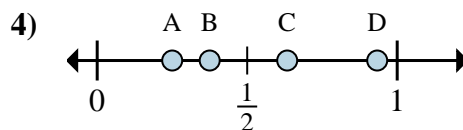
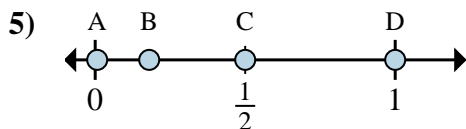
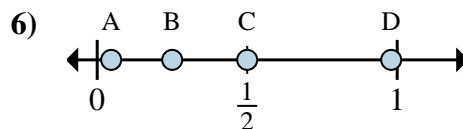
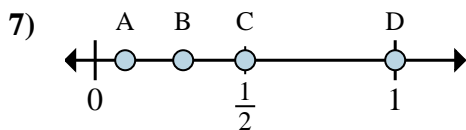
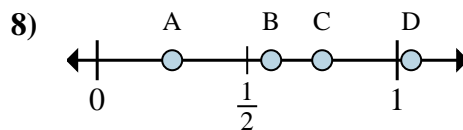


Determine which letter best shows the location of the fraction.

**Answers**a. Which letter best shows  $\frac{4}{4}$ ?b. Which letter best shows  $\frac{1}{4}$ ?a. Which letter best shows  $\frac{7}{8}$ ?b. Which letter best shows  $\frac{2}{8}$ ?a. Which letter best shows  $\frac{5}{8}$ ?b. Which letter best shows  $\frac{6}{8}$ ?a. Which letter best shows  $\frac{5}{6}$ ?b. Which letter best shows  $\frac{2}{6}$ ?a. Which letter best shows  $\frac{0}{6}$ ?b. Which letter best shows  $\frac{1}{6}$ ?a. Which letter best shows  $\frac{3}{6}$ ?b. Which letter best shows  $\frac{4}{6}$ ?a. Which letter best shows  $\frac{3}{4}$ ?b. Which letter best shows  $\frac{2}{4}$ ?a. Which letter best shows  $\frac{2}{3}$ ?b. Which letter best shows  $\frac{1}{3}$ ?1. **D** **B**2. **D** **B**3. **B** **C**4. **D** **B**5. **A** **B**6. **B** **C**7. **C** **B**8. **C** **B**



Determine which letter best shows the location of the fraction.

**Answers**a. Which letter best shows  $\frac{0}{3}$ ?b. Which letter best shows  $\frac{2}{3}$ ?a. Which letter best shows  $\frac{0}{6}$ ?b. Which letter best shows  $\frac{5}{6}$ ?a. Which letter best shows  $\frac{3}{4}$ ?b. Which letter best shows  $\frac{1}{4}$ ?a. Which letter best shows  $\frac{2}{8}$ ?b. Which letter best shows  $\frac{3}{8}$ ?a. Which letter best shows  $\frac{2}{4}$ ?b. Which letter best shows  $\frac{4}{4}$ ?a. Which letter best shows  $\frac{1}{4}$ ?b. Which letter best shows  $\frac{2}{4}$ ?a. Which letter best shows  $\frac{1}{2}$ ?b. Which letter best shows  $\frac{2}{2}$ ?a. Which letter best shows  $\frac{1}{4}$ ?b. Which letter best shows  $\frac{3}{4}$ ?

1. \_\_\_\_\_

2. \_\_\_\_\_

3. \_\_\_\_\_

4. \_\_\_\_\_

5. \_\_\_\_\_

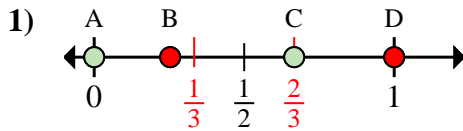
6. \_\_\_\_\_

7. \_\_\_\_\_

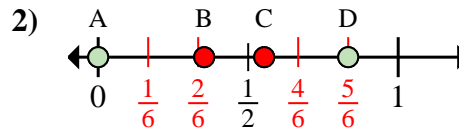
8. \_\_\_\_\_



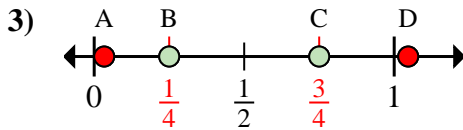
Determine which letter best shows the location of the fraction.

**Answers**

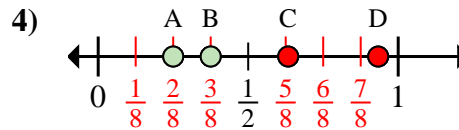
- a. Which letter best shows  $\frac{0}{3}$ ?  
b. Which letter best shows  $\frac{2}{3}$ ?



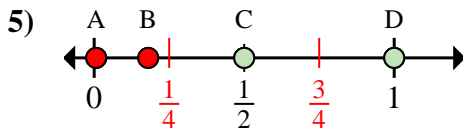
- a. Which letter best shows  $\frac{0}{6}$ ?  
b. Which letter best shows  $\frac{5}{6}$ ?



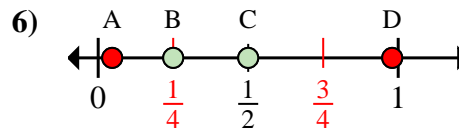
- a. Which letter best shows  $\frac{3}{4}$ ?  
b. Which letter best shows  $\frac{1}{4}$ ?



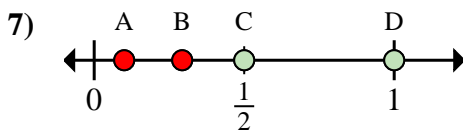
- a. Which letter best shows  $\frac{2}{8}$ ?  
b. Which letter best shows  $\frac{3}{8}$ ?



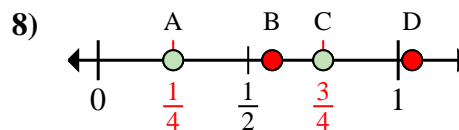
- a. Which letter best shows  $\frac{2}{4}$ ?  
b. Which letter best shows  $\frac{4}{4}$ ?



- a. Which letter best shows  $\frac{1}{4}$ ?  
b. Which letter best shows  $\frac{2}{4}$ ?



- a. Which letter best shows  $\frac{1}{2}$ ?  
b. Which letter best shows  $\frac{2}{2}$ ?

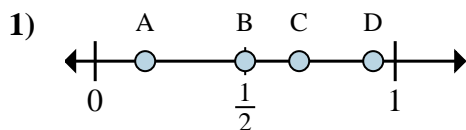
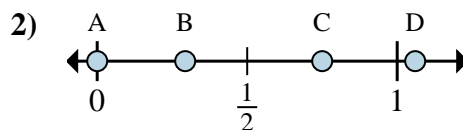
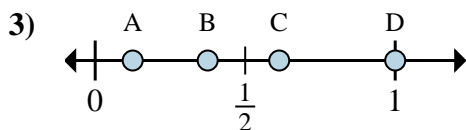
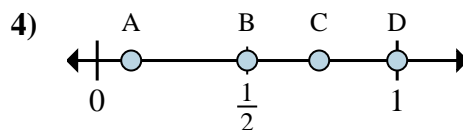
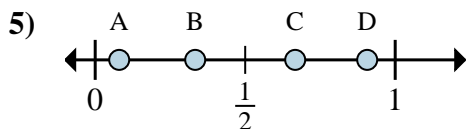
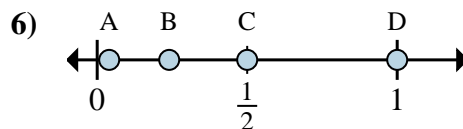
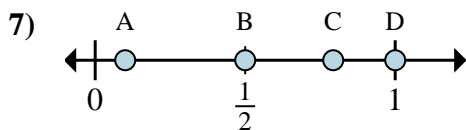
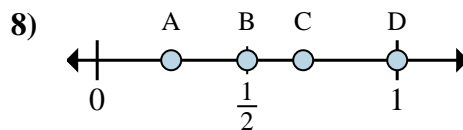


- a. Which letter best shows  $\frac{1}{4}$ ?  
b. Which letter best shows  $\frac{3}{4}$ ?

1. **A** **C**  
2. **A** **D**  
3. **C** **B**  
4. **A** **B**  
5. **C** **D**  
6. **B** **C**  
7. **C** **D**  
8. **A** **C**



Determine which letter best shows the location of the fraction.

**Answers**a. Which letter best shows  $\frac{1}{6}$ ?b. Which letter best shows  $\frac{3}{6}$ ?a. Which letter best shows  $\frac{0}{4}$ ?b. Which letter best shows  $\frac{3}{4}$ ?a. Which letter best shows  $\frac{1}{8}$ ?b. Which letter best shows  $\frac{3}{8}$ ?a. Which letter best shows  $\frac{2}{2}$ ?b. Which letter best shows  $\frac{1}{2}$ ?a. Which letter best shows  $\frac{1}{3}$ ?b. Which letter best shows  $\frac{2}{3}$ ?a. Which letter best shows  $\frac{2}{2}$ ?b. Which letter best shows  $\frac{1}{2}$ ?a. Which letter best shows  $\frac{1}{2}$ ?b. Which letter best shows  $\frac{2}{2}$ ?a. Which letter best shows  $\frac{1}{2}$ ?b. Which letter best shows  $\frac{2}{2}$ ?

1. \_\_\_\_\_

2. \_\_\_\_\_

3. \_\_\_\_\_

4. \_\_\_\_\_

5. \_\_\_\_\_

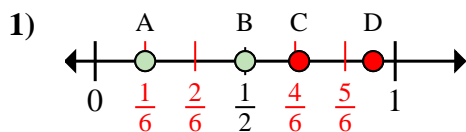
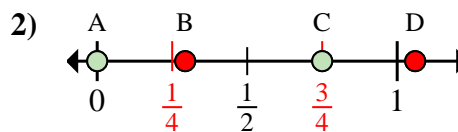
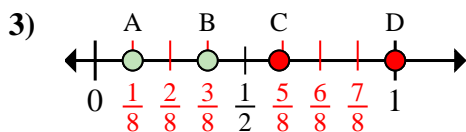
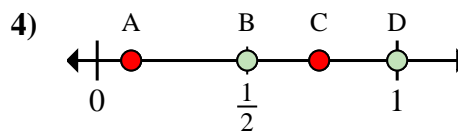
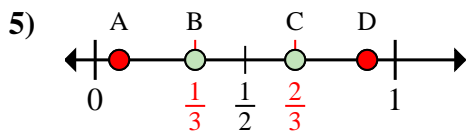
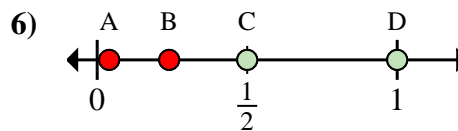
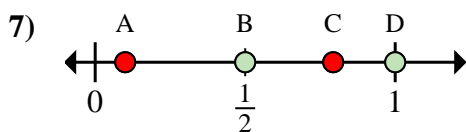
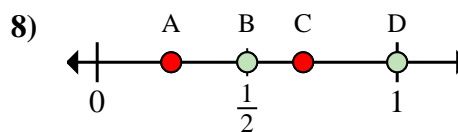
6. \_\_\_\_\_

7. \_\_\_\_\_

8. \_\_\_\_\_



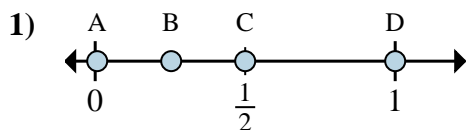
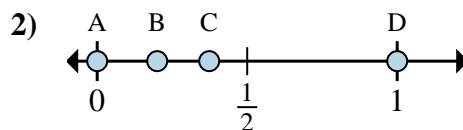
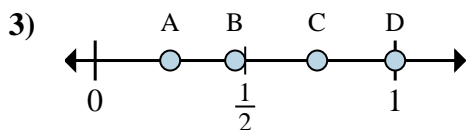
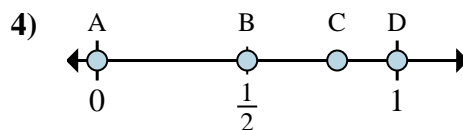
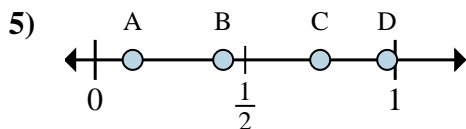
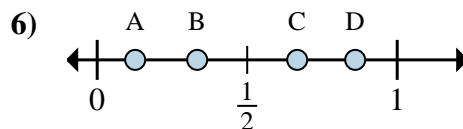
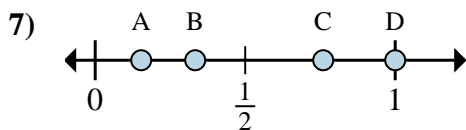
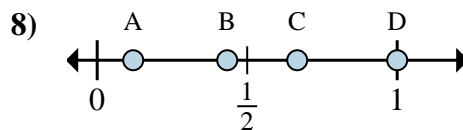
Determine which letter best shows the location of the fraction.

**Answers**a. Which letter best shows  $\frac{1}{6}$ ?b. Which letter best shows  $\frac{3}{6}$ ?a. Which letter best shows  $\frac{0}{4}$ ?b. Which letter best shows  $\frac{3}{4}$ ?a. Which letter best shows  $\frac{1}{8}$ ?b. Which letter best shows  $\frac{3}{8}$ ?a. Which letter best shows  $\frac{2}{2}$ ?b. Which letter best shows  $\frac{1}{2}$ ?a. Which letter best shows  $\frac{1}{3}$ ?b. Which letter best shows  $\frac{2}{3}$ ?a. Which letter best shows  $\frac{2}{2}$ ?b. Which letter best shows  $\frac{1}{2}$ ?a. Which letter best shows  $\frac{1}{2}$ ?b. Which letter best shows  $\frac{2}{2}$ ?a. Which letter best shows  $\frac{1}{2}$ ?b. Which letter best shows  $\frac{2}{2}$ ?1. **A** **B**2. **A** **C**3. **A** **B**4. **D** **B**5. **B** **C**6. **D** **C**7. **B** **D**8. **B** **D**





Determine which letter best shows the location of the fraction.

**Answers**a. Which letter best shows  $\frac{6}{6}$ ?b. Which letter best shows  $\frac{3}{6}$ ?a. Which letter best shows  $\frac{0}{2}$ ?b. Which letter best shows  $\frac{2}{2}$ ?a. Which letter best shows  $\frac{1}{4}$ ?b. Which letter best shows  $\frac{4}{4}$ ?a. Which letter best shows  $\frac{0}{3}$ ?b. Which letter best shows  $\frac{3}{3}$ ?a. Which letter best shows  $\frac{1}{8}$ ?b. Which letter best shows  $\frac{6}{8}$ ?a. Which letter best shows  $\frac{2}{3}$ ?b. Which letter best shows  $\frac{1}{3}$ ?a. Which letter best shows  $\frac{1}{3}$ ?b. Which letter best shows  $\frac{3}{3}$ ?a. Which letter best shows  $\frac{3}{3}$ ?b. Which letter best shows  $\frac{2}{3}$ ?

1. \_\_\_\_\_

2. \_\_\_\_\_

3. \_\_\_\_\_

4. \_\_\_\_\_

5. \_\_\_\_\_

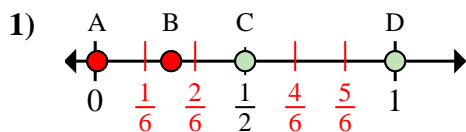
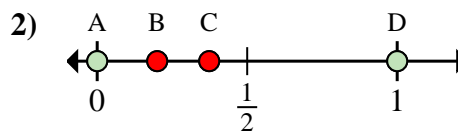
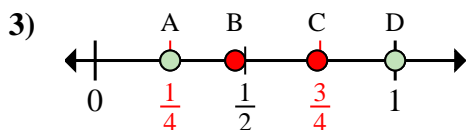
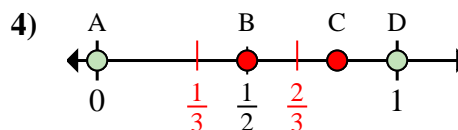
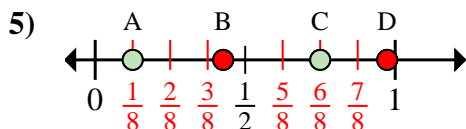
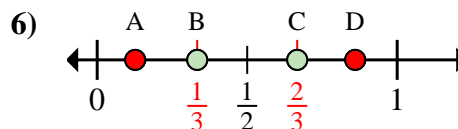
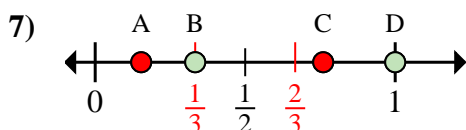
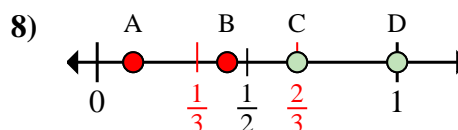
6. \_\_\_\_\_

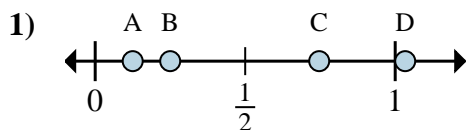
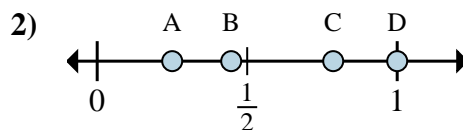
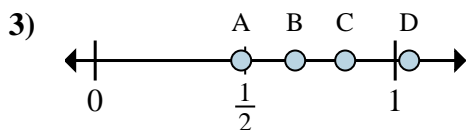
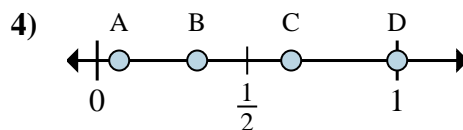
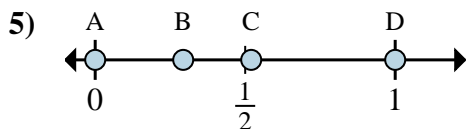
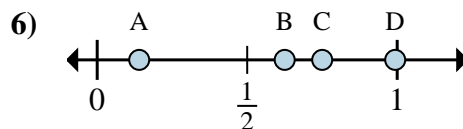
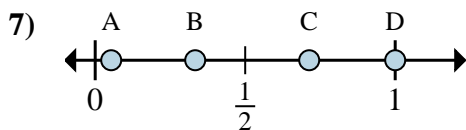
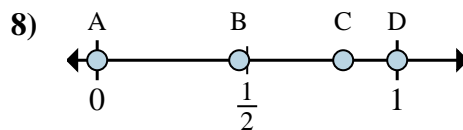
7. \_\_\_\_\_

8. \_\_\_\_\_



Determine which letter best shows the location of the fraction.

**Answers**a. Which letter best shows  $\frac{6}{6}$ ?b. Which letter best shows  $\frac{3}{6}$ ?a. Which letter best shows  $\frac{0}{2}$ ?b. Which letter best shows  $\frac{2}{2}$ ?a. Which letter best shows  $\frac{1}{4}$ ?b. Which letter best shows  $\frac{4}{4}$ ?a. Which letter best shows  $\frac{0}{3}$ ?b. Which letter best shows  $\frac{3}{3}$ ?a. Which letter best shows  $\frac{1}{8}$ ?b. Which letter best shows  $\frac{6}{8}$ ?a. Which letter best shows  $\frac{2}{3}$ ?b. Which letter best shows  $\frac{1}{3}$ ?a. Which letter best shows  $\frac{1}{3}$ ?b. Which letter best shows  $\frac{3}{3}$ ?a. Which letter best shows  $\frac{3}{3}$ ?b. Which letter best shows  $\frac{2}{3}$ ?1. **D** **C**2. **A** **D**3. **A** **D**4. **A** **D**5. **A** **C**6. **C** **B**7. **B** **D**8. **D** **C**

**Determine which letter best shows the location of the fraction.****Answers**a. Which letter best shows  $\frac{1}{8}$ ?b. Which letter best shows  $\frac{2}{8}$ ?a. Which letter best shows  $\frac{4}{4}$ ?b. Which letter best shows  $\frac{1}{4}$ ?a. Which letter best shows  $\frac{5}{6}$ ?b. Which letter best shows  $\frac{4}{6}$ ?a. Which letter best shows  $\frac{3}{3}$ ?b. Which letter best shows  $\frac{1}{3}$ ?a. Which letter best shows  $\frac{0}{2}$ ?b. Which letter best shows  $\frac{2}{2}$ ?a. Which letter best shows  $\frac{6}{8}$ ?b. Which letter best shows  $\frac{5}{8}$ ?a. Which letter best shows  $\frac{1}{3}$ ?b. Which letter best shows  $\frac{3}{3}$ ?a. Which letter best shows  $\frac{0}{2}$ ?b. Which letter best shows  $\frac{2}{2}$ ?

1. \_\_\_\_\_

2. \_\_\_\_\_

3. \_\_\_\_\_

4. \_\_\_\_\_

5. \_\_\_\_\_

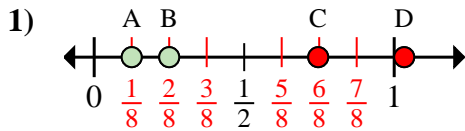
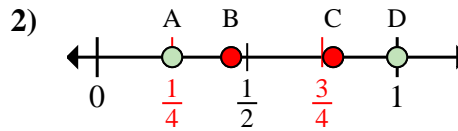
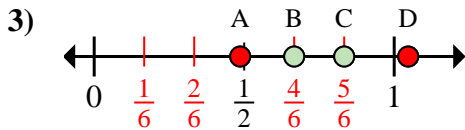
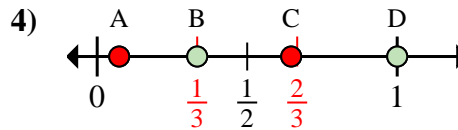
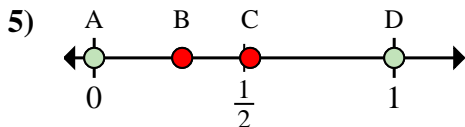
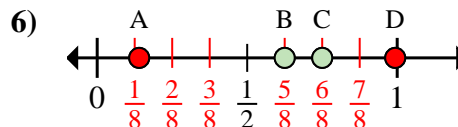
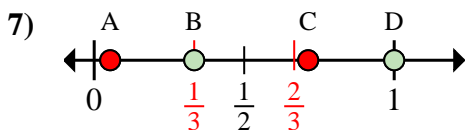
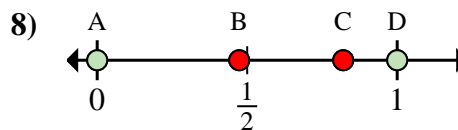
6. \_\_\_\_\_

7. \_\_\_\_\_

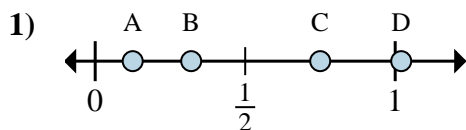
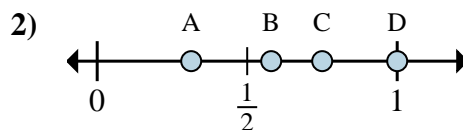
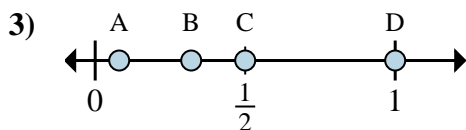
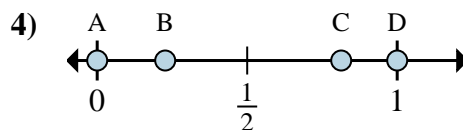
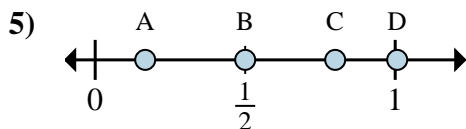
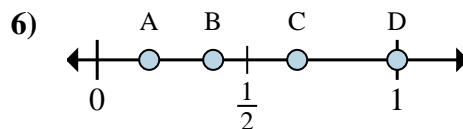
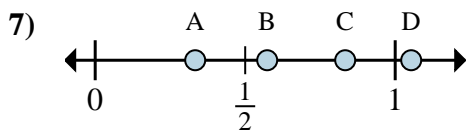
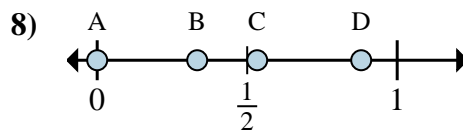
8. \_\_\_\_\_



Determine which letter best shows the location of the fraction.

**Answers**a. Which letter best shows  $\frac{1}{8}$ ?b. Which letter best shows  $\frac{2}{8}$ ?a. Which letter best shows  $\frac{4}{4}$ ?b. Which letter best shows  $\frac{1}{4}$ ?a. Which letter best shows  $\frac{5}{6}$ ?b. Which letter best shows  $\frac{4}{6}$ ?a. Which letter best shows  $\frac{3}{3}$ ?b. Which letter best shows  $\frac{1}{3}$ ?a. Which letter best shows  $\frac{0}{2}$ ?b. Which letter best shows  $\frac{2}{2}$ ?a. Which letter best shows  $\frac{6}{8}$ ?b. Which letter best shows  $\frac{5}{8}$ ?a. Which letter best shows  $\frac{1}{3}$ ?b. Which letter best shows  $\frac{3}{3}$ ?a. Which letter best shows  $\frac{0}{2}$ ?b. Which letter best shows  $\frac{2}{2}$ ?

1. **A** **B**
2. **D** **A**
3. **C** **B**
4. **D** **B**
5. **A** **D**
6. **C** **B**
7. **B** **D**
8. **A** **D**

**Determine which letter best shows the location of the fraction.****Answers**a. Which letter best shows  $\frac{1}{8}$ ?b. Which letter best shows  $\frac{6}{8}$ ?a. Which letter best shows  $\frac{3}{4}$ ?b. Which letter best shows  $\frac{4}{4}$ ?a. Which letter best shows  $\frac{8}{8}$ ?b. Which letter best shows  $\frac{4}{8}$ ?a. Which letter best shows  $\frac{0}{2}$ ?b. Which letter best shows  $\frac{2}{2}$ ?a. Which letter best shows  $\frac{1}{6}$ ?b. Which letter best shows  $\frac{3}{6}$ ?a. Which letter best shows  $\frac{2}{3}$ ?b. Which letter best shows  $\frac{3}{3}$ ?a. Which letter best shows  $\frac{5}{6}$ ?b. Which letter best shows  $\frac{2}{6}$ ?a. Which letter best shows  $\frac{0}{3}$ ?b. Which letter best shows  $\frac{1}{3}$ ?

1. \_\_\_\_\_

2. \_\_\_\_\_

3. \_\_\_\_\_

4. \_\_\_\_\_

5. \_\_\_\_\_

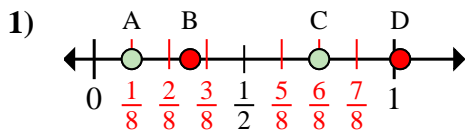
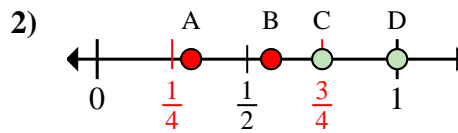
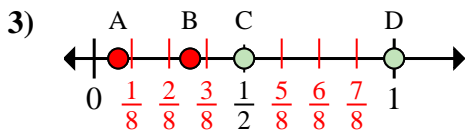
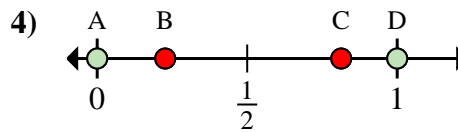
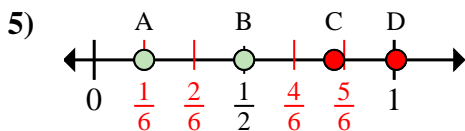
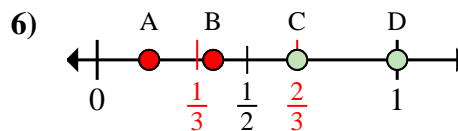
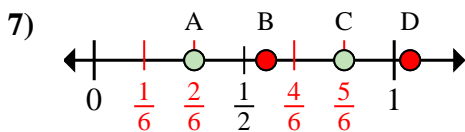
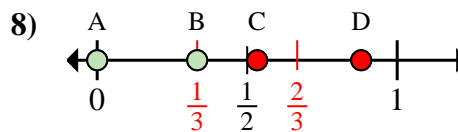
6. \_\_\_\_\_

7. \_\_\_\_\_

8. \_\_\_\_\_

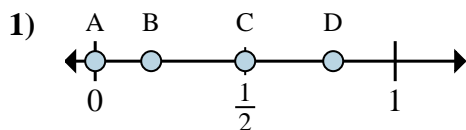
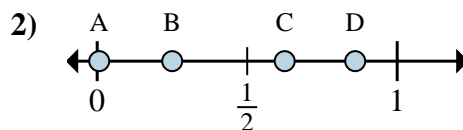
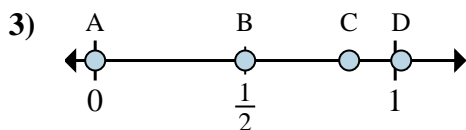
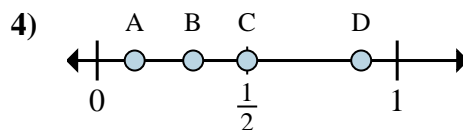
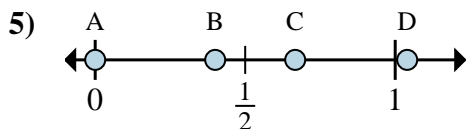
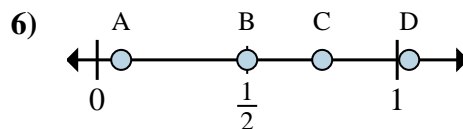
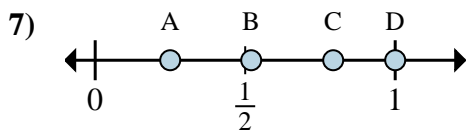
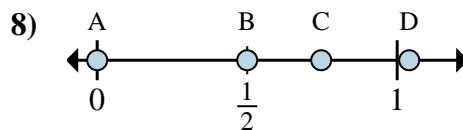


Determine which letter best shows the location of the fraction.

**Answers**a. Which letter best shows  $\frac{1}{8}$ ?b. Which letter best shows  $\frac{6}{8}$ ?a. Which letter best shows  $\frac{3}{4}$ ?b. Which letter best shows  $\frac{4}{4}$ ?a. Which letter best shows  $\frac{8}{8}$ ?b. Which letter best shows  $\frac{4}{8}$ ?a. Which letter best shows  $\frac{0}{2}$ ?b. Which letter best shows  $\frac{2}{2}$ ?a. Which letter best shows  $\frac{1}{6}$ ?b. Which letter best shows  $\frac{3}{6}$ ?a. Which letter best shows  $\frac{2}{3}$ ?b. Which letter best shows  $\frac{3}{3}$ ?a. Which letter best shows  $\frac{5}{6}$ ?b. Which letter best shows  $\frac{2}{6}$ ?a. Which letter best shows  $\frac{0}{3}$ ?b. Which letter best shows  $\frac{1}{3}$ ?1. **A** **C**2. **C** **D**3. **D** **C**4. **A** **D**5. **A** **B**6. **C** **D**7. **C** **A**8. **A** **B**



Determine which letter best shows the location of the fraction.

**Answers**a. Which letter best shows  $\frac{0}{2}$ ?b. Which letter best shows  $\frac{1}{2}$ ?a. Which letter best shows  $\frac{2}{8}$ ?b. Which letter best shows  $\frac{5}{8}$ ?a. Which letter best shows  $\frac{0}{6}$ ?b. Which letter best shows  $\frac{3}{6}$ ?a. Which letter best shows  $\frac{1}{8}$ ?b. Which letter best shows  $\frac{4}{8}$ ?a. Which letter best shows  $\frac{0}{3}$ ?b. Which letter best shows  $\frac{2}{3}$ ?a. Which letter best shows  $\frac{2}{4}$ ?b. Which letter best shows  $\frac{3}{4}$ ?a. Which letter best shows  $\frac{1}{4}$ ?b. Which letter best shows  $\frac{4}{4}$ ?a. Which letter best shows  $\frac{0}{2}$ ?b. Which letter best shows  $\frac{1}{2}$ ?

1. \_\_\_\_\_

2. \_\_\_\_\_

3. \_\_\_\_\_

4. \_\_\_\_\_

5. \_\_\_\_\_

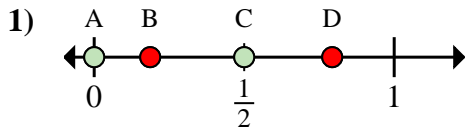
6. \_\_\_\_\_

7. \_\_\_\_\_

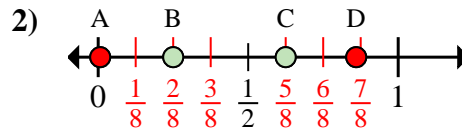
8. \_\_\_\_\_



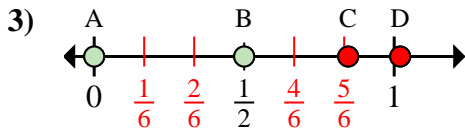
Determine which letter best shows the location of the fraction.

**Answers**

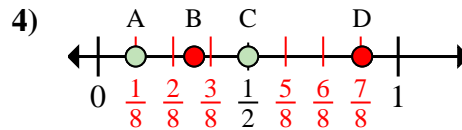
- a. Which letter best shows  $\frac{0}{2}$ ?  
b. Which letter best shows  $\frac{1}{2}$ ?



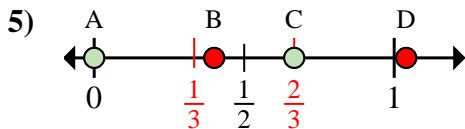
- a. Which letter best shows  $\frac{2}{8}$ ?  
b. Which letter best shows  $\frac{5}{8}$ ?



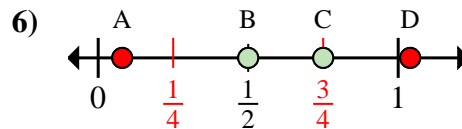
- a. Which letter best shows  $\frac{0}{6}$ ?  
b. Which letter best shows  $\frac{3}{6}$ ?



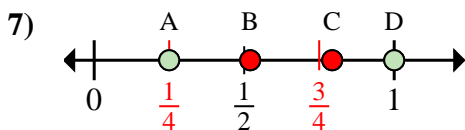
- a. Which letter best shows  $\frac{1}{8}$ ?  
b. Which letter best shows  $\frac{4}{8}$ ?



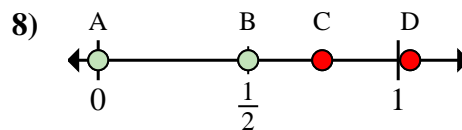
- a. Which letter best shows  $\frac{0}{3}$ ?  
b. Which letter best shows  $\frac{2}{3}$ ?



- a. Which letter best shows  $\frac{2}{4}$ ?  
b. Which letter best shows  $\frac{3}{4}$ ?



- a. Which letter best shows  $\frac{1}{4}$ ?  
b. Which letter best shows  $\frac{4}{4}$ ?



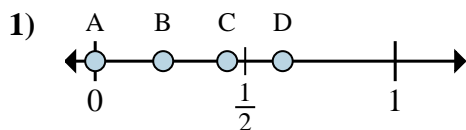
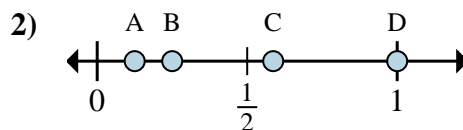
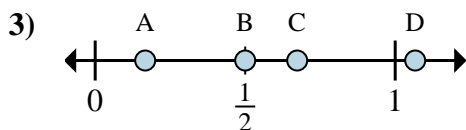
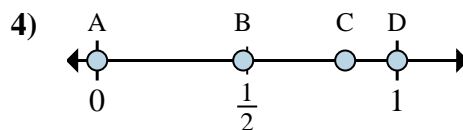
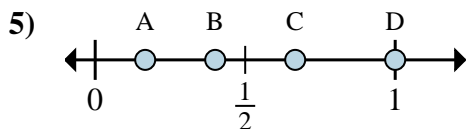
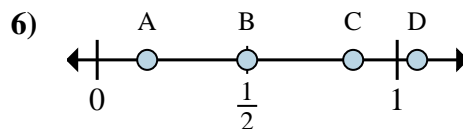
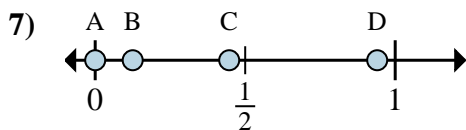
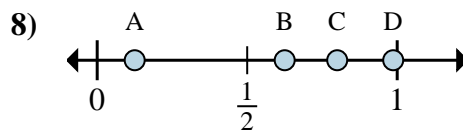
- a. Which letter best shows  $\frac{0}{2}$ ?  
b. Which letter best shows  $\frac{1}{2}$ ?

1. **A** **C**  
2. **B** **C**  
3. **A** **B**  
4. **A** **C**  
5. **A** **C**  
6. **B** **C**  
7. **A** **D**  
8. **A** **B**





Determine which letter best shows the location of the fraction.

**Answers**a. Which letter best shows  $\frac{0}{8}$ ?b. Which letter best shows  $\frac{5}{8}$ ?a. Which letter best shows  $\frac{1}{8}$ ?b. Which letter best shows  $\frac{2}{8}$ ?a. Which letter best shows  $\frac{1}{6}$ ?b. Which letter best shows  $\frac{3}{6}$ ?a. Which letter best shows  $\frac{0}{2}$ ?b. Which letter best shows  $\frac{2}{2}$ ?a. Which letter best shows  $\frac{3}{3}$ ?b. Which letter best shows  $\frac{2}{3}$ ?a. Which letter best shows  $\frac{3}{6}$ ?b. Which letter best shows  $\frac{1}{6}$ ?a. Which letter best shows  $\frac{0}{8}$ ?b. Which letter best shows  $\frac{1}{8}$ ?a. Which letter best shows  $\frac{5}{8}$ ?b. Which letter best shows  $\frac{1}{8}$ ?

1. \_\_\_\_\_

2. \_\_\_\_\_

3. \_\_\_\_\_

4. \_\_\_\_\_

5. \_\_\_\_\_

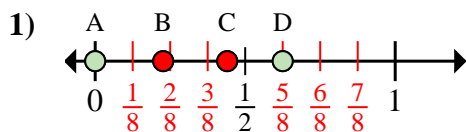
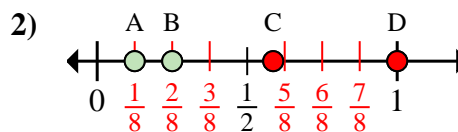
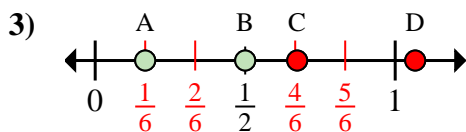
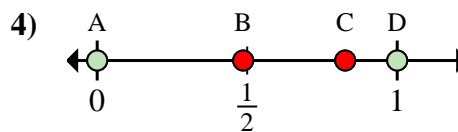
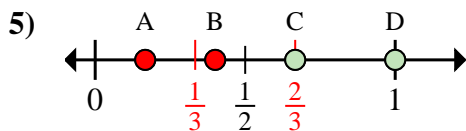
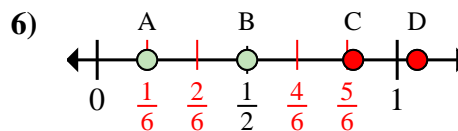
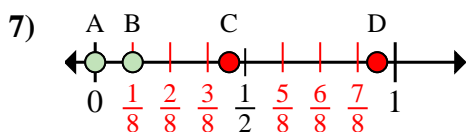
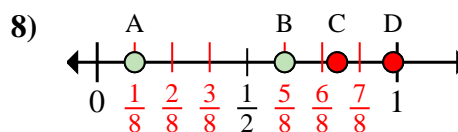
6. \_\_\_\_\_

7. \_\_\_\_\_

8. \_\_\_\_\_

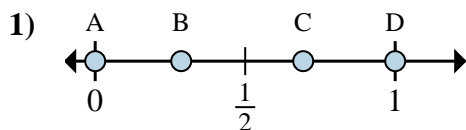
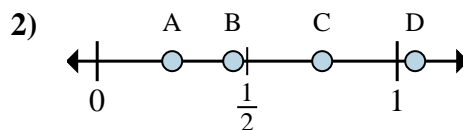
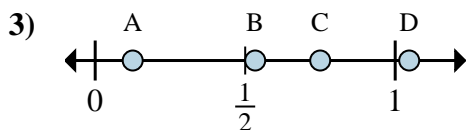
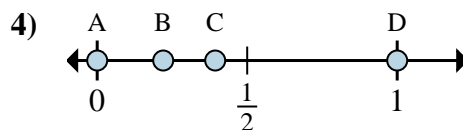
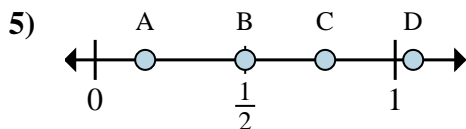
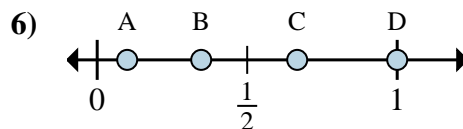
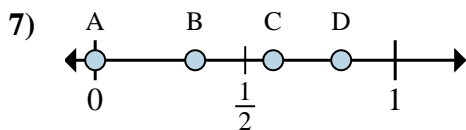
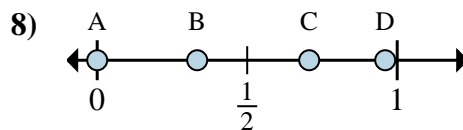


Determine which letter best shows the location of the fraction.

**Answers**a. Which letter best shows  $\frac{0}{8}$ ?b. Which letter best shows  $\frac{5}{8}$ ?a. Which letter best shows  $\frac{1}{8}$ ?b. Which letter best shows  $\frac{2}{8}$ ?a. Which letter best shows  $\frac{1}{6}$ ?b. Which letter best shows  $\frac{3}{6}$ ?a. Which letter best shows  $\frac{0}{2}$ ?b. Which letter best shows  $\frac{2}{2}$ ?a. Which letter best shows  $\frac{3}{3}$ ?b. Which letter best shows  $\frac{2}{3}$ ?a. Which letter best shows  $\frac{3}{6}$ ?b. Which letter best shows  $\frac{1}{6}$ ?a. Which letter best shows  $\frac{0}{8}$ ?b. Which letter best shows  $\frac{1}{8}$ ?a. Which letter best shows  $\frac{5}{8}$ ?b. Which letter best shows  $\frac{1}{8}$ ?1. **A** **D**2. **A** **B**3. **A** **B**4. **A** **D**5. **D** **C**6. **B** **A**7. **A** **B**8. **B** **A**



Determine which letter best shows the location of the fraction.

**Answers**a. Which letter best shows  $\frac{0}{2}$ ?b. Which letter best shows  $\frac{2}{2}$ ?a. Which letter best shows  $\frac{1}{4}$ ?b. Which letter best shows  $\frac{3}{4}$ ?a. Which letter best shows  $\frac{6}{8}$ ?b. Which letter best shows  $\frac{1}{8}$ ?a. Which letter best shows  $\frac{0}{2}$ ?b. Which letter best shows  $\frac{2}{2}$ ?a. Which letter best shows  $\frac{3}{6}$ ?b. Which letter best shows  $\frac{1}{6}$ ?a. Which letter best shows  $\frac{2}{3}$ ?b. Which letter best shows  $\frac{3}{3}$ ?a. Which letter best shows  $\frac{0}{3}$ ?b. Which letter best shows  $\frac{1}{3}$ ?a. Which letter best shows  $\frac{0}{6}$ ?b. Which letter best shows  $\frac{2}{6}$ ?

1. \_\_\_\_\_

2. \_\_\_\_\_

3. \_\_\_\_\_

4. \_\_\_\_\_

5. \_\_\_\_\_

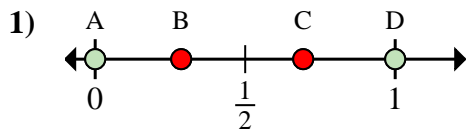
6. \_\_\_\_\_

7. \_\_\_\_\_

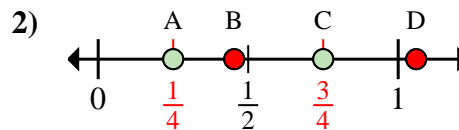
8. \_\_\_\_\_



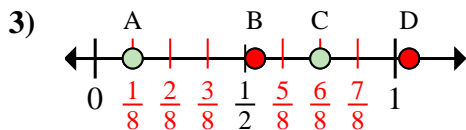
Determine which letter best shows the location of the fraction.

**Answers**

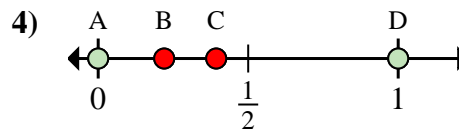
- a. Which letter best shows  $\frac{0}{2}$ ?  
b. Which letter best shows  $\frac{2}{2}$ ?



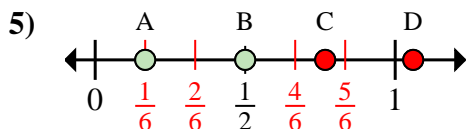
- a. Which letter best shows  $\frac{1}{4}$ ?  
b. Which letter best shows  $\frac{3}{4}$ ?



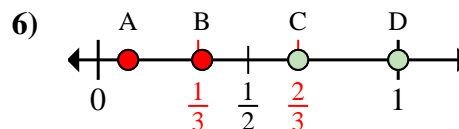
- a. Which letter best shows  $\frac{6}{8}$ ?  
b. Which letter best shows  $\frac{1}{8}$ ?



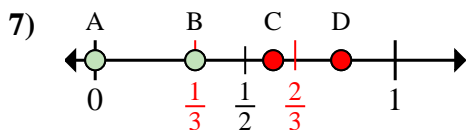
- a. Which letter best shows  $\frac{0}{2}$ ?  
b. Which letter best shows  $\frac{2}{2}$ ?



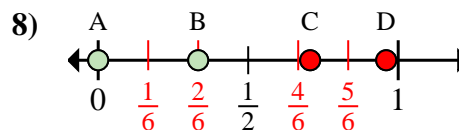
- a. Which letter best shows  $\frac{3}{6}$ ?  
b. Which letter best shows  $\frac{1}{6}$ ?



- a. Which letter best shows  $\frac{2}{3}$ ?  
b. Which letter best shows  $\frac{3}{3}$ ?



- a. Which letter best shows  $\frac{0}{3}$ ?  
b. Which letter best shows  $\frac{1}{3}$ ?



- a. Which letter best shows  $\frac{0}{6}$ ?  
b. Which letter best shows  $\frac{2}{6}$ ?

1. **A** **D**  
2. **A** **C**  
3. **C** **A**  
4. **A** **D**  
5. **B** **A**  
6. **C** **D**  
7. **A** **B**  
8. **A** **B**