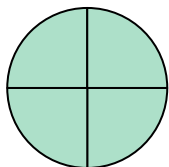



**Determine which letter best describes the shaded portion.****Answers**

1)



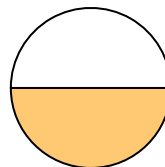
- A. one-fourth
B. three-fourths
C. four-fourths

2)




- A. three-quarters
B. one-quarter
C. one-half

3)




- A. two-quarters
B. three-quarters
C. one-half

4)



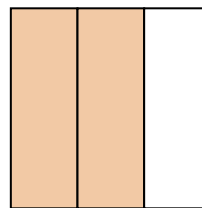
- A. two-halves
B. one-half
C. three-thirds

5)



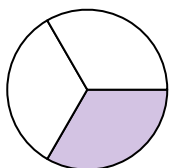
- A. two-halves
B. one-quarter
C. two-fourths

6)



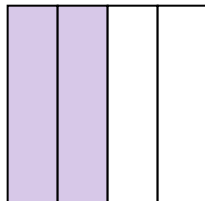
- A. two-thirds
B. two-halves
C. one-fourth

7)



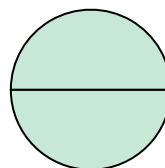
- A. four-fourths
B. two-halves
C. one-third

8)



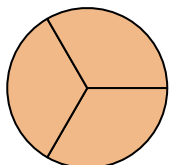
- A. one-half
B. two-quarters
C. three-quarters

9)



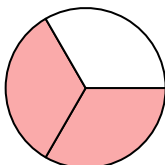
- A. two-quarters
B. four-fourths
C. two-halves

10)



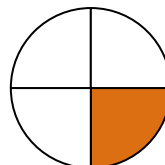
- A. three-thirds
B. one-fourth
C. two-halves

11)



- A. one-quarter
B. two-thirds
C. four-quarters

12)



- A. one-fourth
B. three-quarters
C. two-halves

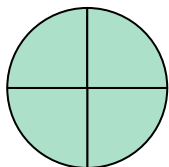
1. _____
2. _____
3. _____
4. _____
5. _____
6. _____
7. _____
8. _____
9. _____
10. _____
11. _____
12. _____



Determine which letter best describes the shaded portion.


Answers

1)



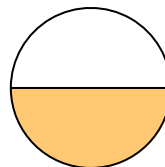
- A. one-fourth
B. three-fourths
C. four-fourths

2)




- A. three-quarters
B. one-quarter
C. one-half

3)




- A. two-quarters
B. three-quarters
C. one-half

4)



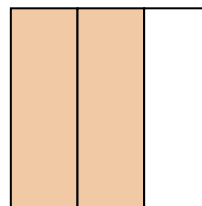
- A. two-halves
B. one-half
C. three-thirds

5)



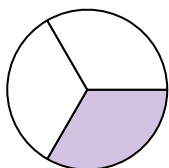
- A. two-halves
B. one-quarter
C. two-fourths

6)



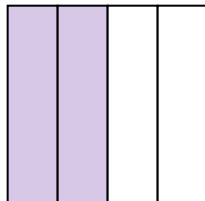
- A. two-thirds
B. two-halves
C. one-fourth

7)



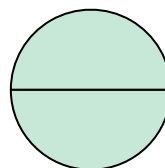
- A. four-fourths
B. two-halves
C. one-third

8)



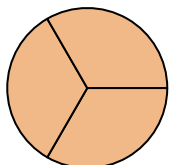
- A. one-half
B. two-quarters
C. three-quarters

9)



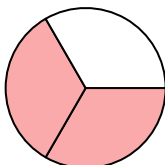
- A. two-quarters
B. four-fourths
C. two-halves

10)



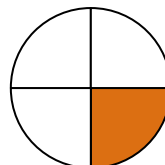
- A. three-thirds
B. one-fourth
C. two-halves

11)



- A. one-quarter
B. two-thirds
C. four-quarters

12)



- A. one-fourth
B. three-quarters
C. two-halves

1. **C**
2. **C**
3. **C**
4. **C**
5. **A**
6. **A**
7. **C**
8. **B**
9. **C**
10. **A**
11. **B**
12. **A**