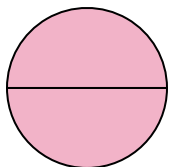



**Determine which letter best describes the shaded portion.****Answers**

1)



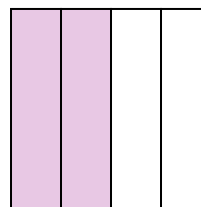
- A. two-halves  
B. one-quarter  
C. two-quarters

2)



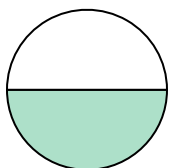
- A. one-half  
B. three-fourths  
C. two-halves

3)



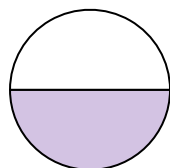
- A. two-fourths  
B. one-fourth  
C. three-fourths

4)



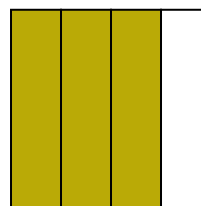
- A. two-fourths  
B. four-fourths  
C. one-half

5)



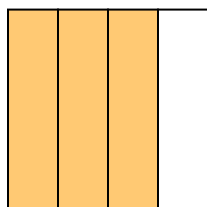
- A. four-fourths  
B. one-half  
C. two-quarters

6)



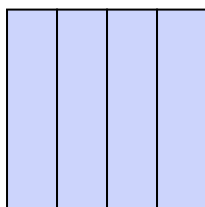
- A. one-fourth  
B. two-fourths  
C. three-fourths

7)



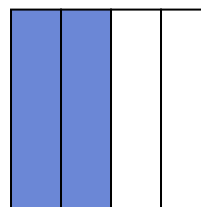
- A. two-fourths  
B. four-quarters  
C. three-quarters

8)



- A. two-quarters  
B. one-half  
C. four-quarters

9)



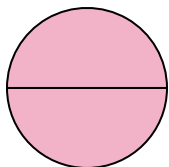
- A. two-halves  
B. two-fourths  
C. one-fourth

1. \_\_\_\_\_  
2. \_\_\_\_\_  
3. \_\_\_\_\_  
4. \_\_\_\_\_  
5. \_\_\_\_\_  
6. \_\_\_\_\_  
7. \_\_\_\_\_  
8. \_\_\_\_\_  
9. \_\_\_\_\_




Determine which letter best describes the shaded portion.

1)



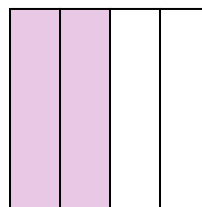
- A. two-halves  
B. one-quarter  
C. two-quarters

2)



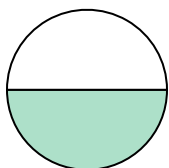
- A. one-half  
B. three-fourths  
C. two-halves

3)



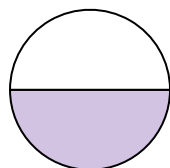
- A. two-fourths  
B. one-fourth  
C. three-fourths

4)



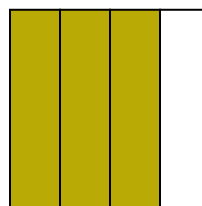
- A. two-fourths  
B. four-fourths  
C. one-half

5)



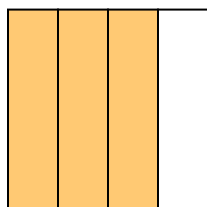
- A. four-fourths  
B. one-half  
C. two-quarters

6)



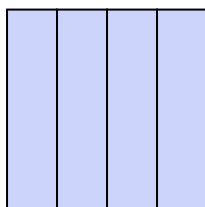
- A. one-fourth  
B. two-fourths  
C. three-fourths

7)



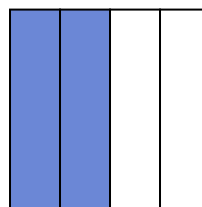
- A. two-fourths  
B. four-quarters  
C. three-quarters

8)



- A. two-quarters  
B. one-half  
C. four-quarters

9)

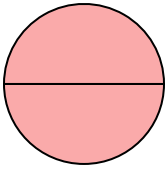


- A. two-halves  
B. two-fourths  
C. one-fourth

**Answers**1. **A**2. **C**3. **A**4. **C**5. **B**6. **C**7. **C**8. **C**9. **B**


**Determine which letter best describes the shaded portion.****Answers**

1)



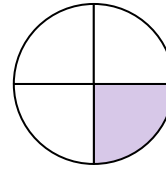
- A. one-half  
B. two-quarters  
C. two-halves

2)



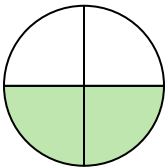
- A. two-quarters  
B. four-fourths  
C. one-half

3)




- A. two-quarters  
B. one-quarter  
C. one-half

4)




- A. four-fourths  
B. two-fourths  
C. one-half

5)



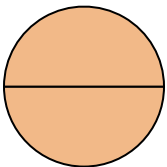
- A. one-half  
B. three-quarters  
C. one-fourth

6)



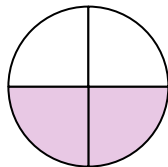
- A. one-half  
B. three-fourths  
C. four-quarters

7)



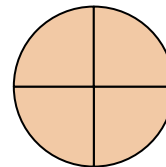
- A. two-quarters  
B. two-halves  
C. one-half

8)



- A. two-fourths  
B. one-half  
C. four-fourths

9)



- A. three-quarters  
B. two-halves  
C. four-fourths

1. \_\_\_\_\_

2. \_\_\_\_\_

3. \_\_\_\_\_

4. \_\_\_\_\_

5. \_\_\_\_\_

6. \_\_\_\_\_

7. \_\_\_\_\_

8. \_\_\_\_\_

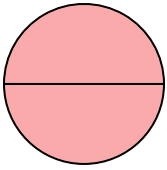
9. \_\_\_\_\_



Determine which letter best describes the shaded portion.


**Answers**

1)



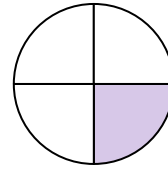
- A. one-half  
B. two-quarters  
C. two-halves

2)



- A. two-quarters  
B. four-fourths  
C. one-half

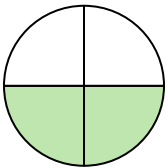
3)



- A. two-quarters  
B. one-quarter  
C. one-half


1. **C**2. **C**3. **B**4. **B**5. **A**6. **B**7. **B**8. **A**9. **C**

4)



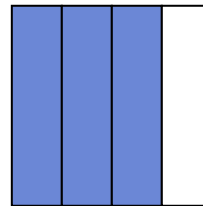
- A. four-fourths  
B. two-fourths  
C. one-half

5)



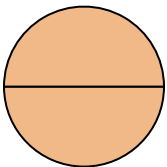
- A. one-half  
B. three-quarters  
C. one-fourth

6)



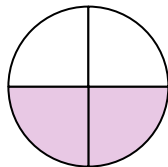
- A. one-half  
B. three-fourths  
C. four-quarters

7)



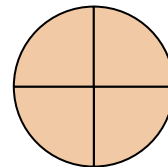
- A. two-quarters  
B. two-halves  
C. one-half

8)



- A. two-fourths  
B. one-half  
C. four-fourths

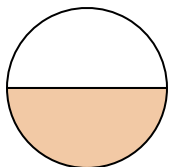
9)



- A. three-quarters  
B. two-halves  
C. four-fourths


**Determine which letter best describes the shaded portion.****Answers**

1)



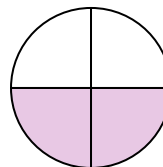
- A. three-fourths  
B. one-half  
C. two-fourths

2)



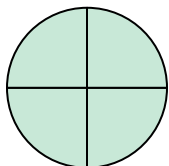
- A. one-quarter  
B. three-quarters  
C. two-halves

3)



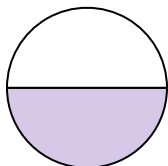
- A. one-fourth  
B. one-half  
C. two-quarters

4)




- A. two-halves  
B. four-fourths  
C. three-fourths

5)




- A. one-half  
B. two-quarters  
C. four-fourths

6)



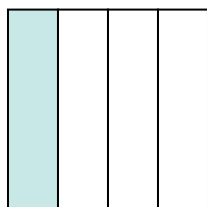
- A. two-halves  
B. one-fourth  
C. two-quarters

7)



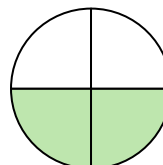
- A. one-half  
B. two-halves  
C. one-fourth

8)



- A. one-quarter  
B. three-quarters  
C. two-halves

9)



- A. two-fourths  
B. one-quarter  
C. one-half

1. \_\_\_\_\_

2. \_\_\_\_\_

3. \_\_\_\_\_

4. \_\_\_\_\_

5. \_\_\_\_\_

6. \_\_\_\_\_

7. \_\_\_\_\_

8. \_\_\_\_\_

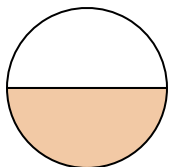
9. \_\_\_\_\_



Determine which letter best describes the shaded portion.


**Answers**

1)



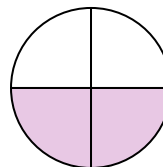
- A. three-fourths  
B. one-half  
C. two-fourths

2)



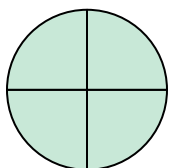
- A. one-quarter  
B. three-quarters  
C. two-halves

3)



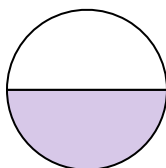
- A. one-fourth  
B. one-half  
C. two-quarters

4)




- A. two-halves  
B. four-fourths  
C. three-fourths

5)




- A. one-half  
B. two-quarters  
C. four-fourths

6)



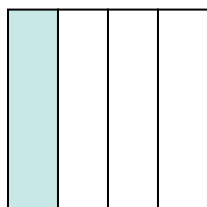
- A. two-halves  
B. one-fourth  
C. two-quarters

7)



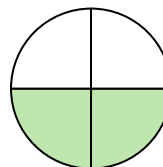
- A. one-half  
B. two-halves  
C. one-fourth

8)



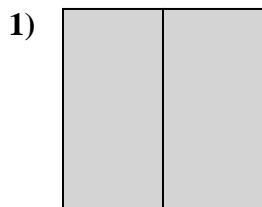
- A. one-quarter  
B. three-quarters  
C. two-halves

9)

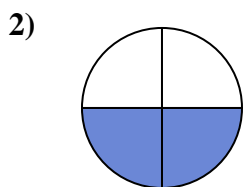


- A. two-fourths  
B. one-quarter  
C. one-half

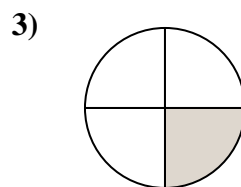
1. **B**2. **A**3. **C**4. **B**5. **A**6. **A**7. **B**8. **A**9. **A**

**Determine which letter best describes the shaded portion.****Answers**

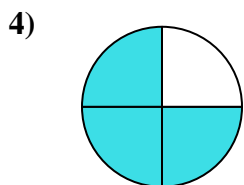
- A. two-quarters  
B. two-halves  
C. three-fourths



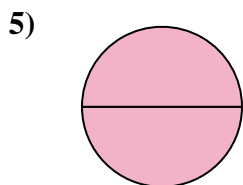
- A. four-fourths  
B. three-fourths  
C. two-fourths



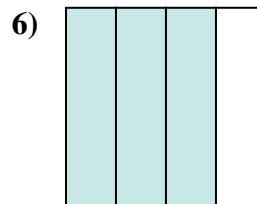
- A. two-quarters  
B. one-fourth  
C. two-halves



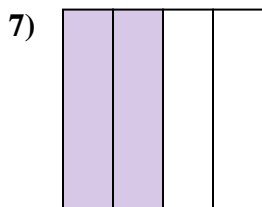
- A. two-fourths  
B. three-fourths  
C. two-halves



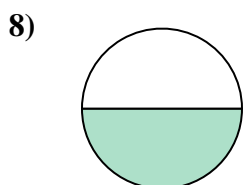
- A. one-fourth  
B. three-fourths  
C. two-halves



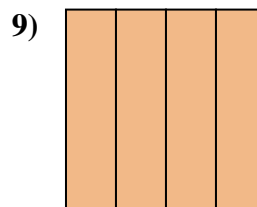
- A. one-fourth  
B. three-fourths  
C. two-halves



- A. one-quarter  
B. three-fourths  
C. two-quarters



- A. two-halves  
B. one-half  
C. two-fourths



- A. four-quarters  
B. three-quarters  
C. one-half

1. \_\_\_\_\_

2. \_\_\_\_\_

3. \_\_\_\_\_

4. \_\_\_\_\_

5. \_\_\_\_\_

6. \_\_\_\_\_

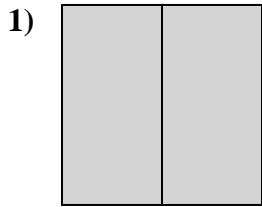
7. \_\_\_\_\_

8. \_\_\_\_\_

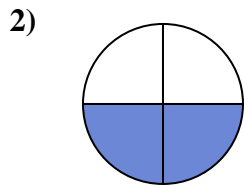
9. \_\_\_\_\_



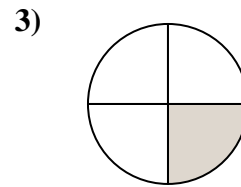
Determine which letter best describes the shaded portion.



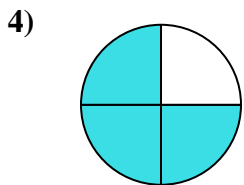
- A. two-quarters  
B. two-halves  
C. three-fourths



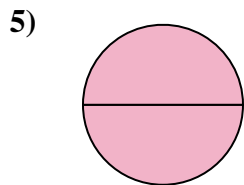
- A. four-fourths  
B. three-fourths  
C. two-fourths



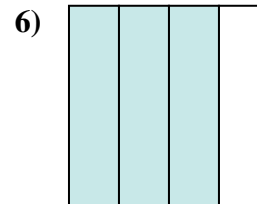
- A. two-quarters  
B. one-fourth  
C. two-halves



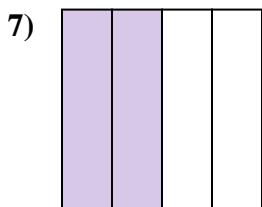
- A. two-fourths  
B. three-fourths  
C. two-halves



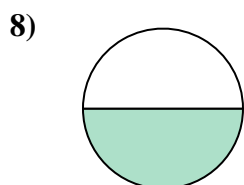
- A. one-fourth  
B. three-fourths  
C. two-halves



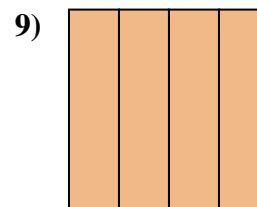
- A. one-fourth  
B. three-fourths  
C. two-halves



- A. one-quarter  
B. three-fourths  
C. two-quarters



- A. two-halves  
B. one-half  
C. two-fourths



- A. four-quarters  
B. three-quarters  
C. one-half

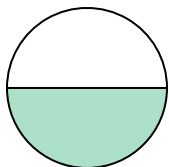
**Answers**

1. **B**  
2. **C**  
3. **B**  
4. **B**  
5. **C**  
6. **B**  
7. **C**  
8. **B**  
9. **A**



**Determine which letter best describes the shaded portion.****Answers**

1)



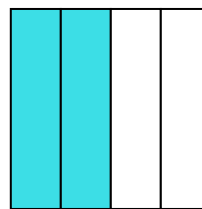
- A. one-half  
B. two-halves  
C. four-quarters

2)



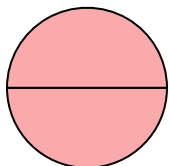
- A. two-halves  
B. one-half  
C. one-fourth

3)



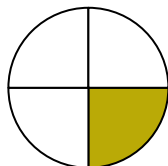
- A. three-quarters  
B. one-quarter  
C. two-quarters

4)



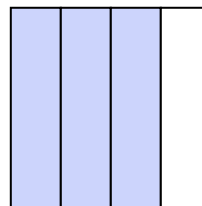
- A. two-halves  
B. three-fourths  
C. one-quarter

5)



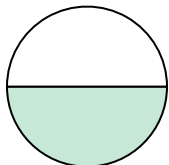
- A. four-fourths  
B. one-fourth  
C. two-quarters

6)



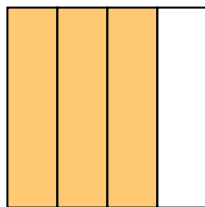
- A. three-fourths  
B. four-fourths  
C. one-half

7)



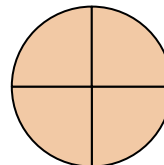
- A. two-quarters  
B. two-halves  
C. one-half

8)



- A. three-fourths  
B. one-quarter  
C. two-halves

9)



- A. two-halves  
B. three-fourths  
C. four-fourths

1. \_\_\_\_\_

2. \_\_\_\_\_

3. \_\_\_\_\_

4. \_\_\_\_\_

5. \_\_\_\_\_

6. \_\_\_\_\_

7. \_\_\_\_\_

8. \_\_\_\_\_

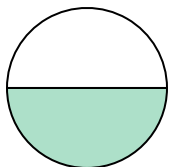
9. \_\_\_\_\_



Determine which letter best describes the shaded portion.


**Answers**

1)



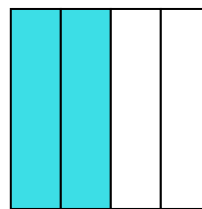
- A. one-half  
B. two-halves  
C. four-quarters

2)



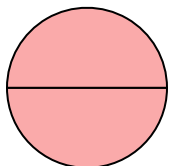
- A. two-halves  
B. one-half  
C. one-fourth

3)



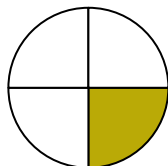
- A. three-quarters  
B. one-quarter  
C. two-quarters

4)



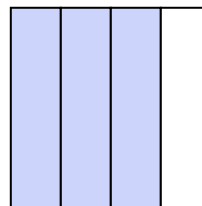
- A. two-halves  
B. three-fourths  
C. one-quarter

5)



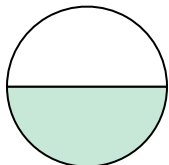
- A. four-fourths  
B. one-fourth  
C. two-quarters

6)



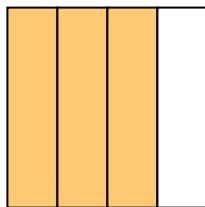
- A. three-fourths  
B. four-fourths  
C. one-half

7)



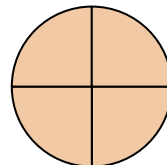
- A. two-quarters  
B. two-halves  
C. one-half

8)



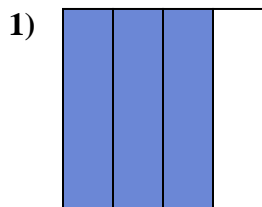
- A. three-fourths  
B. one-quarter  
C. two-halves

9)

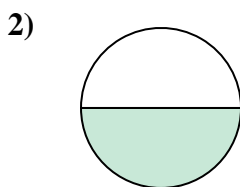


- A. two-halves  
B. three-fourths  
C. four-fourths

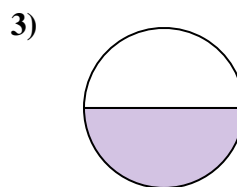
1. **A**2. **A**3. **C**4. **A**5. **B**6. **A**7. **C**8. **A**9. **C**

**Determine which letter best describes the shaded portion.****Answers**

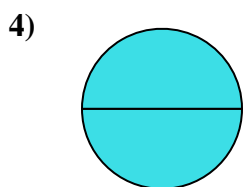
- A. four-fourths  
B. three-quarters  
C. one-quarter



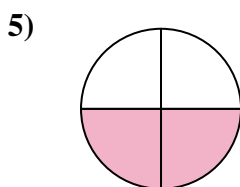
- A. one-half  
B. two-fourths  
C. one-fourth



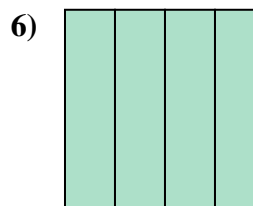
- A. four-fourths  
B. one-half  
C. two-halves



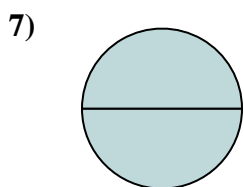
- A. one-quarter  
B. four-quarters  
C. two-halves



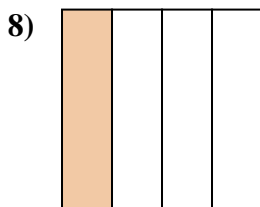
- A. two-quarters  
B. one-half  
C. four-quarters



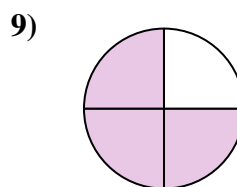
- A. four-quarters  
B. one-quarter  
C. one-half



- A. two-halves  
B. one-half  
C. three-quarters



- A. two-halves  
B. one-fourth  
C. two-quarters

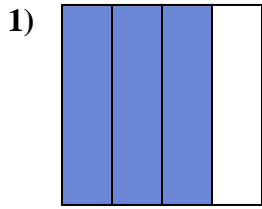


- A. four-fourths  
B. three-quarters  
C. two-halves

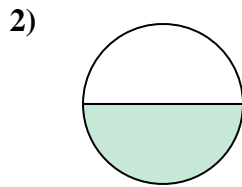
1. \_\_\_\_\_  
2. \_\_\_\_\_  
3. \_\_\_\_\_  
4. \_\_\_\_\_  
5. \_\_\_\_\_  
6. \_\_\_\_\_  
7. \_\_\_\_\_  
8. \_\_\_\_\_  
9. \_\_\_\_\_



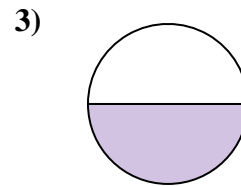
Determine which letter best describes the shaded portion.



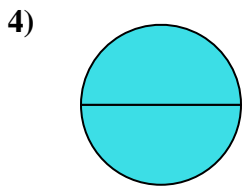
- A. four-fourths  
B. three-quarters  
C. one-quarter



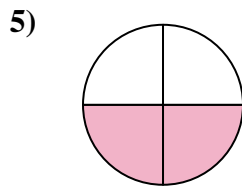
- A. one-half  
B. two-fourths  
C. one-fourth



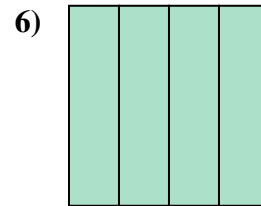
- A. four-fourths  
B. one-half  
C. two-halves



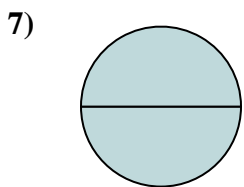
- A. one-quarter  
B. four-quarters  
C. two-halves



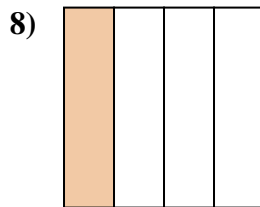
- A. two-quarters  
B. one-half  
C. four-quarters



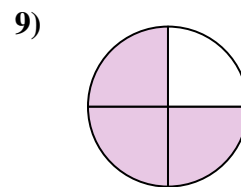
- A. four-quarters  
B. one-quarter  
C. one-half



- A. two-halves  
B. one-half  
C. three-quarters



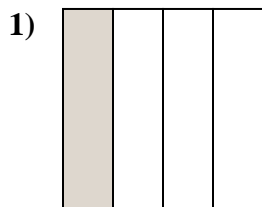
- A. two-halves  
B. one-fourth  
C. two-quarters



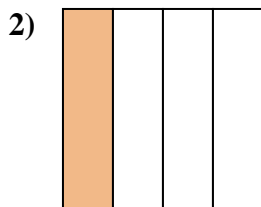
- A. four-fourths  
B. three-quarters  
C. two-halves

**Answers**

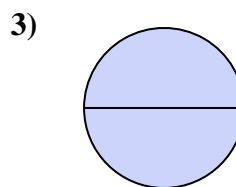
1. **B**  
2. **A**  
3. **B**  
4. **C**  
5. **A**  
6. **A**  
7. **A**  
8. **B**  
9. **B**

**Determine which letter best describes the shaded portion.****Answers**

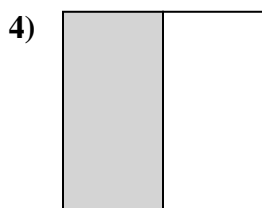
- A. one-fourth  
B. three-fourths  
C. one-half



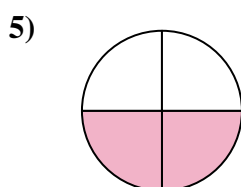
- A. one-half  
B. one-fourth  
C. two-halves



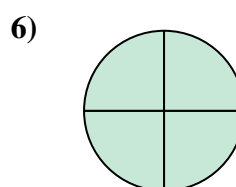
- A. one-half  
B. one-fourth  
C. two-halves



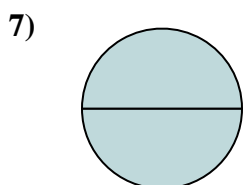
- A. two-halves  
B. four-fourths  
C. one-half



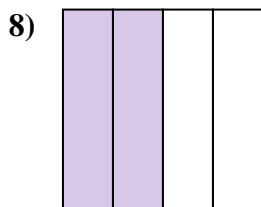
- A. two-quarters  
B. three-fourths  
C. two-halves



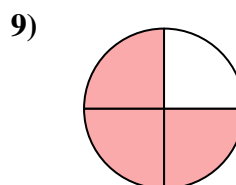
- A. two-quarters  
B. four-fourths  
C. one-half



- A. one-quarter  
B. two-halves  
C. three-fourths



- A. four-quarters  
B. two-quarters  
C. two-halves

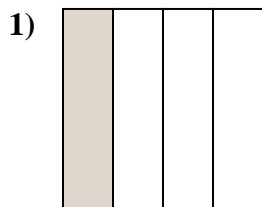


- A. two-halves  
B. three-fourths  
C. two-fourths

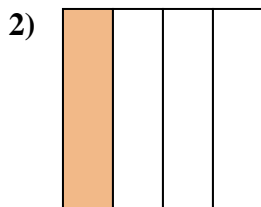
1. \_\_\_\_\_  
2. \_\_\_\_\_  
3. \_\_\_\_\_  
4. \_\_\_\_\_  
5. \_\_\_\_\_  
6. \_\_\_\_\_  
7. \_\_\_\_\_  
8. \_\_\_\_\_  
9. \_\_\_\_\_



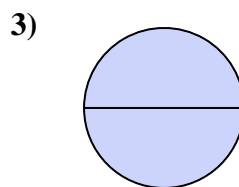
Determine which letter best describes the shaded portion.



- A. one-fourth  
B. three-fourths  
C. one-half



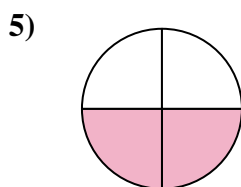
- A. one-half  
B. one-fourth  
C. two-halves



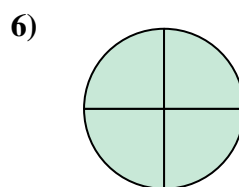
- A. one-half  
B. one-fourth  
C. two-halves



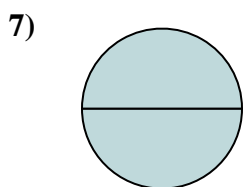
- A. two-halves  
B. four-fourths  
C. one-half



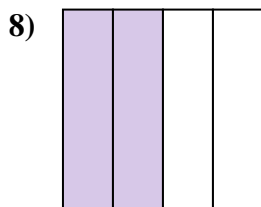
- A. two-quarters  
B. three-fourths  
C. two-halves



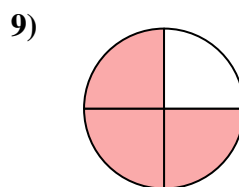
- A. two-quarters  
B. four-fourths  
C. one-half



- A. one-quarter  
B. two-halves  
C. three-fourths



- A. four-quarters  
B. two-quarters  
C. two-halves

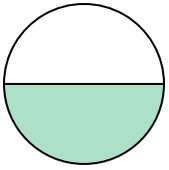


- A. two-halves  
B. three-fourths  
C. two-fourths

**Answers**1. **A**2. **B**3. **C**4. **C**5. **A**6. **B**7. **B**8. **B**9. **B**

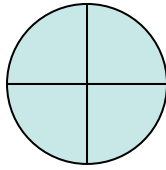
**Determine which letter best describes the shaded portion.****Answers**

1)



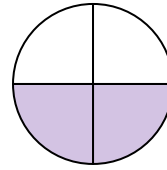
- A. two-fourths  
B. one-half  
C. one-fourth

2)



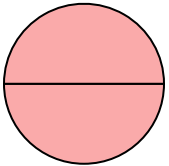
- A. two-halves  
B. four-fourths  
C. one-half

3)



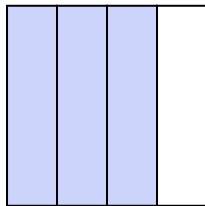
- A. two-fourths  
B. three-fourths  
C. one-quarter

4)




- A. four-quarters  
B. two-quarters  
C. two-halves

5)




- A. three-fourths  
B. two-fourths  
C. four-fourths

6)



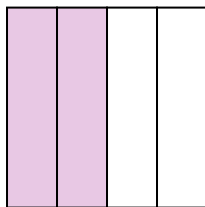
- A. one-fourth  
B. two-halves  
C. one-half

7)



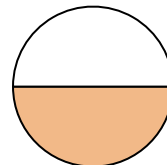
- A. two-fourths  
B. four-quarters  
C. three-quarters

8)



- A. one-half  
B. two-fourths  
C. three-quarters

9)



- A. two-halves  
B. two-fourths  
C. one-half

1. \_\_\_\_\_

2. \_\_\_\_\_

3. \_\_\_\_\_

4. \_\_\_\_\_

5. \_\_\_\_\_

6. \_\_\_\_\_

7. \_\_\_\_\_

8. \_\_\_\_\_

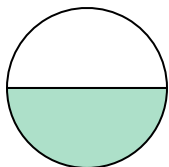
9. \_\_\_\_\_



Determine which letter best describes the shaded portion.

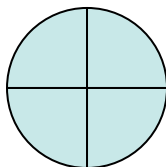
**Answers**

1)



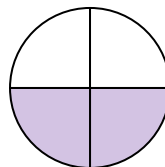
- A. two-fourths  
B. one-half  
C. one-fourth

2)



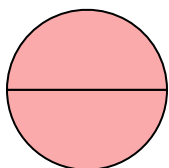
- A. two-halves  
B. four-fourths  
C. one-half

3)



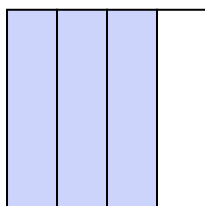
- A. two-fourths  
B. three-fourths  
C. one-quarter

4)




- A. four-quarters  
B. two-quarters  
C. two-halves

5)




- A. three-fourths  
B. two-fourths  
C. four-fourths

6)



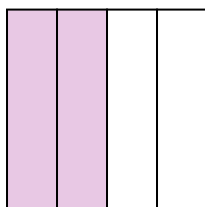
- A. one-fourth  
B. two-halves  
C. one-half

7)



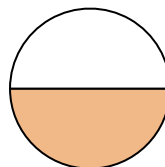
- A. two-fourths  
B. four-quarters  
C. three-quarters

8)



- A. one-half  
B. two-fourths  
C. three-quarters


9)



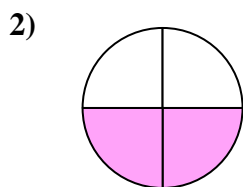
- A. two-halves  
B. two-fourths  
C. one-half

1. **B**2. **B**3. **A**4. **C**5. **A**6. **B**7. **B**8. **B**9. **C**

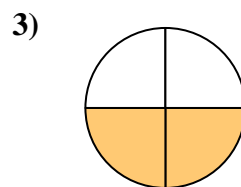


**Determine which letter best describes the shaded portion.****Answers**


- A. two-halves  
B. one-fourth  
C. one-half



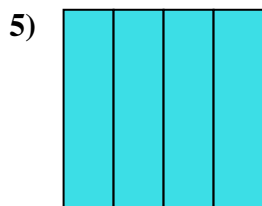
- A. two-fourths  
B. two-halves  
C. one-half



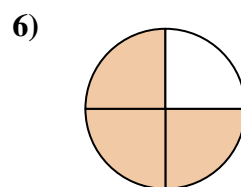
- A. two-quarters  
B. two-halves  
C. one-quarter



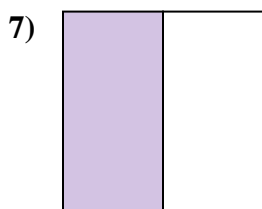
- A. three-quarters  
B. one-half  
C. four-fourths



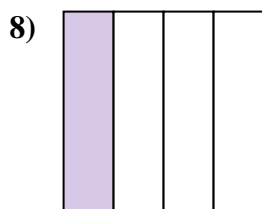
- A. two-quarters  
B. four-quarters  
C. two-halves



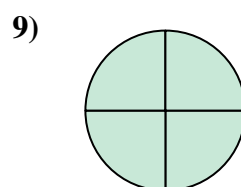
- A. three-quarters  
B. four-quarters  
C. one-quarter



- A. three-quarters  
B. four-fourths  
C. one-half




- A. two-fourths  
B. three-quarters  
C. one-fourth

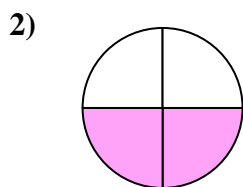


- A. three-fourths  
B. two-halves  
C. four-fourths

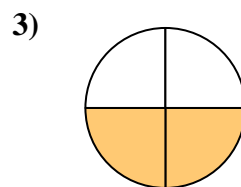
1. \_\_\_\_\_  
2. \_\_\_\_\_  
3. \_\_\_\_\_  
4. \_\_\_\_\_  
5. \_\_\_\_\_  
6. \_\_\_\_\_  
7. \_\_\_\_\_  
8. \_\_\_\_\_  
9. \_\_\_\_\_

**Determine which letter best describes the shaded portion.**


- A. two-halves  
B. one-fourth  
C. one-half



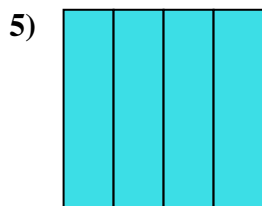
- A. two-fourths  
B. two-halves  
C. one-half



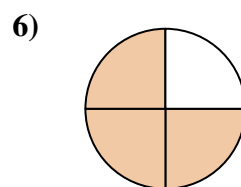
- A. two-quarters  
B. two-halves  
C. one-quarter



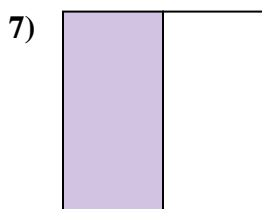
- A. three-quarters  
B. one-half  
C. four-fourths



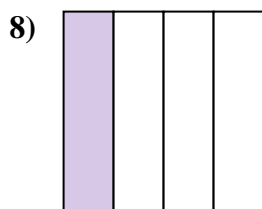
- A. two-quarters  
B. four-quarters  
C. two-halves



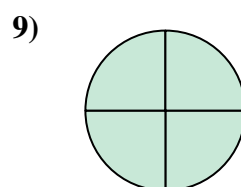
- A. three-quarters  
B. four-quarters  
C. one-quarter



- A. three-quarters  
B. four-fourths  
C. one-half



- A. two-fourths  
B. three-quarters  
C. one-fourth

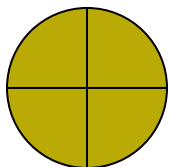


- A. three-fourths  
B. two-halves  
C. four-fourths

**Answers**1. **A**2. **A**3. **A**4. **B**5. **B**6. **A**7. **C**8. **C**9. **C**

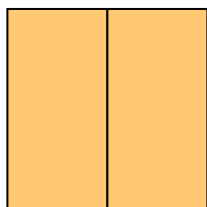
**Determine which letter best describes the shaded portion.****Answers**

1)




- A. two-halves  
B. four-fourths  
C. one-half

2)



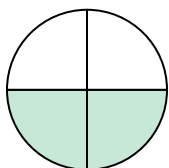
- A. one-quarter  
B. two-fourths  
C. two-halves

3)



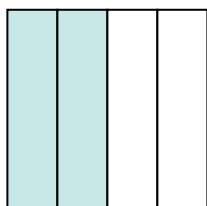
- A. two-halves  
B. two-quarters  
C. four-fourths

4)




- A. two-fourths  
B. one-fourth  
C. one-half

5)




- A. four-quarters  
B. three-quarters  
C. two-fourths

6)



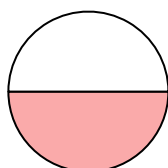
- A. one-half  
B. two-halves  
C. four-fourths

7)



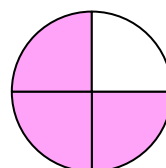
- A. one-half  
B. one-quarter  
C. two-halves

8)



- A. one-half  
B. one-quarter  
C. two-fourths

9)



- A. three-quarters  
B. one-quarter  
C. four-quarters

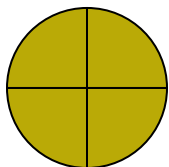
1. \_\_\_\_\_  
2. \_\_\_\_\_  
3. \_\_\_\_\_  
4. \_\_\_\_\_  
5. \_\_\_\_\_  
6. \_\_\_\_\_  
7. \_\_\_\_\_  
8. \_\_\_\_\_  
9. \_\_\_\_\_



Determine which letter best describes the shaded portion.

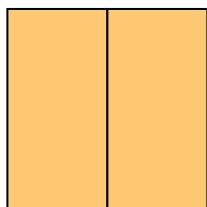
**Answers**

1)




- A. two-halves  
B. four-fourths  
C. one-half

2)



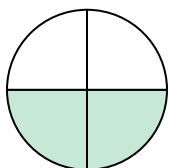
- A. one-quarter  
B. two-fourths  
C. two-halves

3)



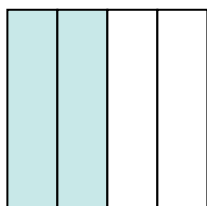
- A. two-halves  
B. two-quarters  
C. four-fourths

4)




- A. two-fourths  
B. one-fourth  
C. one-half

5)




- A. four-quarters  
B. three-quarters  
C. two-fourths

6)



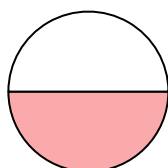
- A. one-half  
B. two-halves  
C. four-fourths

7)



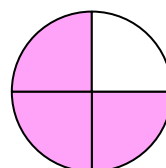
- A. one-half  
B. one-quarter  
C. two-halves

8)



- A. one-half  
B. one-quarter  
C. two-fourths

9)



- A. three-quarters  
B. one-quarter  
C. four-quarters

1. **B**2. **C**3. **C**4. **A**5. **C**6. **A**7. **C**8. **A**9. **A**