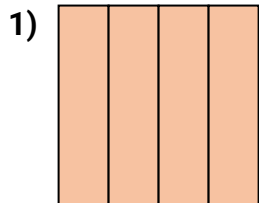
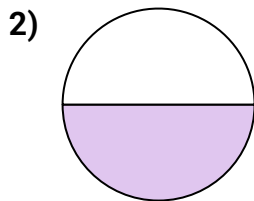



**Determine which letter best describes the shaded portion.****Answers**

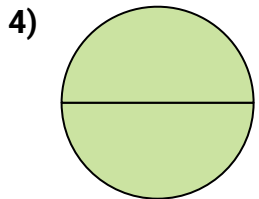
- A. two-halves
B. one-half
C. four-quarters



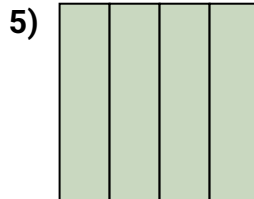
- A. one-half
B. four-fourths
C. two-quarters



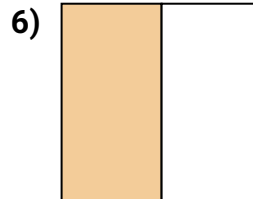
- A. two-halves
B. four-fourths
C. three-quarters



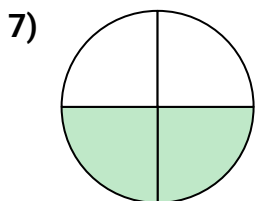
- A. one-fourth
B. three-fourths
C. two-halves



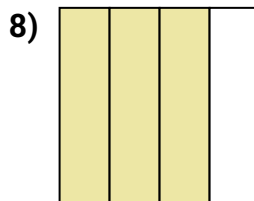
- A. four-fourths
B. two-quarters
C. three-quarters



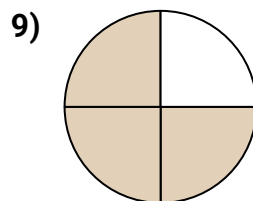
- A. two-quarters
B. two-halves
C. one-half



- A. two-halves
B. four-quarters
C. two-quarters



- A. one-fourth
B. two-quarters
C. three-fourths



- A. one-half
B. two-halves
C. three-fourths

1. _____

2. _____

3. _____

4. _____

5. _____

6. _____

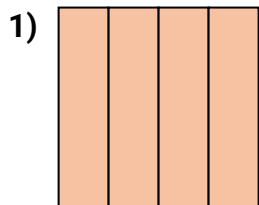
7. _____

8. _____

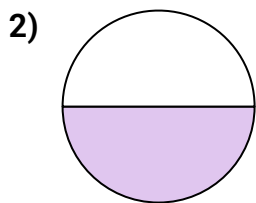
9. _____




Determine which letter best describes the shaded portion.

Answers

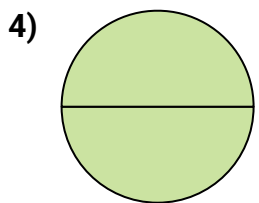
- A. two-halves
B. one-half
C. four-quarters



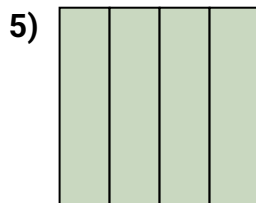
- A. one-half
B. four-fourths
C. two-quarters



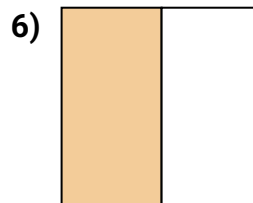
- A. two-halves
B. four-fourths
C. three-quarters



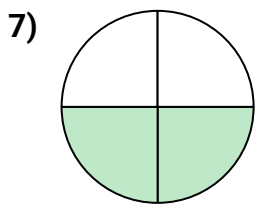
- A. one-fourth
B. three-fourths
C. two-halves



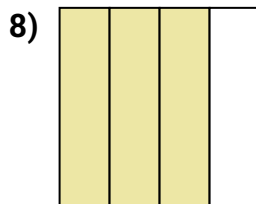
- A. four-fourths
B. two-quarters
C. three-quarters



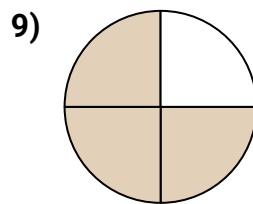
- A. two-quarters
B. two-halves
C. one-half



- A. two-halves
B. four-quarters
C. two-quarters



- A. one-fourth
B. two-quarters
C. three-fourths



- A. one-half
B. two-halves
C. three-fourths

1. **C**2. **A**3. **A**4. **C**5. **A**6. **C**7. **C**8. **C**9. **C**