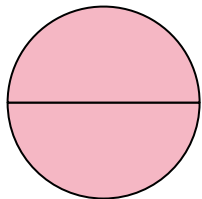




Determine which letter best describes the shaded portion.

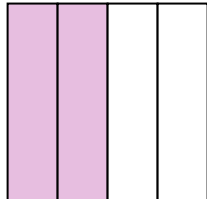
Answers

1)



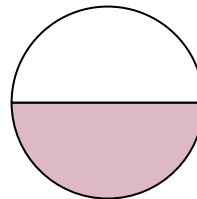
- A. one-half
B. two-halves
C. four-fourths

2)



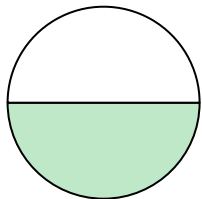
- A. three-fourths
B. two-halves
C. two-quarters

3)




- A. three-quarters
B. two-fourths
C. one-half

4)



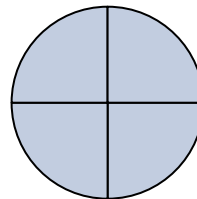
- A. four-fourths
B. one-half
C. one-quarter

5)



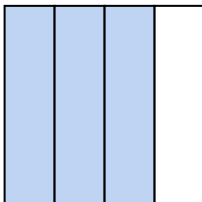
- A. four-quarters
B. two-halves
C. one-quarter

6)



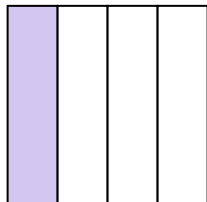
- A. one-half
B. four-quarters
C. three-quarters

7)



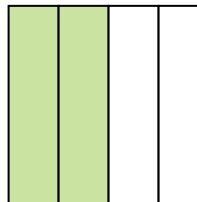
- A. three-quarters
B. one-half
C. two-fourths

8)



- A. three-fourths
B. two-fourths
C. one-fourth

9)



- A. one-quarter
B. four-fourths
C. two-quarters

1. _____

2. _____

3. _____

4. _____

5. _____

6. _____

7. _____

8. _____

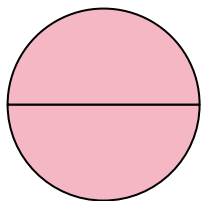
9. _____



Determine which letter best describes the shaded portion.

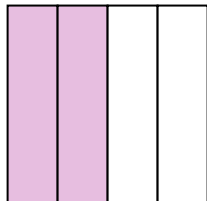
Answers

1)



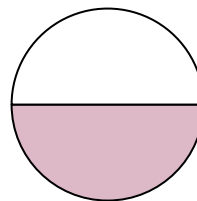
- A. one-half
B. two-halves
C. four-fourths

2)



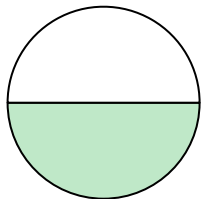
- A. three-fourths
B. two-halves
C. two-quarters

3)




- A. three-quarters
B. two-fourths
C. one-half

4)



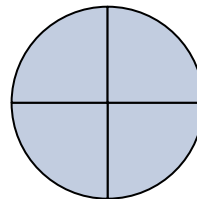
- A. four-fourths
B. one-half
C. one-quarter

5)



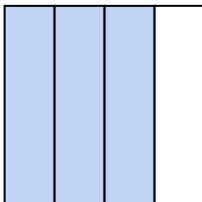
- A. four-quarters
B. two-halves
C. one-quarter

6)



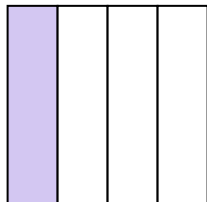
- A. one-half
B. four-quarters
C. three-quarters

7)



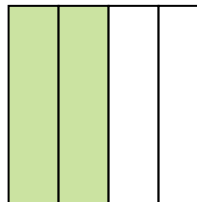
- A. three-quarters
B. one-half
C. two-fourths

8)



- A. three-fourths
B. two-fourths
C. one-fourth

9)



- A. one-quarter
B. four-fourths
C. two-quarters

1. **B**2. **C**3. **C**4. **B**5. **B**6. **B**7. **A**8. **C**9. **C**