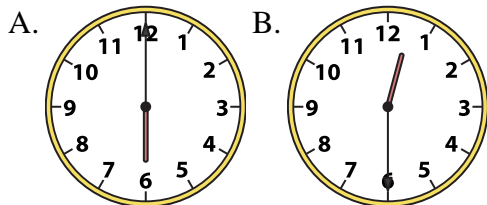




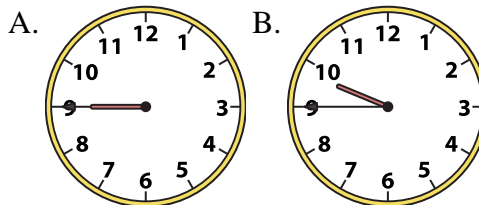
Determine which clock accurately shows the time.

Answers

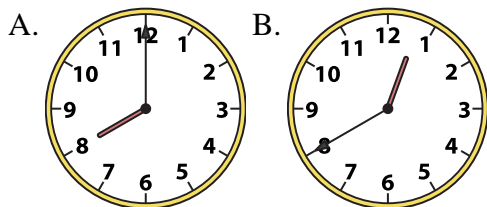
1) 12:30



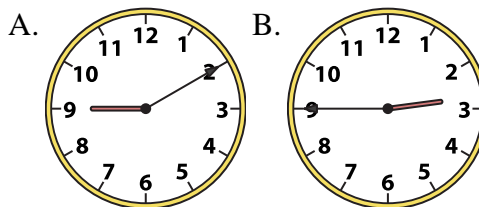
2) 9:45



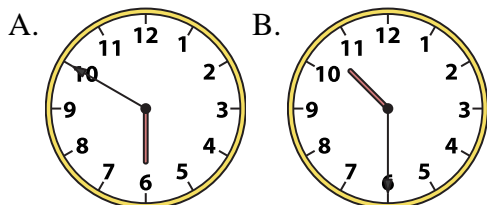
3) 8:00



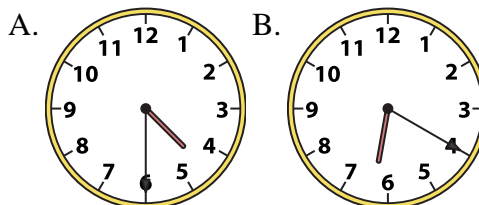
4) 2:45



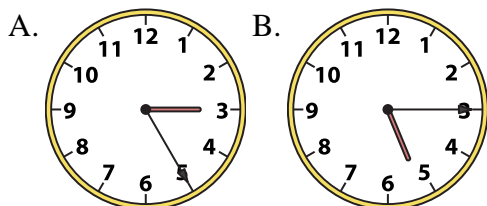
5) 10:30



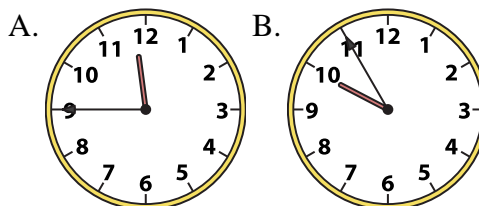
6) 4:30



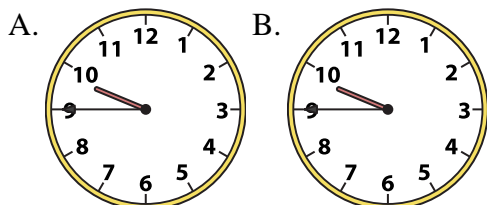
7) 5:15



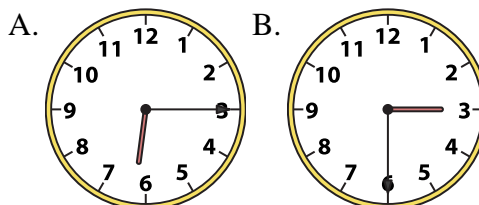
8) 11:45



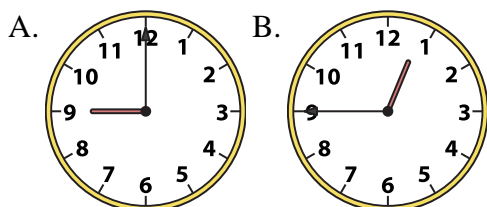
9) 9:45



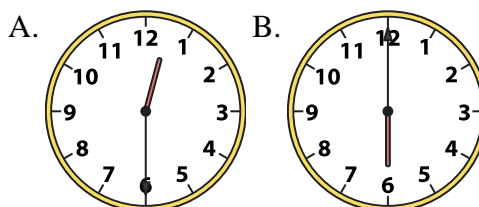
10) 6:15



11) 12:45



12) 6:00



1. _____
2. _____
3. _____
4. _____
5. _____
6. _____
7. _____
8. _____
9. _____
10. _____
11. _____
12. _____

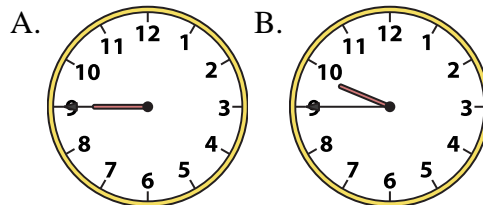
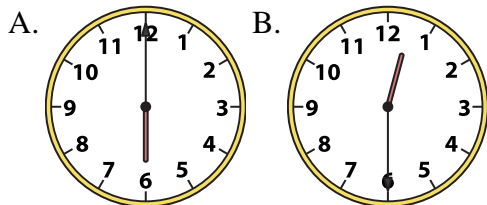


Determine which clock accurately shows the time.

Answers

1) 12:30

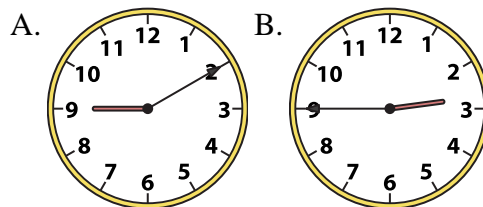
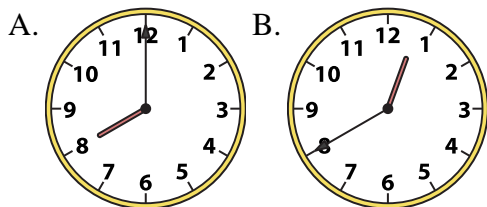
2) 9:45



1. **B**

3) 8:00

4) 2:45



2. **B**

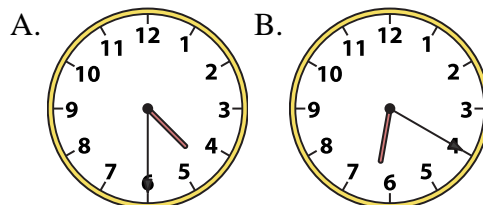
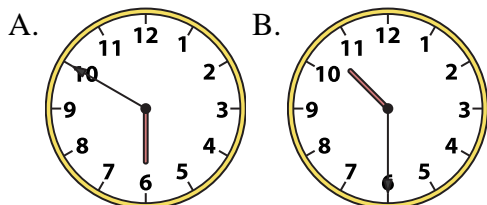
3. **A**

4. **B**

5. **B**

5) 10:30

6) 4:30



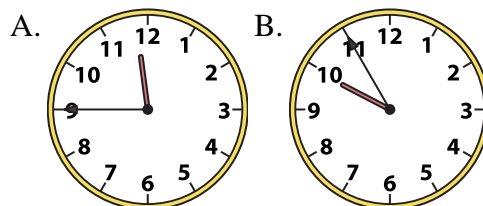
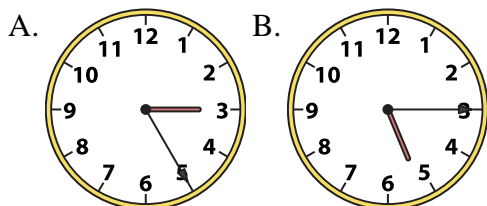
6. **A**

7. **B**

8. **A**

7) 5:15

8) 11:45



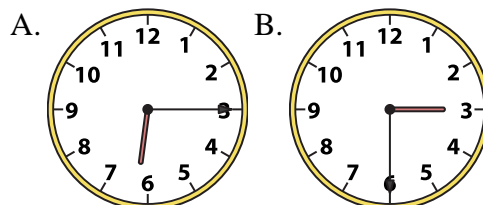
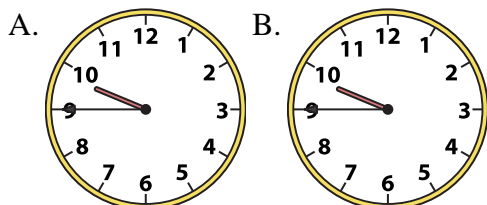
9. **B**

10. **A**

11. **B**

9) 9:45

10) 6:15



12. **B**

11) 12:45

12) 6:00

