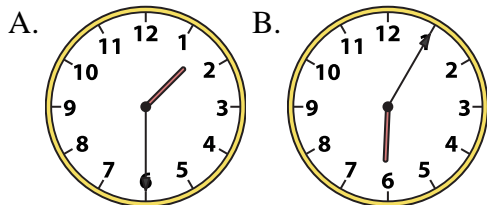




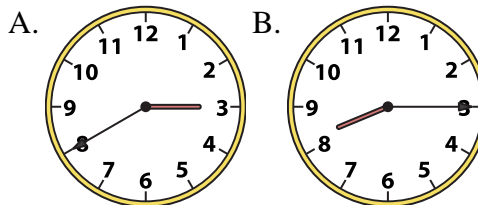
Determine which clock accurately shows the time.

Answers

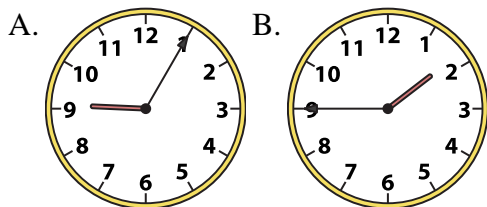
1) 1:30



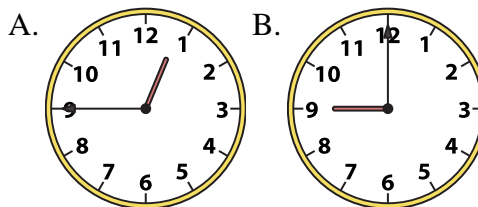
2) 8:15



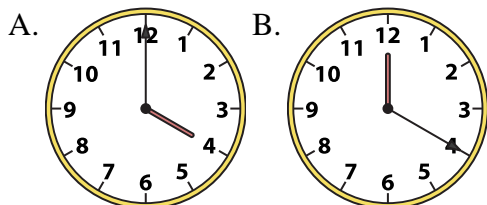
3) 1:45



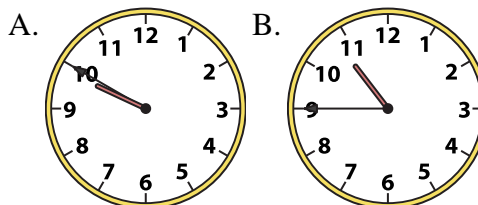
4) 12:45



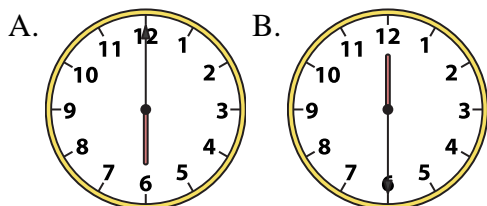
5) 4:00



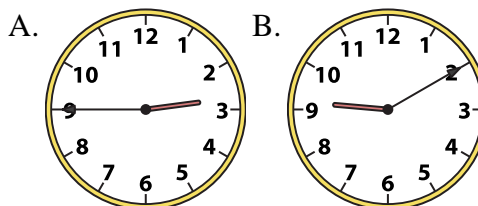
6) 10:45



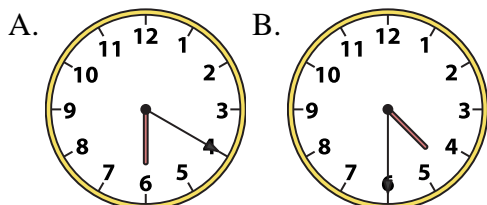
7) 6:00



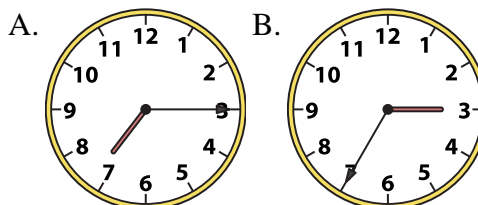
8) 2:45



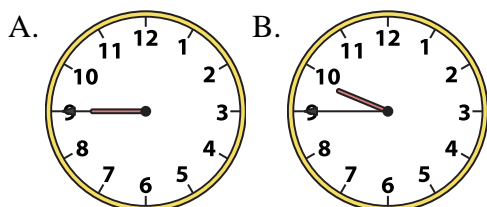
9) 4:30



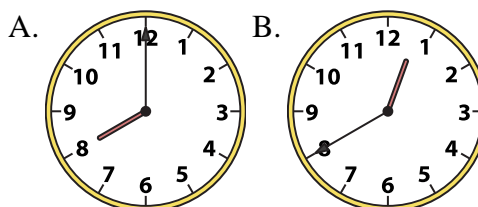
10) 7:15



11) 9:45



12) 8:00



1. _____
2. _____
3. _____
4. _____
5. _____
6. _____
7. _____
8. _____
9. _____
10. _____
11. _____
12. _____

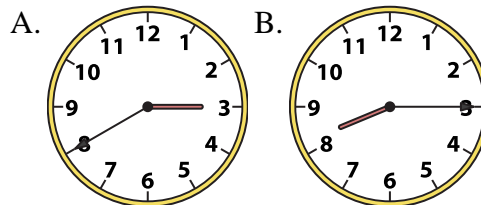
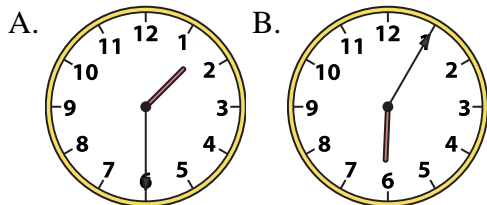


Determine which clock accurately shows the time.

Answers

1) 1:30

2) 8:15

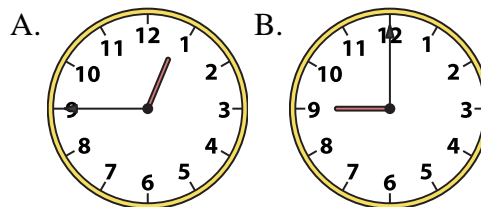
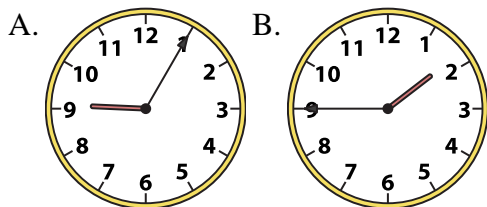


1. **A**

2. **B**

3) 1:45

4) 12:45



3. **B**

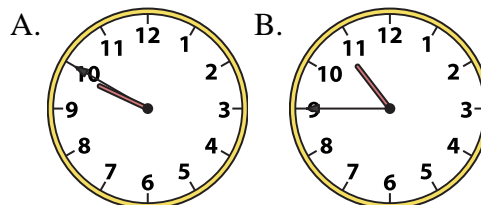
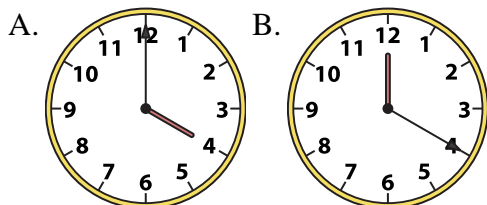
4. **A**

5. **A**

6. **B**

5) 4:00

6) 10:45



7. **A**

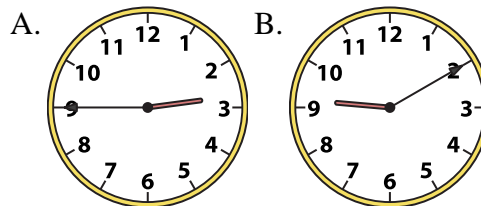
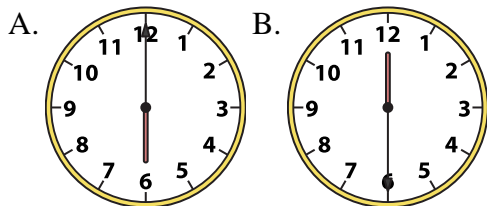
8. **A**

9. **B**

10. **A**

7) 6:00

8) 2:45

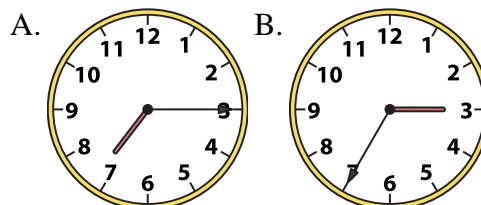
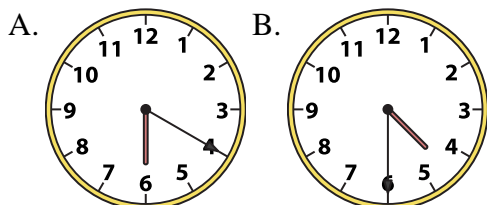


11. **B**

12. **A**

9) 4:30

10) 7:15



11) 9:45

12) 8:00

