



Identifying Fractions

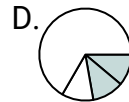
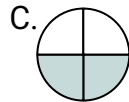
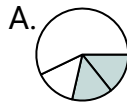
Name: _____

Determine which letter best represents each fraction.

Answers

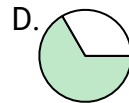
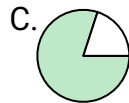
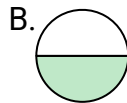
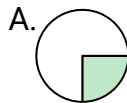
1)

Which choice best represents $\frac{2}{4}$?



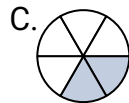
2)

Which choice best represents $\frac{1}{2}$?



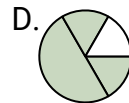
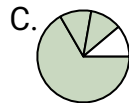
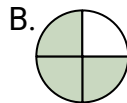
3)

Which choice best represents $\frac{2}{6}$?



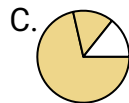
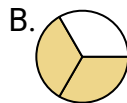
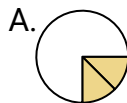
4)

Which choice best represents $\frac{3}{4}$?



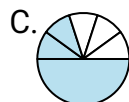
5)

Which choice best represents $\frac{2}{3}$?



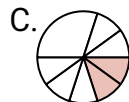
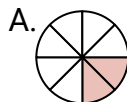
6)

Which choice best represents $\frac{3}{6}$?



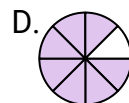
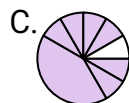
7)

Which choice best represents $\frac{2}{8}$?



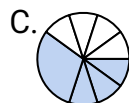
8)

Which choice best represents $\frac{7}{8}$?



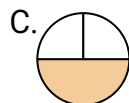
9)

Which choice best represents $\frac{4}{8}$?



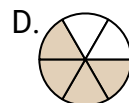
10)

Which choice best represents $\frac{1}{3}$?



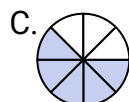
11)

Which choice best represents $\frac{4}{6}$?



12)

Which choice best represents $\frac{5}{8}$?



1. _____

2. _____

3. _____

4. _____

5. _____

6. _____

7. _____

8. _____

9. _____

10. _____



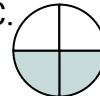



















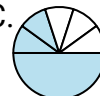















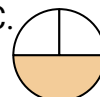









11. _____

12. _____



Determine which letter best represents each fraction.

Answers

- 1) Which choice best represents $\frac{2}{4}$?
A.  B.  C.  D. 
- 2) Which choice best represents $\frac{1}{2}$?
A.  B.  C.  D. 
- 3) Which choice best represents $\frac{2}{6}$?
A.  B.  C.  D. 
- 4) Which choice best represents $\frac{3}{4}$?
A.  B.  C.  D. 
- 5) Which choice best represents $\frac{2}{3}$?
A.  B.  C.  D. 
- 6) Which choice best represents $\frac{3}{6}$?
A.  B.  C.  D. 
- 7) Which choice best represents $\frac{2}{8}$?
A.  B.  C.  D. 
- 8) Which choice best represents $\frac{7}{8}$?
A.  B.  C.  D. 
- 9) Which choice best represents $\frac{4}{8}$?
A.  B.  C.  D. 
- 10) Which choice best represents $\frac{1}{3}$?
A.  B.  C.  D. 
- 11) Which choice best represents $\frac{4}{6}$?
A.  B.  C.  D. 
- 12) Which choice best represents $\frac{5}{8}$?
A.  B.  C.  D. 

1. **C**2. **B**3. **C**4. **B**5. **B**6. **D**7. **A**8. **D**9. **A**10. **B**11. **D**12. **C**