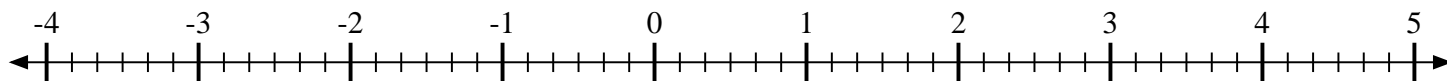
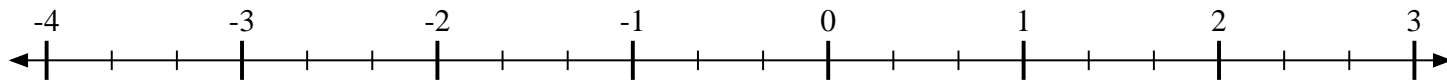


**Mark each location described.**

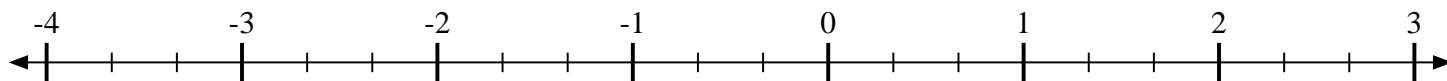
- 1) Mark the location of
- $3\frac{5}{6}$



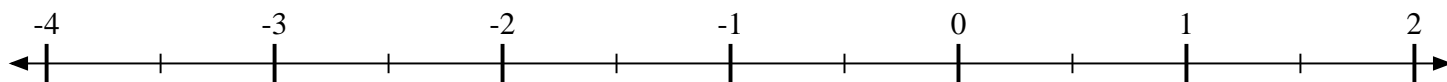
- 2) Mark the location of
- $\frac{1}{3}$



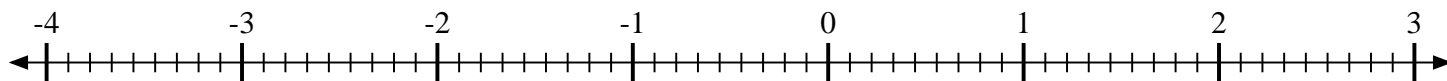
- 3) Mark the location of
- $1\frac{1}{3}$



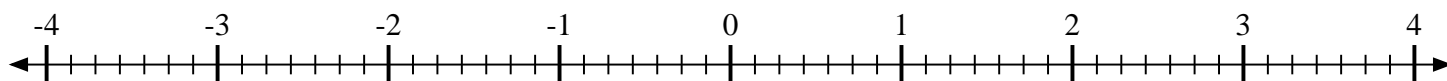
- 4) Mark the location of
- $-1\frac{1}{2}$



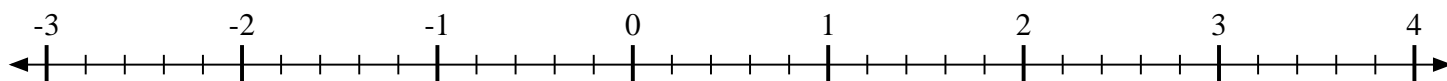
- 5) Mark the location of
- $1\frac{7}{9}$



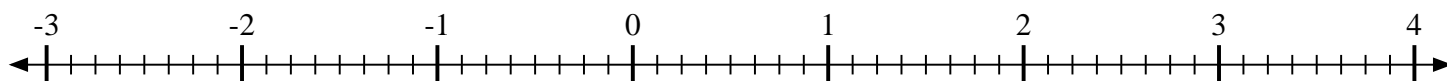
- 6) Mark the location of
- $-1\frac{3}{7}$



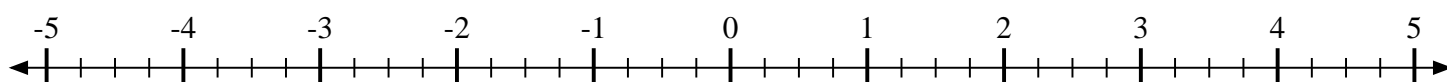
- 7) Mark the location of
- $1\frac{1}{5}$



- 8) Mark the location of
- $-1\frac{6}{8}$



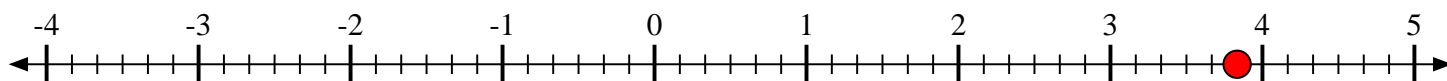
- 9) Mark the location of
- $-4\frac{3}{4}$



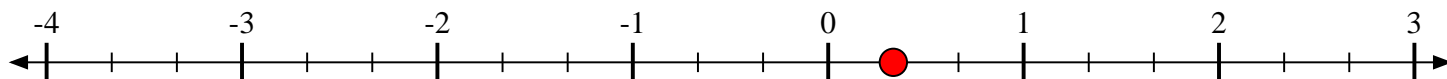


Mark each location described.

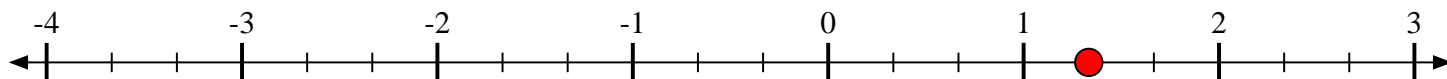
- 1) Mark the location of
- $3\frac{5}{6}$



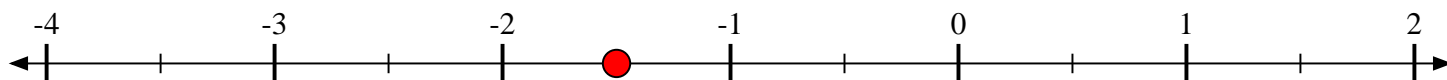
- 2) Mark the location of
- $\frac{1}{3}$



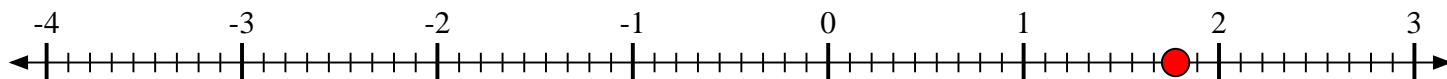
- 3) Mark the location of
- $1\frac{1}{3}$



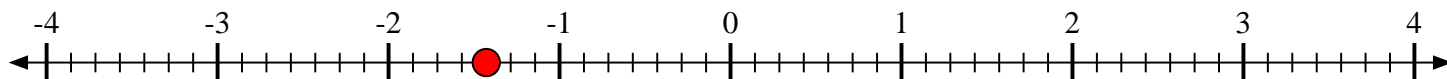
- 4) Mark the location of
- $-1\frac{1}{2}$



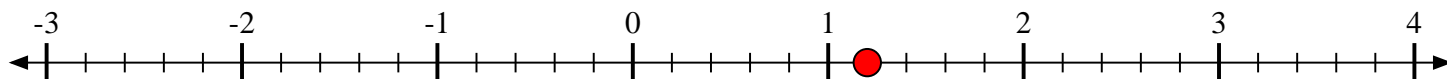
- 5) Mark the location of
- $1\frac{7}{9}$



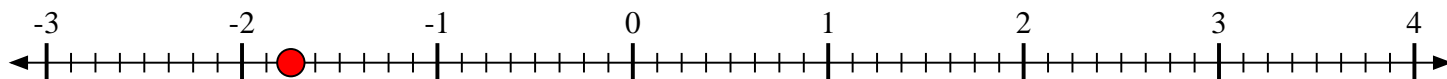
- 6) Mark the location of
- $-1\frac{3}{7}$



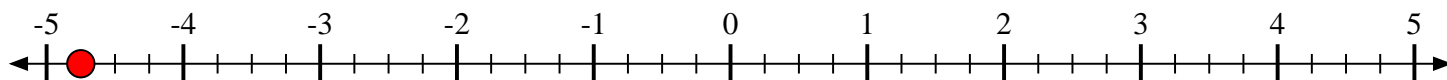
- 7) Mark the location of
- $1\frac{1}{5}$



- 8) Mark the location of
- $-1\frac{6}{8}$



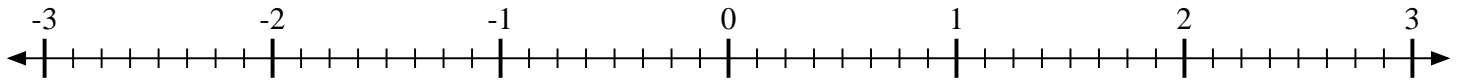
- 9) Mark the location of
- $-4\frac{3}{4}$






Mark each location described.

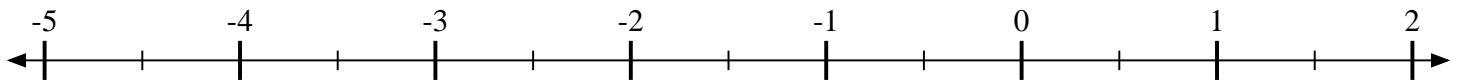
- 1) Mark the location of
- $-2\frac{6}{8}$



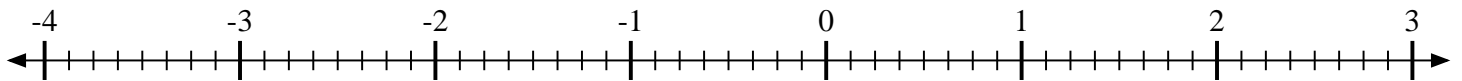
- 2) Mark the location of
- $-1\frac{2}{3}$



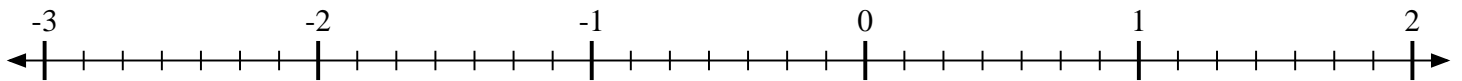
- 3) Mark the location of
- $1\frac{1}{2}$



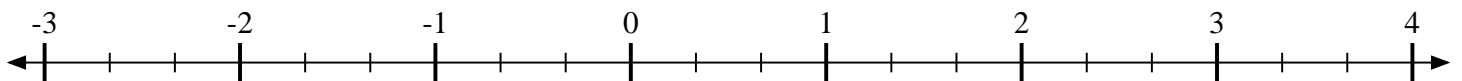
- 4) Mark the location of
- $-3\frac{6}{8}$



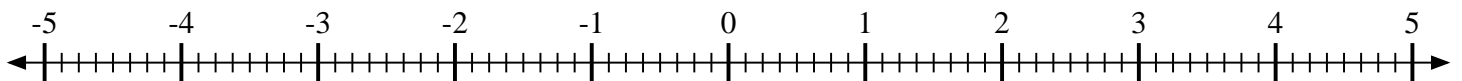
- 5) Mark the location of
- $1\frac{5}{7}$



- 6) Mark the location of
- $2\frac{2}{3}$



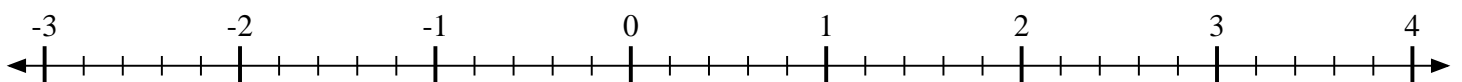
- 7) Mark the location of
- $2\frac{3}{8}$



- 8) Mark the location of
- $-2\frac{5}{8}$



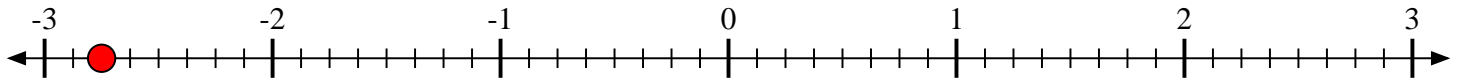
- 9) Mark the location of
- $-2\frac{1}{5}$






Mark each location described.

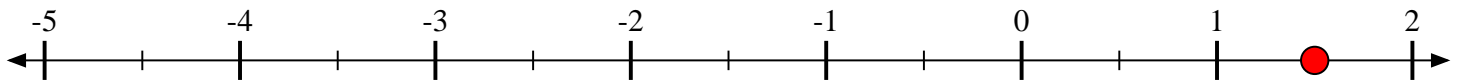
- 1) Mark the location of
- $-2\frac{6}{8}$



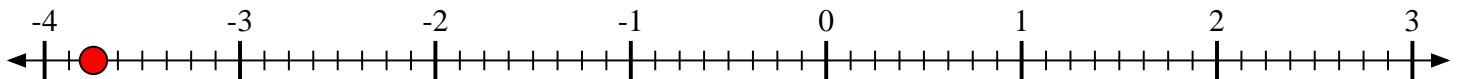
- 2) Mark the location of
- $-1\frac{2}{3}$



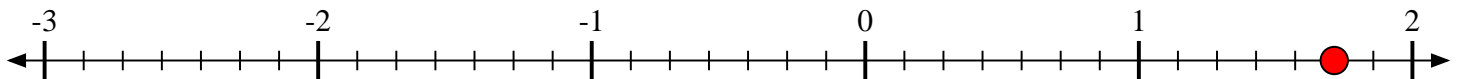
- 3) Mark the location of
- $1\frac{1}{2}$



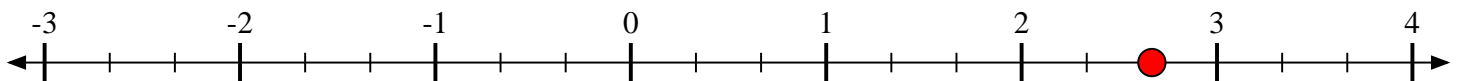
- 4) Mark the location of
- $-3\frac{6}{8}$



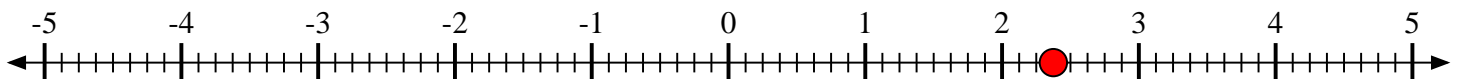
- 5) Mark the location of
- $1\frac{5}{7}$



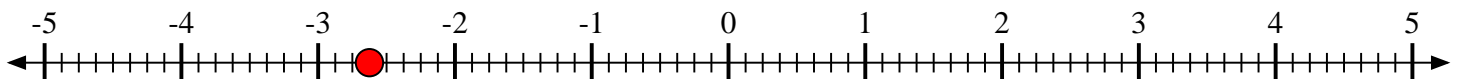
- 6) Mark the location of
- $2\frac{2}{3}$



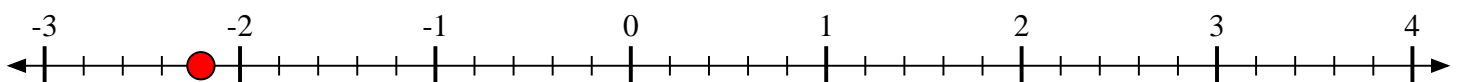
- 7) Mark the location of
- $2\frac{3}{8}$



- 8) Mark the location of
- $-2\frac{5}{8}$

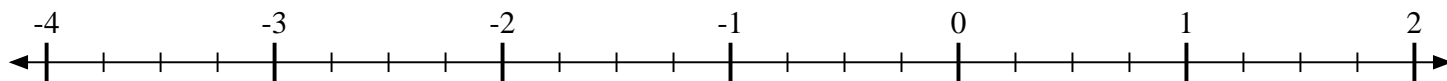


- 9) Mark the location of
- $-2\frac{1}{5}$

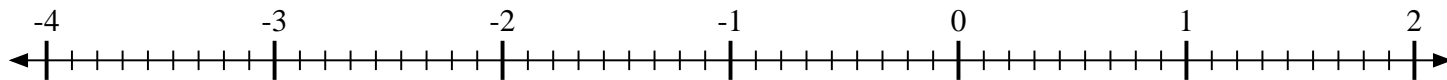


**Mark each location described.**

- 1) Mark the location of
- $-1\frac{2}{4}$



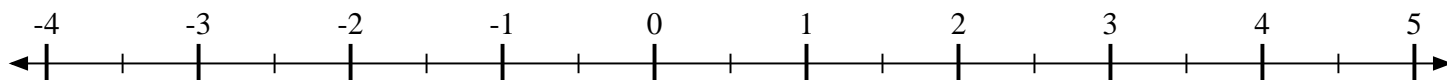
- 2) Mark the location of
- $\frac{2}{9}$



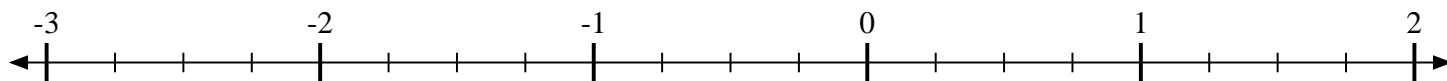
- 3) Mark the location of
- $\frac{1}{2}$



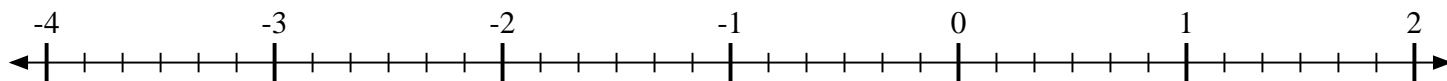
- 4) Mark the location of
- $3\frac{1}{2}$



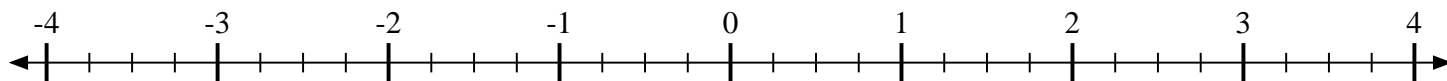
- 5) Mark the location of
- $-1\frac{2}{4}$



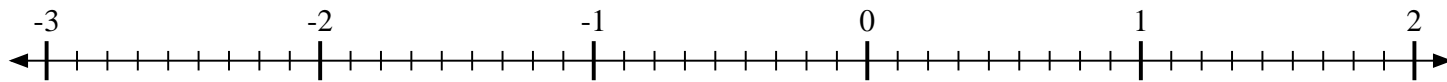
- 6) Mark the location of
- $-3\frac{2}{6}$



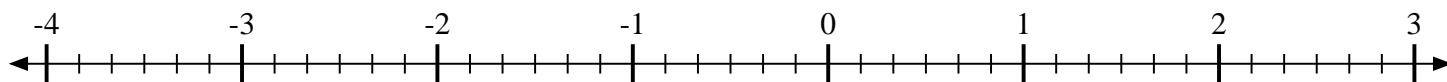
- 7) Mark the location of
- $-2\frac{2}{4}$



- 8) Mark the location of
- $\frac{8}{9}$



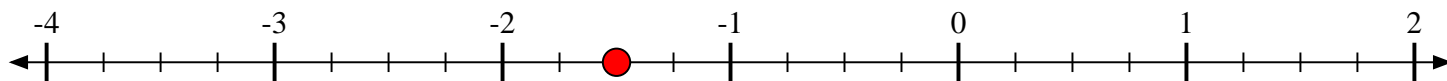
- 9) Mark the location of
- $-2\frac{3}{6}$



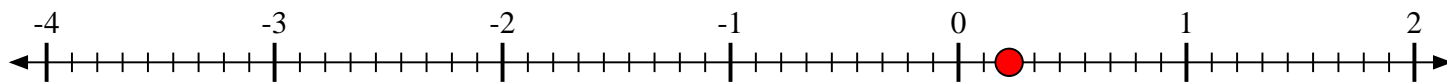


Mark each location described.

- 1) Mark the location of
- $-1\frac{2}{4}$



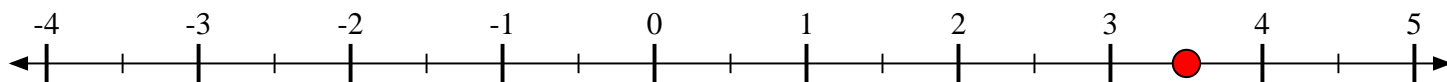
- 2) Mark the location of
- $\frac{2}{9}$



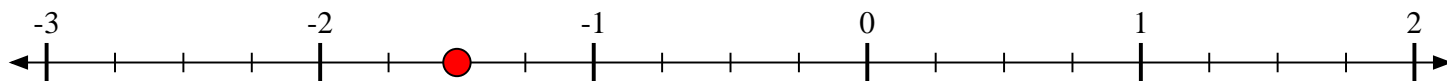
- 3) Mark the location of
- $\frac{1}{2}$



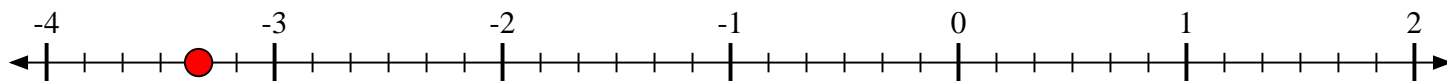
- 4) Mark the location of
- $3\frac{1}{2}$



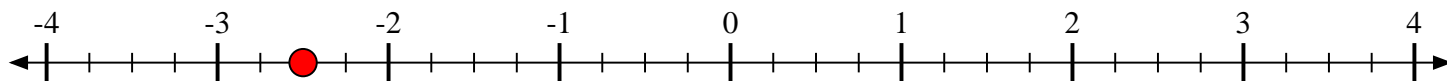
- 5) Mark the location of
- $-1\frac{2}{4}$



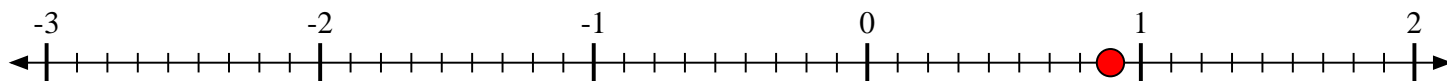
- 6) Mark the location of
- $-3\frac{2}{6}$



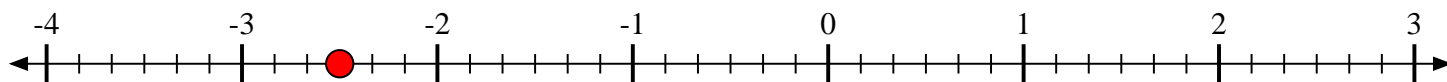
- 7) Mark the location of
- $-2\frac{2}{4}$



- 8) Mark the location of
- $\frac{8}{9}$



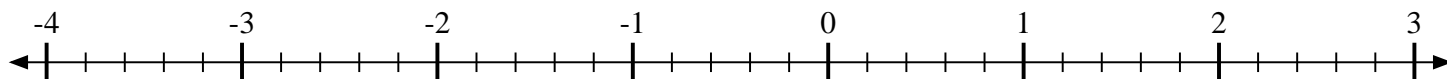
- 9) Mark the location of
- $-2\frac{3}{6}$



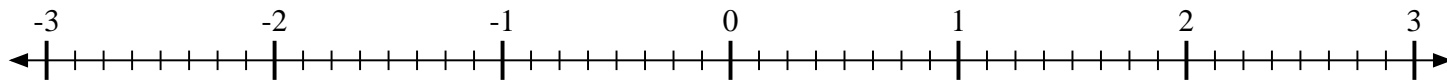


Mark each location described.

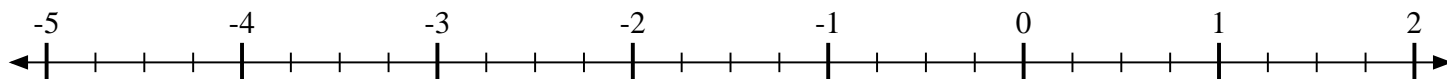
- 1) Mark the location of $-3\frac{4}{5}$



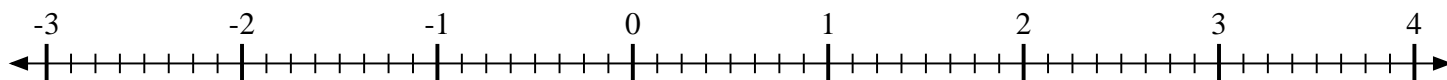
- 2) Mark the location of $2\frac{6}{8}$



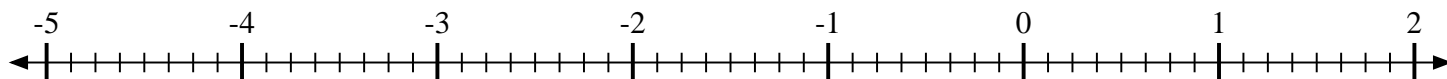
- 3) Mark the location of $-4\frac{2}{4}$



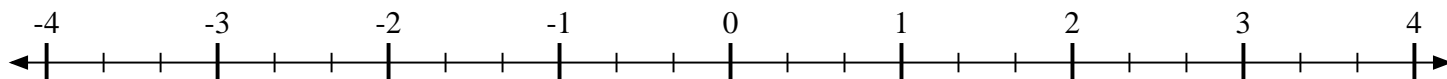
- 4) Mark the location of $1\frac{5}{8}$



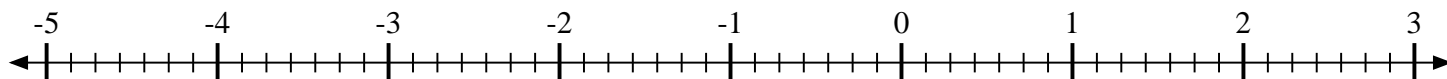
- 5) Mark the location of $-2\frac{6}{8}$



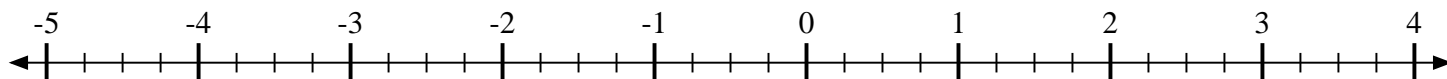
- 6) Mark the location of $-1\frac{1}{3}$



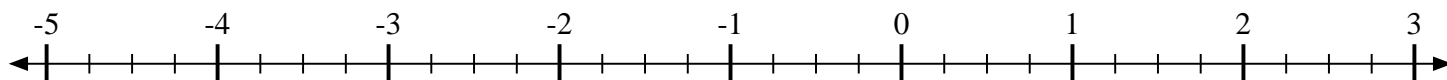
- 7) Mark the location of $-3\frac{2}{7}$



- 8) Mark the location of $3\frac{1}{4}$



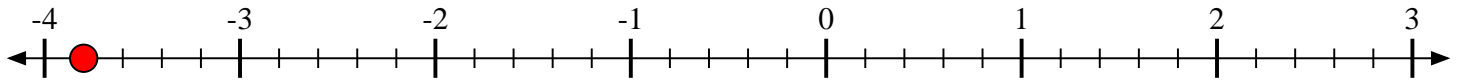
- 9) Mark the location of $-3\frac{3}{4}$



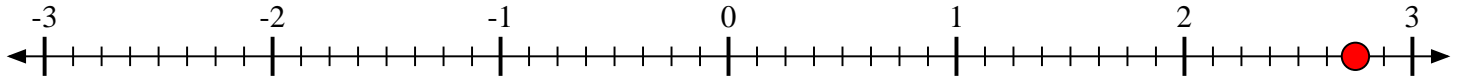


Mark each location described.

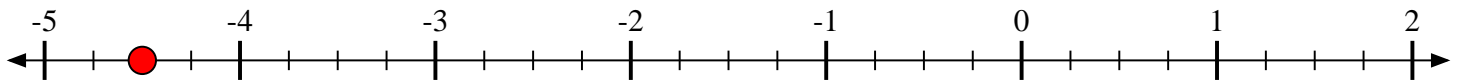
- 1) Mark the location of
- $-3\frac{4}{5}$



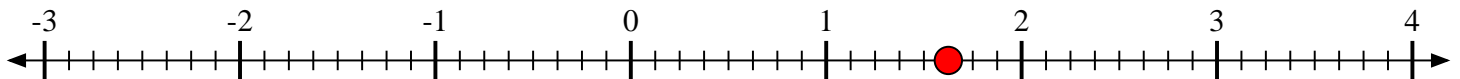
- 2) Mark the location of
- $2\frac{6}{8}$



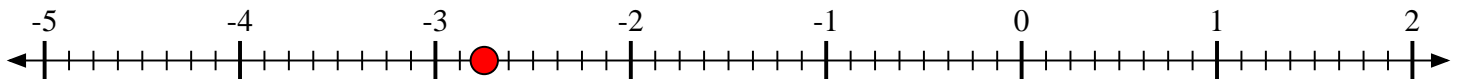
- 3) Mark the location of
- $-4\frac{2}{4}$



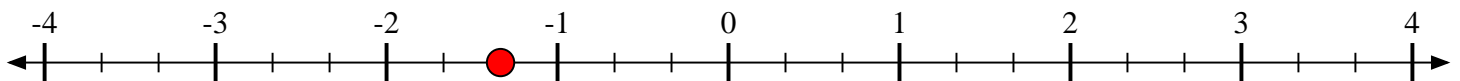
- 4) Mark the location of
- $1\frac{5}{8}$



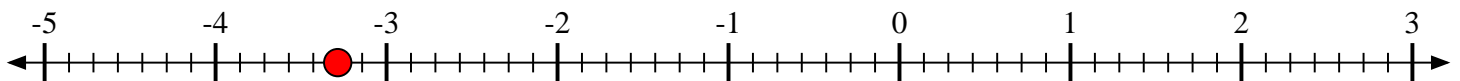
- 5) Mark the location of
- $-2\frac{6}{8}$



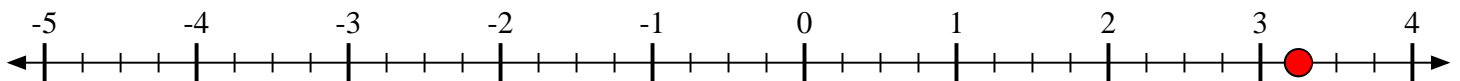
- 6) Mark the location of
- $-1\frac{1}{3}$



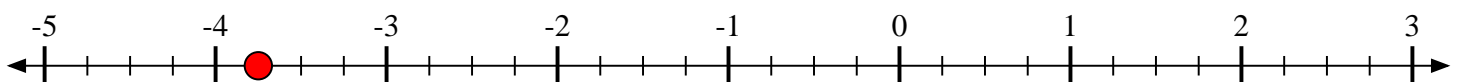
- 7) Mark the location of
- $-3\frac{2}{7}$



- 8) Mark the location of
- $3\frac{1}{4}$

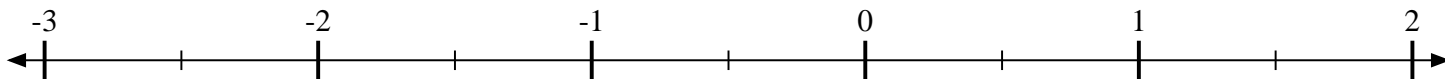


- 9) Mark the location of
- $-3\frac{3}{4}$

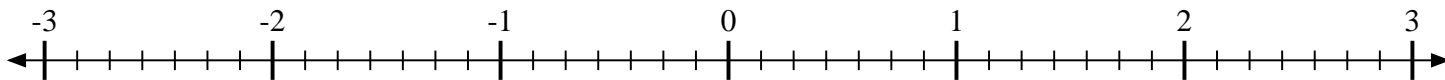


**Mark each location described.**

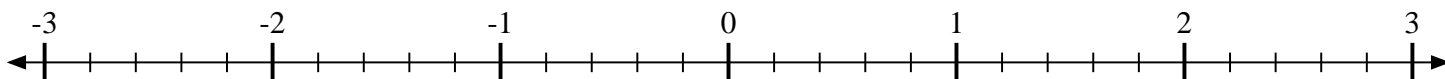
- 1) Mark the location of
- $1\frac{1}{2}$



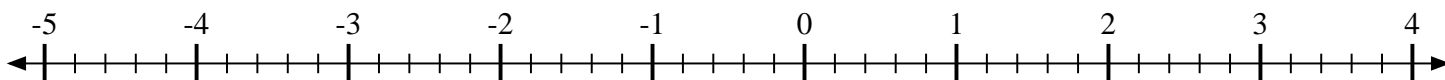
- 2) Mark the location of
- $-1\frac{4}{7}$



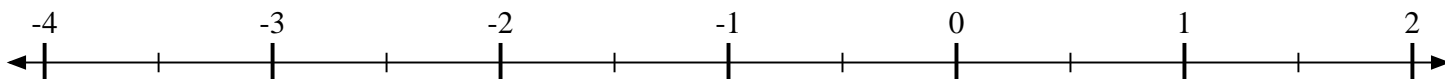
- 3) Mark the location of
- $-2\frac{4}{5}$



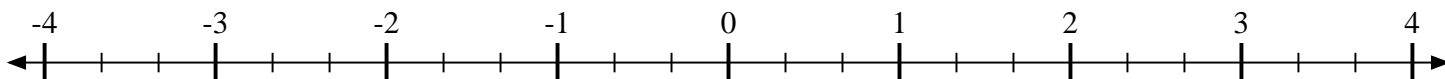
- 4) Mark the location of
- $1\frac{1}{5}$



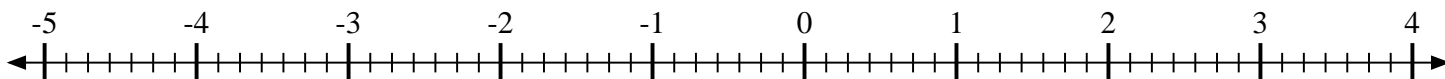
- 5) Mark the location of
- $-3\frac{1}{2}$



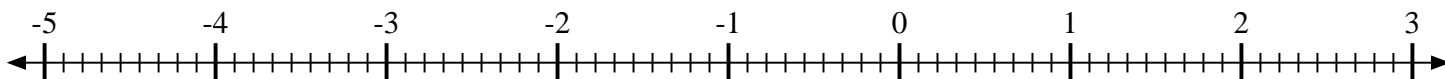
- 6) Mark the location of
- $-2\frac{2}{3}$



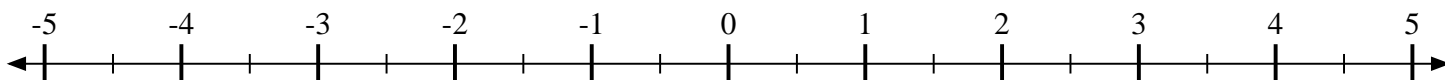
- 7) Mark the location of
- $-1\frac{3}{7}$



- 8) Mark the location of
- $-2\frac{6}{9}$



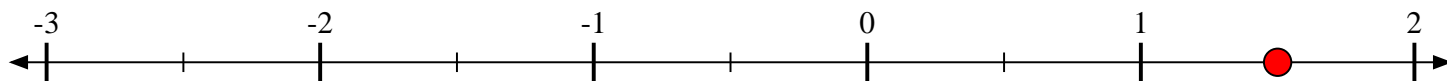
- 9) Mark the location of
- $2\frac{1}{2}$



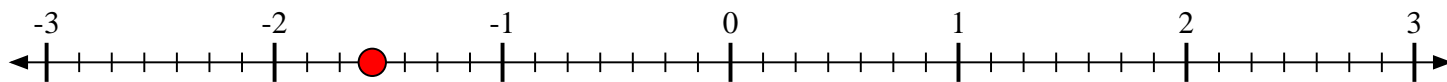


Mark each location described.

- 1) Mark the location of
- $1\frac{1}{2}$



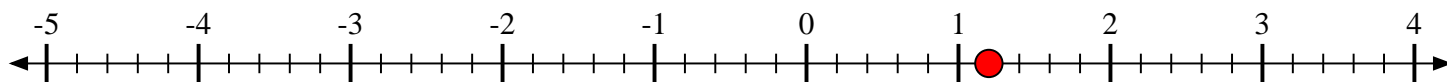
- 2) Mark the location of
- $-1\frac{4}{7}$



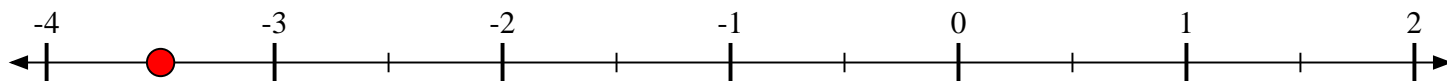
- 3) Mark the location of
- $-2\frac{4}{5}$



- 4) Mark the location of
- $1\frac{1}{5}$



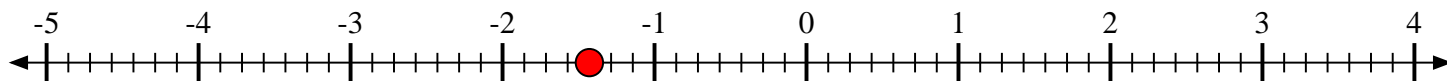
- 5) Mark the location of
- $-3\frac{1}{2}$



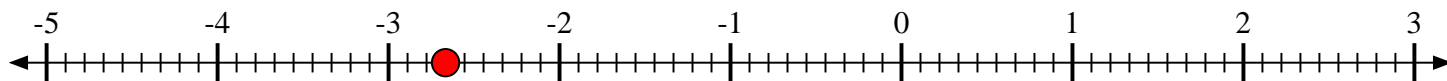
- 6) Mark the location of
- $-2\frac{2}{3}$



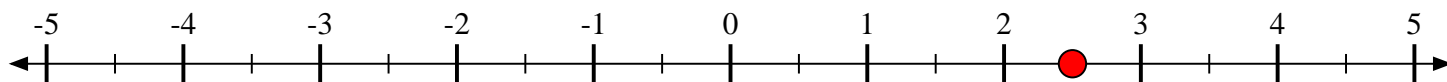
- 7) Mark the location of
- $-1\frac{3}{7}$



- 8) Mark the location of
- $-2\frac{6}{9}$



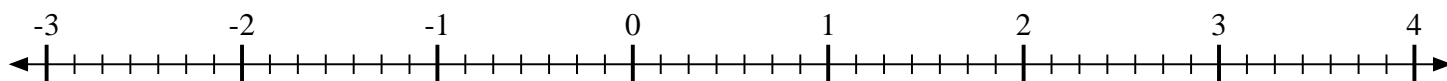
- 9) Mark the location of
- $2\frac{1}{2}$



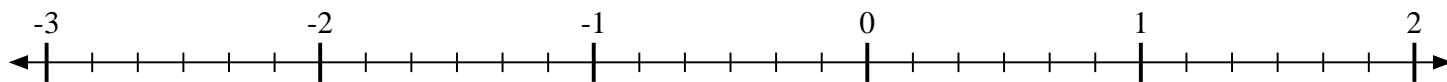


Mark each location described.

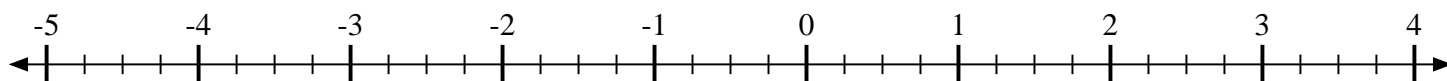
- 1) Mark the location of
- $\frac{5}{7}$



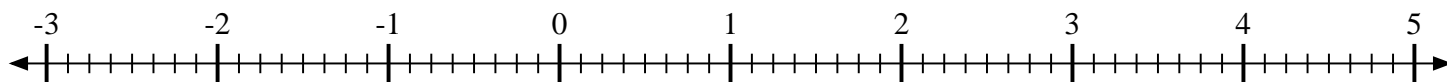
- 2) Mark the location of
- $\frac{5}{6}$



- 3) Mark the location of
- $-1\frac{2}{4}$



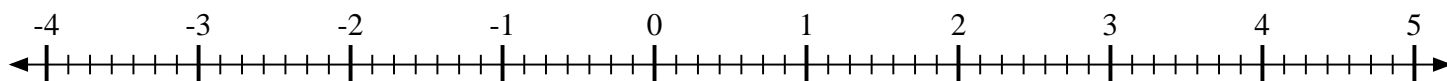
- 4) Mark the location of
- $-1\frac{1}{8}$



- 5) Mark the location of
- $1\frac{1}{4}$



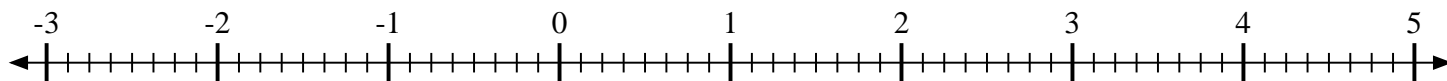
- 6) Mark the location of
- $-2\frac{2}{7}$



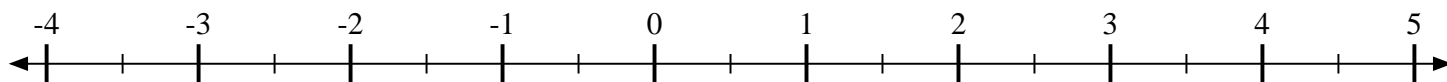
- 7) Mark the location of
- $1\frac{1}{4}$



- 8) Mark the location of
- $2\frac{3}{8}$



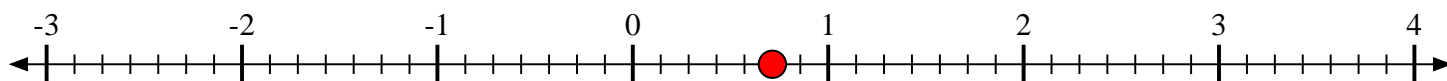
- 9) Mark the location of
- $\frac{1}{2}$



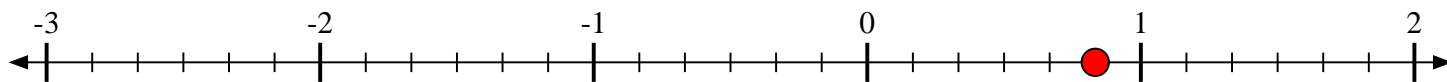


Mark each location described.

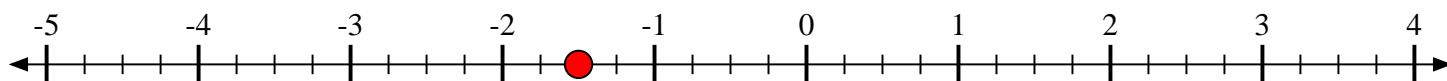
- 1) Mark the location of
- $\frac{5}{7}$



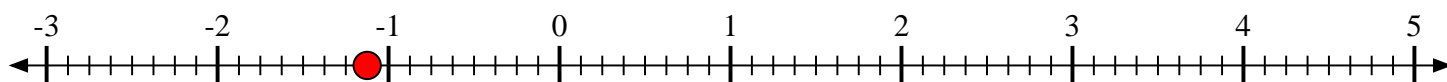
- 2) Mark the location of
- $\frac{5}{6}$



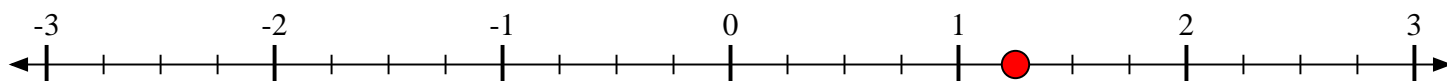
- 3) Mark the location of
- $-1\frac{2}{4}$



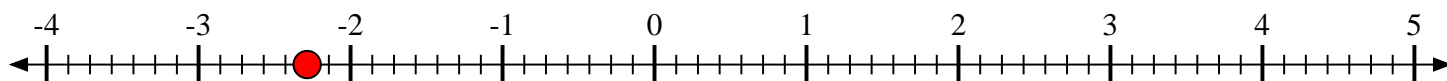
- 4) Mark the location of
- $-1\frac{1}{8}$



- 5) Mark the location of
- $1\frac{1}{4}$



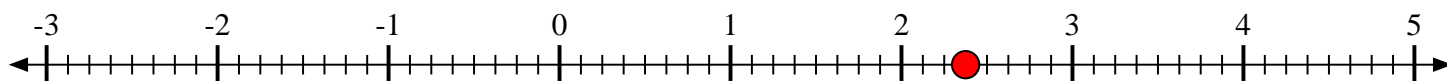
- 6) Mark the location of
- $-2\frac{2}{7}$



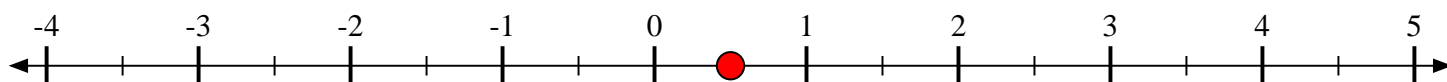
- 7) Mark the location of
- $1\frac{1}{4}$



- 8) Mark the location of
- $2\frac{3}{8}$



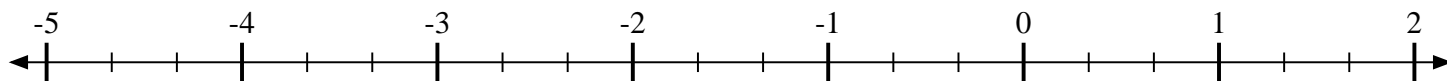
- 9) Mark the location of
- $\frac{1}{2}$



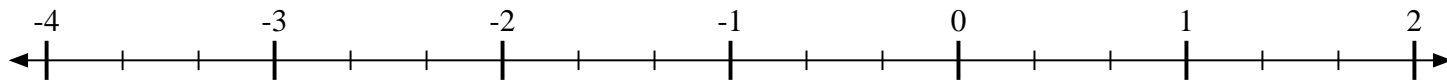


Mark each location described.

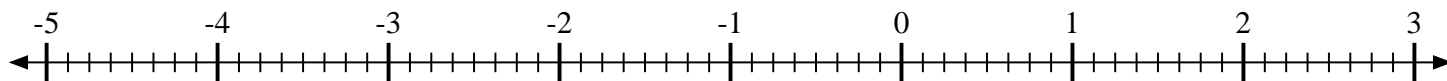
- 1) Mark the location of
- $-3\frac{1}{3}$



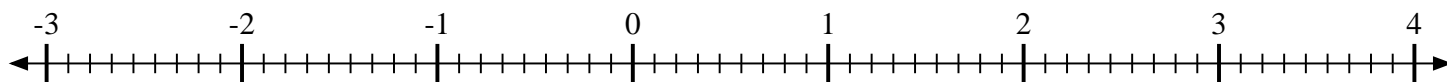
- 2) Mark the location of
- $-2\frac{2}{3}$



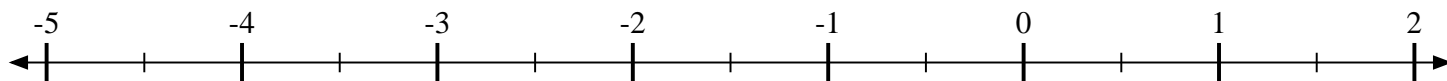
- 3) Mark the location of
- $-2\frac{6}{8}$



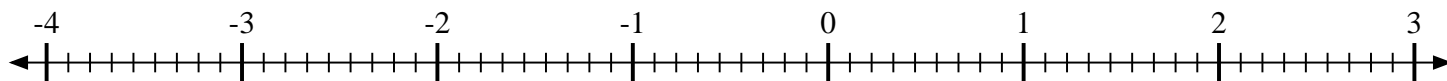
- 4) Mark the location of
- $1\frac{1}{9}$



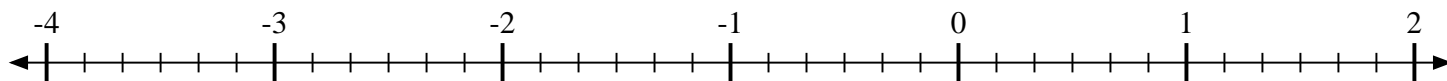
- 5) Mark the location of
- $1\frac{1}{2}$



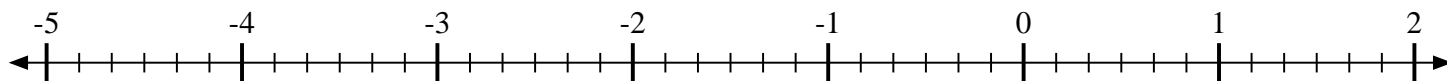
- 6) Mark the location of
- $2\frac{5}{9}$



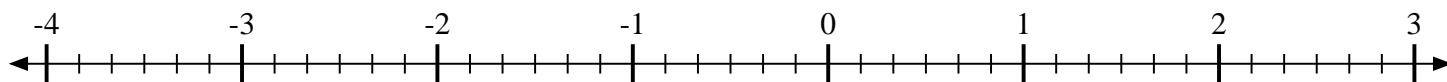
- 7) Mark the location of
- $-1\frac{3}{6}$



- 8) Mark the location of
- $-1\frac{4}{6}$



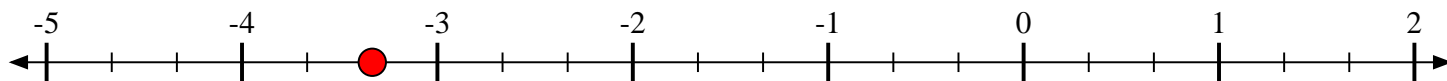
- 9) Mark the location of
- $-1\frac{2}{6}$



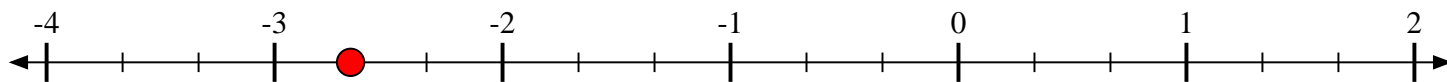


Mark each location described.

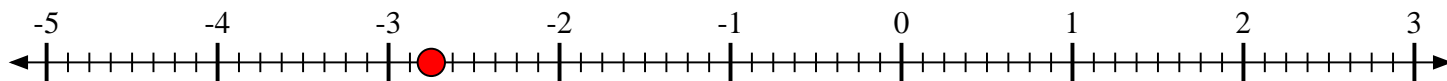
- 1) Mark the location of
- $-3\frac{1}{3}$



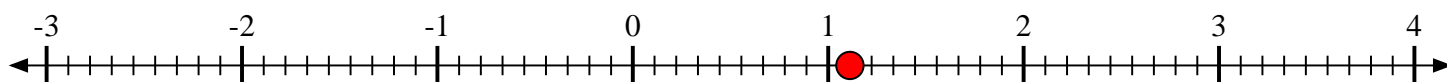
- 2) Mark the location of
- $-2\frac{2}{3}$



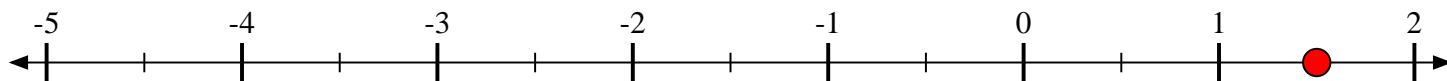
- 3) Mark the location of
- $-2\frac{6}{8}$



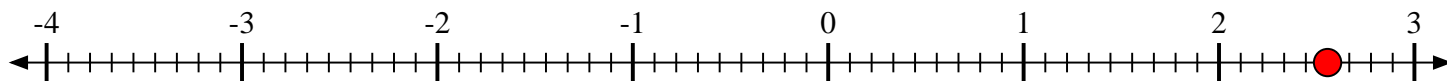
- 4) Mark the location of
- $1\frac{1}{9}$



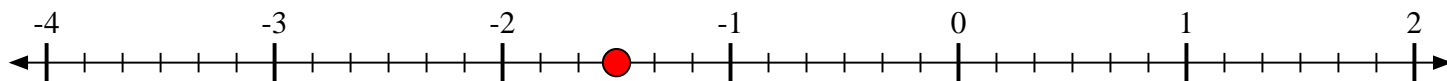
- 5) Mark the location of
- $1\frac{1}{2}$



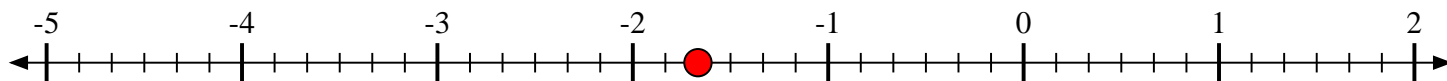
- 6) Mark the location of
- $2\frac{5}{9}$



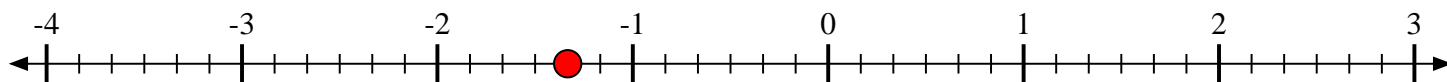
- 7) Mark the location of
- $-1\frac{3}{6}$



- 8) Mark the location of
- $-1\frac{4}{6}$

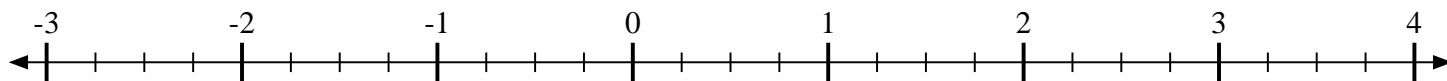


- 9) Mark the location of
- $-1\frac{2}{6}$

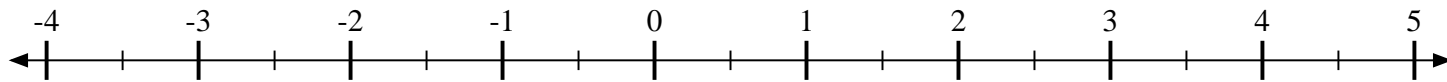


**Mark each location described.**

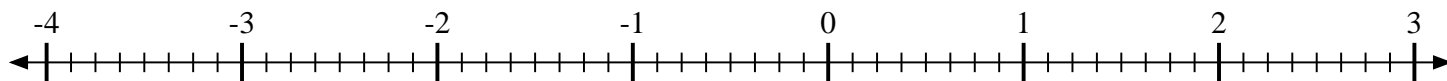
- 1) Mark the location of
- $3\frac{1}{4}$



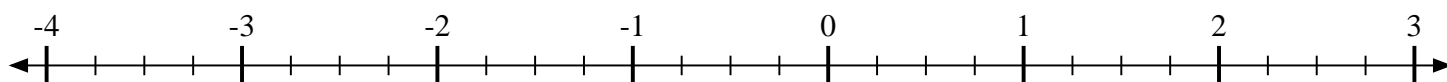
- 2) Mark the location of
- $-1\frac{1}{2}$



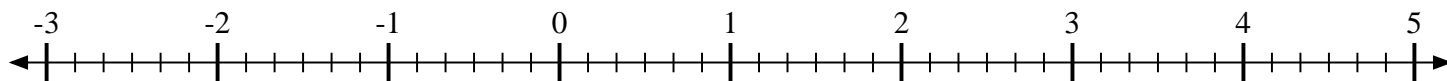
- 3) Mark the location of
- $1\frac{1}{8}$



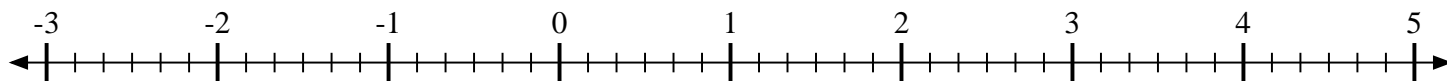
- 4) Mark the location of
- $-1\frac{2}{4}$



- 5) Mark the location of
- $-2\frac{2}{6}$



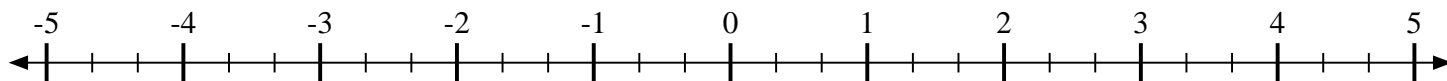
- 6) Mark the location of
- $-1\frac{3}{6}$



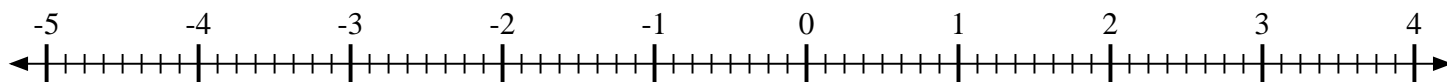
- 7) Mark the location of
- $-1\frac{1}{4}$



- 8) Mark the location of
- $-4\frac{2}{3}$



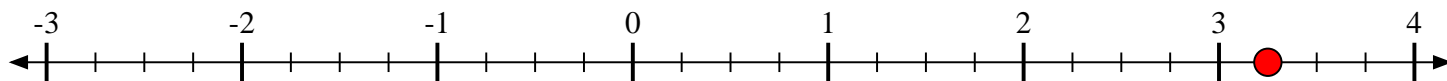
- 9) Mark the location of
- $-2\frac{5}{8}$



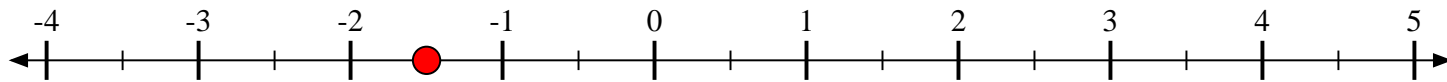


Mark each location described.

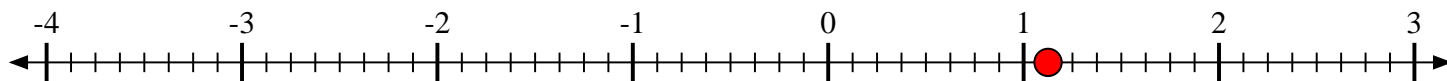
- 1) Mark the location of
- $3\frac{1}{4}$



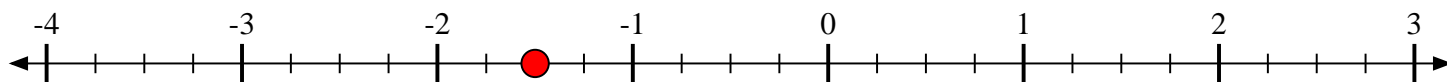
- 2) Mark the location of
- $-1\frac{1}{2}$



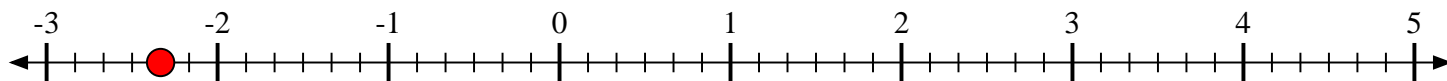
- 3) Mark the location of
- $1\frac{1}{8}$



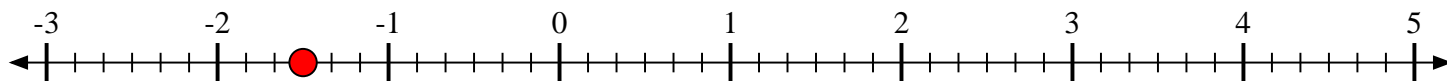
- 4) Mark the location of
- $-1\frac{2}{4}$



- 5) Mark the location of
- $-2\frac{2}{6}$



- 6) Mark the location of
- $-1\frac{3}{6}$



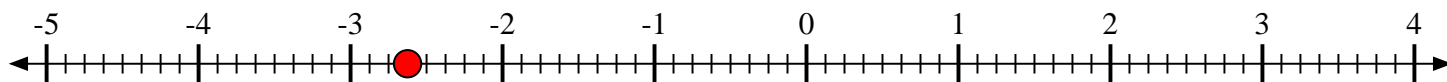
- 7) Mark the location of
- $-1\frac{1}{4}$



- 8) Mark the location of
- $-4\frac{2}{3}$

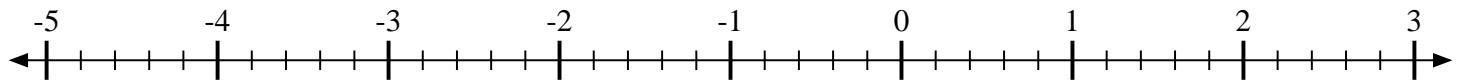


- 9) Mark the location of
- $-2\frac{5}{8}$

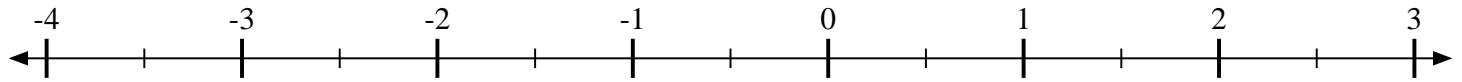


**Mark each location described.**

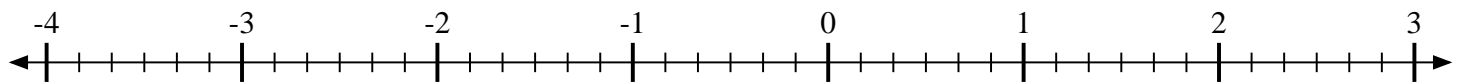
- 1) Mark the location of
- $-3\frac{4}{5}$



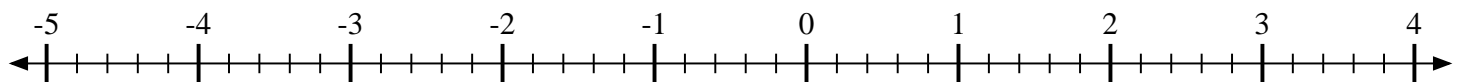
- 2) Mark the location of
- $-2\frac{1}{2}$



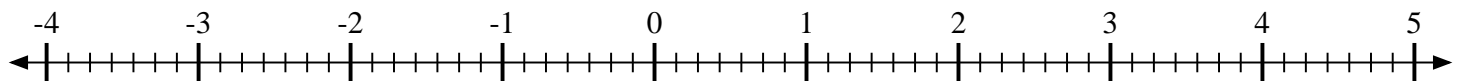
- 3) Mark the location of
- $-3\frac{4}{6}$



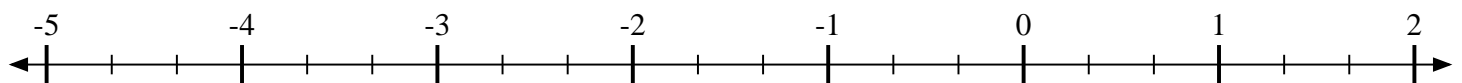
- 4) Mark the location of
- $-1\frac{4}{5}$



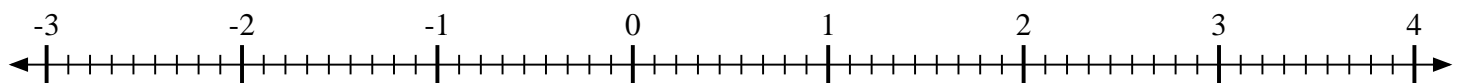
- 5) Mark the location of
- $1\frac{4}{7}$



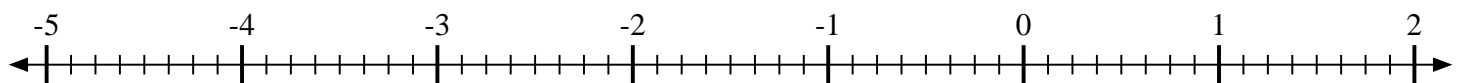
- 6) Mark the location of
- $-3\frac{2}{3}$



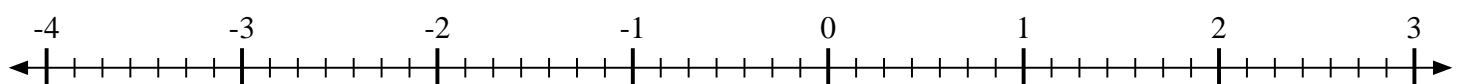
- 7) Mark the location of
- $2\frac{6}{9}$



- 8) Mark the location of
- $-4\frac{3}{8}$



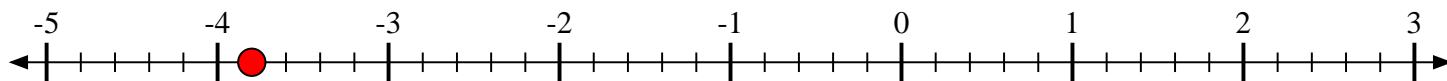
- 9) Mark the location of
- $-1\frac{1}{7}$



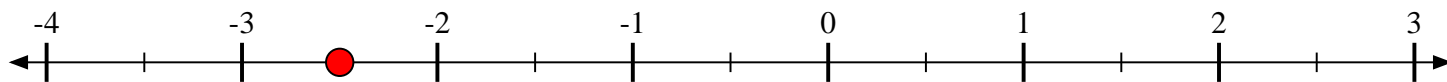


Mark each location described.

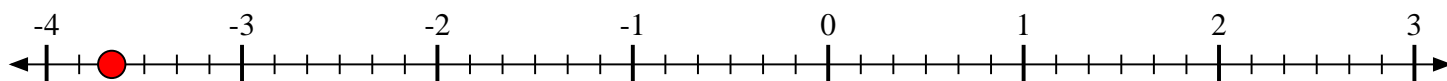
- 1) Mark the location of
- $-3\frac{4}{5}$



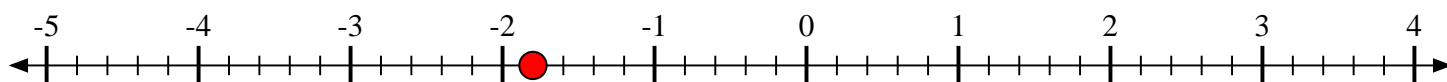
- 2) Mark the location of
- $-2\frac{1}{2}$



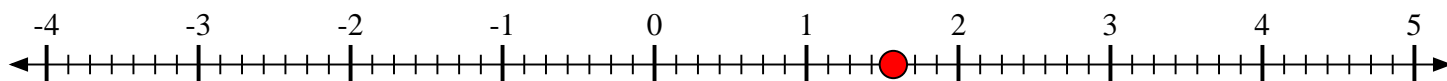
- 3) Mark the location of
- $-3\frac{4}{6}$



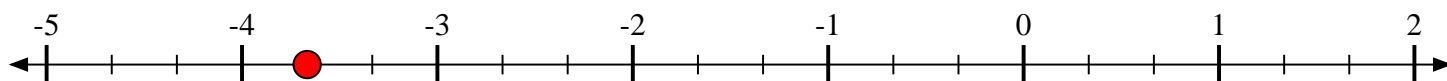
- 4) Mark the location of
- $-1\frac{4}{5}$



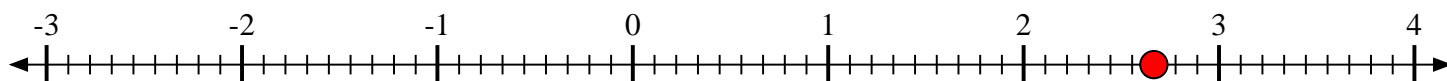
- 5) Mark the location of
- $1\frac{4}{7}$



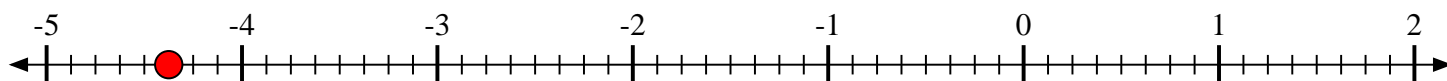
- 6) Mark the location of
- $-3\frac{2}{3}$



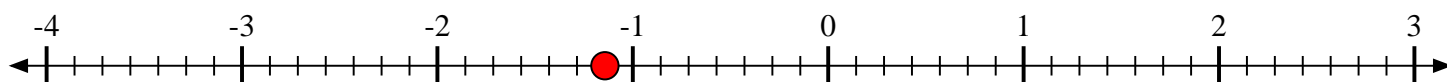
- 7) Mark the location of
- $2\frac{6}{9}$



- 8) Mark the location of
- $-4\frac{3}{8}$

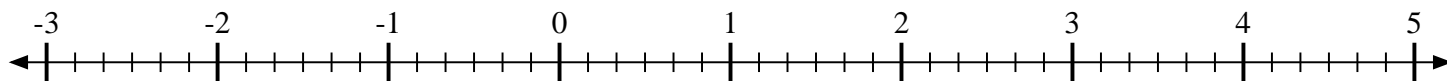


- 9) Mark the location of
- $-1\frac{1}{7}$

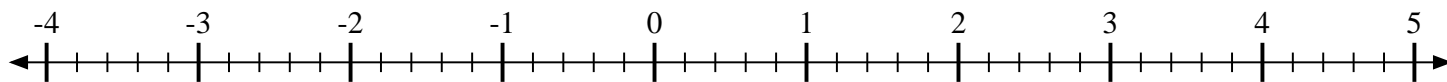


**Mark each location described.**

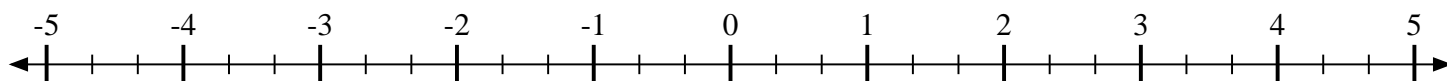
- 1) Mark the location of
- $1\frac{5}{6}$



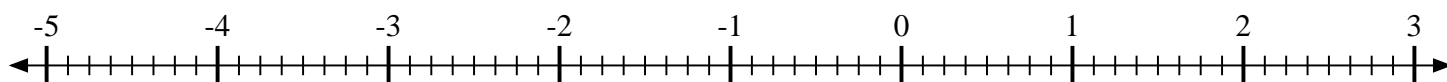
- 2) Mark the location of
- $4\frac{2}{5}$



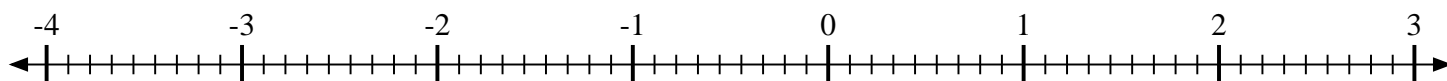
- 3) Mark the location of
- $-3\frac{1}{3}$



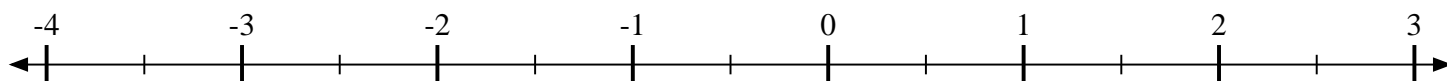
- 4) Mark the location of
- $\frac{3}{8}$



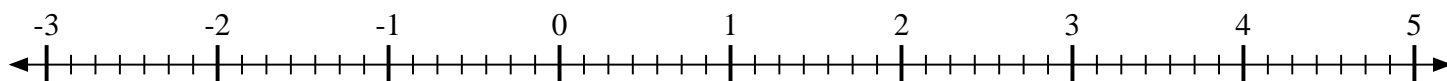
- 5) Mark the location of
- $-1\frac{4}{9}$



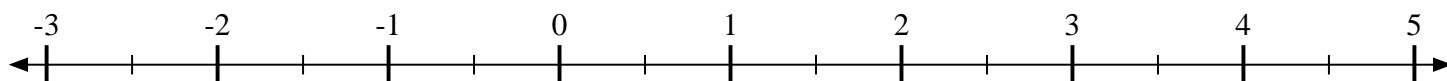
- 6) Mark the location of
- $-1\frac{1}{2}$



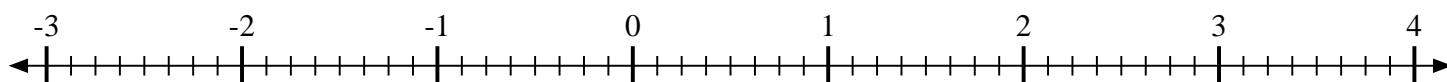
- 7) Mark the location of
- $-2\frac{6}{7}$



- 8) Mark the location of
- $4\frac{1}{2}$



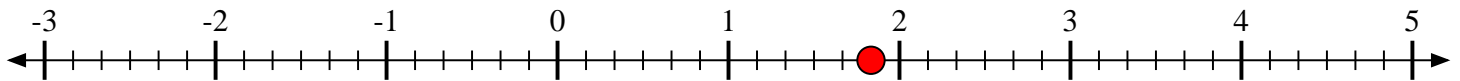
- 9) Mark the location of
- $-1\frac{3}{8}$



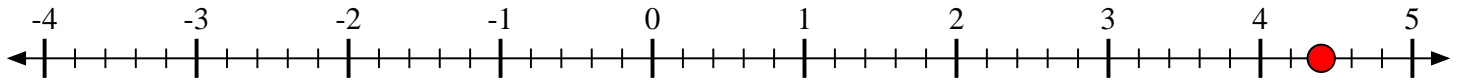


Mark each location described.

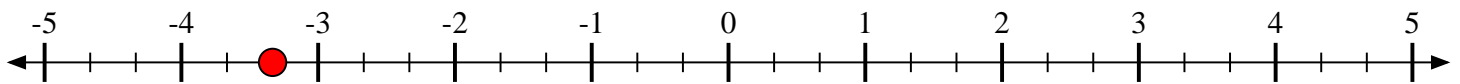
- 1) Mark the location of
- $1\frac{5}{6}$



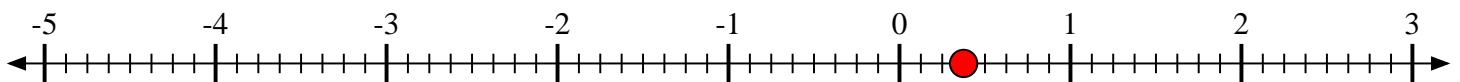
- 2) Mark the location of
- $4\frac{2}{5}$



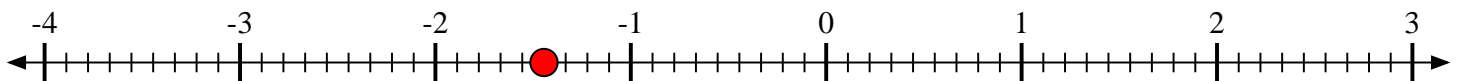
- 3) Mark the location of
- $-3\frac{1}{3}$



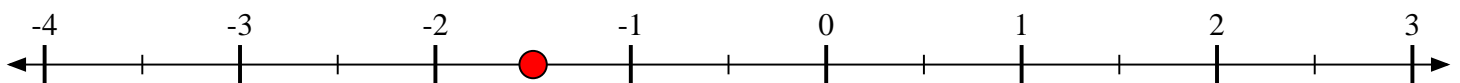
- 4) Mark the location of
- $\frac{3}{8}$



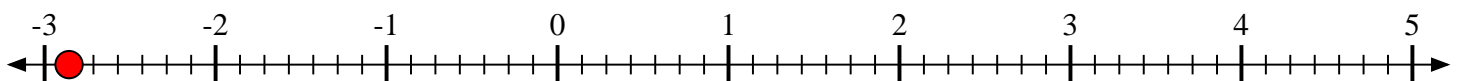
- 5) Mark the location of
- $-1\frac{4}{9}$



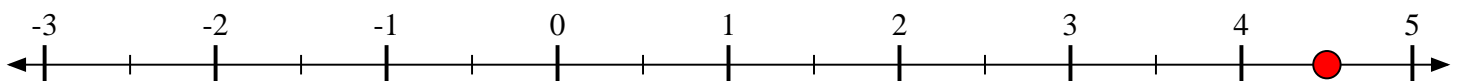
- 6) Mark the location of
- $-1\frac{1}{2}$



- 7) Mark the location of
- $-2\frac{6}{7}$



- 8) Mark the location of
- $4\frac{1}{2}$



- 9) Mark the location of
- $-1\frac{3}{8}$

