

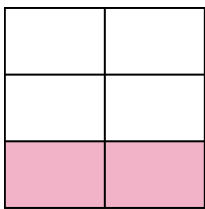


Write the shaded amount in word form.

Ex)



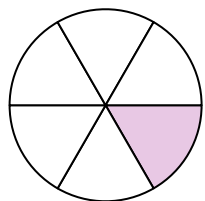
1)




2)



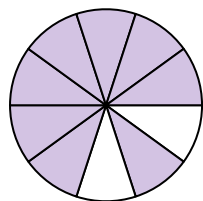
3)



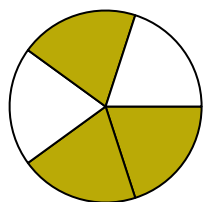
4)




5)



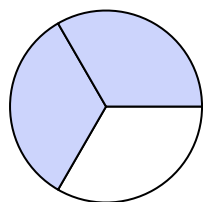
6)



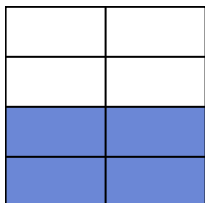
7)



8)




9)



10)




11)



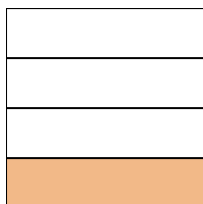
12)



13)



14)

**Answers**

Ex.

one-half

1.

2.

3.

4.

5.

6.

7.

8.

9.

10.

11.

12.

13.

14.

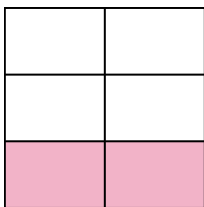


Write the shaded amount in word form.

Ex)



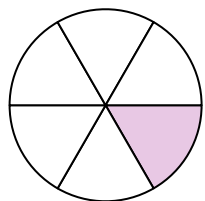
1)



2)



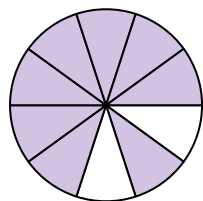
3)



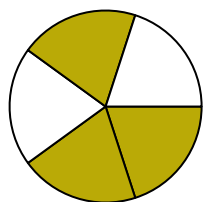
4)




5)



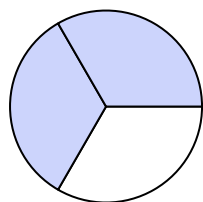
6)



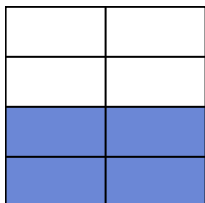
7)




8)




9)



10)




11)



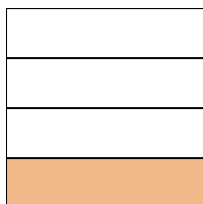
12)



13)



14)

**Answers**

Ex.

one-half

1.

two-fifths

2.

two-ninths

3.

one-sixth

4.

three-sixths

5.

eight-tenths

6.

three-fifths

7.

three-fourths

8.

two-thirds

9.

four-sevenths

10.

one-tenth

11.

two-thirds

12.

four-eighths

13.

one-half

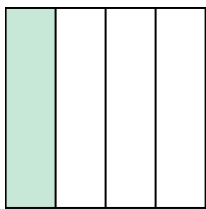
14.

one-fourth




Write the shaded amount in word form.

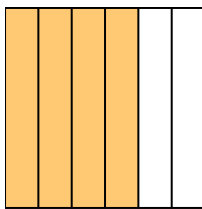
Ex)



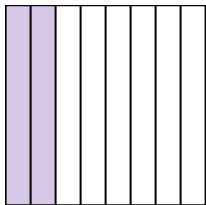
1)




2)



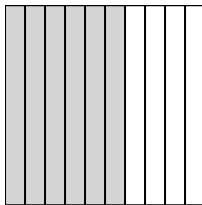
3)



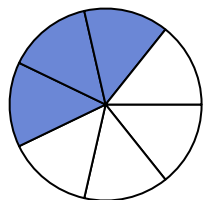
4)



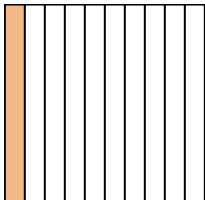
5)



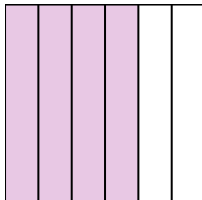
6)



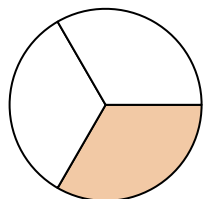
7)




8)



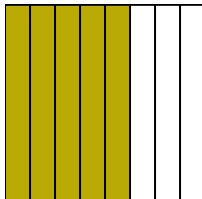
9)



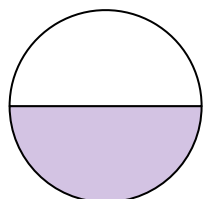
10)



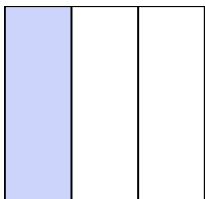
11)



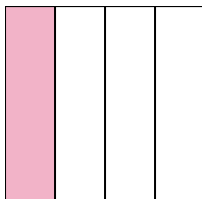
12)



13)



14)

**Answers**Ex. one-fourth

1. _____

2. _____

3. _____

4. _____

5. _____

6. _____

7. _____

8. _____

9. _____

10. _____

11. _____

12. _____

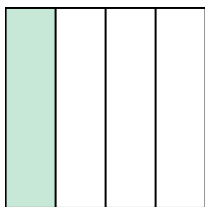
13. _____

14. _____




Write the shaded amount in word form.

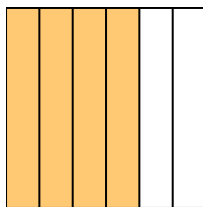
Ex)



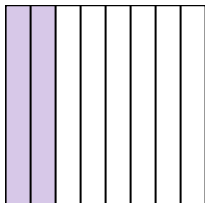
1)




2)



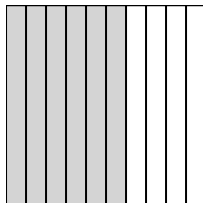
3)



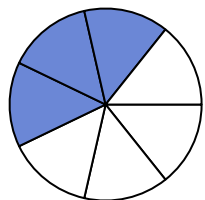
4)



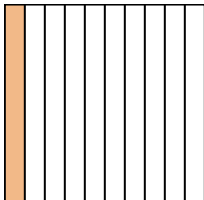
5)



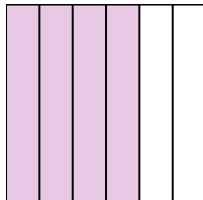
6)



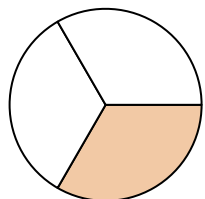
7)




8)



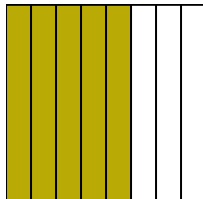
9)



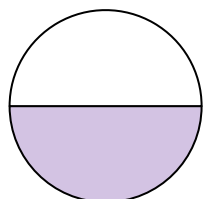
10)



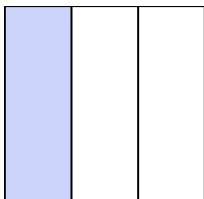
11)



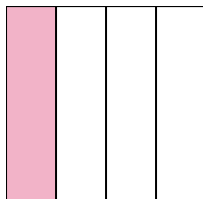
12)



13)



14)

**Answers**

Ex.

one-fourth

1.

two-fifths

2.

four-sixths

3.

two-eighths

4.

seven-ninths

5.

six-tenths

6.

three-sevenths

7.

one-tenth

8.

four-sixths

9.

one-third

10.

one-half

11.

five-eighths

12.

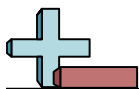
one-half

13.

one-third


14.

one-fourth

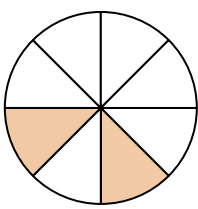


Write the shaded amount in word form.

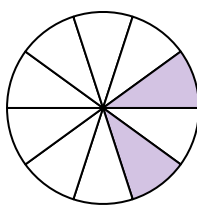
Ex)



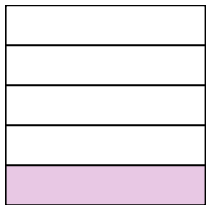
1)




2)



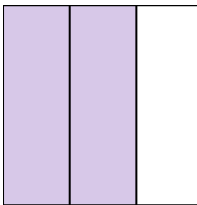
3)



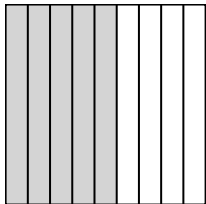
4)



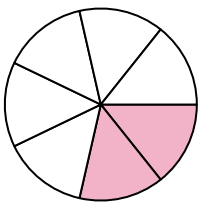
5)




6)




7)




8)




9)




10)




11)



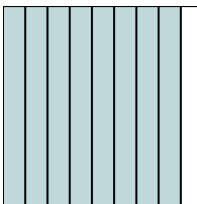
12)



13)



14)

**Answers**Ex. seven-eighths

1. _____

2. _____

3. _____

4. _____

5. _____

6. _____

7. _____

8. _____

9. _____

10. _____

11. _____

12. _____


13. _____

14. _____

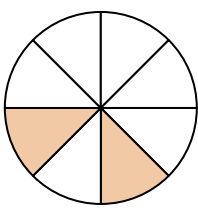


Write the shaded amount in word form.

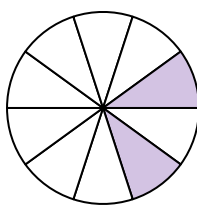
Ex)



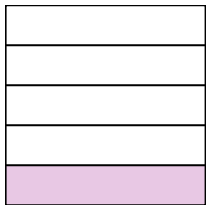
1)




2)



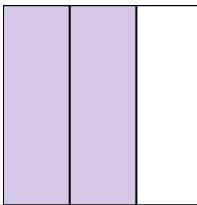
3)



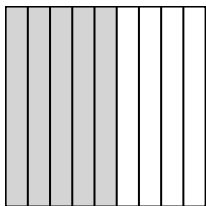
4)



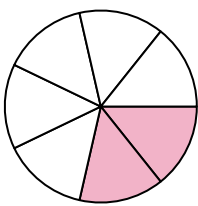
5)




6)




7)




8)




9)




10)




11)



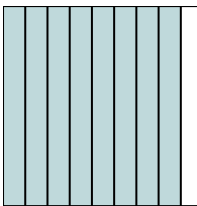
12)



13)



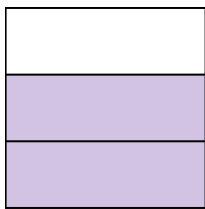
14)

**Answers**Ex. **seven-eighths**1. **two-eighths**2. **two-tenths**3. **one-fifth**4. **one-half**5. **two-thirds**6. **five-ninths**7. **two-sevenths**8. **one-third**9. **three-fifths**10. **two-fourths**11. **five-sixths**12. **eight-tenths**13. **two-sixths**14. **eight-ninths**




Write the shaded amount in word form.

Ex)




1)




2)



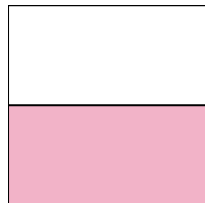
3)



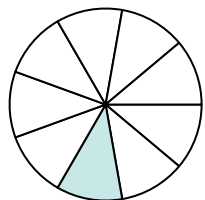
4)



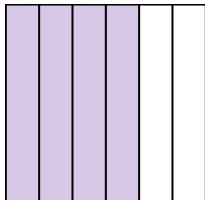
5)




6)




7)



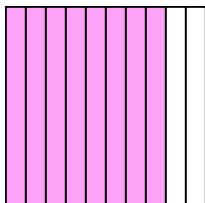
8)



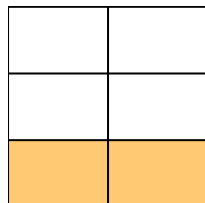
9)



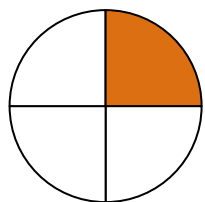
10)



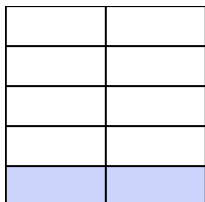
11)



12)



13)



14)

**Answers**Ex. **two-thirds**

1. _____

2. _____

3. _____

4. _____

5. _____

6. _____

7. _____

8. _____

9. _____

10. _____

11. _____

12. _____

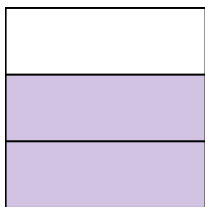
13. _____

14. _____




Write the shaded amount in word form.

Ex)




1)




2)



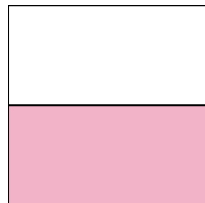
3)



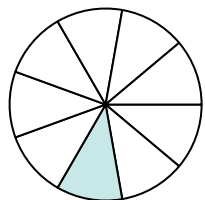
4)



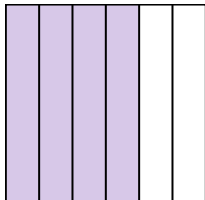
5)




6)




7)



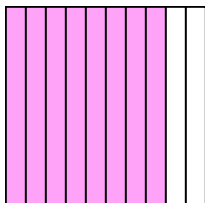
8)



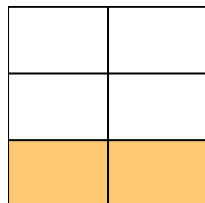
9)



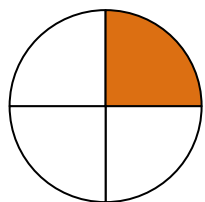
10)



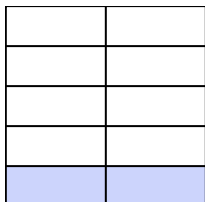
11)




12)



13)




14)

**Answers**Ex. two-thirds1. two-fourths2. three-sevenths3. one-third4. one-half5. one-half6. one-ninth7. four-sixths8. seven-eighths9. four-fifths10. eight-tenths11. two-fifths12. one-fourth13. two-ninths14. one-sixth

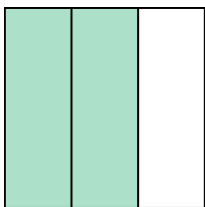


Write the shaded amount in word form.

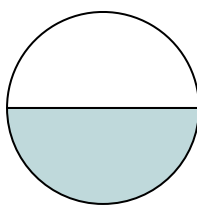
Ex)



1)



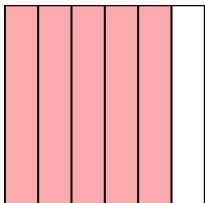
2)




3)



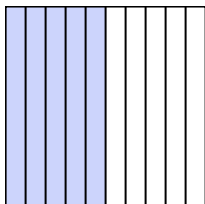
4)



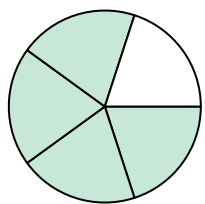
5)



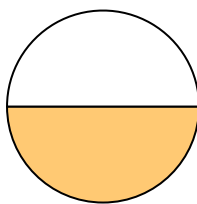
6)



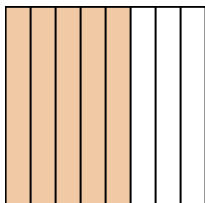
7)




8)




9)




10)



11)



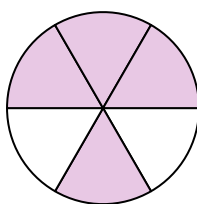
12)



13)



14)

**Answers**

Ex.

one-third

1.

2.

3.

4.

5.

6.

7.

8.

9.

10.

11.

12.


13.

14.

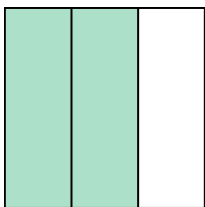


Write the shaded amount in word form.

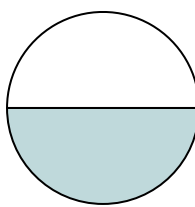
Ex)



1)



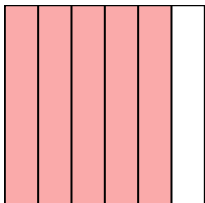
2)



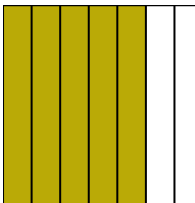
3)



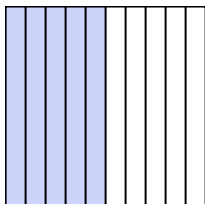
4)



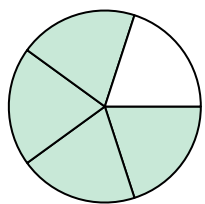
5)



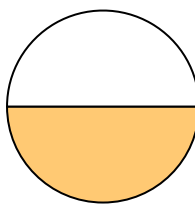
6)



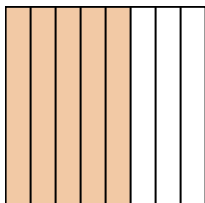
7)




8)




9)




10)




11)



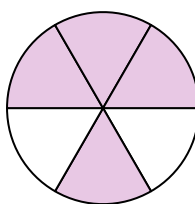
12)



13)



14)

**Answers**

Ex.

one-third

1.

two-thirds

2.

one-half

3.

one-fifth

4.

five-sixths

5.

five-sevenths

6.

five-tenths

7.

four-fifths

8.

one-half

9.

five-eighths

10.

two-fourths

11.

one-eighth

12.

four-sevenths

13.

three-fourths


14.

four-sixths

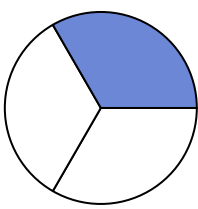


Write the shaded amount in word form.

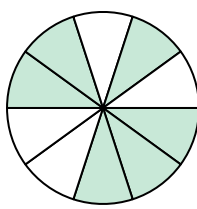
Ex)



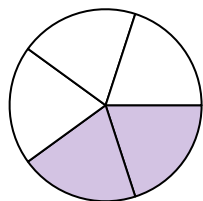
1)



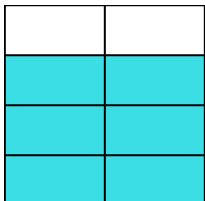
2)



3)



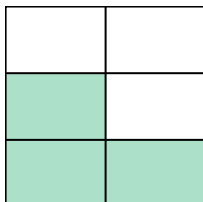
4)



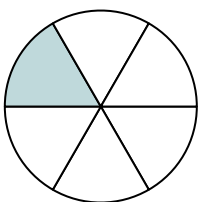
5)



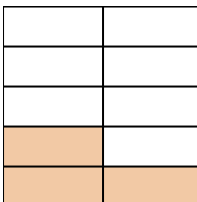
6)




7)



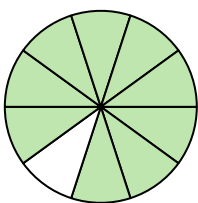
8)




9)



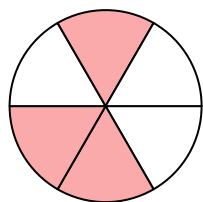
10)




11)



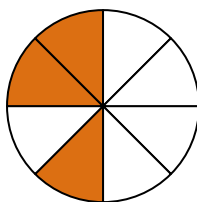
12)



13)



14)

**Answers**Ex. five-eighths

1. _____

2. _____

3. _____

4. _____

5. _____

6. _____

7. _____

8. _____

9. _____

10. _____

11. _____

12. _____


13. _____

14. _____

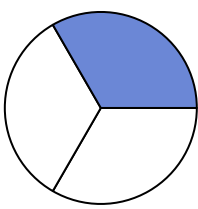


Write the shaded amount in word form.

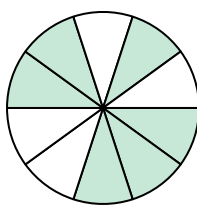
Ex)



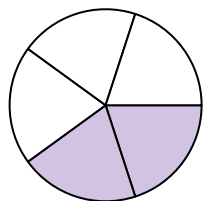
1)



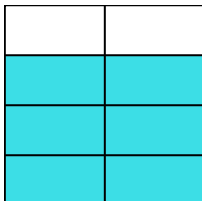
2)



3)



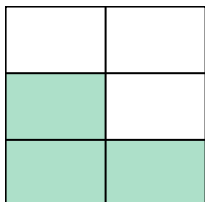
4)



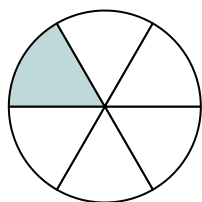
5)



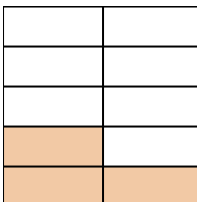
6)




7)



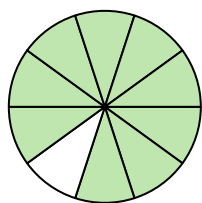
8)




9)



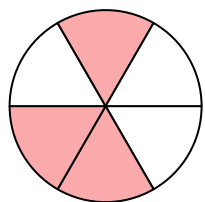
10)



11)



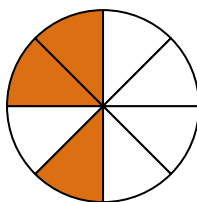
12)



13)



14)

**Answers**

Ex.

five-eighths

1.

one-third

2.

six-tenths

3.

two-fifths

4.

six-sevenths

5.

three-sevenths

6.

three-fifths

7.

one-sixth

8.

three-ninths

9.

two-fourths

10.

nine-tenths

11.

three-fourths

12.

three-sixths

13.

one-half

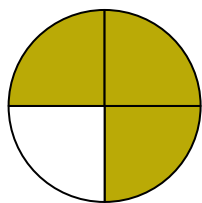
14.

three-eighths



Write the shaded amount in word form.

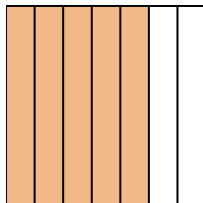
Ex)




1)



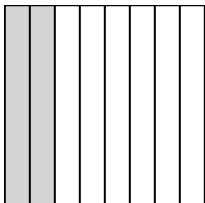
2)



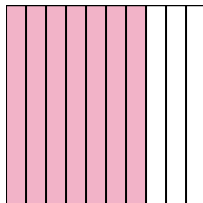
3)



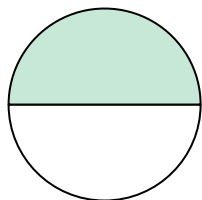
4)




5)



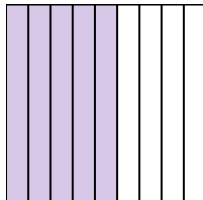
6)




7)




8)



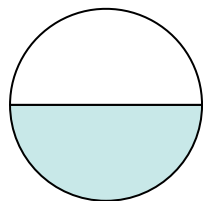
9)



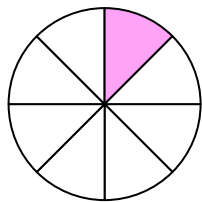
10)



11)



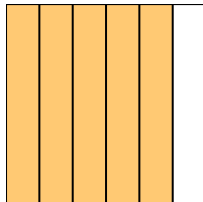
12)



13)



14)

**Answers**Ex. three-fourths

1. _____

2. _____

3. _____

4. _____

5. _____

6. _____

7. _____

8. _____

9. _____

10. _____

11. _____

12. _____

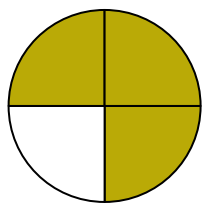
13. _____

14. _____




Write the shaded amount in word form.

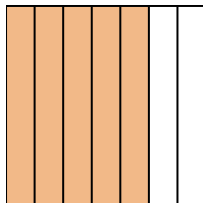
Ex)




1)



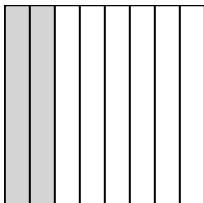
2)



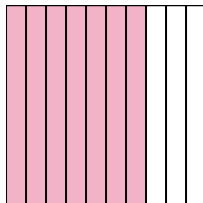
3)



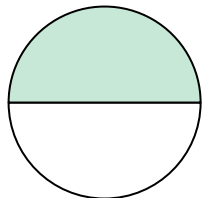
4)



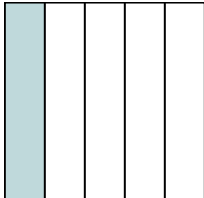
5)



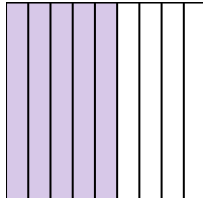
6)




7)




8)



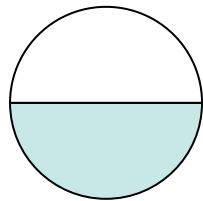
9)



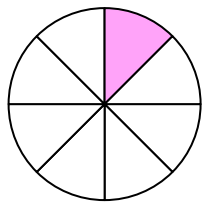
10)



11)



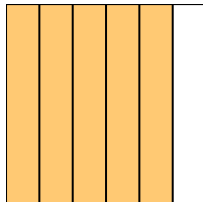
12)



13)



14)

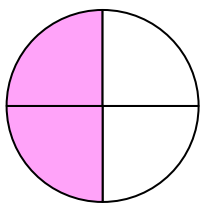
**Answers**

- Ex. three-fourths
1. one-fourth
2. five-sevenths
3. four-ninths
4. two-eighths
5. seven-tenths
6. one-half
7. one-fifth
8. five-ninths
9. two-fifths
10. one-third
11. one-half
12. one-eighth
13. two-tenths
14. five-sixths

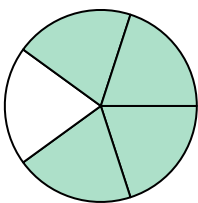


Write the shaded amount in word form.

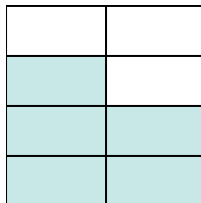
Ex)



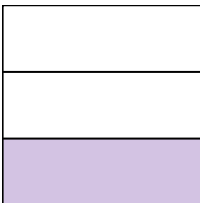
1)



2)



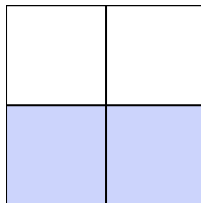
3)



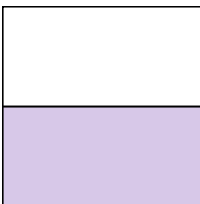
4)



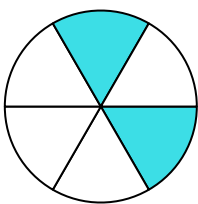
5)



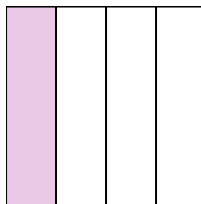
6)




7)



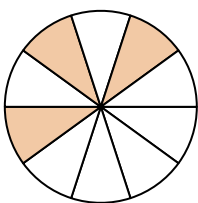
8)



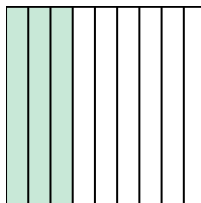
9)



10)



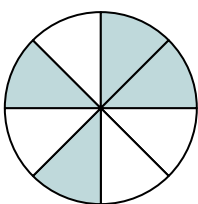
11)




12)



13)



14)

**Answers**Ex. two-fourths

1. _____

2. _____

3. _____

4. _____

5. _____

6. _____

7. _____

8. _____

9. _____

10. _____

11. _____

12. _____

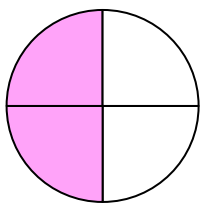
13. _____

14. _____

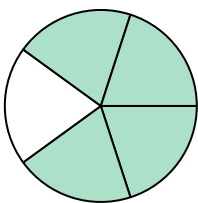


Write the shaded amount in word form.

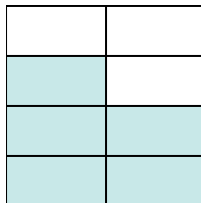
Ex)



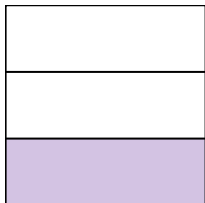
1)




2)



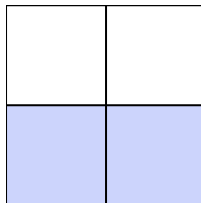
3)




4)



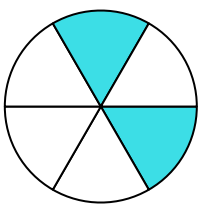
5)



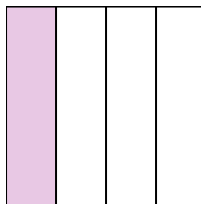
6)




7)



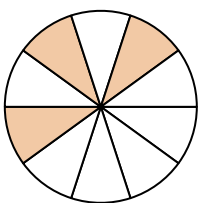
8)



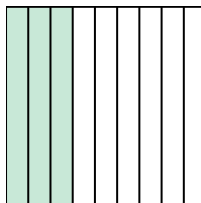
9)




10)



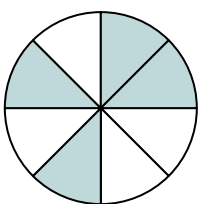
11)




12)



13)




14)

**Answers**Ex. two-fourths1. four-fifths2. five-sevenths3. one-third4. three-ninths5. two-thirds6. one-half7. two-sixths8. one-fourth9. one-half10. three-tenths11. three-ninths12. one-tenth13. four-eighths14. five-eighths




Write the shaded amount in word form.

Ex)



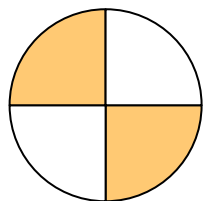
1)



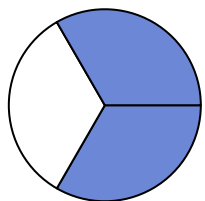
2)




3)



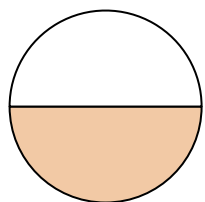
4)



5)



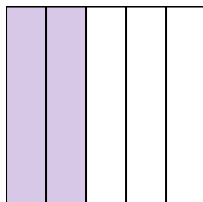
6)




7)




8)



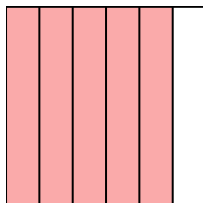
9)




10)



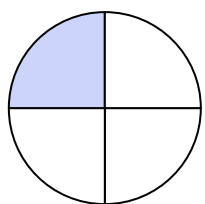
11)



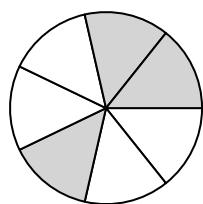
12)



13)



14)

**Answers**

Ex.

one-half

1.

2.

3.

4.

5.

6.

7.

8.

9.

10.

11.

12.


13.

14.




Write the shaded amount in word form.

Ex)



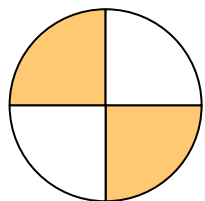
1)



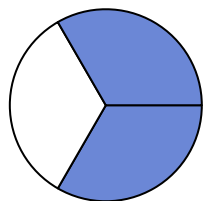
2)




3)



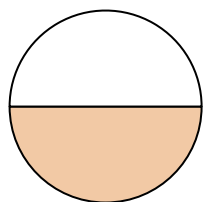
4)




5)



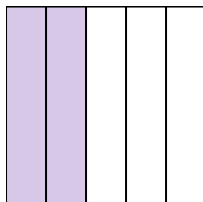
6)




7)




8)



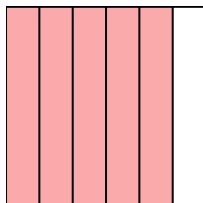
9)




10)



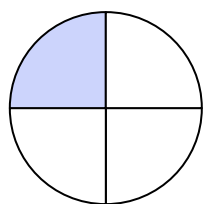
11)



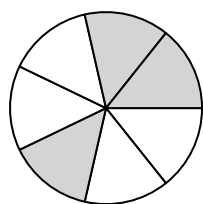
12)



13)



14)

**Answers**

Ex.

one-half

1.

two-fifths

2.

five-tenths

3.

two-fourths

4.

two-thirds

5.

five-sevenths

6.

one-half

7.

four-eighths

8.

two-fifths

9.

two-thirds

10.

one-ninth

11.

five-sixths

12.

three-sixths

13.

one-fourth

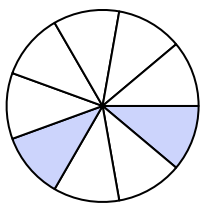
14.

three-sevenths




Write the shaded amount in word form.


Ex)



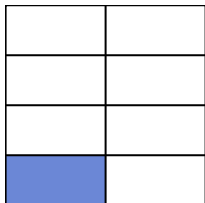
1)



2)



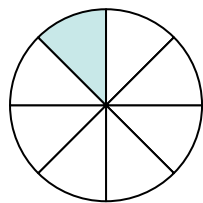
3)



4)




5)



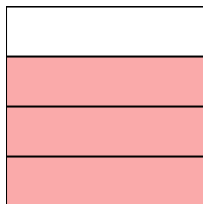
6)



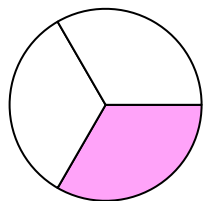
7)



8)



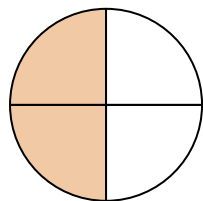
9)



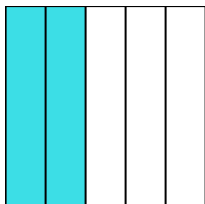
10)



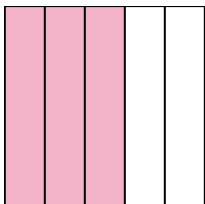
11)



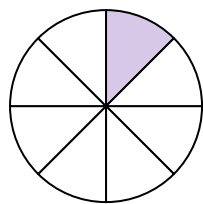
12)



13)



14)

**Answers**Ex. two-ninths

1. _____

2. _____

3. _____

4. _____

5. _____

6. _____

7. _____

8. _____

9. _____

10. _____

11. _____

12. _____

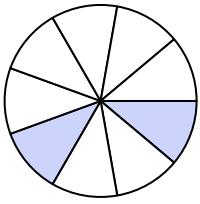
13. _____

14. _____




Write the shaded amount in word form.


Ex)



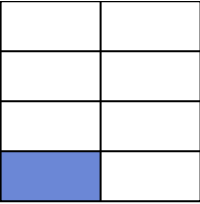
1)




2)



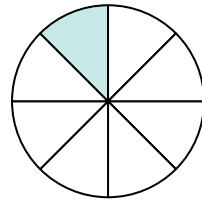
3)




4)




5)



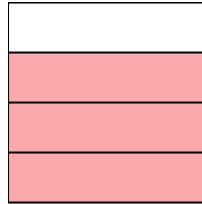
6)



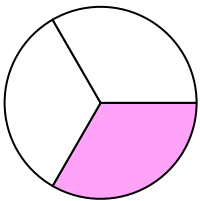
7)



8)



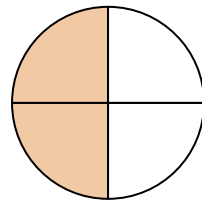
9)



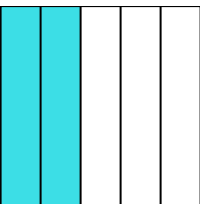
10)



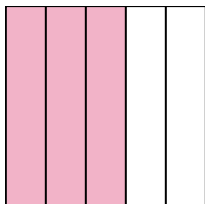
11)



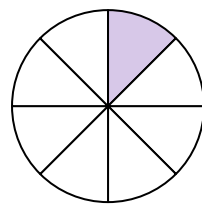
12)



13)



14)

**Answers**Ex. two-ninths1. nine-tenths2. one-half3. one-seventh4. seven-ninths5. one-eighth6. two-tenths7. four-sixths8. three-fourths9. one-third10. one-seventh11. two-fourths12. two-fifths13. three-fifths14. one-eighth