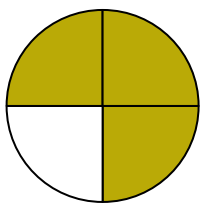




Write the shaded amount in word form.

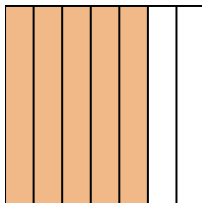
Ex)




1)



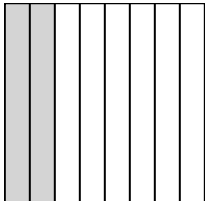
2)




3)



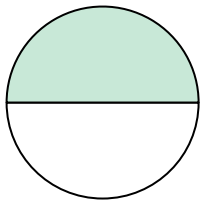
4)




5)



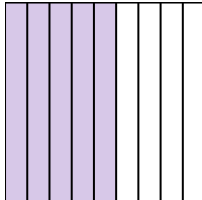
6)




7)




8)



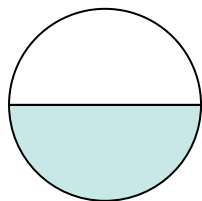
9)



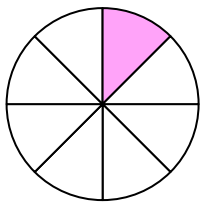
10)



11)



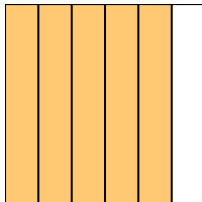
12)



13)



14)

**Answers**Ex. three-fourths

1. _____

2. _____

3. _____

4. _____

5. _____

6. _____

7. _____

8. _____

9. _____

10. _____

11. _____

12. _____

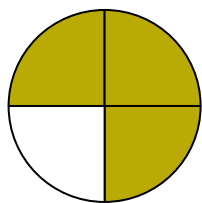
13. _____

14. _____




Write the shaded amount in word form.

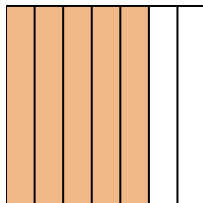
Ex)




1)



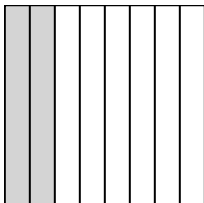
2)



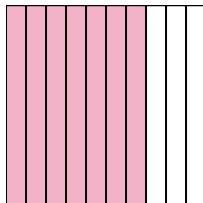
3)



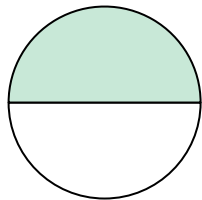
4)




5)



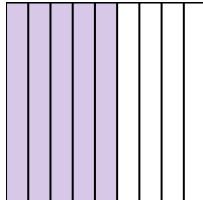
6)




7)




8)



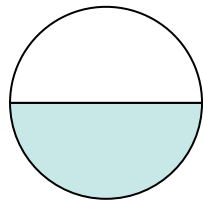
9)



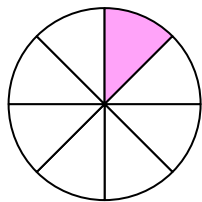
10)



11)



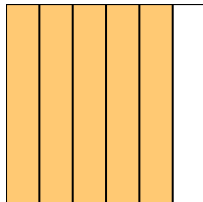
12)



13)



14)

**Answers**

- Ex. three-fourths
1. one-fourth
2. five-sevenths
3. four-ninths
4. two-eighths
5. seven-tenths
6. one-half
7. one-fifth
8. five-ninths
9. two-fifths
10. one-third
11. one-half
12. one-eighth
13. two-tenths
14. five-sixths