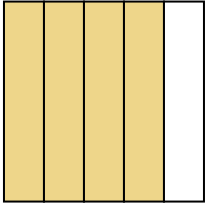


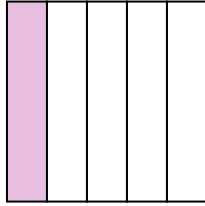


Write the shaded amount in word form.

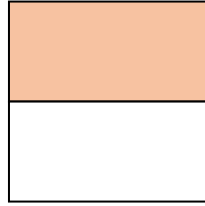
Ex)



1)



2)



Answers

Ex.

four-fifths

1.

2.

3.

4.

5.

6.

7.

8.

9.

10.

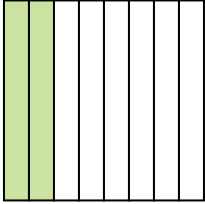
11.

12.


13.

14.

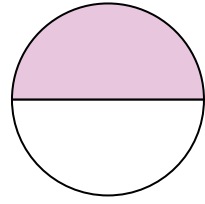
3)



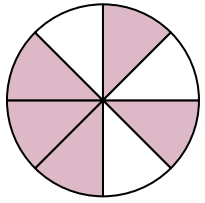
4)



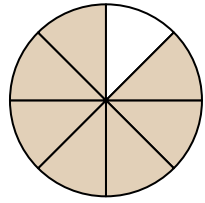
5)



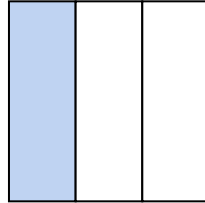
6)




7)



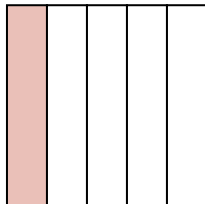
8)



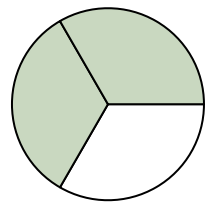
9)



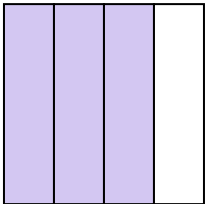
10)



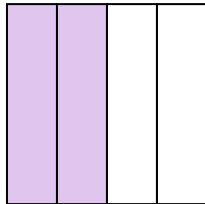
11)



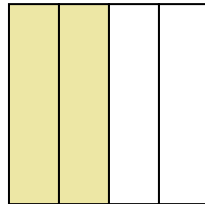
12)



13)



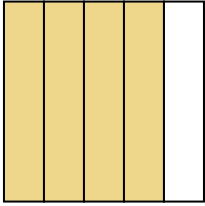
14)



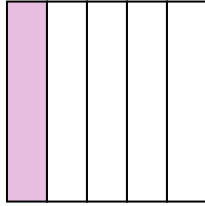


Write the shaded amount in word form.

Ex)



1)



2)



Answers

Ex.

four-fifths

1.

one-fifth

2.

one-half

3.

two-eighths

4.

one-half

5.

one-half

6.

five-eighths

7.

seven-eighths

8.

one-third

9.

two-thirds

10.

one-fifth

11.

two-thirds

12.

three-fourths

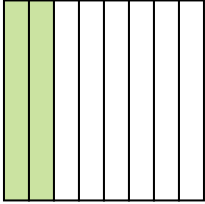
13.

two-fourths


14.

two-fourths

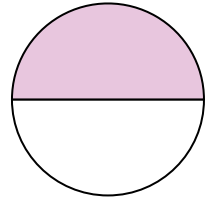
3)



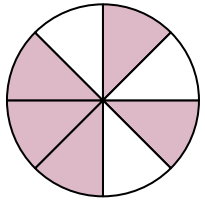
4)



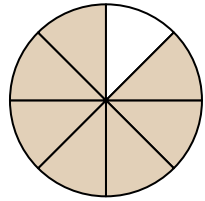
5)




6)




7)



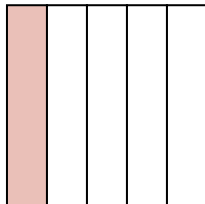
8)



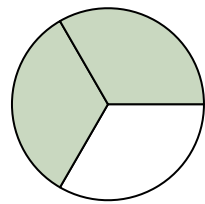
9)



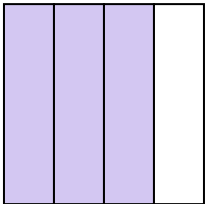
10)



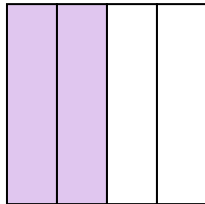
11)



12)



13)



14)

