


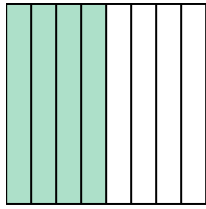


Write the shaded amount as a fraction.


Ex)



1)



2)



Answers

Ex. $\frac{1}{2}$

1. _____

2. _____

3. _____

4. _____

5. _____

6. _____

7. _____

8. _____

9. _____

10. _____

11. _____

12. _____

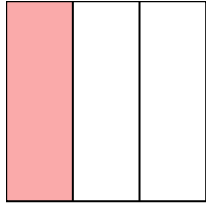
13. _____

14. _____


3)



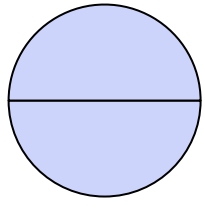
4)



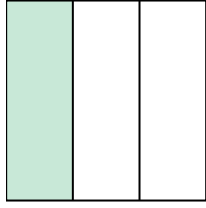
5)



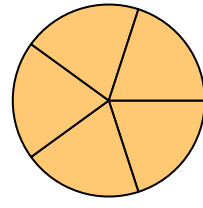
6)



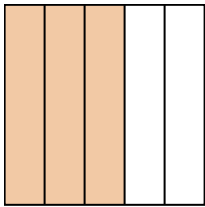
7)




8)




9)




10)



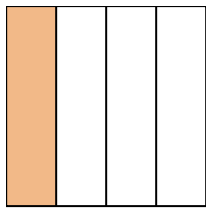
11)



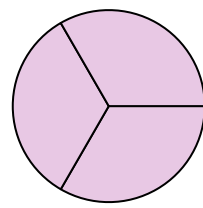
12)



13)

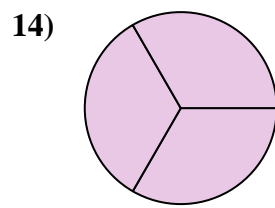
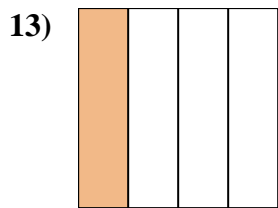
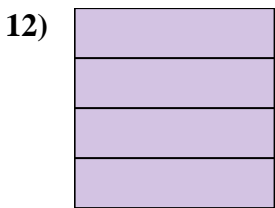
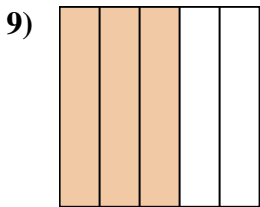
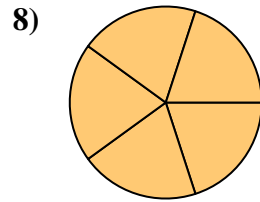
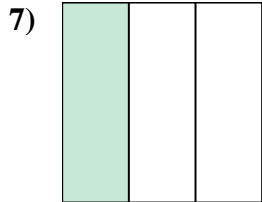
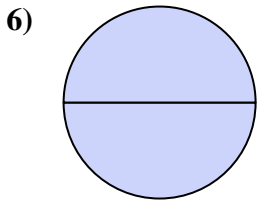
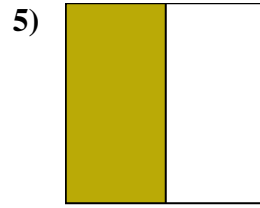
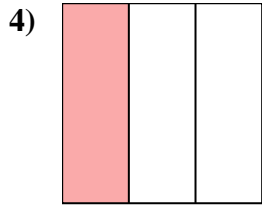
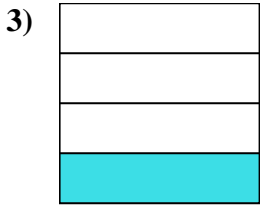
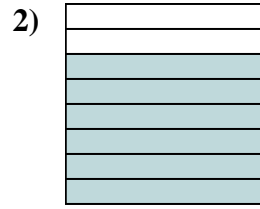
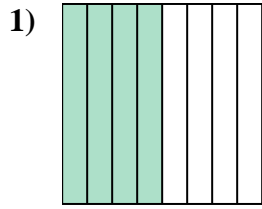
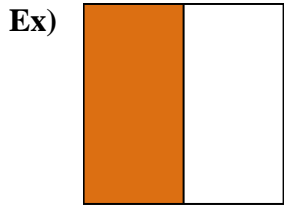


14)





Write the shaded amount as a fraction.



Answers

Ex. 1/2

1. 4/8

2. 6/8

3. 1/4

4. 1/3

5. 1/2

6. 2/2

7. 1/3

8. 5/5

9. 3/5

10. 3/5

11. 7/8

12. 4/4

13. 1/4

14. 3/3