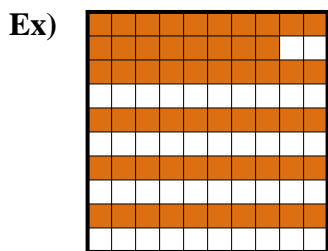
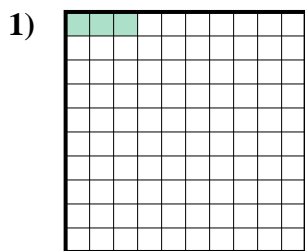




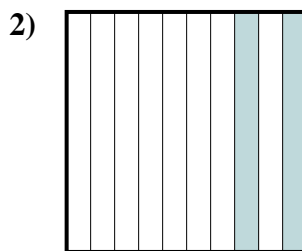
Determine the value written as a fraction , decimal & a percent.



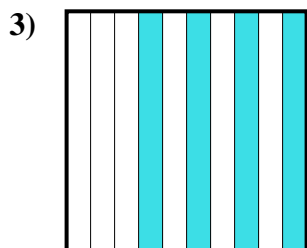
fraction $\frac{58}{100}$
 decimal 0.58
 percent 58



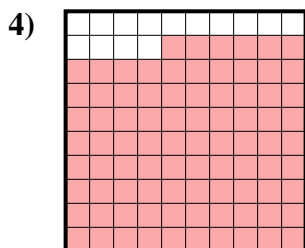
fraction $\frac{3}{100}$
 decimal 0.03
 percent 3



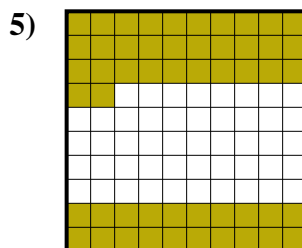
fraction $\frac{2}{10}$
 decimal 0.2
 percent 20




fraction $\frac{4}{10}$
 decimal 0.4
 percent 40



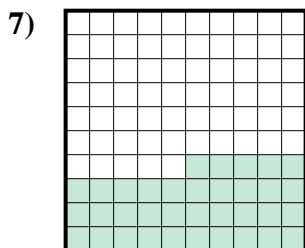
fraction $\frac{86}{100}$
 decimal 0.86
 percent 86



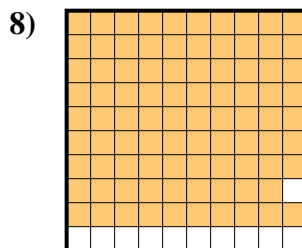
fraction $\frac{52}{100}$
 decimal 0.52
 percent 52



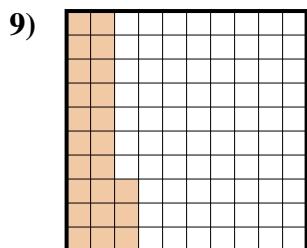
fraction $\frac{5}{10}$
 decimal 0.5
 percent 50



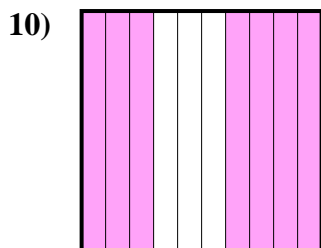
fraction $\frac{35}{100}$
 decimal 0.35
 percent 35



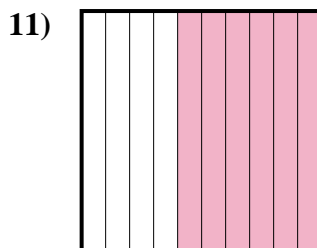
fraction $\frac{89}{100}$
 decimal 0.89
 percent 89



fraction $\frac{23}{100}$
 decimal 0.23
 percent 23



fraction $\frac{7}{10}$
 decimal 0.7
 percent 70



fraction $\frac{6}{10}$
 decimal 0.6
 percent 60

Answers

| | | | |
|-----|------------------|-------------|------------|
| Ex. | $\frac{58}{100}$ | 0.58 | 58% |
| 1. | $\frac{3}{100}$ | 0.03 | 3% |
| 2. | $\frac{2}{10}$ | 0.2 | 20% |
| 3. | $\frac{4}{10}$ | 0.4 | 40% |
| 4. | $\frac{86}{100}$ | 0.86 | 86% |
| 5. | $\frac{52}{100}$ | 0.52 | 52% |
| 6. | $\frac{5}{10}$ | 0.5 | 50% |
| 7. | $\frac{35}{100}$ | 0.35 | 35% |
| 8. | $\frac{89}{100}$ | 0.89 | 89% |
| 9. | $\frac{23}{100}$ | 0.23 | 23% |
| 10. | $\frac{7}{10}$ | 0.7 | 70% |
| 11. | $\frac{6}{10}$ | 0.6 | 60% |