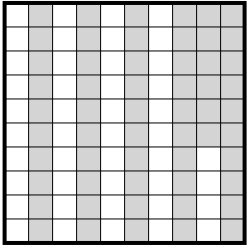




Determine the value written as a fraction , decimal & a percent.

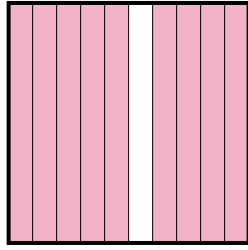
**Answers**

Ex)



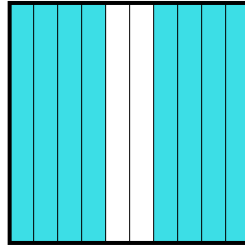
fraction  $\frac{56}{100}$   
 decimal 0.56  
 percent 56

1)



fraction \_\_\_\_\_  
 decimal \_\_\_\_\_  
 percent \_\_\_\_\_

2)



fraction \_\_\_\_\_  
 decimal \_\_\_\_\_  
 percent \_\_\_\_\_

Ex.  $\frac{56}{100}$  **0.56** **56%**

1. \_\_\_\_\_

2. \_\_\_\_\_

3. \_\_\_\_\_

4. \_\_\_\_\_

5. \_\_\_\_\_

6. \_\_\_\_\_

7. \_\_\_\_\_

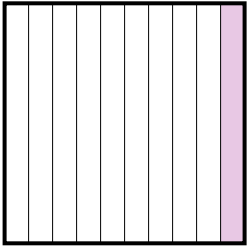
8. \_\_\_\_\_

9. \_\_\_\_\_

10. \_\_\_\_\_

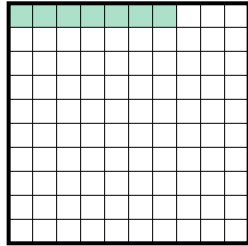
11. \_\_\_\_\_

3)



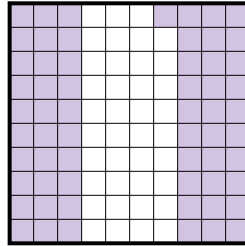
fraction \_\_\_\_\_  
 decimal \_\_\_\_\_  
 percent \_\_\_\_\_

4)




fraction \_\_\_\_\_  
 decimal \_\_\_\_\_  
 percent \_\_\_\_\_

5)



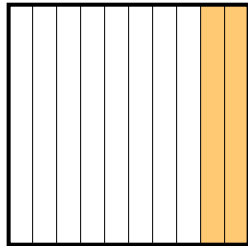
fraction \_\_\_\_\_  
 decimal \_\_\_\_\_  
 percent \_\_\_\_\_

6)



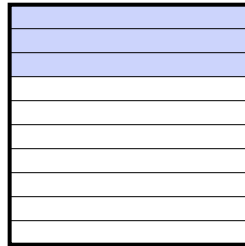
fraction \_\_\_\_\_  
 decimal \_\_\_\_\_  
 percent \_\_\_\_\_

7)



fraction \_\_\_\_\_  
 decimal \_\_\_\_\_  
 percent \_\_\_\_\_

8)



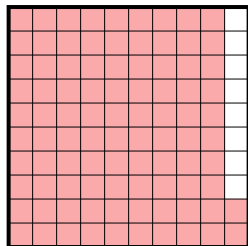
fraction \_\_\_\_\_  
 decimal \_\_\_\_\_  
 percent \_\_\_\_\_

9)



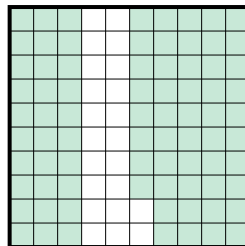
fraction \_\_\_\_\_  
 decimal \_\_\_\_\_  
 percent \_\_\_\_\_

10)



fraction \_\_\_\_\_  
 decimal \_\_\_\_\_  
 percent \_\_\_\_\_

11)



fraction \_\_\_\_\_  
 decimal \_\_\_\_\_  
 percent \_\_\_\_\_

