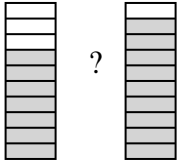


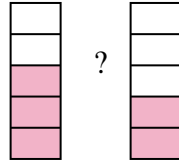


Compare the size of the fractions using  $<$ ,  $>$  or  $=$ .

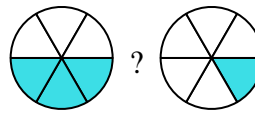
Ex)



1)



2)



**Answers**

Ex.  $\frac{7}{10}$   $<$   $\frac{9}{10}$

1. \_\_\_\_\_

2. \_\_\_\_\_

3. \_\_\_\_\_

4. \_\_\_\_\_

5. \_\_\_\_\_

6. \_\_\_\_\_

7. \_\_\_\_\_

8. \_\_\_\_\_

9. \_\_\_\_\_

10. \_\_\_\_\_

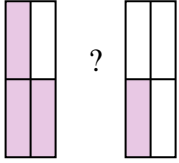
11. \_\_\_\_\_

12. \_\_\_\_\_

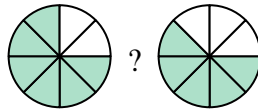
13. \_\_\_\_\_

14. \_\_\_\_\_

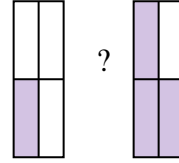
3)



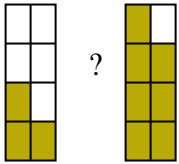
4)



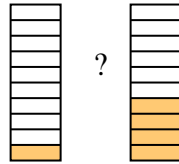
5)



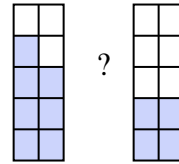
6)



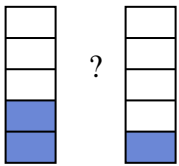
7)



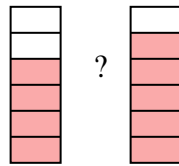
8)



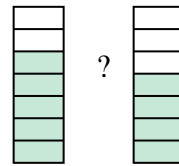
9)



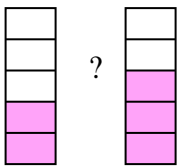
10)



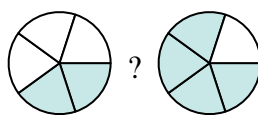
11)



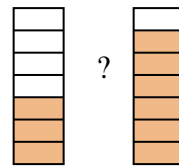
12)



13)

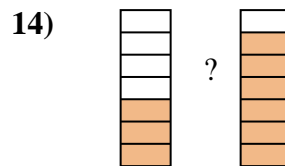
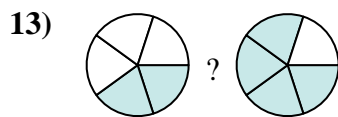
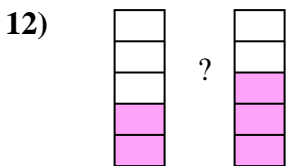
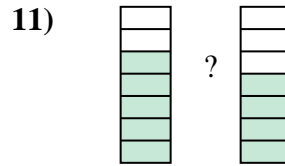
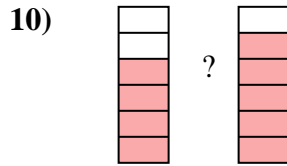
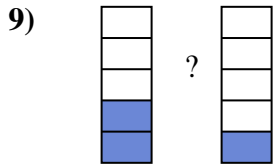
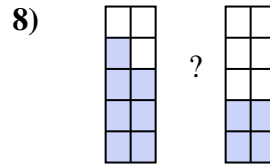
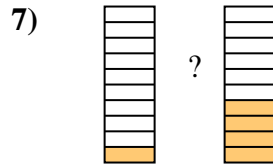
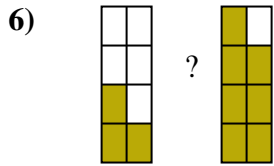
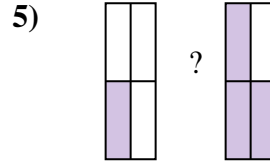
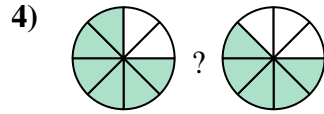
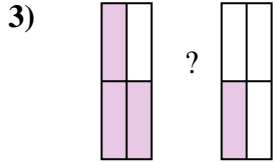
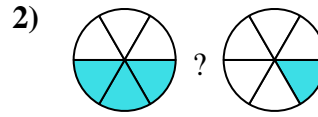
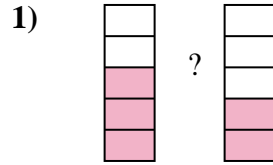
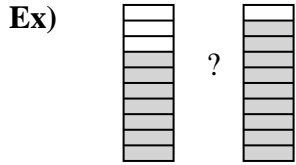


14)





Compare the size of the fractions using  $<$ ,  $>$  or  $=$ .



**Answers**

Ex.  $\frac{7}{10} < \frac{9}{10}$

1.  $\frac{3}{5} > \frac{2}{5}$

2.  $\frac{3}{6} > \frac{1}{6}$

3.  $\frac{3}{4} > \frac{1}{4}$

4.  $\frac{6}{8} > \frac{5}{8}$

5.  $\frac{1}{4} < \frac{3}{4}$

6.  $\frac{3}{8} < \frac{7}{8}$

7.  $\frac{1}{10} < \frac{4}{10}$

8.  $\frac{7}{10} > \frac{4}{10}$

9.  $\frac{2}{5} > \frac{1}{5}$

10.  $\frac{4}{6} < \frac{5}{6}$

11.  $\frac{5}{7} > \frac{4}{7}$

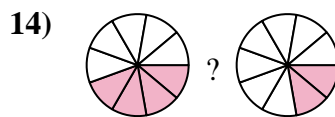
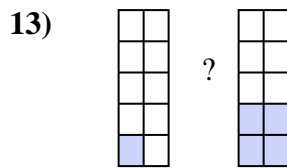
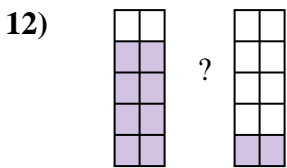
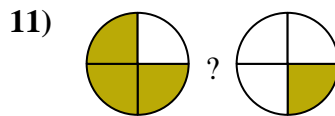
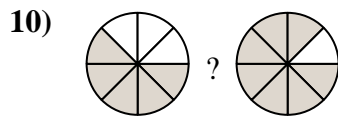
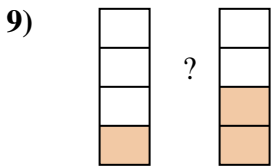
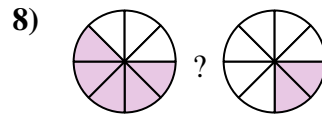
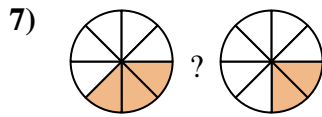
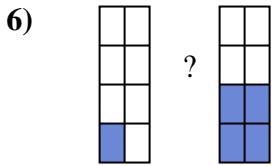
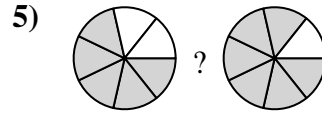
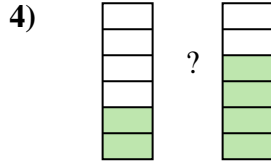
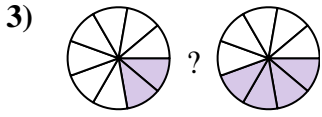
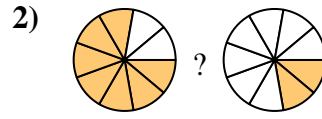
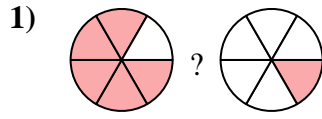
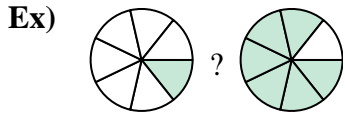
12.  $\frac{2}{5} < \frac{3}{5}$

13.  $\frac{2}{5} < \frac{4}{5}$

14.  $\frac{3}{7} < \frac{6}{7}$



Compare the size of the fractions using  $<$ ,  $>$  or  $=$ .



**Answers**

Ex.  $\frac{1}{7} < \frac{6}{7}$

1. \_\_\_\_\_

2. \_\_\_\_\_

3. \_\_\_\_\_

4. \_\_\_\_\_

5. \_\_\_\_\_

6. \_\_\_\_\_

7. \_\_\_\_\_

8. \_\_\_\_\_

9. \_\_\_\_\_

10. \_\_\_\_\_

11. \_\_\_\_\_

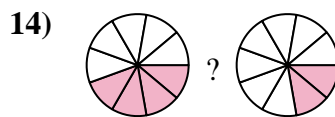
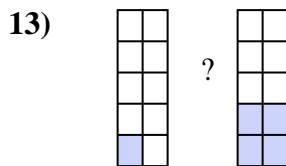
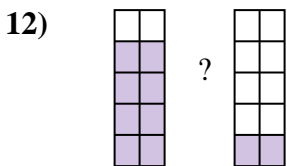
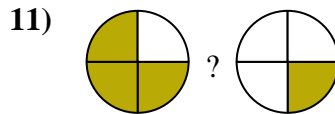
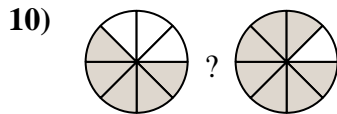
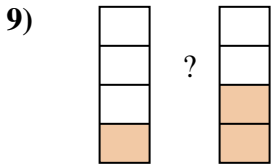
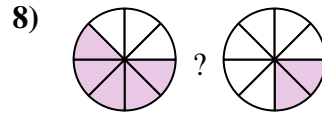
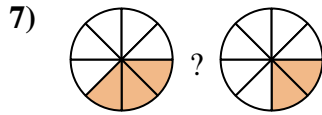
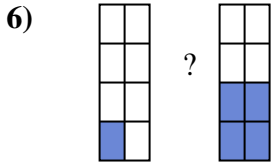
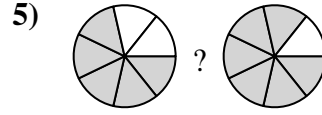
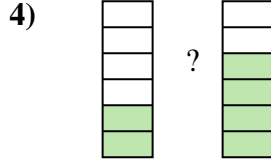
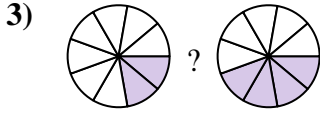
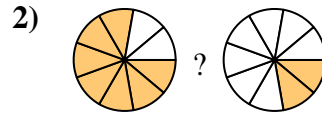
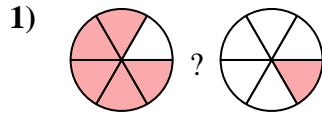
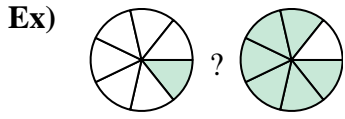
12. \_\_\_\_\_

13. \_\_\_\_\_

14. \_\_\_\_\_



Compare the size of the fractions using  $<$ ,  $>$  or  $=$ .

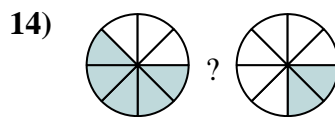
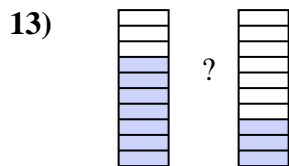
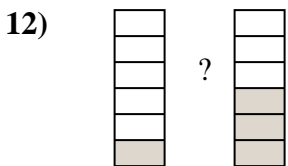
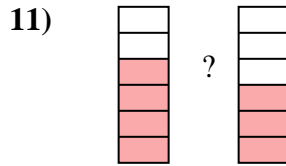
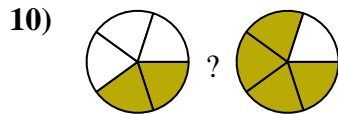
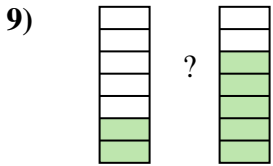
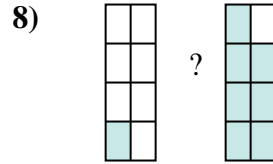
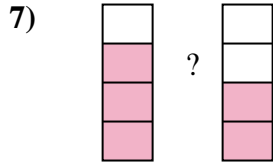
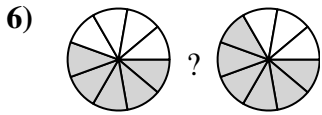
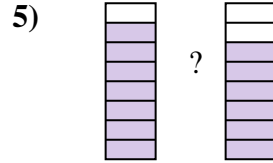
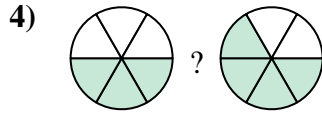
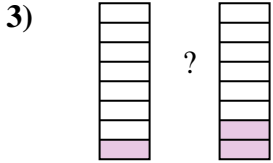
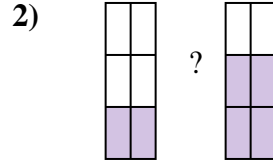
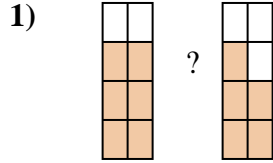
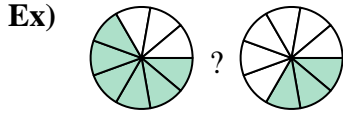


## Answers

Ex.	$\frac{1}{7}$	$<$	$\frac{6}{7}$
1.	$\frac{5}{6}$	$>$	$\frac{1}{6}$
2.	$\frac{7}{9}$	$>$	$\frac{2}{9}$
3.	$\frac{2}{9}$	$<$	$\frac{4}{9}$
4.	$\frac{2}{6}$	$<$	$\frac{4}{6}$
5.	$\frac{5}{7}$	$<$	$\frac{6}{7}$
6.	$\frac{1}{8}$	$<$	$\frac{4}{8}$
7.	$\frac{3}{8}$	$>$	$\frac{2}{8}$
8.	$\frac{5}{8}$	$>$	$\frac{2}{8}$
9.	$\frac{1}{4}$	$<$	$\frac{2}{4}$
10.	$\frac{5}{8}$	$<$	$\frac{7}{8}$
11.	$\frac{3}{4}$	$>$	$\frac{1}{4}$
12.	$\frac{8}{10}$	$>$	$\frac{2}{10}$
13.	$\frac{1}{10}$	$<$	$\frac{4}{10}$
14.	$\frac{4}{9}$	$>$	$\frac{2}{9}$



Compare the size of the fractions using  $<$ ,  $>$  or  $=$ .



**Answers**

Ex.  $\frac{6}{9} > \frac{3}{9}$

1. \_\_\_\_\_

2. \_\_\_\_\_

3. \_\_\_\_\_

4. \_\_\_\_\_

5. \_\_\_\_\_

6. \_\_\_\_\_

7. \_\_\_\_\_

8. \_\_\_\_\_

9. \_\_\_\_\_

10. \_\_\_\_\_

11. \_\_\_\_\_

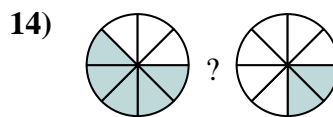
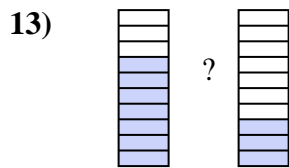
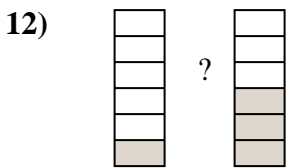
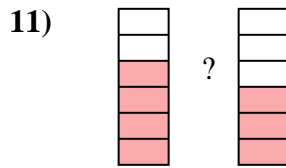
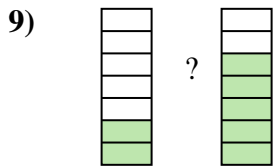
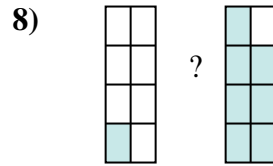
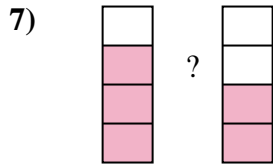
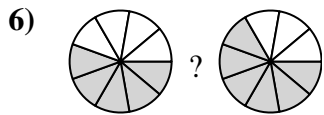
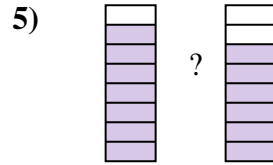
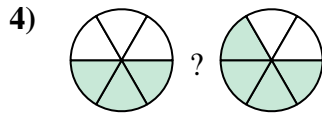
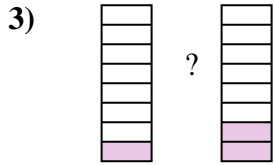
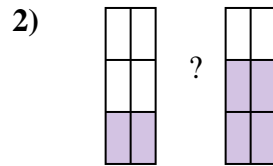
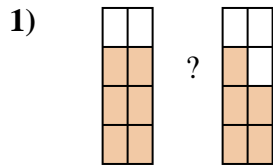
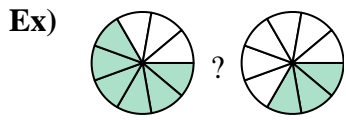
12. \_\_\_\_\_

13. \_\_\_\_\_

14. \_\_\_\_\_



Compare the size of the fractions using  $<$ ,  $>$  or  $=$ .

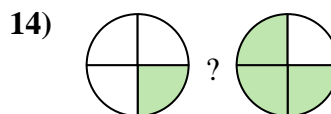
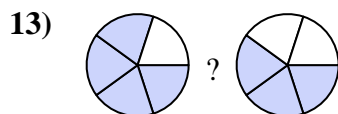
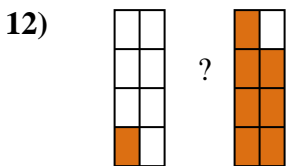
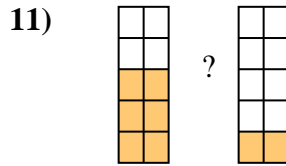
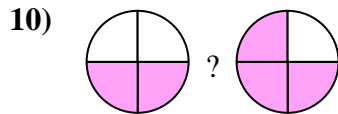
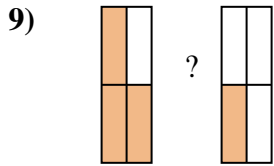
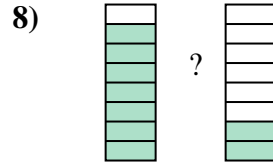
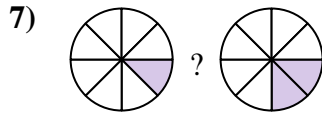
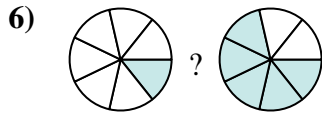
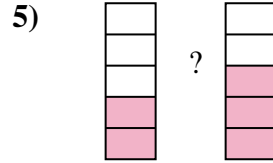
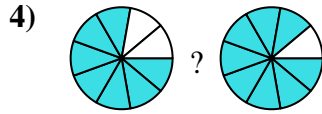
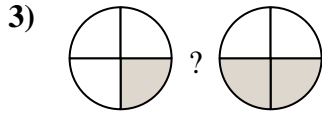
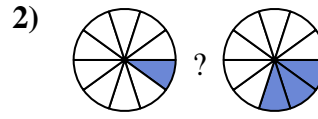

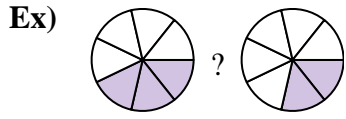


**Answers**

Ex.	$\frac{6}{9}$	$>$	$\frac{3}{9}$
1.	$\frac{6}{8}$	$>$	$\frac{5}{8}$
2.	$\frac{2}{6}$	$<$	$\frac{4}{6}$
3.	$\frac{1}{8}$	$<$	$\frac{2}{8}$
4.	$\frac{3}{6}$	$<$	$\frac{4}{6}$
5.	$\frac{7}{8}$	$>$	$\frac{6}{8}$
6.	$\frac{5}{9}$	$<$	$\frac{6}{9}$
7.	$\frac{3}{4}$	$>$	$\frac{2}{4}$
8.	$\frac{1}{8}$	$<$	$\frac{7}{8}$
9.	$\frac{2}{7}$	$<$	$\frac{5}{7}$
10.	$\frac{2}{5}$	$<$	$\frac{4}{5}$
11.	$\frac{4}{6}$	$>$	$\frac{3}{6}$
12.	$\frac{1}{6}$	$<$	$\frac{3}{6}$
13.	$\frac{7}{10}$	$>$	$\frac{3}{10}$
14.	$\frac{5}{8}$	$>$	$\frac{2}{8}$



Compare the size of the fractions using  $<$ ,  $>$  or  $=$ .



**Answers**

Ex.  $\frac{3}{7} > \frac{2}{7}$

1. \_\_\_\_\_

2. \_\_\_\_\_

3. \_\_\_\_\_

4. \_\_\_\_\_

5. \_\_\_\_\_

6. \_\_\_\_\_

7. \_\_\_\_\_

8. \_\_\_\_\_

9. \_\_\_\_\_

10. \_\_\_\_\_

11. \_\_\_\_\_

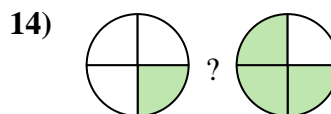
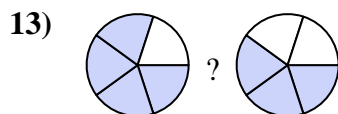
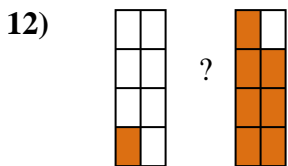
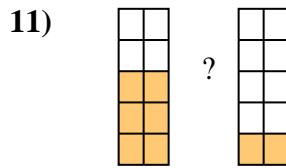
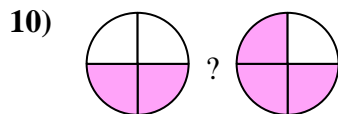
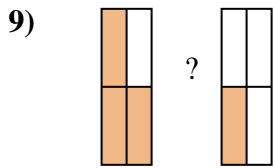
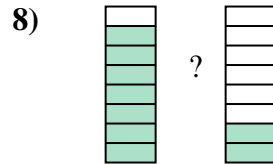
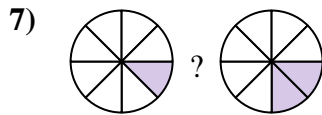
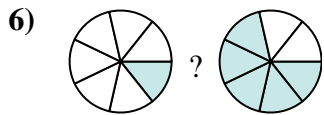
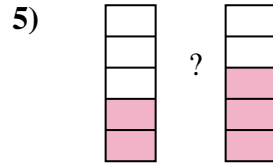
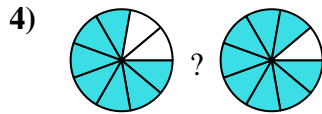
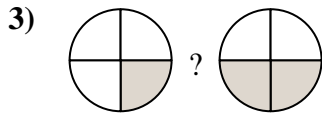
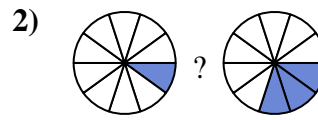

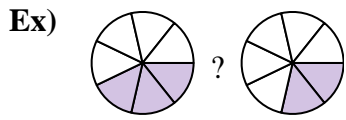
12. \_\_\_\_\_

13. \_\_\_\_\_

14. \_\_\_\_\_



Compare the size of the fractions using  $<$ ,  $>$  or  $=$ .



**Answers**

Ex.  $\frac{3}{7} > \frac{2}{7}$

1.  $\frac{4}{5} > \frac{3}{5}$

2.  $\frac{1}{10} < \frac{3}{10}$

3.  $\frac{1}{4} < \frac{2}{4}$

4.  $\frac{7}{9} < \frac{8}{9}$

5.  $\frac{2}{5} < \frac{3}{5}$

6.  $\frac{1}{7} < \frac{5}{7}$

7.  $\frac{1}{8} < \frac{2}{8}$

8.  $\frac{7}{8} > \frac{2}{8}$

9.  $\frac{3}{4} > \frac{1}{4}$

10.  $\frac{2}{4} < \frac{3}{4}$

11.  $\frac{6}{10} > \frac{2}{10}$

12.  $\frac{1}{8} < \frac{7}{8}$

13.  $\frac{4}{5} > \frac{3}{5}$

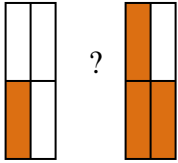
14.  $\frac{1}{4} < \frac{3}{4}$



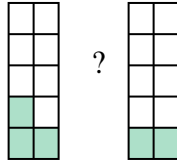


Compare the size of the fractions using  $<$ ,  $>$  or  $=$ .

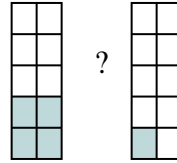
Ex)



1)



2)



Answers

Ex.  $\frac{1}{4}$   $<$   $\frac{3}{4}$

1. \_\_\_\_\_

2. \_\_\_\_\_

3. \_\_\_\_\_

4. \_\_\_\_\_

5. \_\_\_\_\_

6. \_\_\_\_\_

7. \_\_\_\_\_

8. \_\_\_\_\_

9. \_\_\_\_\_

10. \_\_\_\_\_

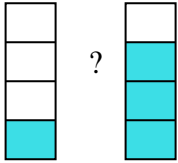
11. \_\_\_\_\_

12. \_\_\_\_\_

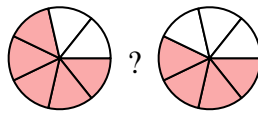
13. \_\_\_\_\_

14. \_\_\_\_\_

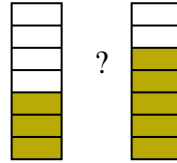
3)



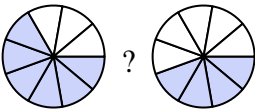
4)



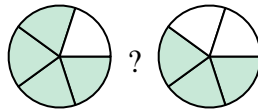
5)



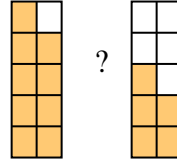
6)



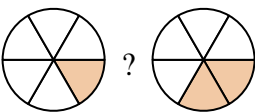
7)



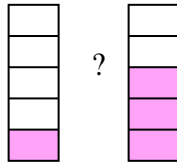
8)



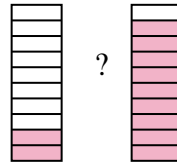
9)



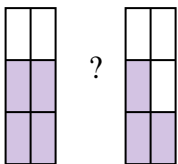
10)



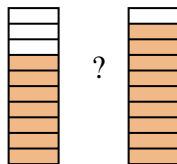
11)



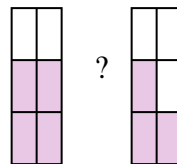
12)



13)

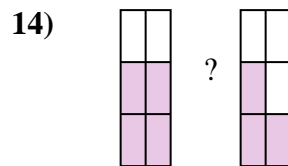
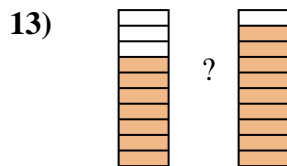
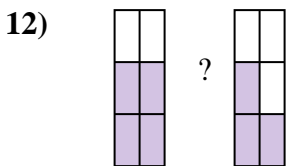
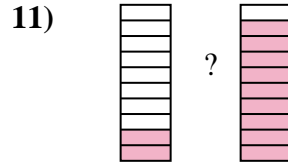
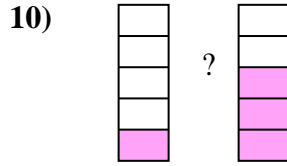
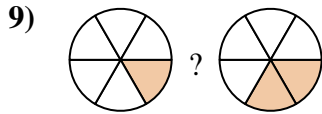
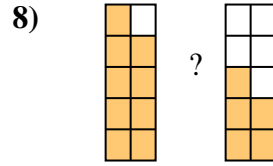
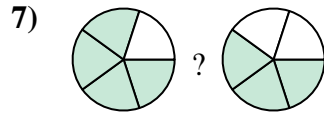
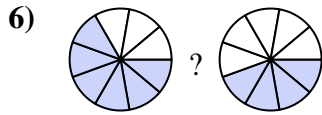

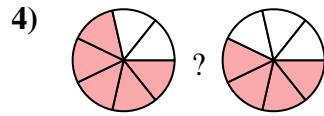

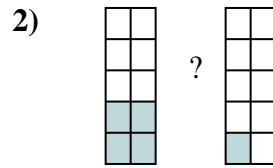
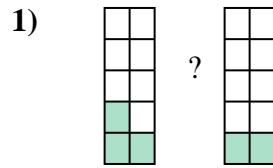
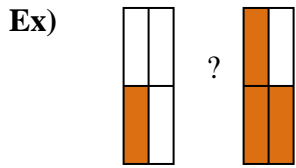


14)





Compare the size of the fractions using  $<$ ,  $>$  or  $=$ .



**Answers**

Ex.  $\frac{1}{4} < \frac{3}{4}$

1.  $\frac{3}{10} > \frac{2}{10}$

2.  $\frac{4}{10} > \frac{1}{10}$

3.  $\frac{1}{4} < \frac{3}{4}$

4.  $\frac{5}{7} > \frac{4}{7}$

5.  $\frac{3}{7} < \frac{5}{7}$

6.  $\frac{6}{9} > \frac{4}{9}$

7.  $\frac{4}{5} > \frac{3}{5}$

8.  $\frac{9}{10} > \frac{5}{10}$

9.  $\frac{1}{6} < \frac{2}{6}$

10.  $\frac{1}{5} < \frac{3}{5}$

11.  $\frac{2}{10} < \frac{9}{10}$

12.  $\frac{4}{6} > \frac{3}{6}$

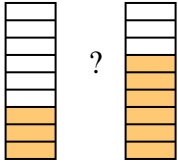
13.  $\frac{7}{10} < \frac{9}{10}$

14.  $\frac{4}{6} > \frac{3}{6}$



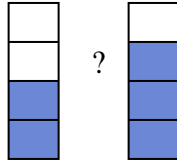
Compare the size of the fractions using  $<$ ,  $>$  or  $=$ .

Ex)



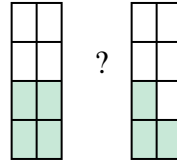
?

1)



?

2)



?

Answers

Ex.  $\frac{3}{9}$   $<$   $\frac{6}{9}$

1. \_\_\_\_\_

2. \_\_\_\_\_

3. \_\_\_\_\_

4. \_\_\_\_\_

5. \_\_\_\_\_

6. \_\_\_\_\_

7. \_\_\_\_\_

8. \_\_\_\_\_

9. \_\_\_\_\_

10. \_\_\_\_\_

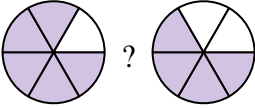
11. \_\_\_\_\_

12. \_\_\_\_\_

13. \_\_\_\_\_

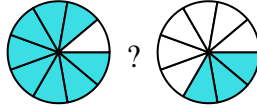
14. \_\_\_\_\_

3)



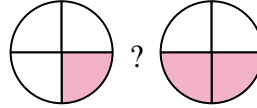
?

4)



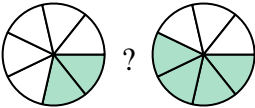
?

5)



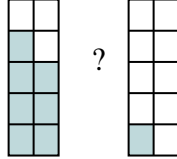
?

6)



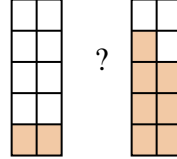
?

7)



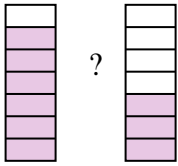
?

8)



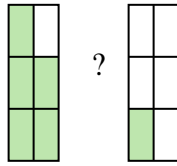
?

9)



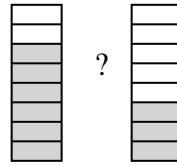
?

10)



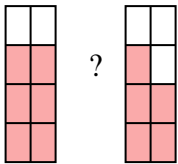
?

11)



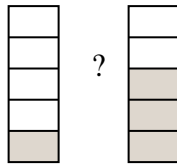
?

12)



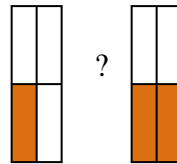
?

13)



?

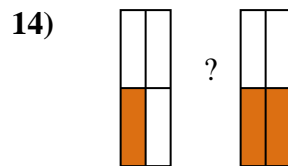
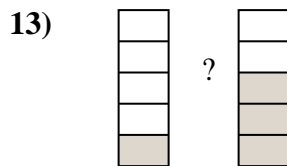
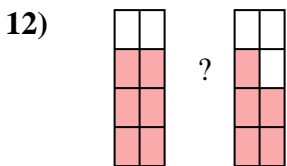
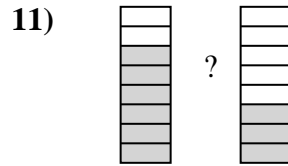
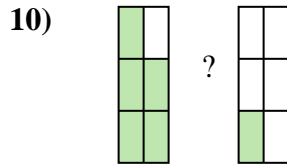
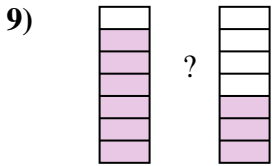
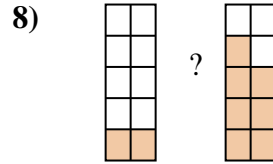
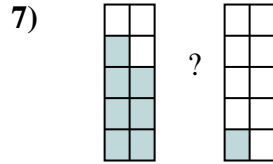
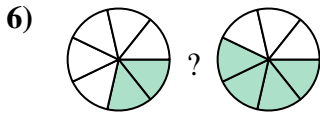
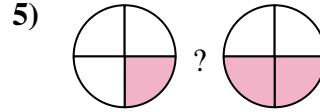
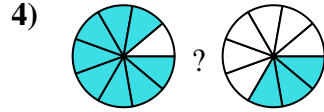
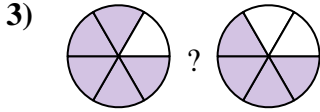
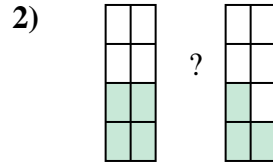
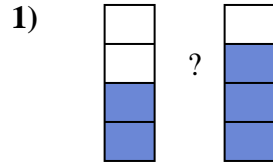
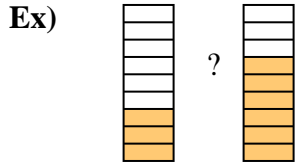
14)



?



Compare the size of the fractions using  $<$ ,  $>$  or  $=$ .



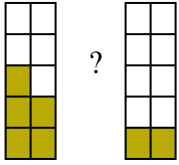
**Answers**

Ex.	$\frac{3}{9}$	$<$	$\frac{6}{9}$
1.	$\frac{2}{4}$	$<$	$\frac{3}{4}$
2.	$\frac{4}{8}$	$>$	$\frac{3}{8}$
3.	$\frac{5}{6}$	$>$	$\frac{4}{6}$
4.	$\frac{8}{9}$	$>$	$\frac{3}{9}$
5.	$\frac{1}{4}$	$<$	$\frac{2}{4}$
6.	$\frac{2}{7}$	$<$	$\frac{4}{7}$
7.	$\frac{7}{10}$	$>$	$\frac{1}{10}$
8.	$\frac{2}{10}$	$<$	$\frac{7}{10}$
9.	$\frac{6}{7}$	$>$	$\frac{3}{7}$
10.	$\frac{5}{6}$	$>$	$\frac{1}{6}$
11.	$\frac{6}{8}$	$>$	$\frac{3}{8}$
12.	$\frac{6}{8}$	$>$	$\frac{5}{8}$
13.	$\frac{1}{5}$	$<$	$\frac{3}{5}$
14.	$\frac{1}{4}$	$<$	$\frac{2}{4}$



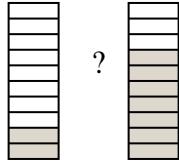
Compare the size of the fractions using  $<$ ,  $>$  or  $=$ .

Ex)



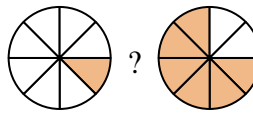
?

1)



?

2)



?

**Answers**

Ex.  $\frac{5}{10}$   $>$   $\frac{2}{10}$

1. \_\_\_\_\_

2. \_\_\_\_\_

3. \_\_\_\_\_

4. \_\_\_\_\_

5. \_\_\_\_\_

6. \_\_\_\_\_

7. \_\_\_\_\_

8. \_\_\_\_\_

9. \_\_\_\_\_

10. \_\_\_\_\_

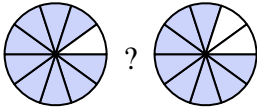
11. \_\_\_\_\_

12. \_\_\_\_\_

13. \_\_\_\_\_

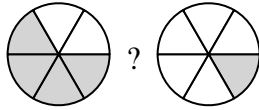
14. \_\_\_\_\_

3)



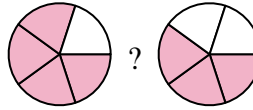
?

4)



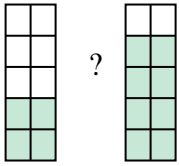
?

5)



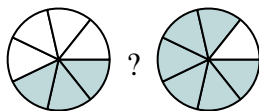
?

6)



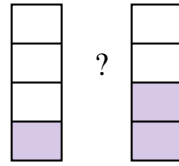
?

7)



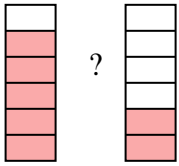
?

8)



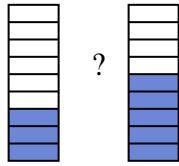
?

9)



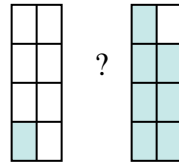
?

10)



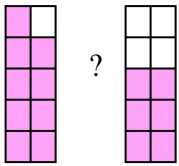
?

11)



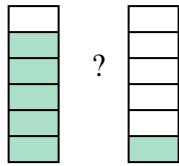
?

12)



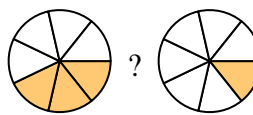
?

13)



?

14)

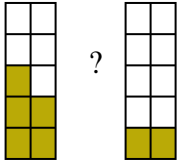


?

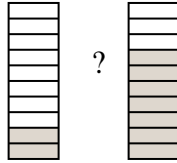


Compare the size of the fractions using  $<$ ,  $>$  or  $=$ .

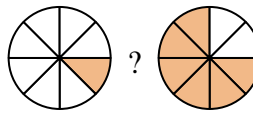
Ex)



1)



2)



**Answers**

Ex.  $\frac{5}{10} > \frac{2}{10}$

1.  $\frac{2}{10} < \frac{7}{10}$

2.  $\frac{1}{8} < \frac{6}{8}$

3.  $\frac{9}{10} > \frac{8}{10}$

4.  $\frac{4}{6} > \frac{1}{6}$

5.  $\frac{4}{5} > \frac{3}{5}$

6.  $\frac{4}{10} < \frac{8}{10}$

7.  $\frac{3}{7} < \frac{6}{7}$

8.  $\frac{1}{4} < \frac{2}{4}$

9.  $\frac{5}{6} > \frac{2}{6}$

10.  $\frac{3}{9} < \frac{5}{9}$

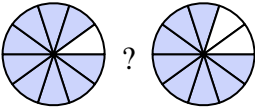
11.  $\frac{1}{8} < \frac{7}{8}$

12.  $\frac{9}{10} > \frac{6}{10}$

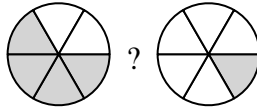
13.  $\frac{5}{6} > \frac{1}{6}$

14.  $\frac{3}{7} > \frac{1}{7}$

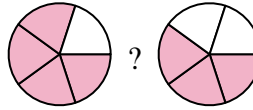
3)



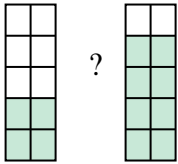
4)



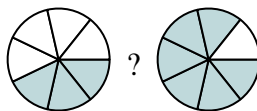
5)



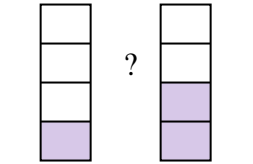
6)



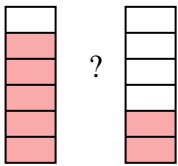
7)



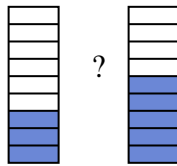
8)



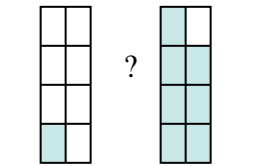
9)



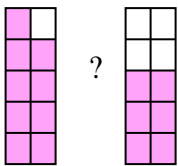
10)



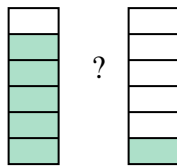
11)



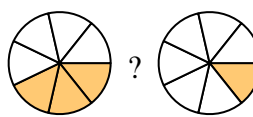
12)



13)

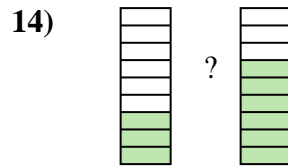
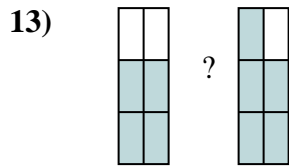
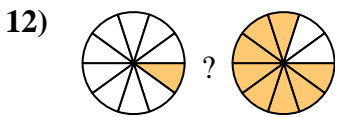
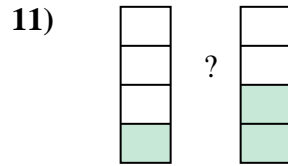
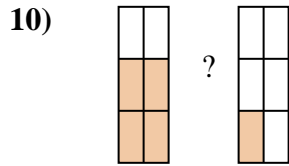
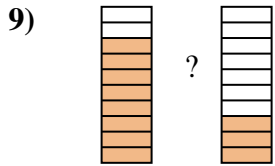
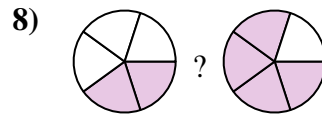
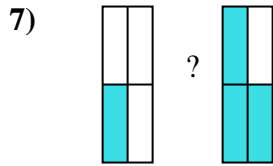
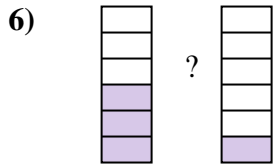
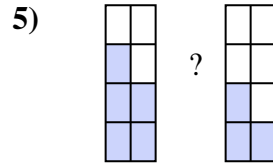
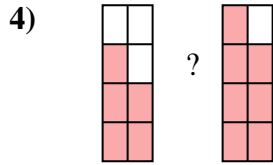
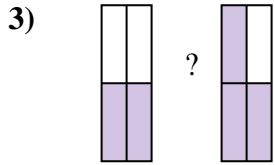
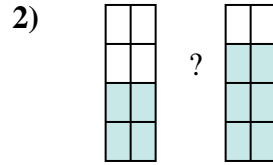
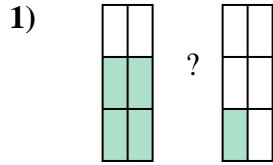
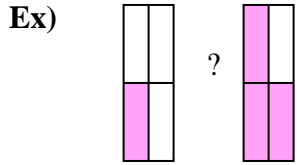


14)





Compare the size of the fractions using  $<$ ,  $>$  or  $=$ .



**Answers**

Ex.  $\frac{1}{4}$   $<$   $\frac{3}{4}$

1. \_\_\_\_\_

2. \_\_\_\_\_

3. \_\_\_\_\_

4. \_\_\_\_\_

5. \_\_\_\_\_

6. \_\_\_\_\_

7. \_\_\_\_\_

8. \_\_\_\_\_

9. \_\_\_\_\_

10. \_\_\_\_\_

11. \_\_\_\_\_

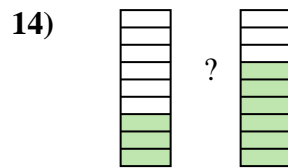
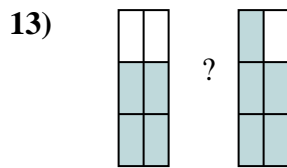
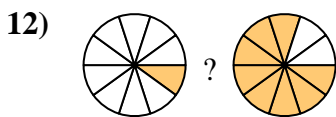
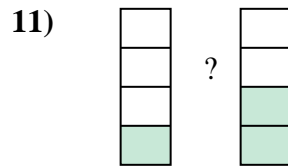
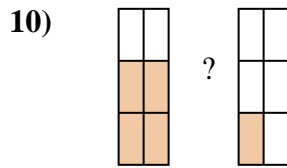
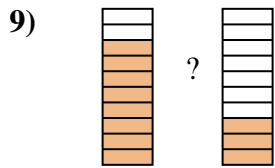
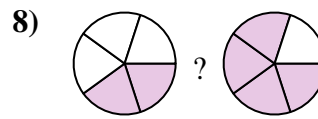
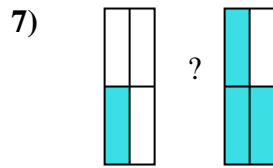
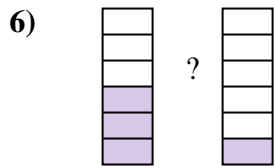
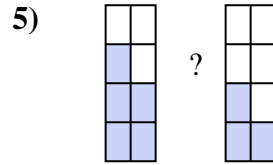
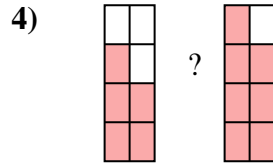
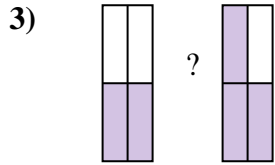
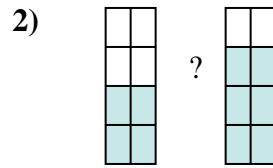
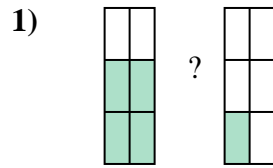
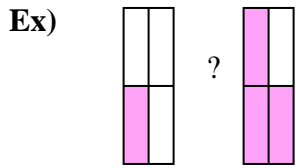
12. \_\_\_\_\_

13. \_\_\_\_\_

14. \_\_\_\_\_



Compare the size of the fractions using  $<$ ,  $>$  or  $=$ .



**Answers**

Ex.  $\frac{1}{4} < \frac{3}{4}$

1.  $\frac{4}{6} > \frac{1}{6}$

2.  $\frac{4}{8} < \frac{6}{8}$

3.  $\frac{2}{4} < \frac{3}{4}$

4.  $\frac{5}{8} < \frac{7}{8}$

5.  $\frac{5}{8} > \frac{3}{8}$

6.  $\frac{3}{6} > \frac{1}{6}$

7.  $\frac{1}{4} < \frac{3}{4}$

8.  $\frac{2}{5} < \frac{4}{5}$

9.  $\frac{8}{10} > \frac{3}{10}$

10.  $\frac{4}{6} > \frac{1}{6}$

11.  $\frac{1}{4} < \frac{2}{4}$

12.  $\frac{1}{10} < \frac{8}{10}$

13.  $\frac{4}{6} < \frac{5}{6}$

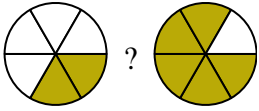
14.  $\frac{3}{9} < \frac{6}{9}$



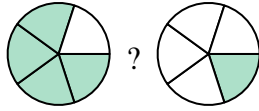


Compare the size of the fractions using  $<$ ,  $>$  or  $=$ .

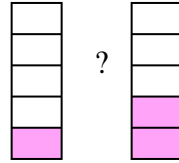
Ex)



1)



2)



**Answers**

Ex.  $\frac{2}{6}$   $<$   $\frac{5}{6}$

1. \_\_\_\_\_

2. \_\_\_\_\_

3. \_\_\_\_\_

4. \_\_\_\_\_

5. \_\_\_\_\_

6. \_\_\_\_\_

7. \_\_\_\_\_

8. \_\_\_\_\_

9. \_\_\_\_\_

10. \_\_\_\_\_

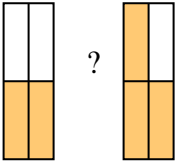
11. \_\_\_\_\_

12. \_\_\_\_\_

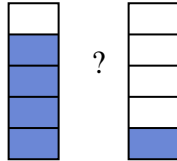
13. \_\_\_\_\_

14. \_\_\_\_\_

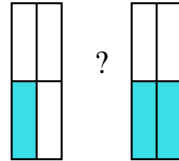
3)



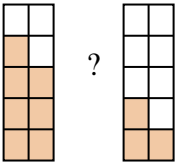
4)



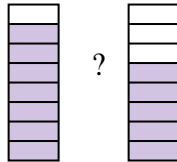
5)



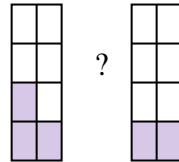
6)



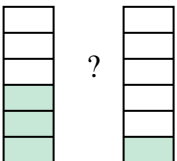
7)



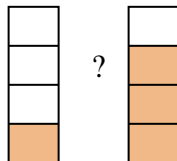
8)



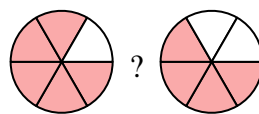
9)



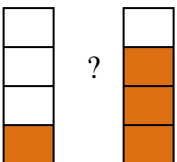
10)



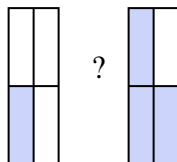
11)



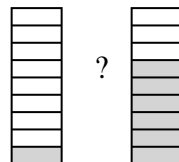
12)



13)

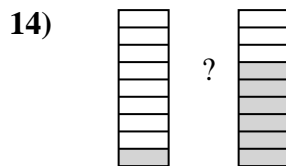
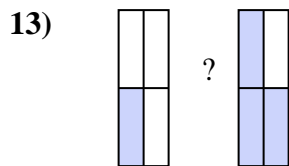
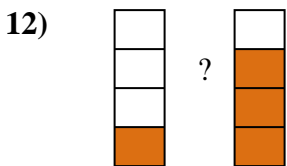
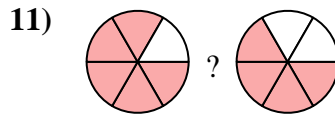
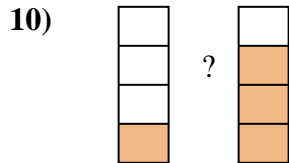
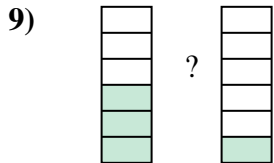
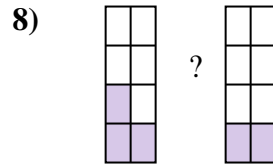
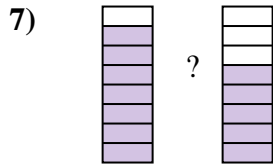
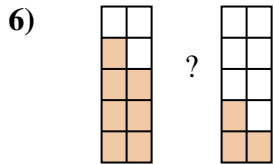
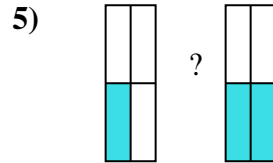
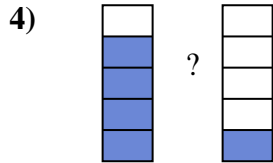
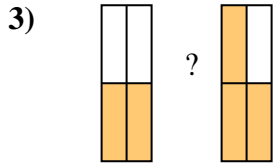
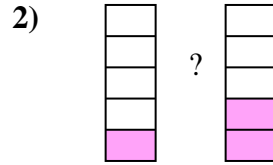
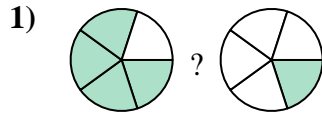
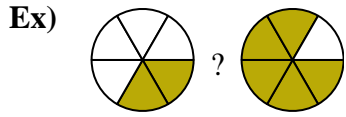


14)





Compare the size of the fractions using  $<$ ,  $>$  or  $=$ .



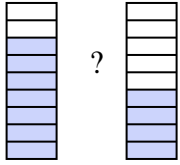
**Answers**

Ex.	$\frac{2}{6}$	$<$	$\frac{5}{6}$
1.	$\frac{4}{5}$	$>$	$\frac{1}{5}$
2.	$\frac{1}{5}$	$<$	$\frac{2}{5}$
3.	$\frac{2}{4}$	$<$	$\frac{3}{4}$
4.	$\frac{4}{5}$	$>$	$\frac{1}{5}$
5.	$\frac{1}{4}$	$<$	$\frac{2}{4}$
6.	$\frac{7}{10}$	$>$	$\frac{3}{10}$
7.	$\frac{7}{8}$	$>$	$\frac{5}{8}$
8.	$\frac{3}{8}$	$>$	$\frac{2}{8}$
9.	$\frac{3}{6}$	$>$	$\frac{1}{6}$
10.	$\frac{1}{4}$	$<$	$\frac{3}{4}$
11.	$\frac{5}{6}$	$>$	$\frac{4}{6}$
12.	$\frac{1}{4}$	$<$	$\frac{3}{4}$
13.	$\frac{1}{4}$	$<$	$\frac{3}{4}$
14.	$\frac{1}{9}$	$<$	$\frac{6}{9}$



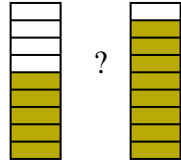
Compare the size of the fractions using  $<$ ,  $>$  or  $=$ .

Ex)



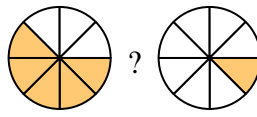
?

1)



?

2)



?

Answers

Ex.  $\frac{7}{9}$   $>$   $\frac{4}{9}$

1. \_\_\_\_\_

2. \_\_\_\_\_

3. \_\_\_\_\_

4. \_\_\_\_\_

5. \_\_\_\_\_

6. \_\_\_\_\_

7. \_\_\_\_\_

8. \_\_\_\_\_

9. \_\_\_\_\_

10. \_\_\_\_\_

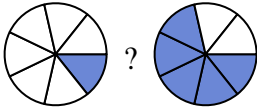
11. \_\_\_\_\_

12. \_\_\_\_\_

13. \_\_\_\_\_

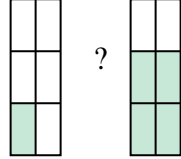
14. \_\_\_\_\_

3)



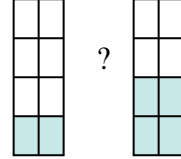
?

4)



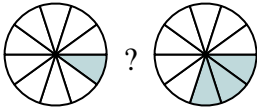
?

5)



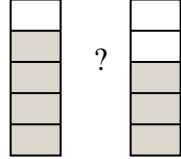
?

6)



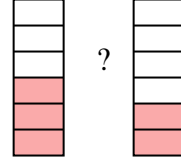
?

7)



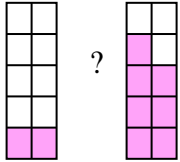
?

8)



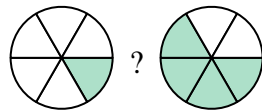
?

9)



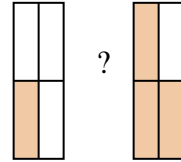
?

10)



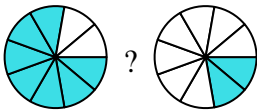
?

11)



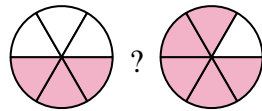
?

12)



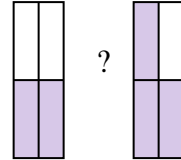
?

13)



?

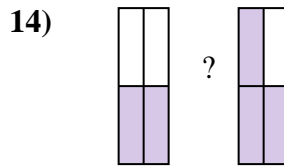
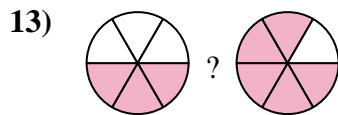
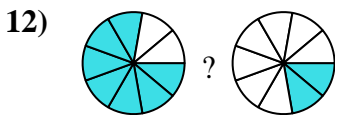
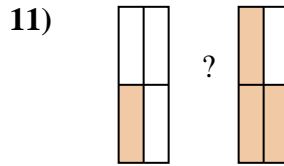
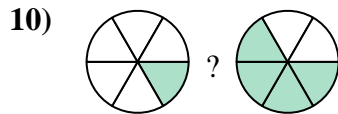
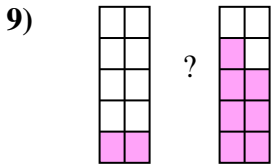
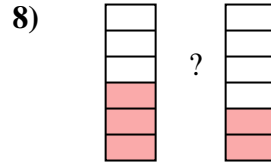

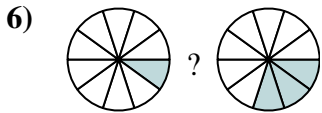
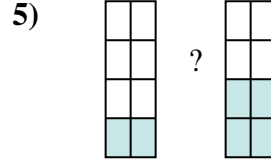
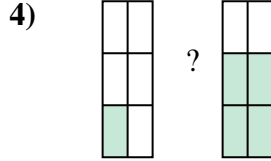
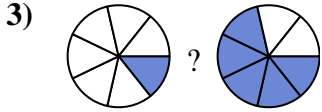
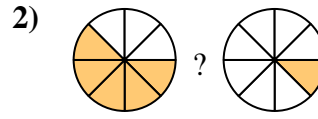
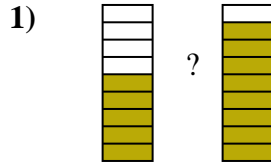
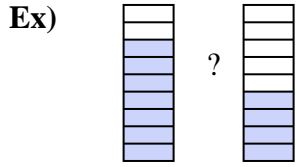
14)



?



Compare the size of the fractions using  $<$ ,  $>$  or  $=$ .



**Answers**

Ex.	$\frac{7}{9}$	$>$	$\frac{4}{9}$
1.	$\frac{5}{9}$	$<$	$\frac{8}{9}$
2.	$\frac{5}{8}$	$>$	$\frac{1}{8}$
3.	$\frac{1}{7}$	$<$	$\frac{5}{7}$
4.	$\frac{1}{6}$	$<$	$\frac{4}{6}$
5.	$\frac{2}{8}$	$<$	$\frac{4}{8}$
6.	$\frac{1}{10}$	$<$	$\frac{3}{10}$
7.	$\frac{4}{5}$	$>$	$\frac{3}{5}$
8.	$\frac{3}{6}$	$>$	$\frac{2}{6}$
9.	$\frac{2}{10}$	$<$	$\frac{7}{10}$
10.	$\frac{1}{6}$	$<$	$\frac{4}{6}$
11.	$\frac{1}{4}$	$<$	$\frac{3}{4}$
12.	$\frac{7}{9}$	$>$	$\frac{2}{9}$
13.	$\frac{3}{6}$	$<$	$\frac{5}{6}$
14.	$\frac{2}{4}$	$<$	$\frac{3}{4}$