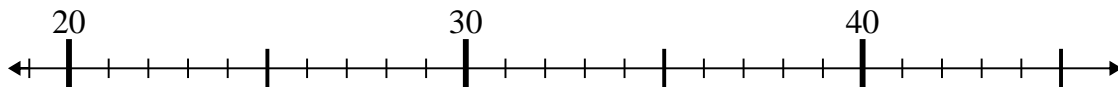


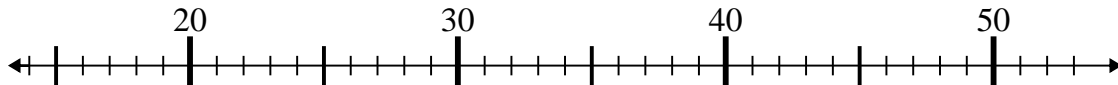


Use the numberlines to solve each problem.

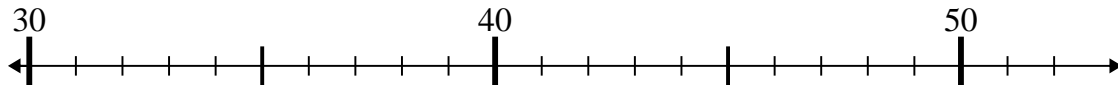
1) $29 + 7 =$



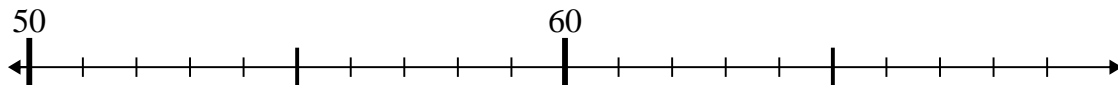
2) $36 - 6 =$



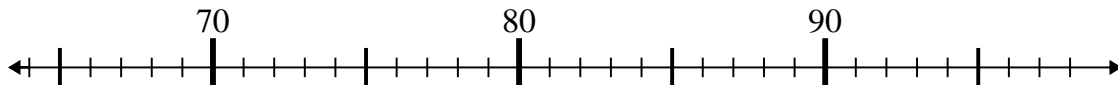
3) $50 - 1 =$



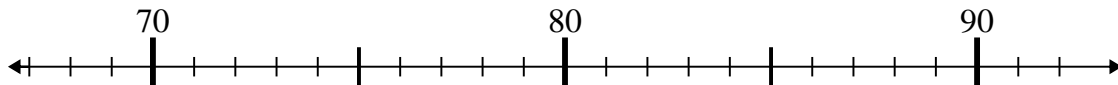
4) $68 - 6 =$



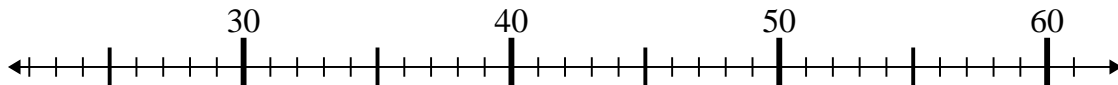
5) $71 + 11 =$



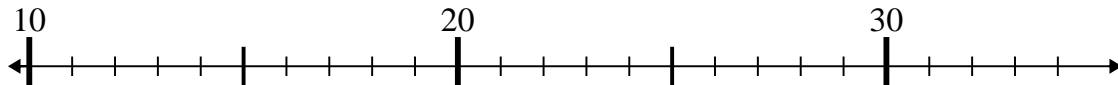
6) $68 + 4 =$



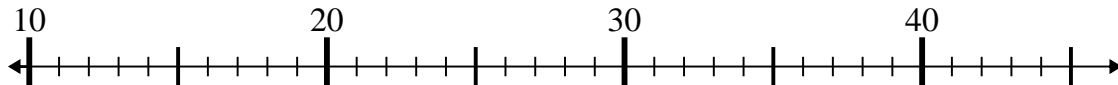
7) $35 - 9 =$



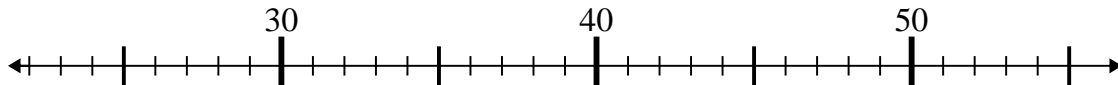
8) $34 + 0 =$



9) $42 - 21 =$



10) $45 - 3 =$



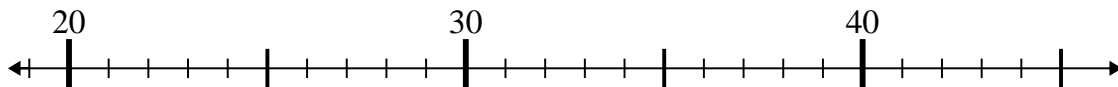
Answers

1. _____
2. _____
3. _____
4. _____
5. _____
6. _____
7. _____
8. _____
9. _____
10. _____

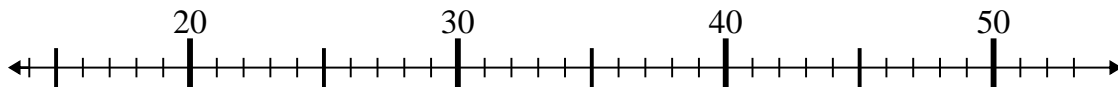


Use the numberlines to solve each problem.

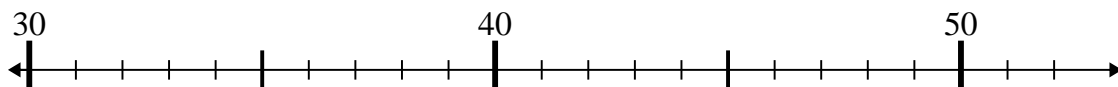
1) $29 + 7 =$



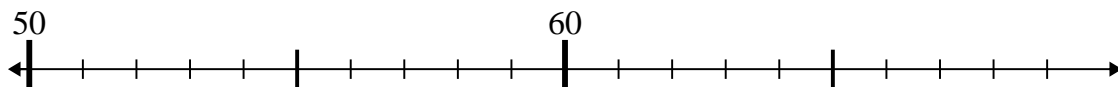
2) $36 - 6 =$



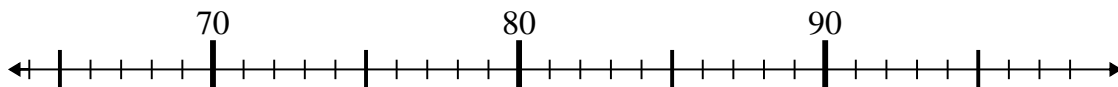
3) $50 - 1 =$



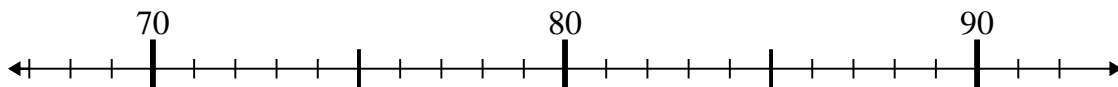
4) $68 - 6 =$



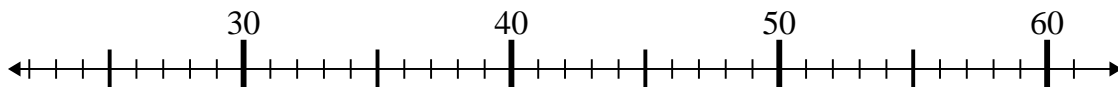
5) $71 + 11 =$



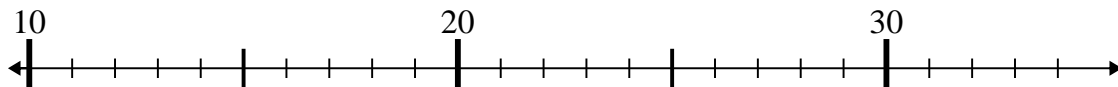
6) $68 + 4 =$



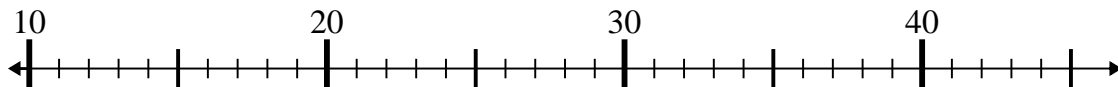
7) $35 - 9 =$



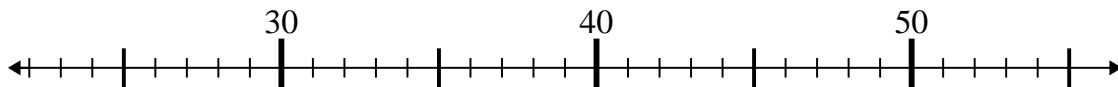
8) $34 + 0 =$



9) $42 - 21 =$



10) $45 - 3 =$



Answers

1. 36

2. 30

3. 49

4. 62

5. 82

6. 72

7. 26

8. 34

9. 21

10. 42