

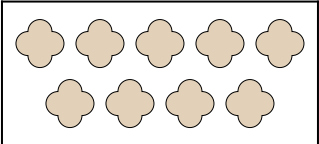
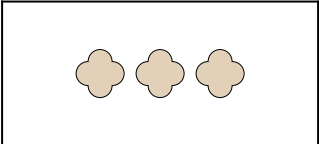


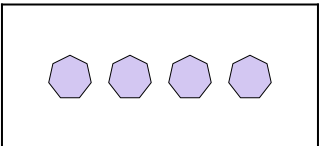
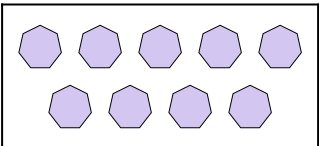
Matching Addition

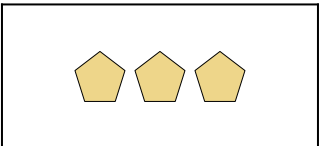
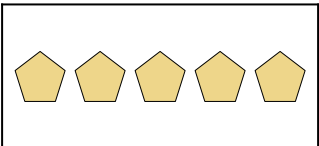
Name: _____

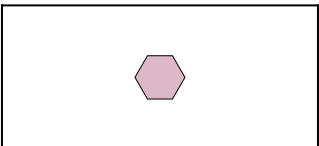
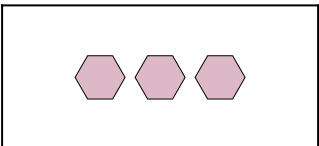
Express the visual problem as an equation with answer.

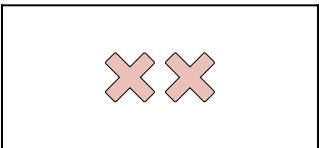
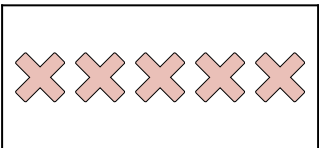
Answers



1)  +  =



2)  +  =

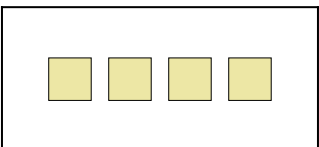
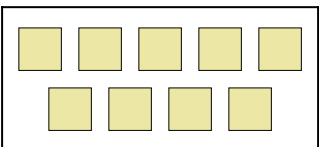
3)  +  =

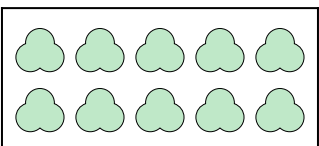
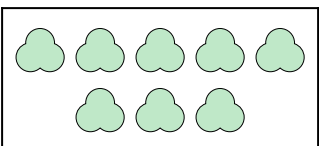
4)  +  =

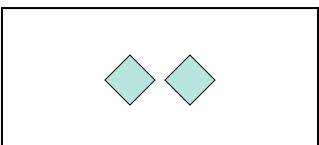
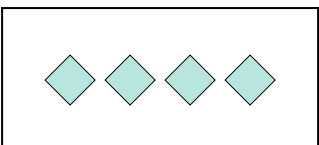
5)  +  =

6)  +  =

7)  +  =

8)  +  =

9)  +  =

10)  +  =

1. _____

2. _____

3. _____

4. _____

5. _____

6. _____

7. _____

8. _____

9. _____

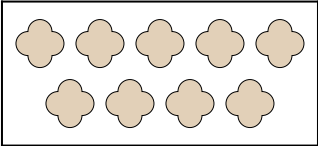
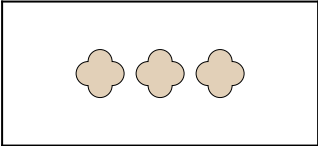
10. _____

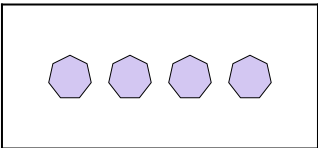
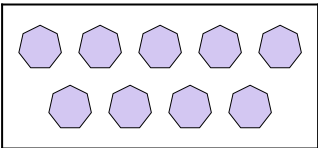


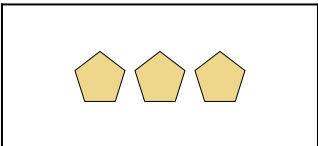
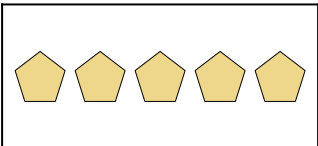
Matching Addition

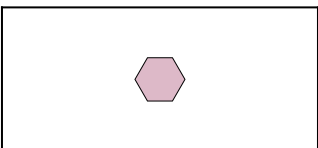
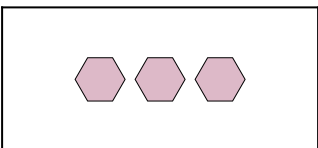
Name: **Answer Key**

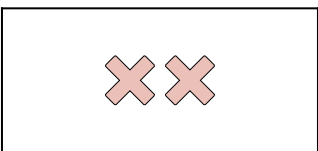
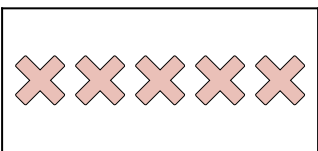
Express the visual problem as an equation with answer.



1)  +  =



2)  +  =

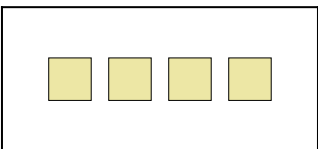
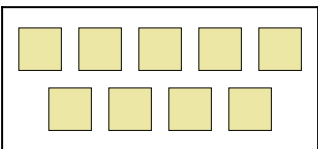
3)  +  =

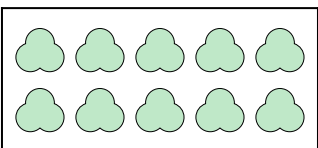
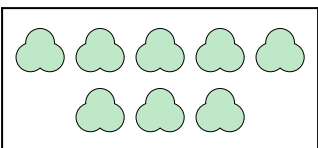
4)  +  =

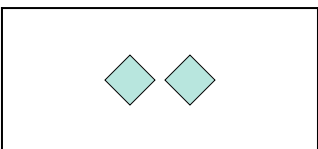
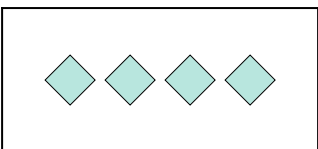
5)  +  =

6)  +  =

7)  +  =

8)  +  =

9)  +  =

10)  +  =

Answers

1. $9 + 3 = 12$

2. $4 + 9 = 13$

3. $3 + 5 = 8$

4. $1 + 3 = 4$

5. $2 + 5 = 7$

6. $8 + 1 = 9$

7. $2 + 3 = 5$

8. $4 + 9 = 13$

9. $10 + 8 = 18$

10. $2 + 4 = 6$