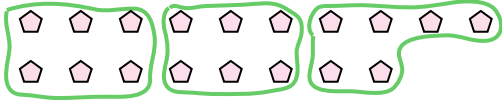





Use the shapes provided to answer the questions.

**Answers**

Ex) How many groups of 6 can you make with the 18 shapes below?

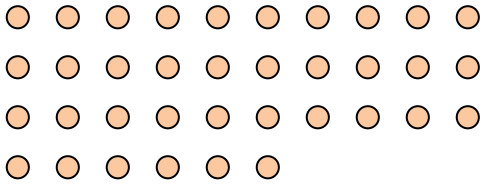


1) How many groups of 3 can you make with the 33 shapes below?



Ex. 3

2) How many groups of 9 can you make with the 36 shapes below?



3) How many groups of 7 can you make with the 14 shapes below?



1. \_\_\_\_\_

2. \_\_\_\_\_

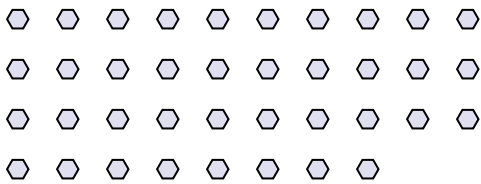
3. \_\_\_\_\_

4. \_\_\_\_\_


5. \_\_\_\_\_

6. \_\_\_\_\_

4) How many groups of 2 can you make with the 38 shapes below?



5) How many groups of 3 can you make with the 39 shapes below?



7. \_\_\_\_\_


8. \_\_\_\_\_

9. \_\_\_\_\_

6) How many groups of 6 can you make with the 30 shapes below?



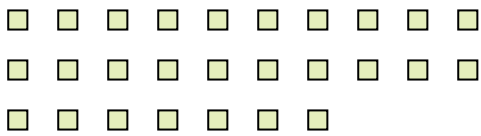
7) How many groups of 6 can you make with the 18 shapes below?



10. \_\_\_\_\_

11. \_\_\_\_\_

8) How many groups of 9 can you make with the 27 shapes below?




9) How many groups of 4 can you make with the 24 shapes below?



10) How many groups of 9 can you make with the 18 shapes below?



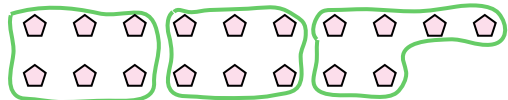
11) How many groups of 8 can you make with the 40 shapes below?






Use the shapes provided to answer the questions.

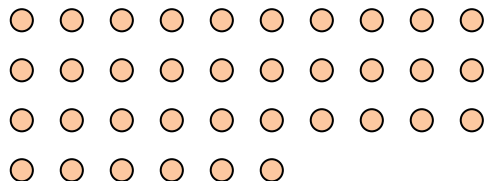
Ex) How many groups of 6 can you make with the 18 shapes below?



1) How many groups of 3 can you make with the 33 shapes below?



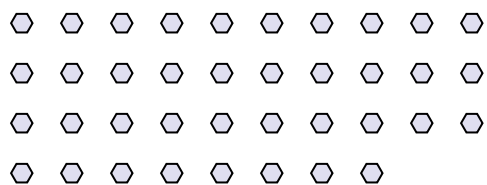
2) How many groups of 9 can you make with the 36 shapes below?




3) How many groups of 7 can you make with the 14 shapes below?



4) How many groups of 2 can you make with the 38 shapes below?



5) How many groups of 3 can you make with the 39 shapes below?



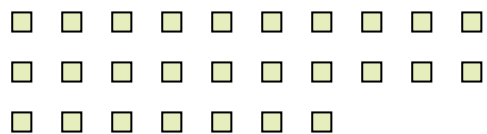
6) How many groups of 6 can you make with the 30 shapes below?



7) How many groups of 6 can you make with the 18 shapes below?



8) How many groups of 9 can you make with the 27 shapes below?




9) How many groups of 4 can you make with the 24 shapes below?



10) How many groups of 9 can you make with the 18 shapes below?



11) How many groups of 8 can you make with the 40 shapes below?



Answers

Ex. 3

1. 11

2. 4

3. 2

4. 19

5. 13

6. 5

7. 3

8. 3

9. 6

10. 2

11. 5