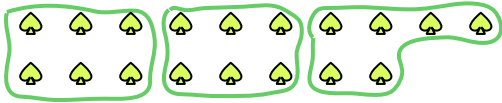




Use the shapes provided to answer the questions.

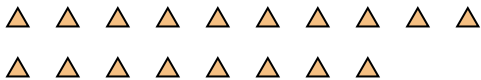
- Ex) How many groups of 6 can you make with the 18 shapes below?



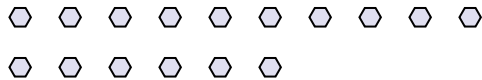
- 1) How many groups of 3 can you make with the 9 shapes below?



- 2) How many groups of 6 can you make with the 18 shapes below?



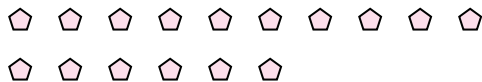
- 3) How many groups of 8 can you make with the 16 shapes below?



- 4) How many groups of 4 can you make with the 8 shapes below?



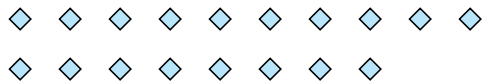
- 5) How many groups of 8 can you make with the 16 shapes below?




- 6) How many groups of 2 can you make with the 24 shapes below?




- 7) How many groups of 2 can you make with the 18 shapes below?



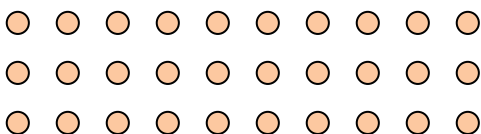
- 8) How many groups of 9 can you make with the 27 shapes below?



- 9) How many groups of 9 can you make with the 36 shapes below?



- 10) How many groups of 6 can you make with the 30 shapes below?



- 11) How many groups of 3 can you make with the 39 shapes below?

**Answers**Ex. 31. 32. 33. 24. 25. 26. 127. 98. 39. 410. 511. 13