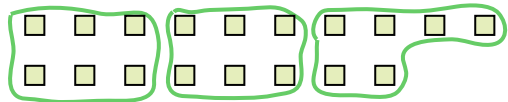





Use the shapes provided to answer the questions.

**Answers**


- Ex) How many groups of 6 can you make with the 18 shapes below?



- 1) How many groups of 3 can you make with the 30 shapes below?



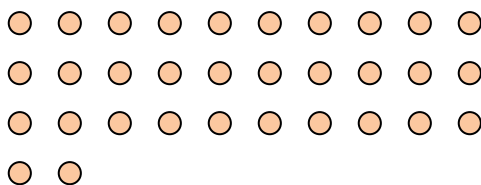
- 2) How many groups of 4 can you make with the 28 shapes below?



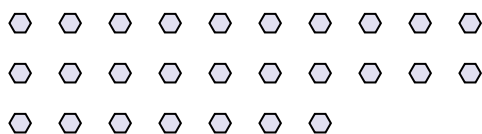
- 3) How many groups of 2 can you make with the 40 shapes below?



- 4) How many groups of 4 can you make with the 32 shapes below?




- 5) How many groups of 9 can you make with the 27 shapes below?




- 6) How many groups of 6 can you make with the 36 shapes below?



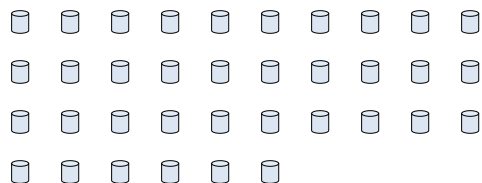
- 7) How many groups of 3 can you make with the 36 shapes below?



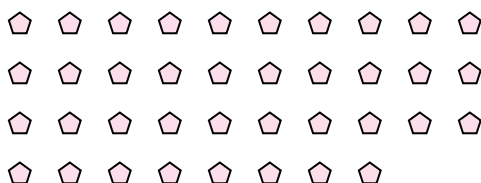
- 8) How many groups of 6 can you make with the 36 shapes below?



- 9) How many groups of 4 can you make with the 36 shapes below?



- 10) How many groups of 2 can you make with the 38 shapes below?



- 11) How many groups of 7 can you make with the 14 shapes below?

Ex. 3

1. \_\_\_\_\_

2. \_\_\_\_\_

3. \_\_\_\_\_

4. \_\_\_\_\_

5. \_\_\_\_\_

6. \_\_\_\_\_

7. \_\_\_\_\_

8. \_\_\_\_\_

9. \_\_\_\_\_

10. \_\_\_\_\_

11. \_\_\_\_\_

