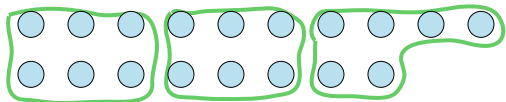
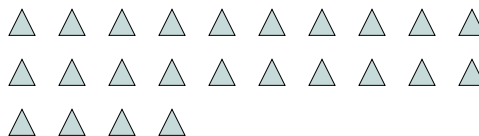
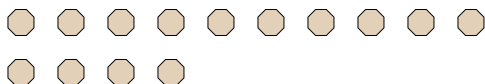
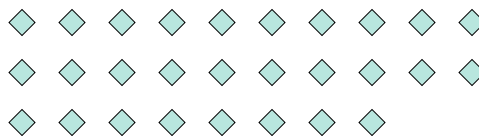

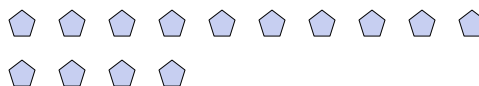
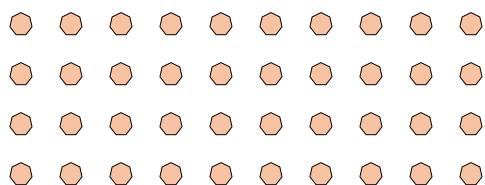
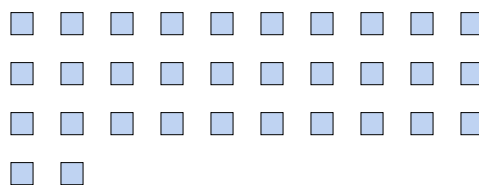





Use the shapes provided to answer the questions.

**Answers****Ex)** How many groups of 6 can you make with the 18 shapes below?**1)** How many groups of 8 can you make with the 24 shapes below?**2)** How many groups of 8 can you make with the 32 shapes below?**3)** How many groups of 5 can you make with the 35 shapes below?**4)** How many groups of 7 can you make with the 14 shapes below?**5)** How many groups of 7 can you make with the 28 shapes below?**6)** How many groups of 2 can you make with the 24 shapes below?**7)** How many groups of 7 can you make with the 14 shapes below?**8)** How many groups of 2 can you make with the 40 shapes below?**9)** How many groups of 8 can you make with the 32 shapes below?**10)** How many groups of 4 can you make with the 36 shapes below?**11)** How many groups of 2 can you make with the 14 shapes below?Ex. 3

1. \_\_\_\_\_

2. \_\_\_\_\_

3. \_\_\_\_\_

4. \_\_\_\_\_

5. \_\_\_\_\_

6. \_\_\_\_\_

7. \_\_\_\_\_

8. \_\_\_\_\_

9. \_\_\_\_\_

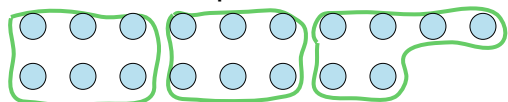
10. \_\_\_\_\_

11. \_\_\_\_\_

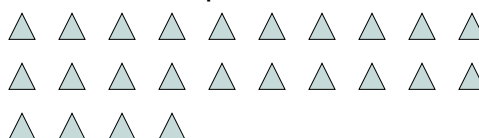


Use the shapes provided to answer the questions.

- Ex) How many groups of 6 can you make with the 18 shapes below?



- 1) How many groups of 8 can you make with the 24 shapes below?



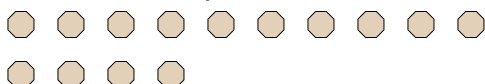
- 2) How many groups of 8 can you make with the 32 shapes below?



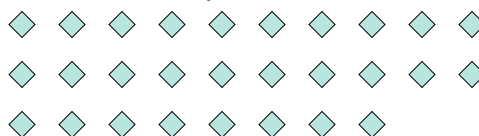
- 3) How many groups of 5 can you make with the 35 shapes below?




- 4) How many groups of 7 can you make with the 14 shapes below?



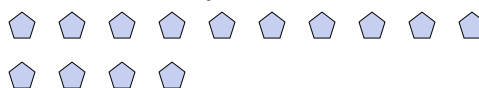
- 5) How many groups of 7 can you make with the 28 shapes below?



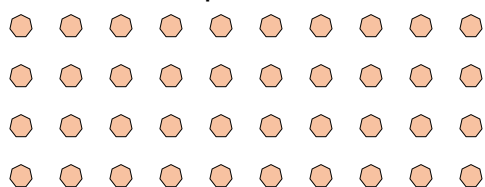
- 6) How many groups of 2 can you make with the 24 shapes below?



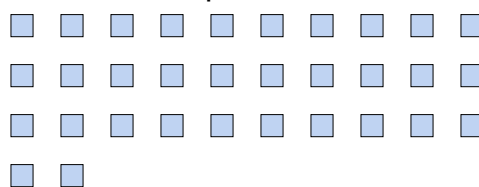
- 7) How many groups of 7 can you make with the 14 shapes below?




- 8) How many groups of 2 can you make with the 40 shapes below?



- 9) How many groups of 8 can you make with the 32 shapes below?



- 10) How many groups of 4 can you make with the 36 shapes below?



- 11) How many groups of 2 can you make with the 14 shapes below?

**Answers**Ex. 31. 32. 43. 74. 25. 46. 127. 28. 209. 410. 911. 7