

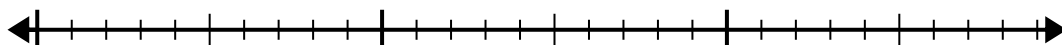


Use the number line to solve the division problem.

1) $25 \div 6 =$

0

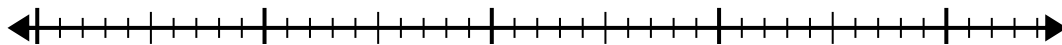
25



2) $38 \div 7 =$

0

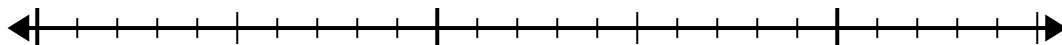
38



3) $20 \div 6 =$

0

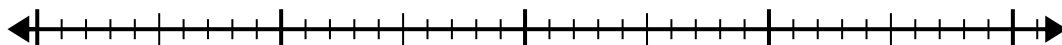
20



4) $35 \div 6 =$

0

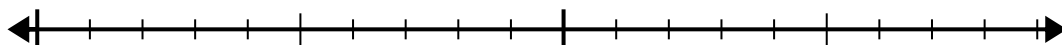
35



5) $18 \div 5 =$

0

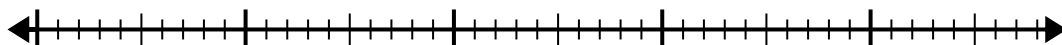
18



6) $46 \div 6 =$

0

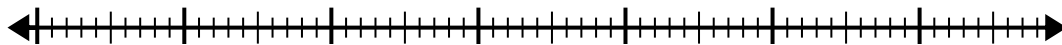
46



7) $60 \div 8 =$

0

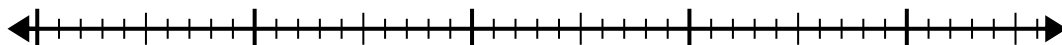
60



8) $45 \div 7 =$

0

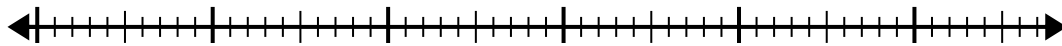
45



9) $53 \div 8 =$

0

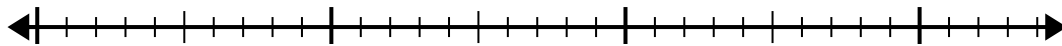
53



10) $29 \div 4 =$

0

29



Answers

1. _____

2. _____

3. _____

4. _____

5. _____

6. _____

7. _____

8. _____

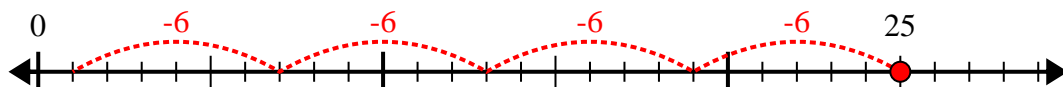
9. _____

10. _____

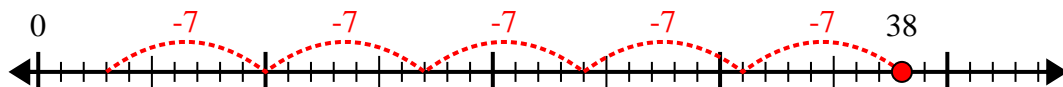


Use the number line to solve the division problem.

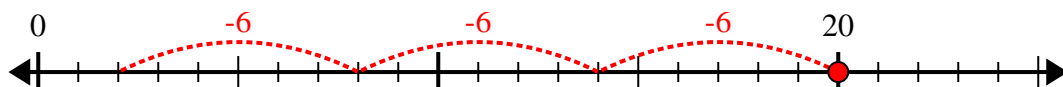
1) $25 \div 6 =$



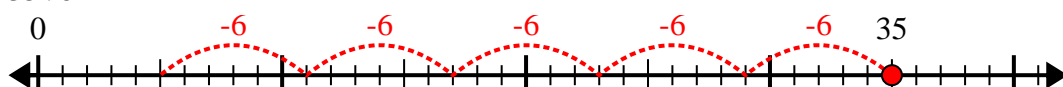
2) $38 \div 7 =$



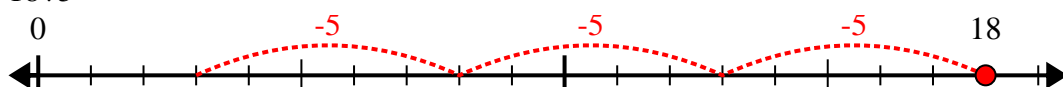
3) $20 \div 6 =$



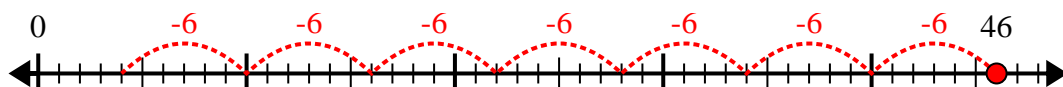
4) $35 \div 6 =$



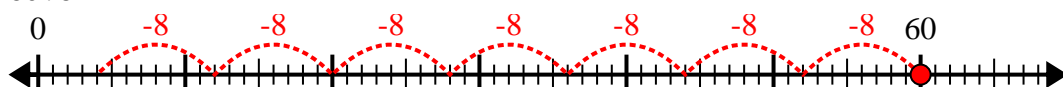
5) $18 \div 5 =$



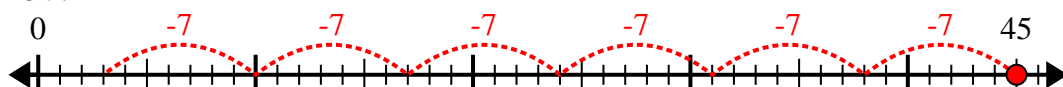
6) $46 \div 6 =$



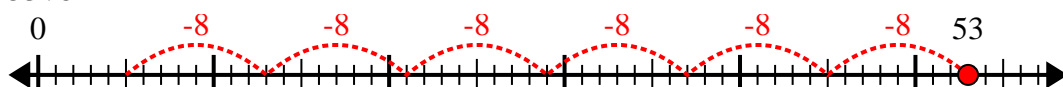
7) $60 \div 8 =$



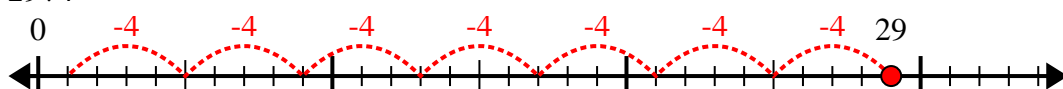
8) $45 \div 7 =$



9) $53 \div 8 =$



10) $29 \div 4 =$



Answers

1. 4r1

2. 5r3

3. 3r2

4. 5r5

5. 3r3

6. 7r4

7. 7r4

8. 6r3

9. 6r5

10. 7r1