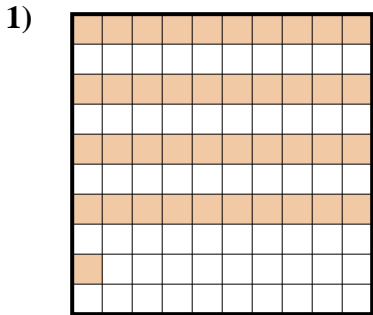


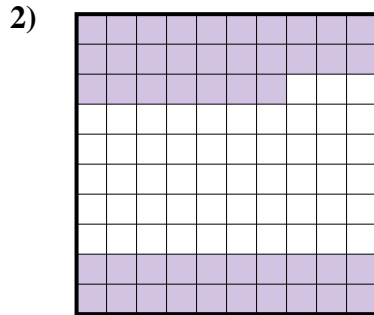


Determine which letter best represents the amount shaded of the whole.

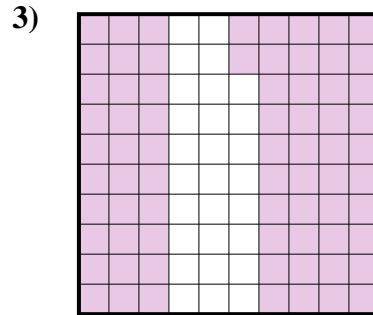
Answers



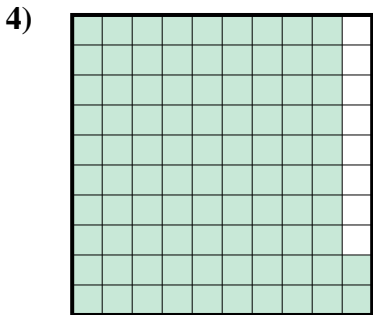
- A. 410.00
- B. 0.41
- C. 410.0
- D. 0.041



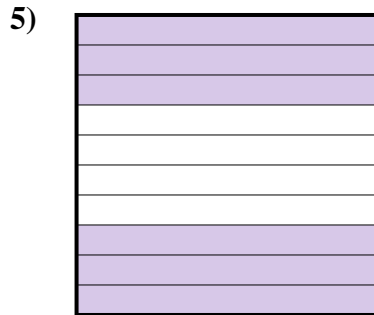
- A. 470.00
- B. 47
- C. 0.47
- D. 4.7




- A. 7.2
- B. 0.072
- C. 0.72
- D. 720.0



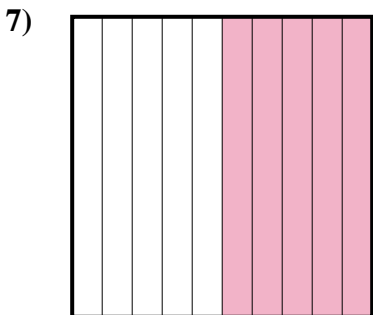
- A. 0.92
- B. 920.00
- C. 92
- D. 9.2



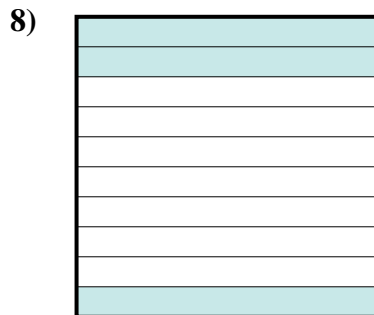
- A. 0.06
- B. 60
- C. 0.6
- D. 600.0



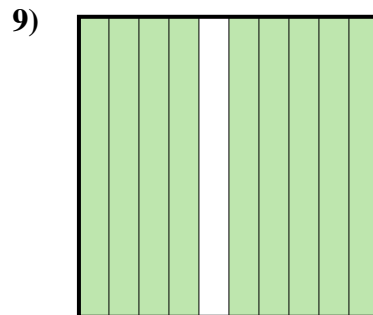
- A. 80
- B. 800.0
- C. 0.8
- D. 0.08



- A. 0.05
- B. 0.5
- C. 5
- D. 500.00



- A. 30
- B. 3
- C. 0.03
- D. 0.3



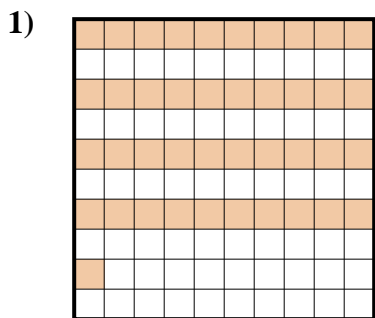
- A. 0.9
- B. 0.09
- C. 900.00
- D. 9

- 1. \_\_\_\_\_
- 2. \_\_\_\_\_
- 3. \_\_\_\_\_
- 4. \_\_\_\_\_
- 5. \_\_\_\_\_
- 6. \_\_\_\_\_
- 7. \_\_\_\_\_
- 8. \_\_\_\_\_
- 9. \_\_\_\_\_

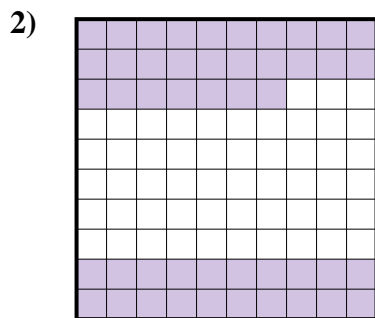


Determine which letter best represents the amount shaded of the whole.

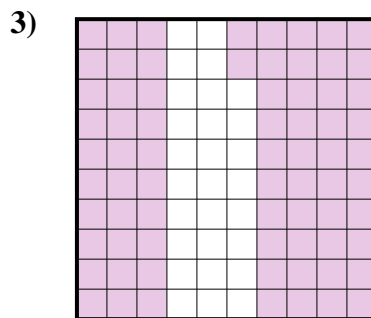
Answers



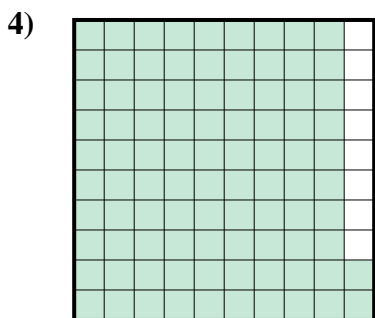
- A. 410.00
- B. 0.41
- C. 410.0
- D. 0.041




- A. 470.00
- B. 47
- C. 0.47
- D. 4.7



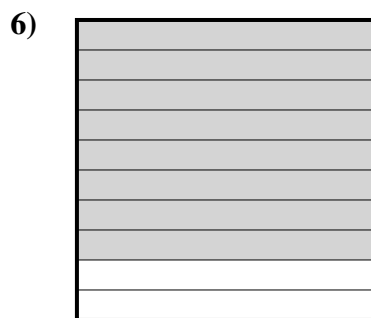
- A. 7.2
- B. 0.072
- C. 0.72
- D. 720.0



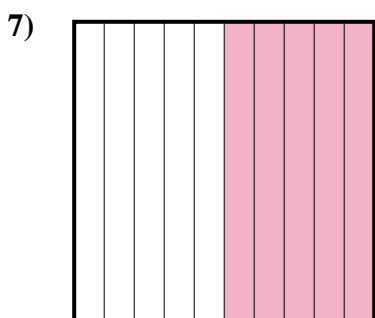
- A. 0.92
- B. 920.00
- C. 92
- D. 9.2




- A. 0.06
- B. 60
- C. 0.6
- D. 600.0



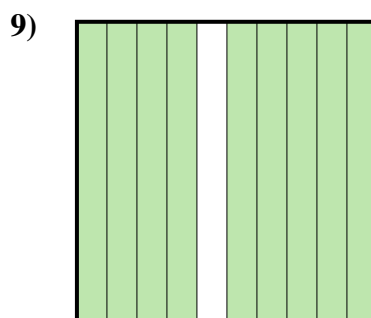
- A. 80
- B. 800.0
- C. 0.8
- D. 0.08



- A. 0.05
- B. 0.5
- C. 5
- D. 500.00



- A. 30
- B. 3
- C. 0.03
- D. 0.3



- A. 0.9
- B. 0.09
- C. 900.00
- D. 9

- 1.       **B**
- 2.       **C**
- 3.       **C**
- 4.       **A**
- 5.       **C**
- 6.       **C**
- 7.       **B**
- 8.       **D**
- 9.       **A**