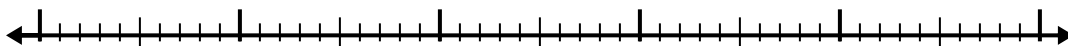


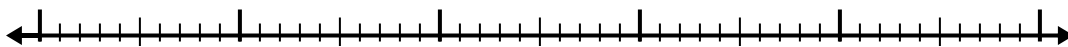


Use the number line to solve each problem.


1) $6.2 - 3.6 =$




2) $5.2 - 2.2 =$



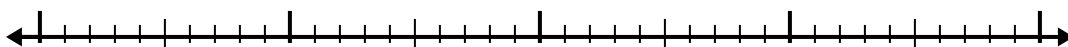
3) $3.3 - 2.2 =$



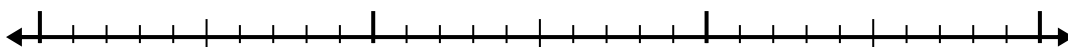
4) $7.6 - 3.9 =$



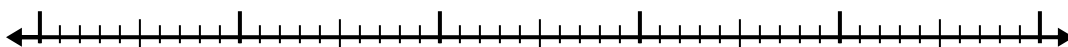
5) $10.4 - 2.2 =$



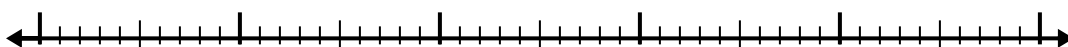
6) $7.2 - 1.8 =$




7) $5.8 - 3.6 =$



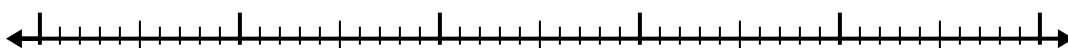
8) $8.2 - 2.8 =$



9) $5.7 - 2.2 =$



10) $4.1 - 2.2 =$



Answers

1. _____

2. _____

3. _____

4. _____

5. _____

6. _____

7. _____

8. _____

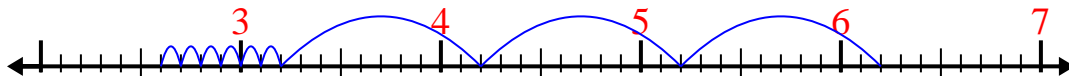
9. _____

10. _____

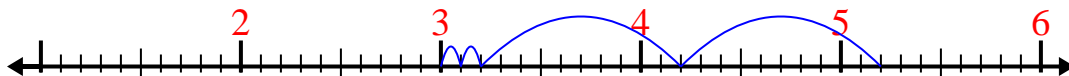


Use the number line to solve each problem.

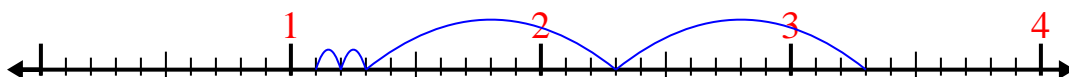
1) $6.2 - 3.6 =$



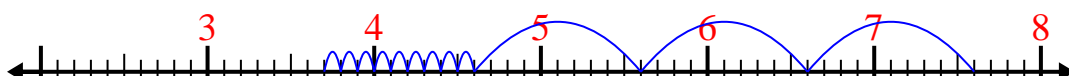
2) $5.2 - 2.2 =$



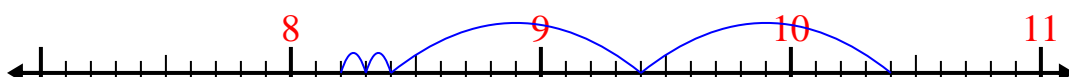
3) $3.3 - 2.2 =$




4) $7.6 - 3.9 =$



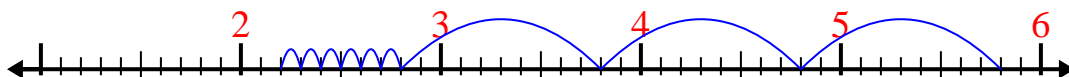
5) $10.4 - 2.2 =$



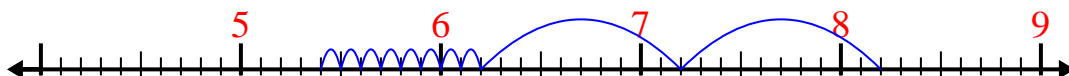
6) $7.2 - 1.8 =$



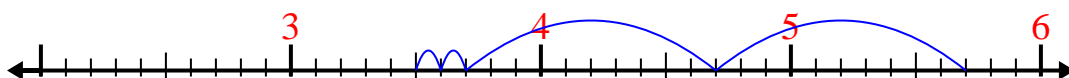
7) $5.8 - 3.6 =$



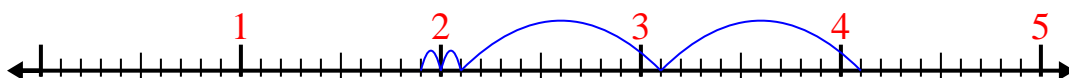
8) $8.2 - 2.8 =$



9) $5.7 - 2.2 =$



10) $4.1 - 2.2 =$

Answers1. 2.62. 33. 1.14. 3.75. 8.26. 5.47. 2.28. 5.49. 3.510. 1.9