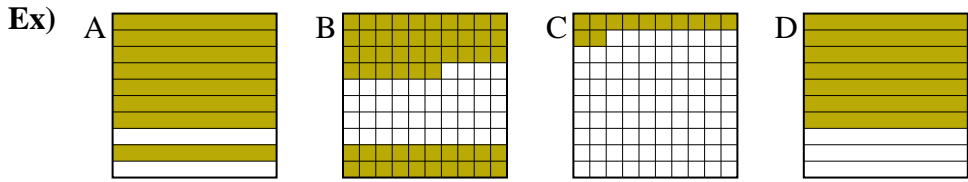




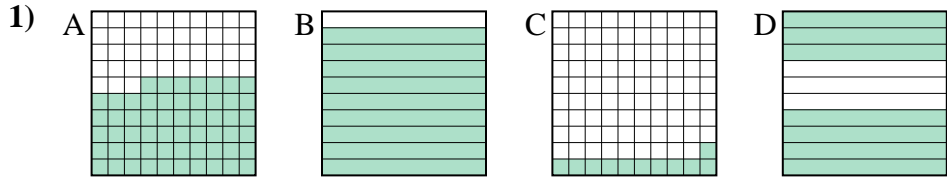
Put the boxes in order from least to greatest based on the shaded amount.

**Answers**



small 0.12 - C  
0.56 - B  
0.7 - D  
 large 0.8 - A

Ex. C,B,D,A

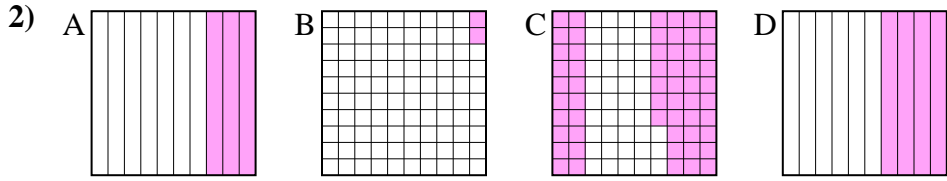


small \_\_\_\_\_  
 \_\_\_\_\_  
 \_\_\_\_\_  
 large \_\_\_\_\_

1. \_\_\_\_\_

2. \_\_\_\_\_

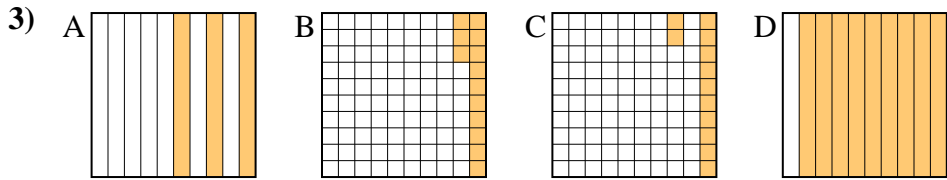
3. \_\_\_\_\_



small \_\_\_\_\_  
 \_\_\_\_\_  
 large \_\_\_\_\_

4. \_\_\_\_\_

5. \_\_\_\_\_

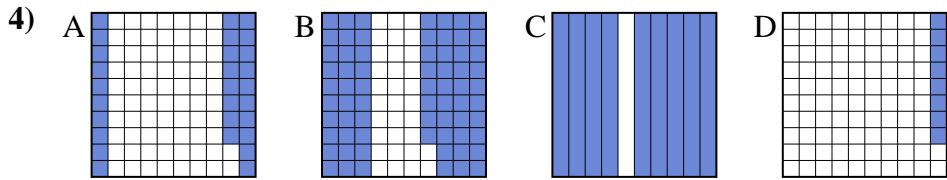


small \_\_\_\_\_  
 \_\_\_\_\_  
 large \_\_\_\_\_

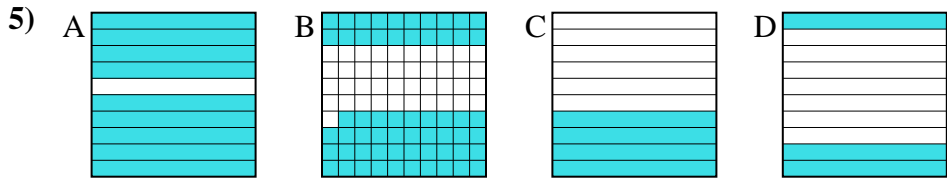
6. \_\_\_\_\_

7. \_\_\_\_\_

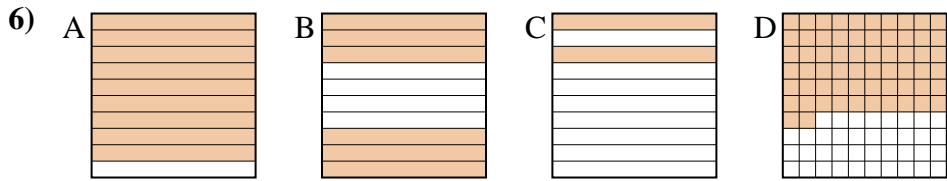
8. \_\_\_\_\_



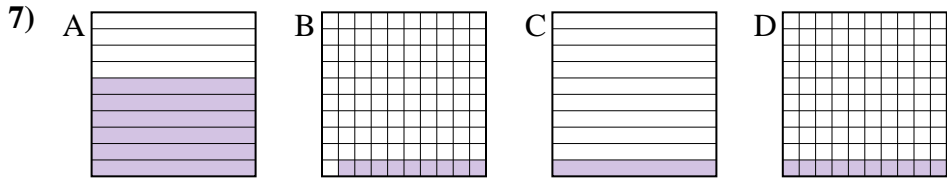
small \_\_\_\_\_  
 \_\_\_\_\_  
 large \_\_\_\_\_



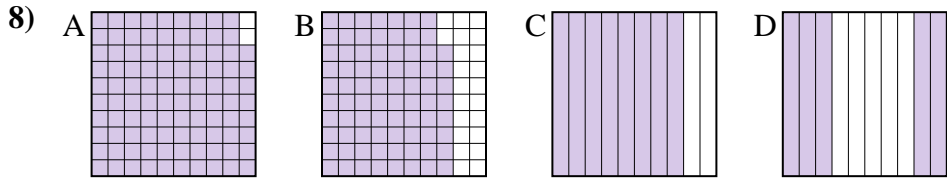
small \_\_\_\_\_  
 \_\_\_\_\_  
 large \_\_\_\_\_



small \_\_\_\_\_  
 \_\_\_\_\_  
 large \_\_\_\_\_



small \_\_\_\_\_  
 \_\_\_\_\_  
 large \_\_\_\_\_



small \_\_\_\_\_  
 \_\_\_\_\_  
 large \_\_\_\_\_



Put the boxes in order from least to greatest based on the shaded amount.

Ex) A B C D

small 0.12 - C  
0.56 - B  
0.7 - D

large 0.8 - A

1) A B C D

small 0.11 - C  
0.57 - A  
0.7 - D

large 0.9 - B

2) A B C D

small 0.02 - B  
0.3 - A  
0.4 - D

large 0.57 - C

3) A B C D

small 0.12 - C  
0.13 - B  
0.3 - A

large 0.9 - D

4) A B C D

small 0.08 - D  
0.28 - A  
0.68 - B

large 0.9 - C

5) A B C D

small 0.3 - D  
0.4 - C  
0.59 - B

large 0.9 - A

6) A B C D

small 0.2 - C  
0.6 - B  
0.62 - D

large 0.9 - A

7) A B C D

small 0.09 - B  
0.1 - C  
0.1 - C

large 0.6 - A

8) A B C D

small 0.5 - D  
0.78 - B  
0.8 - C

large 0.98 - A

Answers

Ex. C,B,D,A

1. C,A,D,B

2. B,A,D,C

3. C,B,A,D

4. D,A,B,C

5. D,C,B,A

6. C,B,D,A

7. B,C,C,A

8. D,B,C,A