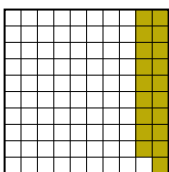




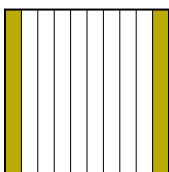
Put the boxes in order from least to greatest based on the shaded amount.

Ex)

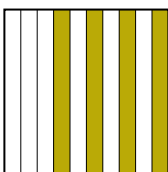
A



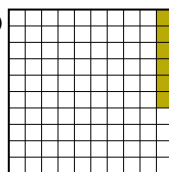
B



C



D




small 0.06 - D
0.19 - A
0.2 - B
large 0.4 - C


AnswersEx. D,A,B,C

1)


A




B



C



D




small _____

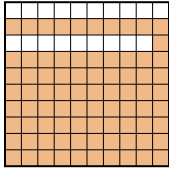
large _____

2)


A



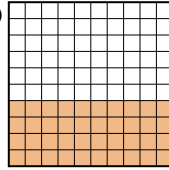
B



C



D

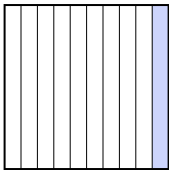


small _____

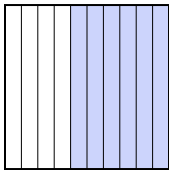
large _____

3)

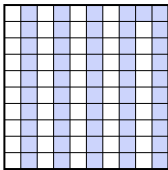
A



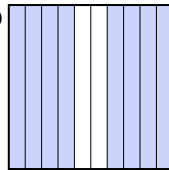
B



C



D

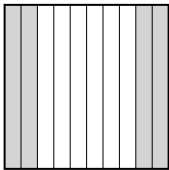


small _____

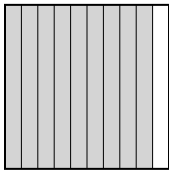
large _____

4)


A



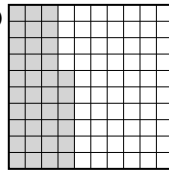
B



C



D

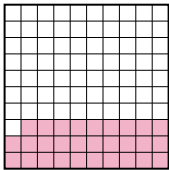


small _____

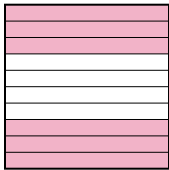
large _____

5)

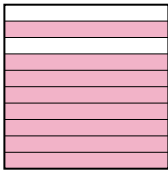
A



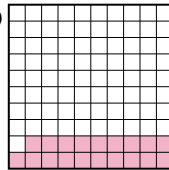
B



C



D

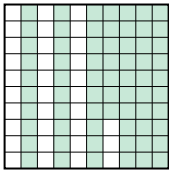


small _____

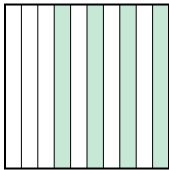
large _____

6)

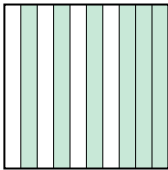
A



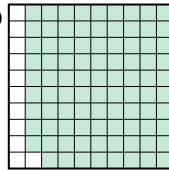
B



C



D

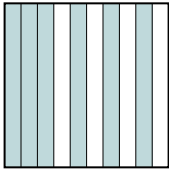


small _____


large _____

7)

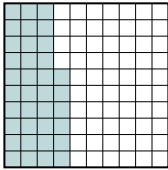
A



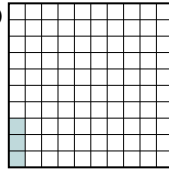
B



C



D




small _____

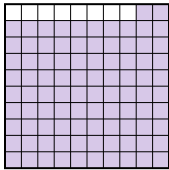
large _____

8)

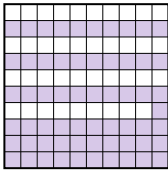
A




B



C



D



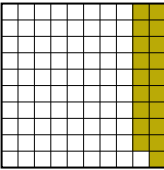


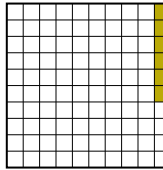
small _____



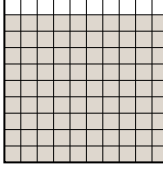

large _____

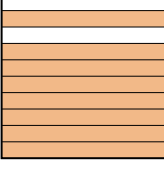
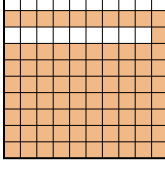

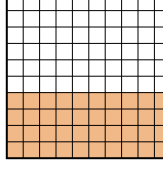
1. _____
2. _____
3. _____
4. _____
5. _____
6. _____
7. _____
8. _____

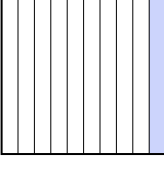

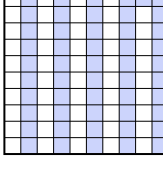
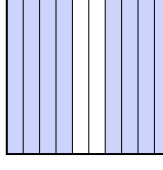


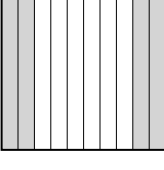
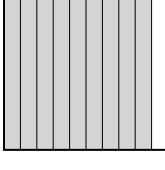


Put the boxes in order from least to greatest based on the shaded amount.

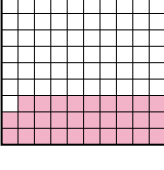


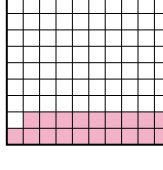
Ex) A  B  C  D  small 0.06 - D
0.19 - A
0.2 - B
large 0.4 - C


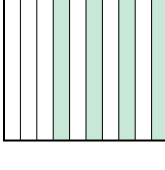
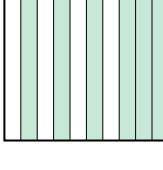

1) A  B  C  D  small 0.2 - D
0.5 - B
0.9 - C
large 0.96 - A

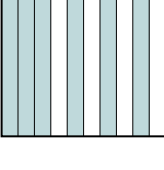

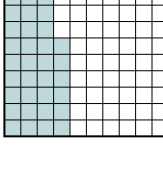
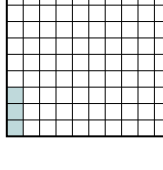
2) A  B  C  D  small 0.1 - C
0.4 - D
0.8 - A
large 0.81 - B



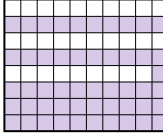

3) A  B  C  D  small 0.1 - A
0.51 - C
0.6 - B
large 0.8 - D

4) A  B  C  D  small 0.36 - D
0.4 - A
0.9 - B
large 0.93 - C

5) A  B  C  D  small 0.19 - D
0.29 - A
0.6 - B
large 0.8 - C

6) A  B  C  D  small 0.4 - B
0.6 - C
0.67 - A
large 0.89 - D

7) A  B  C  D  small 0.03 - D
0.17 - B
0.36 - C
large 0.6 - A

8) A  B  C  D  small 0.2 - A
0.5 - D
0.61 - C
large 0.92 - B

Answers

- Ex. **D,A,B,C**
1. **D,B,C,A**
2. **C,D,A,B**
3. **A,C,B,D**
4. **D,A,B,C**
5. **D,A,B,C**
6. **B,C,A,D**
7. **D,B,C,A**
8. **A,D,C,B**