
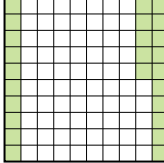
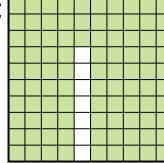







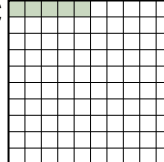
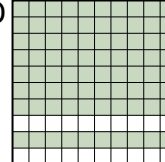
Ordering Decimal Visually

Name: _____

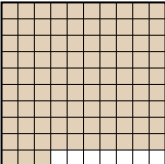
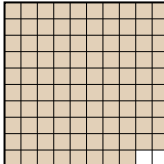

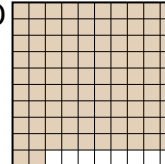
Put the boxes in order from least to greatest based on the shaded amount.

Ex) A  B  C  D 

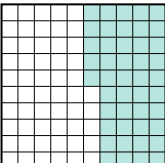


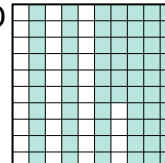
small 0.25 - B
0.3 - A
0.5 - D
large 0.93 - C

1) A  B  C  D 


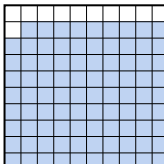
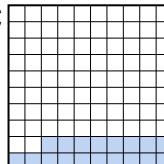
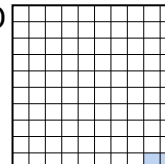
small _____
large _____

2) A  B  C  D 


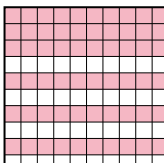
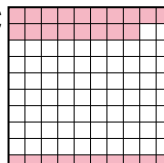

small _____
large _____

3) A  B  C  D 

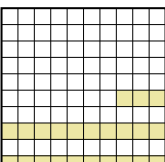
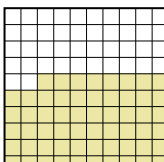


small _____
large _____

4) A  B  C  D 

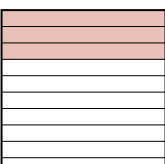



small _____
large _____

5) A  B  C  D 




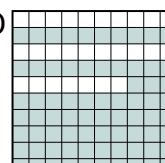
small _____
large _____

6) A  B  C  D 

small _____
large _____

7) A  B  C  D 

small _____
large _____

8) A  B  C  D 

small _____
large _____

Answers

Ex. B A D C

1. _____

2. _____

3. _____

4. _____

5. _____

6. _____

7. _____


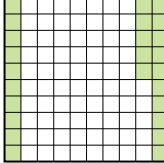
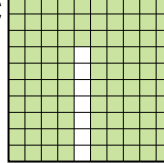

8. _____



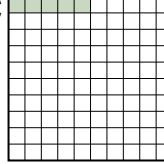
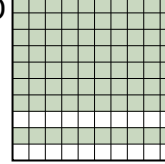


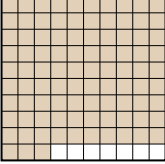


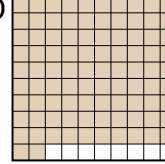
Ordering Decimal Visually

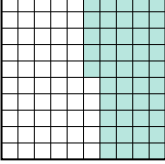


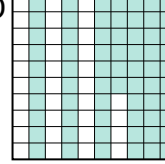
Name: **Answer Key**



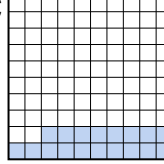
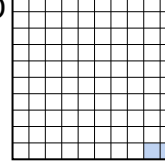
Put the boxes in order from least to greatest based on the shaded amount.


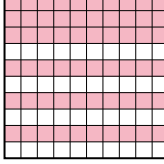
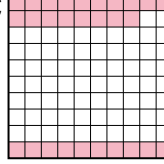

Ex) A  B  C  D  small $\frac{0.25 - B}{0.3 - A}{0.5 - D}$ large $\frac{0.93 - C}$

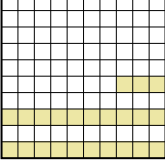
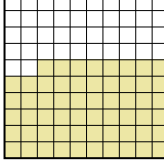


1) A  B  C  D  small $\frac{0.05 - C}{0.4 - A}{0.8 - B}$ large $\frac{0.8 - B}$



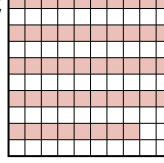

2) A  B  C  D  small $\frac{0.6 - C}{0.92 - D}{0.93 - A}$ large $\frac{0.98 - B}$


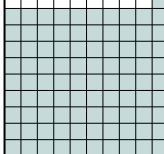

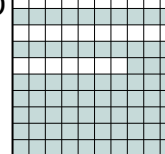
3) A  B  C  D  small $\frac{0.45 - A}{0.5 - C}{0.66 - D}$ large $\frac{0.94 - B}$

4) A  B  C  D  small $\frac{0.02 - D}{0.18 - C}{0.5 - A}$ large $\frac{0.89 - B}$

5) A  B  C  D  small $\frac{0.28 - C}{0.6 - B}{0.8 - A}$ large $\frac{0.9 - D}$

6) A  B  C  D  small $\frac{0.23 - A}{0.4 - D}{0.58 - B}$ large $\frac{0.9 - C}$

7) A  B  C  D  small $\frac{0.1 - D}{0.3 - A}{0.48 - C}$ large $\frac{0.6 - B}$

8) A  B  C  D  small $\frac{0.06 - C}{0.6 - A}{0.73 - D}$ large $\frac{0.91 - B}$

Answers

- Ex. B A D C
1. C A B B
2. C D A B
3. A C D B
4. D C A B
5. C B A D
6. A D B C
7. D A C B
8. C A D B