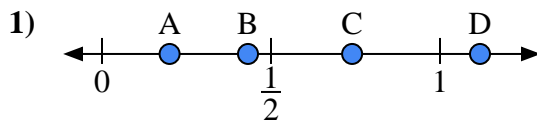
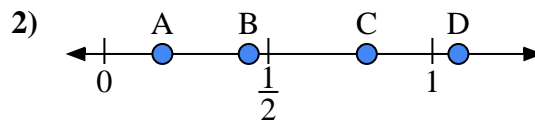




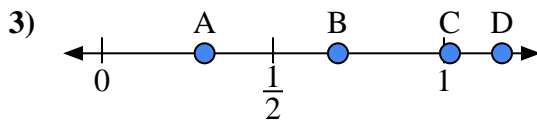
Use the number lines to answer the questions.

Answers

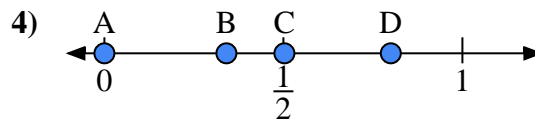
- a) Which letter best represents the location of 0.20?
- b) Which letter best represents the location of 0.74?



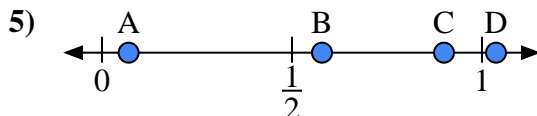
- a) Which letter best represents the location of 0.8?
- b) Which letter best represents the location of 0.44?



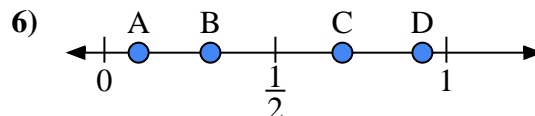
- a) Which letter best represents the location of 0.30?
- b) Which letter best represents the location of 0.69?



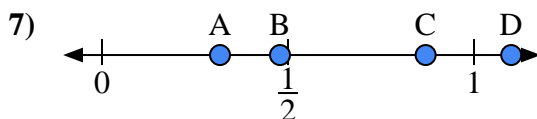
- a) Which letter best represents the location of 0.0?
- b) Which letter best represents the location of 0.80?



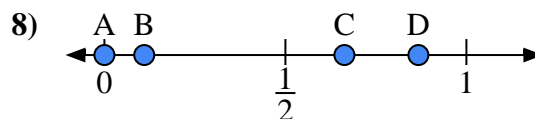
- a) Which letter best represents the location of 0.90?
- b) Which letter best represents the location of 0.07?



- a) Which letter best represents the location of 0.10?
- b) Which letter best represents the location of 0.31?



- a) Which letter best represents the location of 1.10?
- b) Which letter best represents the location of 0.87?

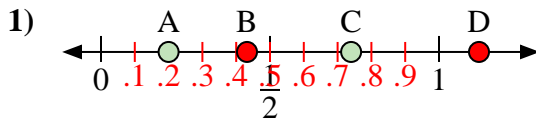


- a) Which letter best represents the location of 0.00?
- b) Which letter best represents the location of 0.11?

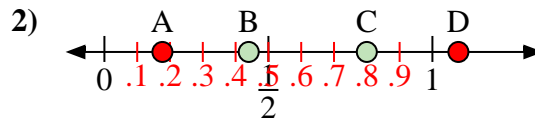
1. _____
2. _____
3. _____
4. _____
5. _____
6. _____
7. _____
8. _____



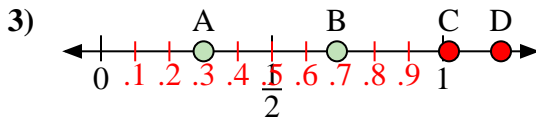
Use the number lines to answer the questions.



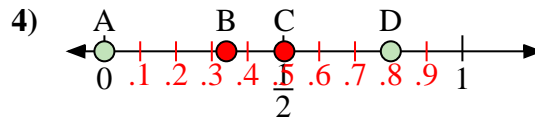
- a) Which letter best represents the location of 0.20?
- b) Which letter best represents the location of 0.74?



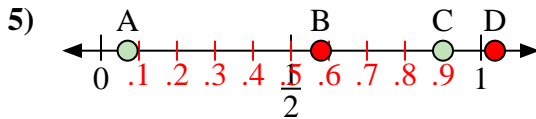
- a) Which letter best represents the location of 0.8?
- b) Which letter best represents the location of 0.44?



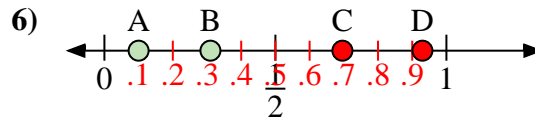
- a) Which letter best represents the location of 0.30?
- b) Which letter best represents the location of 0.69?



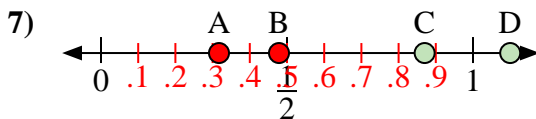
- a) Which letter best represents the location of 0.0?
- b) Which letter best represents the location of 0.80?



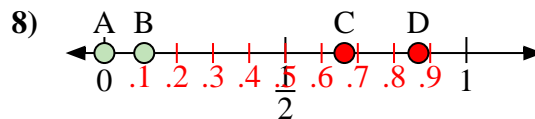
- a) Which letter best represents the location of 0.90?
- b) Which letter best represents the location of 0.07?



- a) Which letter best represents the location of 0.10?
- b) Which letter best represents the location of 0.31?



- a) Which letter best represents the location of 1.10?
- b) Which letter best represents the location of 0.87?



- a) Which letter best represents the location of 0.00?
- b) Which letter best represents the location of 0.11?

Answers

1. A C
2. C B
3. A B
4. A D
5. C A
6. A B
7. D C
8. A B