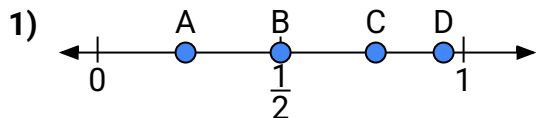
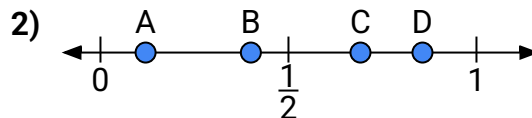




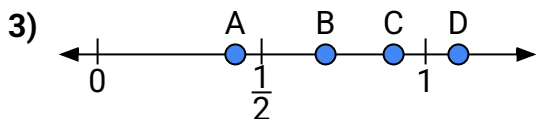
Use the number lines to answer the questions.

Answers

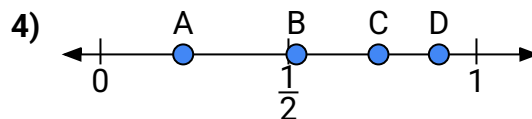
- a) Which letter best represents the location of 0.5?
b) Which letter best represents the location of 0.76?



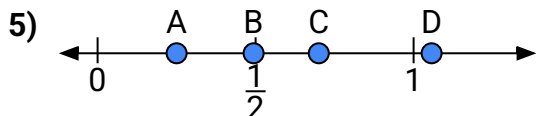
- a) Which letter best represents the location of 0.4?
b) Which letter best represents the location of 0.12?



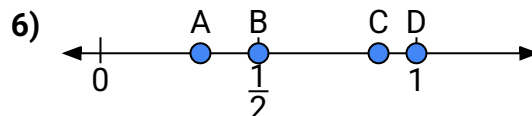
- a) Which letter best represents the location of 1.10?
b) Which letter best represents the location of 0.42?



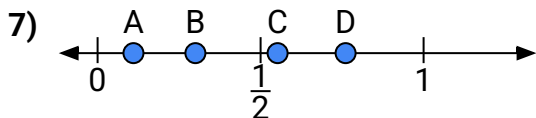
- a) Which letter best represents the location of 0.90?
b) Which letter best represents the location of 0.22?



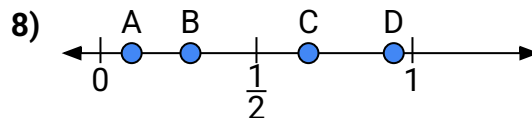
- a) Which letter best represents the location of 0.7?
b) Which letter best represents the location of 0.25?



- a) Which letter best represents the location of 1.00?
b) Which letter best represents the location of 0.88?



- a) Which letter best represents the location of 0.30?
b) Which letter best represents the location of 0.11?



- a) Which letter best represents the location of 0.10?
b) Which letter best represents the location of 0.94?

1. _____

2. _____

3. _____

4. _____

5. _____

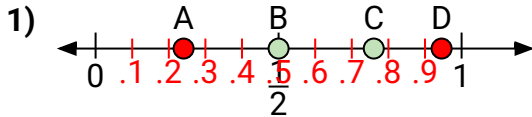
6. _____

7. _____

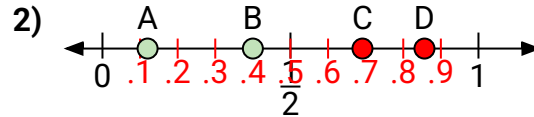
8. _____



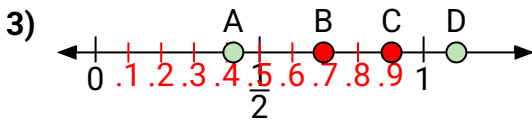
Use the number lines to answer the questions.

Answers

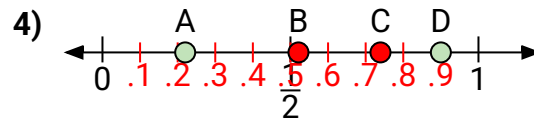
- a) Which letter best represents the location of 0.5?
b) Which letter best represents the location of 0.76?



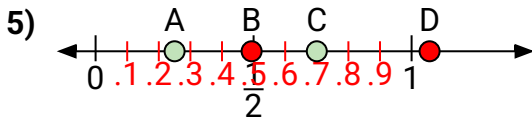
- a) Which letter best represents the location of 0.4?
b) Which letter best represents the location of 0.12?



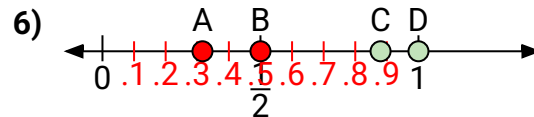
- a) Which letter best represents the location of 1.10?
b) Which letter best represents the location of 0.42?



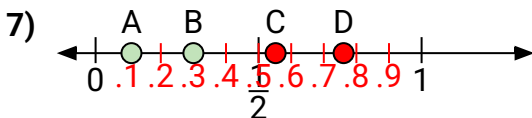
- a) Which letter best represents the location of 0.90?
b) Which letter best represents the location of 0.22?



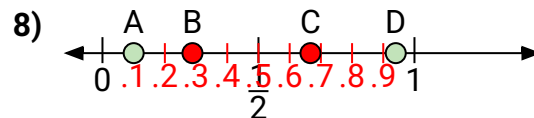
- a) Which letter best represents the location of 0.7?
b) Which letter best represents the location of 0.25?



- a) Which letter best represents the location of 1.00?
b) Which letter best represents the location of 0.88?



- a) Which letter best represents the location of 0.30?
b) Which letter best represents the location of 0.11?



- a) Which letter best represents the location of 0.10?
b) Which letter best represents the location of 0.94?

1. **B** **C**
2. **B** **A**
3. **D** **A**
4. **D** **A**
5. **C** **A**
6. **D** **C**
7. **B** **A**
8. **A** **D**