



Use the block on the left to find the value of the set of blocks on the right.

Answers

1) = 1

1. _____

2) = 1

2. _____

3) = 1

3. _____

4) = 1

4. _____

5) = 1

5. _____

6) = 1

6. _____

7) = 1

7. _____

8) = 1

8. _____

9) = 1

9. _____

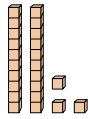
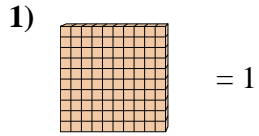
10) = 1

10. _____

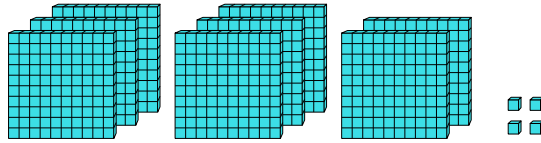
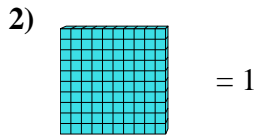
10. _____



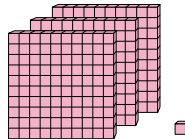
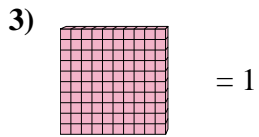
Use the block on the left to find the value of the set of blocks on the right.



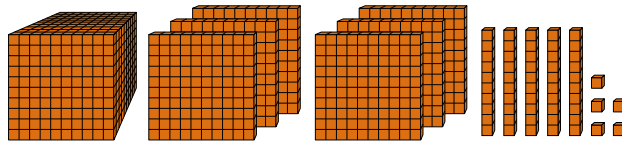
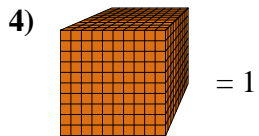
1. 0.23



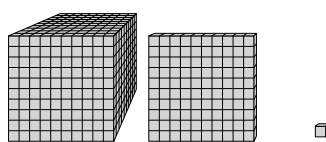
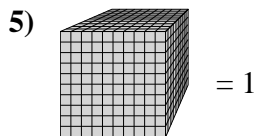
2. 8.04



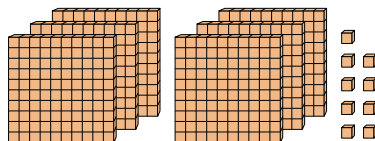
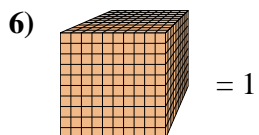
3. 3.01



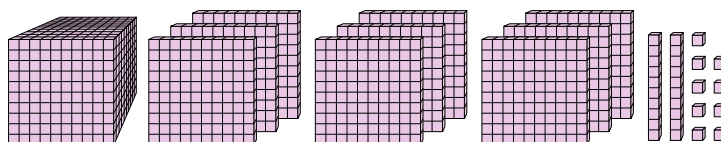
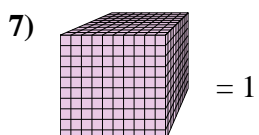
4. 1.655



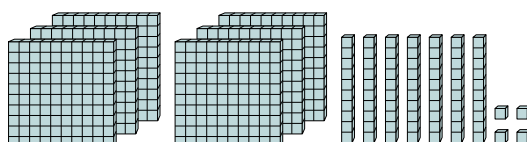
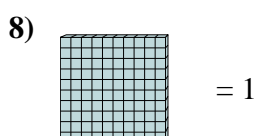
5. 1.101



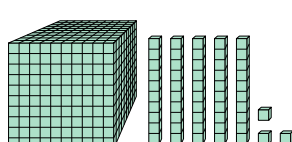
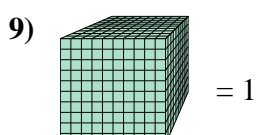
6. 0.609



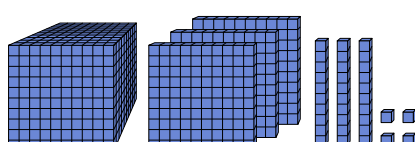
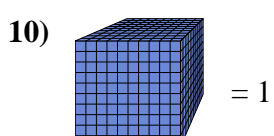
7. 1.929



8. 6.74



9. 1.053



10. 1.334

Answers