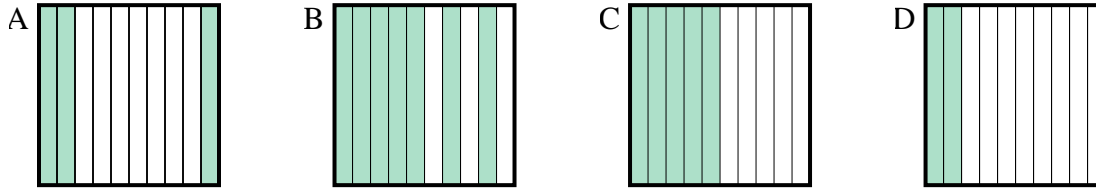
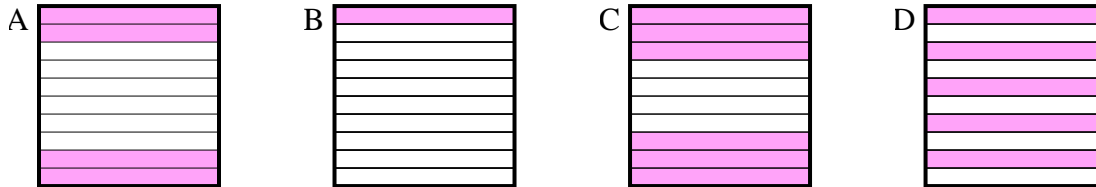


**Determine which letter best answer the question.****Answers**

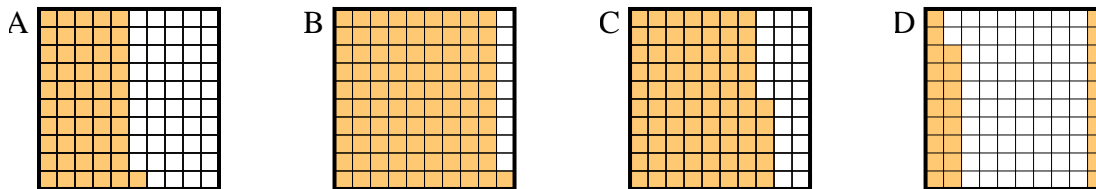
- 1) Which  $10 \times 1$  grid is shaded to represent the decimal number that, when added to 0.5, results in a total of 1.00?



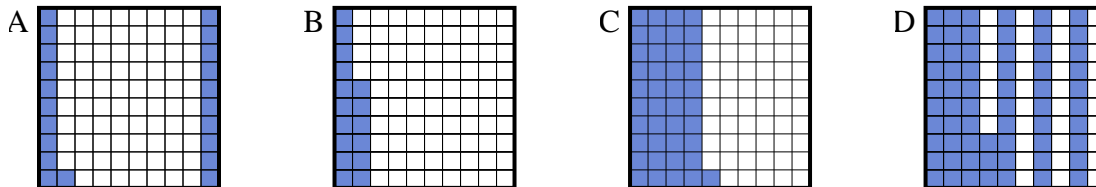
- 2) Which  $10 \times 1$  grid is shaded to represent the decimal number that, when added to 0.6, results in a total of 1.00?



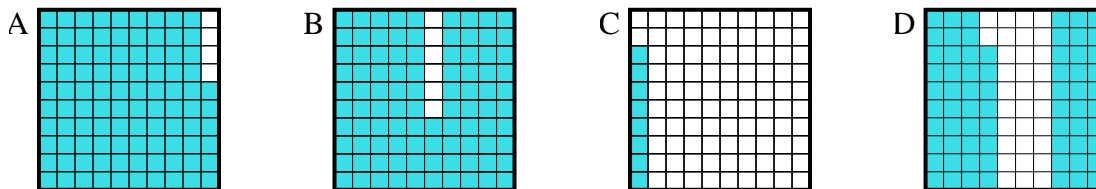
- 3) Which  $10 \times 10$  grid is shaded to represent the decimal number that, when added to 0.72, results in a total of 1.00?



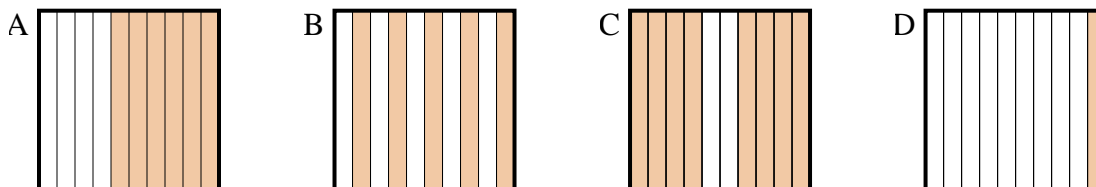
- 4) Which  $10 \times 10$  grid is shaded to represent the decimal number that, when added to 0.59, results in a total of 1.00?



- 5) Which  $10 \times 10$  grid is shaded to represent the decimal number that, when added to 0.32, results in a total of 1.00?



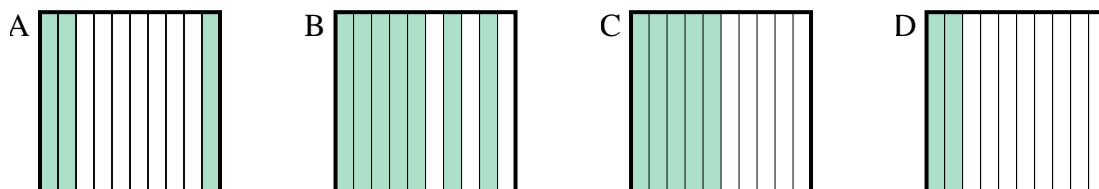
- 6) Which  $10 \times 1$  grid is shaded to represent the decimal number that, when added to 0.4, results in a total of 1.00?



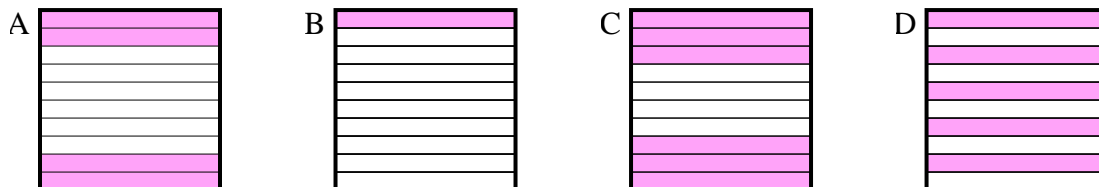
1. \_\_\_\_\_  
2. \_\_\_\_\_  
3. \_\_\_\_\_  
4. \_\_\_\_\_  
5. \_\_\_\_\_  
6. \_\_\_\_\_

**Determine which letter best answer the question.****Answers**

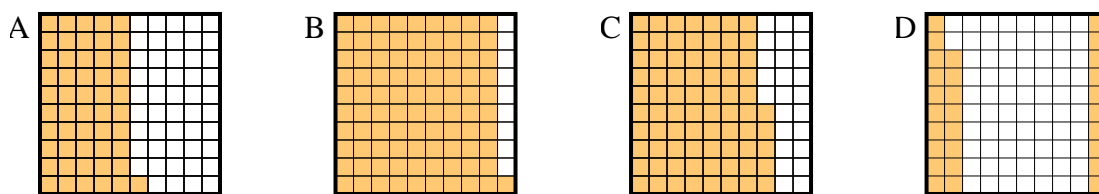
- 1) Which  $10 \times 1$  grid is shaded to represent the decimal number that, when added to 0.5, results in a total of 1.00?

1. **C**

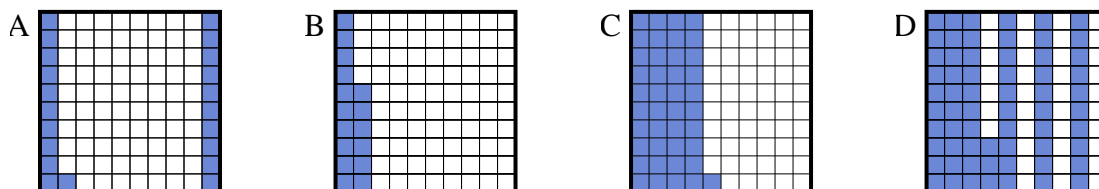
- 2) Which  $10 \times 1$  grid is shaded to represent the decimal number that, when added to 0.6, results in a total of 1.00?

2. **A**3. **D**4. **C**5. **D**6. **A**

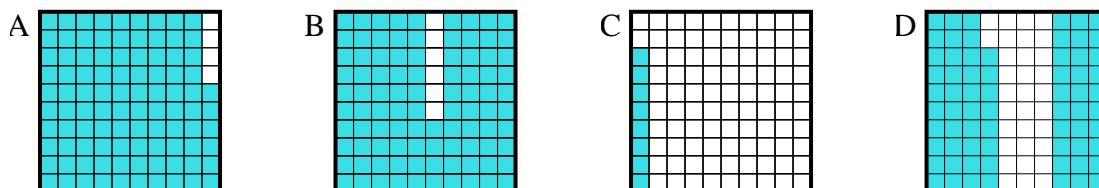
- 3) Which  $10 \times 10$  grid is shaded to represent the decimal number that, when added to 0.72, results in a total of 1.00?



- 4) Which  $10 \times 10$  grid is shaded to represent the decimal number that, when added to 0.59, results in a total of 1.00?



- 5) Which  $10 \times 10$  grid is shaded to represent the decimal number that, when added to 0.32, results in a total of 1.00?



- 6) Which  $10 \times 1$  grid is shaded to represent the decimal number that, when added to 0.4, results in a total of 1.00?

