


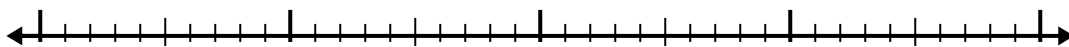


Use the number line to solve each problem.

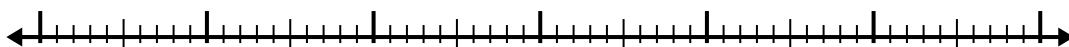
1)  $2.7 + 3.1 =$



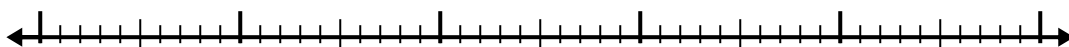
2)  $5.1 + 2.3 =$




3)  $7.2 + 3.1 =$




4)  $3.2 + 3.7 =$



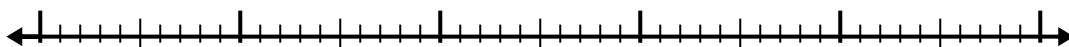
5)  $7.6 + 3.6 =$




6)  $1.8 + 2.7 =$



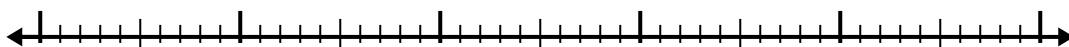
7)  $1.7 + 2.4 =$



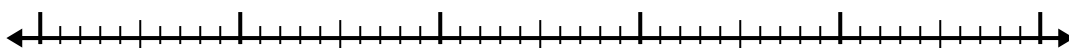
8)  $8.8 + 3.6 =$



9)  $8.9 + 2.6 =$



10)  $5.3 + 3.9 =$



**Answers**

1. \_\_\_\_\_

2. \_\_\_\_\_

3. \_\_\_\_\_

4. \_\_\_\_\_

5. \_\_\_\_\_

6. \_\_\_\_\_

7. \_\_\_\_\_

8. \_\_\_\_\_

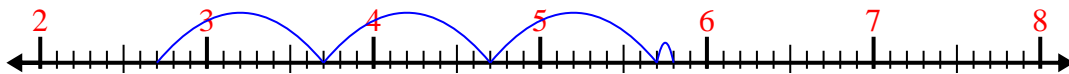
9. \_\_\_\_\_

10. \_\_\_\_\_

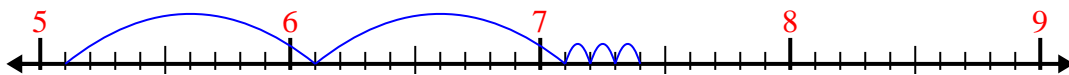


Use the number line to solve each problem.

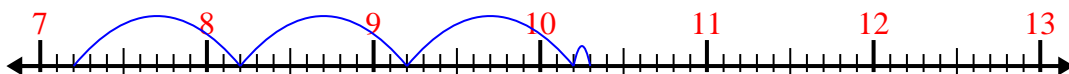
1)  $2.7 + 3.1 =$



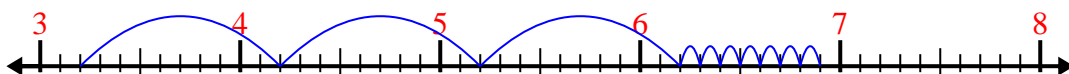
2)  $5.1 + 2.3 =$



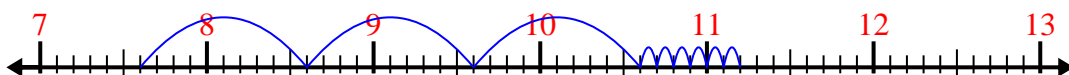
3)  $7.2 + 3.1 =$



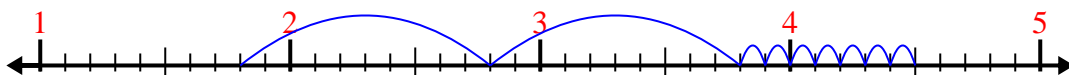
4)  $3.2 + 3.7 =$



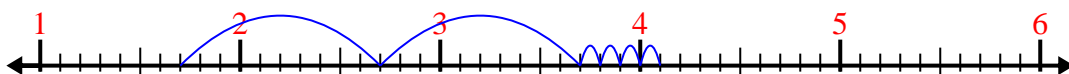
5)  $7.6 + 3.6 =$



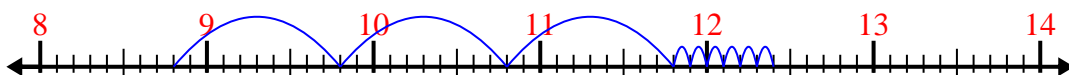
6)  $1.8 + 2.7 =$



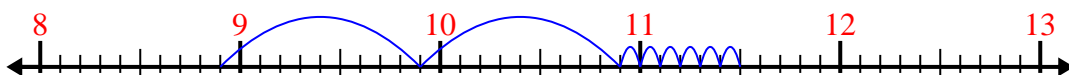
7)  $1.7 + 2.4 =$



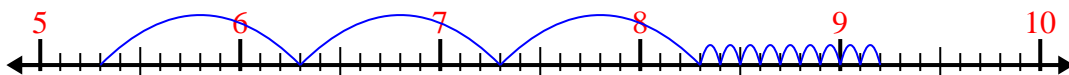
8)  $8.8 + 3.6 =$



9)  $8.9 + 2.6 =$



10)  $5.3 + 3.9 =$



Answers

1. 5.8

2. 7.4

3. 10.3

4. 6.9

5. 11.2

6. 4.5

7. 4.1

8. 12.4

9. 11.5

10. 9.2