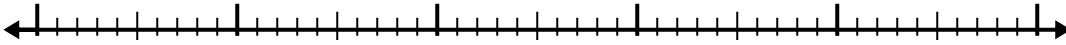


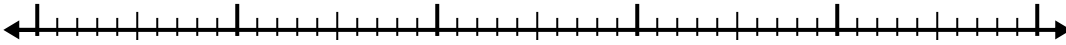


Use the number line to solve each problem.

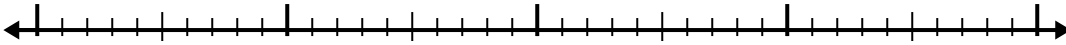
1) $2.6 + 3.6 =$



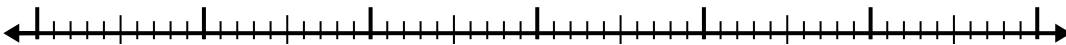
2) $3 + 2.2 =$



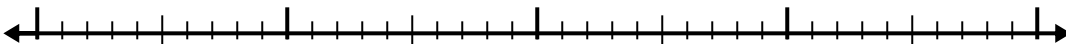
3) $1.1 + 2.2 =$



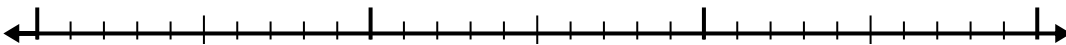
4) $3.7 + 3.9 =$



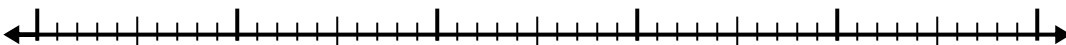
5) $8.2 + 2.2 =$




6) $5.4 + 1.8 =$



7) $2.2 + 3.6 =$



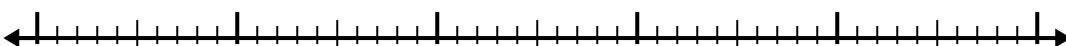
8) $5.4 + 2.8 =$



9) $3.5 + 2.2 =$



10) $1.9 + 2.2 =$



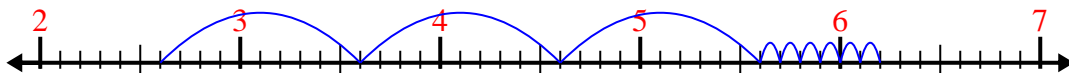
Answers

- 1. _____
- 2. _____
- 3. _____
- 4. _____
- 5. _____
- 6. _____
- 7. _____
- 8. _____
- 9. _____
- 10. _____

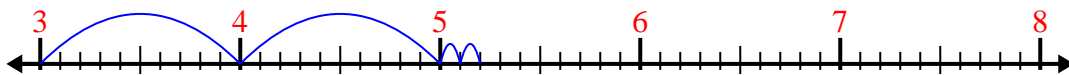


Use the number line to solve each problem.

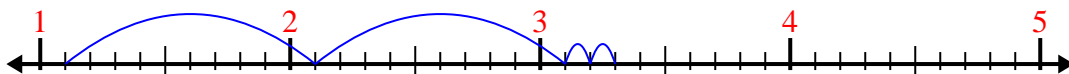
1) $2.6 + 3.6 =$



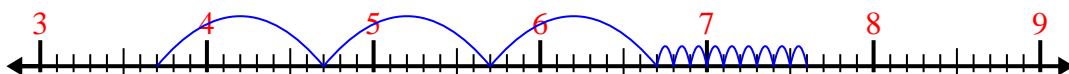
2) $3 + 2.2 =$



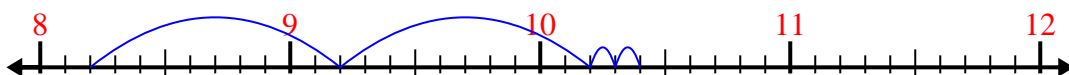
3) $1.1 + 2.2 =$



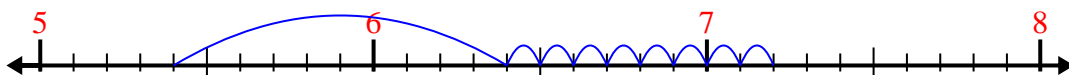
4) $3.7 + 3.9 =$



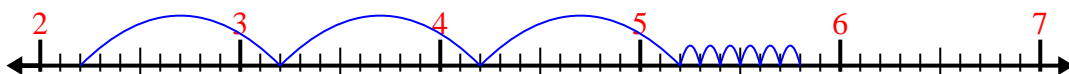
5) $8.2 + 2.2 =$



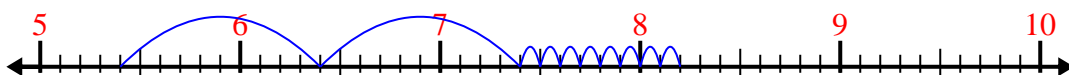
6) $5.4 + 1.8 =$



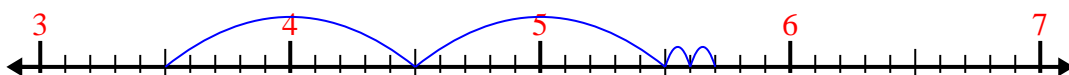
7) $2.2 + 3.6 =$




8) $5.4 + 2.8 =$



9) $3.5 + 2.2 =$



10) $1.9 + 2.2 =$



Answers

1. 6.2

2. 5.2

3. 3.3

4. 7.6

5. 10.4

6. 7.2

7. 5.8

8. 8.2

9. 5.7

10. 4.1