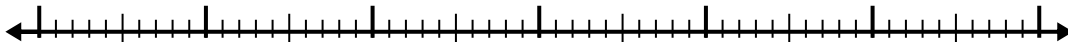


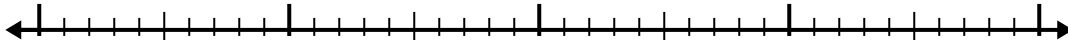


Use the number line to solve each problem.

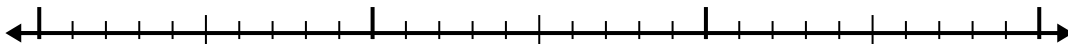
1)  $2.1 + 3.4 =$



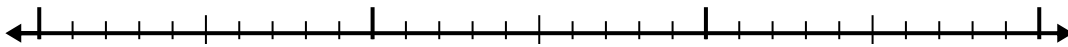
2)  $2.5 + 2.1 =$



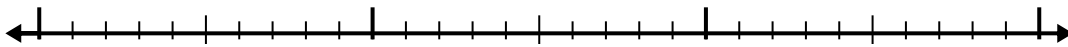
3)  $6.9 + 1.2 =$



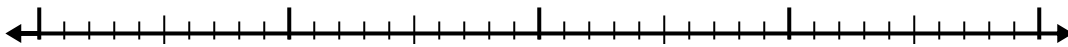
4)  $6.8 + 1.3 =$



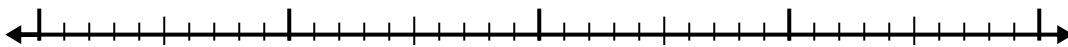
5)  $7.1 + 1.8 =$



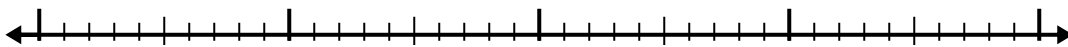
6)  $3.8 + 2.1 =$



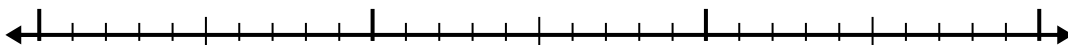
7)  $7.2 + 2.1 =$



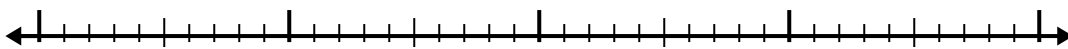
8)  $6 + 1.8 =$



9)  $4.5 + 1.1 =$



10)  $3.3 + 2.7 =$



Answers

1. \_\_\_\_\_

2. \_\_\_\_\_

3. \_\_\_\_\_

4. \_\_\_\_\_

5. \_\_\_\_\_

6. \_\_\_\_\_

7. \_\_\_\_\_

8. \_\_\_\_\_

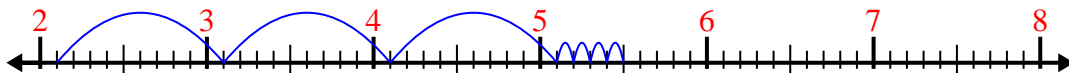
9. \_\_\_\_\_

10. \_\_\_\_\_

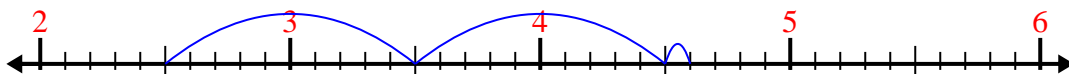


Use the number line to solve each problem.


1)  $2.1 + 3.4 =$



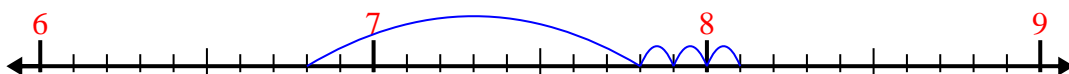
2)  $2.5 + 2.1 =$



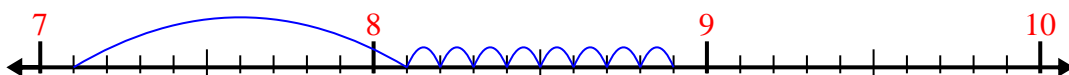
3)  $6.9 + 1.2 =$



4)  $6.8 + 1.3 =$



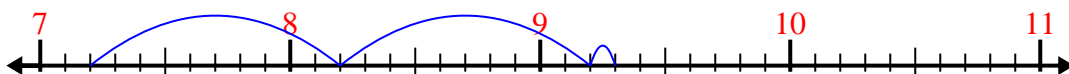
5)  $7.1 + 1.8 =$



6)  $3.8 + 2.1 =$



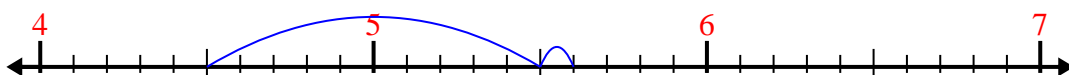
7)  $7.2 + 2.1 =$



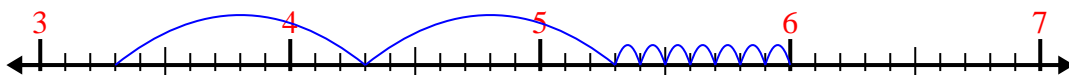
8)  $6 + 1.8 =$



9)  $4.5 + 1.1 =$



10)  $3.3 + 2.7 =$



Answers

1. 5.5

2. 4.6

3. 8.1

4. 8.1

5. 8.9

6. 5.9

7. 9.3

8. 7.8

9. 5.6

10. 6.0