




Determine which letter best represents the volume.

**Milliliter**

A milliliter is equal to about 20 drops of water.



**Liter**

Many large soda bottles are either 1 or 2 liters.

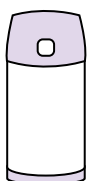
1 Liter = 1,000 Milliliters



**Answers**

1. \_\_\_\_\_
2. \_\_\_\_\_
3. \_\_\_\_\_
4. \_\_\_\_\_
5. \_\_\_\_\_
6. \_\_\_\_\_
7. \_\_\_\_\_
8. \_\_\_\_\_
9. \_\_\_\_\_

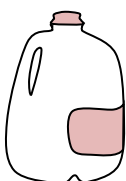
1)



Liquid in a thermos

- A. 20 liters
- B. 3 liters
- C. 440 milliliters
- D. 20 milliliters

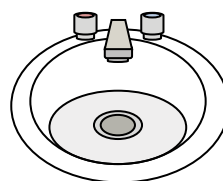
2)



Gallon of Milk

- A. 1 liter
- B. 3.75 liters
- C. 50 milliliters
- D. 750 milliliters

3)



Water in bathroom sink

- A. 500 milliliters
- B. 10 milliliters
- C. 7.5 liters
- D. 2 liters


4)



Measuring Cup

- A. 50 milliliters
- B. 237 milliliters
- C. 1 liter
- D. 237 liters

5)



Soda in a can

- A. 2 liters
- B. 350 milliliters
- C. 350 liters
- D. 2 milliliters

6)



Water for a house plant

- A. 2 milliliters
- B. 80 liters
- C. 500 milliliters
- D. 3 liters

7)



Cafeteria Milk

- A. 237 liters
- B. 1 liter
- C. 237 milliliters
- D. 2 liters

8)



Ink in a pen

- A. 2 milliliters
- B. 0.25 milliliters
- C. 1 liter
- D. 400 milliliters

9)



Liquid in a tea cup


- A. 2 milliliters
- B. 250 milliliters
- C. 2 liters
- D. 5 liters



Determine which letter best represents the volume.

**Milliliter**

A milliliter is equal to about 20 drops of water.



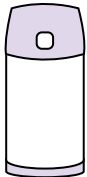
**Liter**


Many large soda bottles are either 1 or 2 liters.

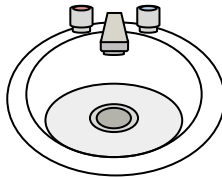
1 Liter = 1,000 Milliliters





**Answers**


- 1)   
 Liquid in a thermos  
 A. 20 liters  
 B. 3 liters  
 C. 440 milliliters  
 D. 20 milliliters


- 2)   
 Gallon of Milk  
 A. 1 liter  
 B. 3.75 liters  
 C. 50 milliliters  
 D. 750 milliliters


- 3)   
 Water in bathroom sink  
 A. 500 milliliters  
 B. 10 milliliters  
 C. 7.5 liters  
 D. 2 liters


- 4)   
 Measuring Cup  
 A. 50 milliliters  
 B. 237 milliliters  
 C. 1 liter  
 D. 237 liters

- 5)   
 Soda in a can  
 A. 2 liters  
 B. 350 milliliters  
 C. 350 liters  
 D. 2 milliliters

- 6)   
 Water for a house plant  
 A. 2 milliliters  
 B. 80 liters  
 C. 500 milliliters  
 D. 3 liters

- 7)   
 Cafeteria Milk  
 A. 237 liters  
 B. 1 liter  
 C. 237 milliliters  
 D. 2 liters

- 8)   
 Ink in a pen  
 A. 2 milliliters  
 B. 0.25 milliliters  
 C. 1 liter  
 D. 400 milliliters

- 9)   
 Liquid in a tea cup  
 A. 2 milliliters  
 B. 250 milliliters  
 C. 2 liters  
 D. 5 liters

1. **C**  
 2. **B**  
 3. **C**  
 4. **B**  
 5. **B**  
 6. **C**  
 7. **C**  
 8. **B**  
 9. **B**