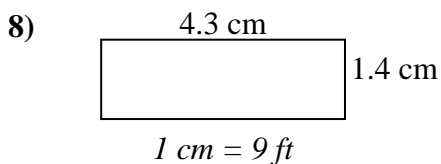
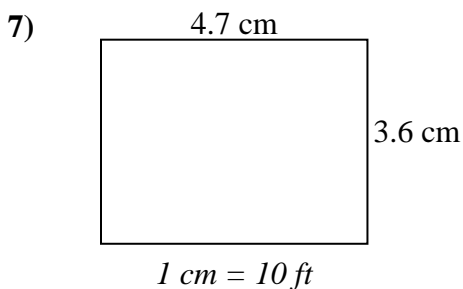
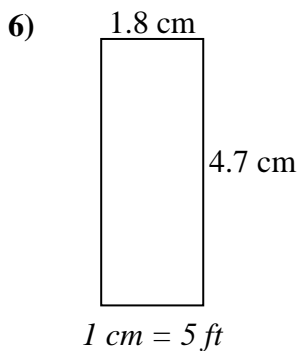
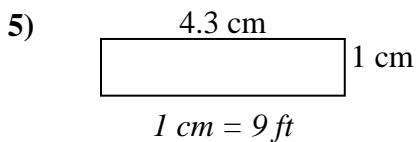
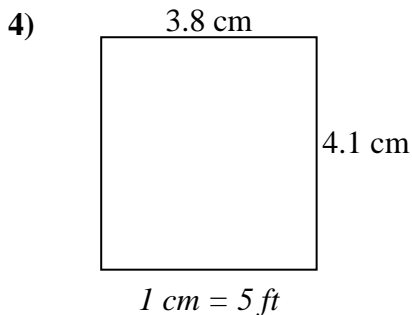
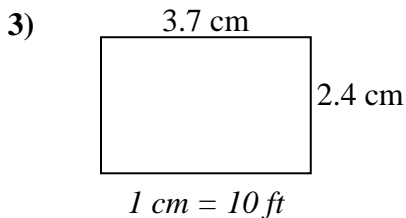
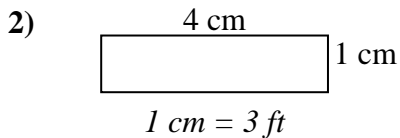
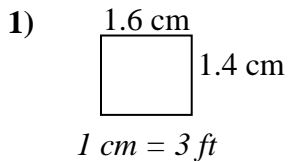




Determine the actual width, height and area of each scale rectangle.

Round the area to the nearest whole number.



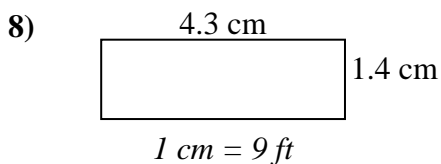
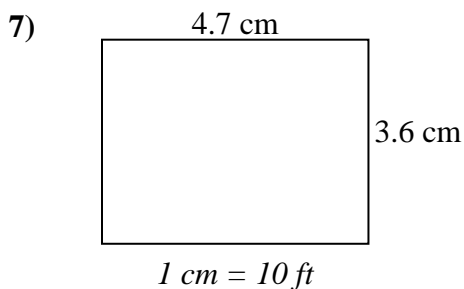
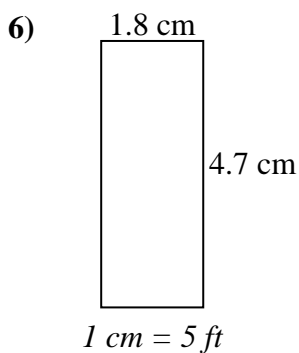
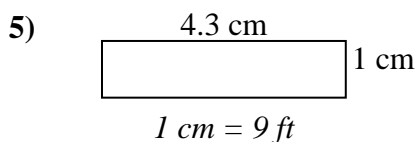
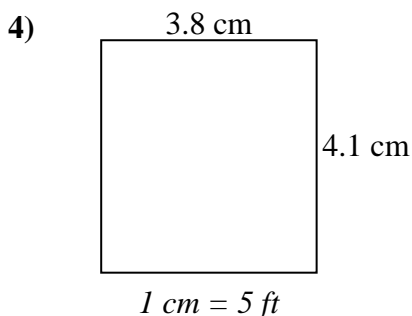
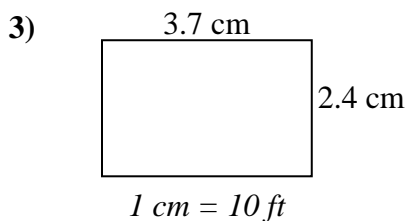
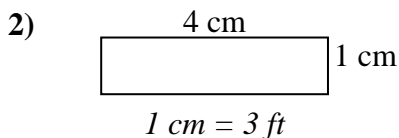
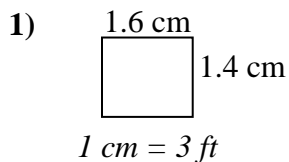
Answers

1. _____
2. _____
3. _____
4. _____
5. _____
6. _____
7. _____
8. _____



Determine the actual width, height and area of each scale rectangle.

Round the area to the nearest whole number.



Answers

1.	<u>4.8</u>	<u>4.2</u>	<u>20</u>
2.	<u>12</u>	<u>3</u>	<u>36</u>
3.	<u>37</u>	<u>24</u>	<u>888</u>
4.	<u>19</u>	<u>20.5</u>	<u>390</u>
5.	<u>38.7</u>	<u>9</u>	<u>348</u>
6.	<u>9</u>	<u>23.5</u>	<u>212</u>
7.	<u>47</u>	<u>36</u>	<u>1,692</u>
8.	<u>38.7</u>	<u>12.6</u>	<u>488</u>