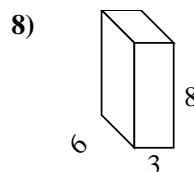
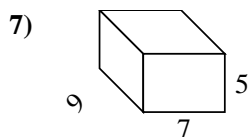
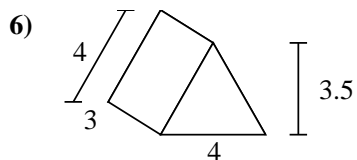
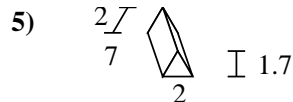
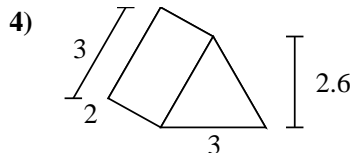
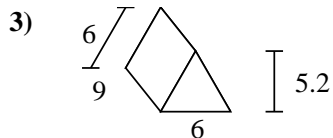
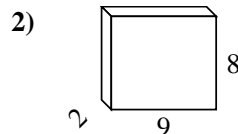
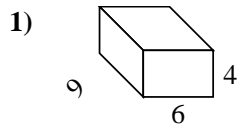
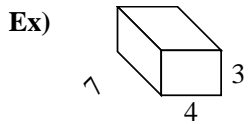




Find the surface area of each figure. Units are in cm (not to scale).



Answers

Ex. 122 cm<sup>2</sup>

1. \_\_\_\_\_

2. \_\_\_\_\_

3. \_\_\_\_\_

4. \_\_\_\_\_

5. \_\_\_\_\_

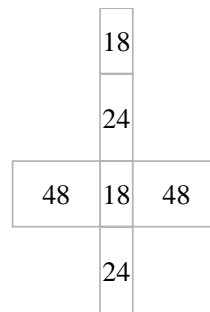
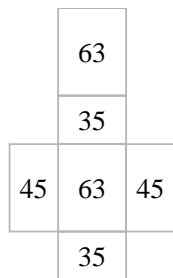
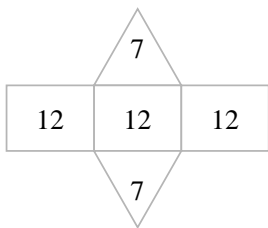
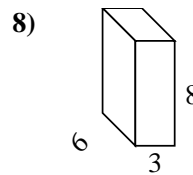
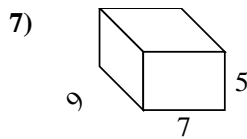
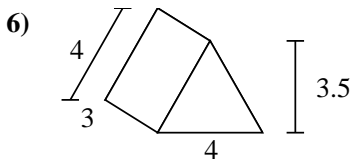

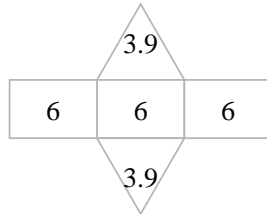
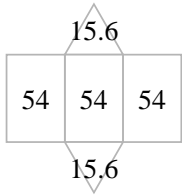
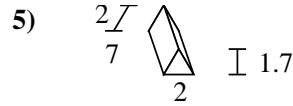
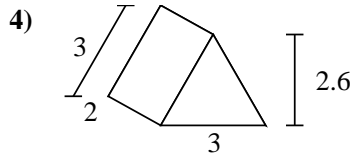
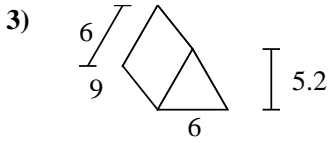
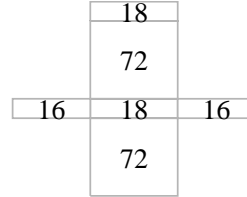
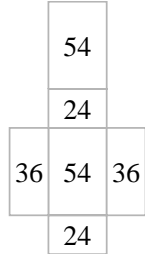
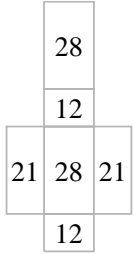
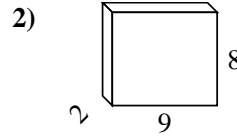
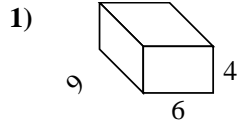
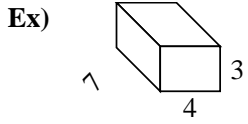
6. \_\_\_\_\_

7. \_\_\_\_\_

8. \_\_\_\_\_



Find the surface area of each figure. Units are in cm (not to scale).



Answers

Ex. 122 cm<sup>2</sup>

1. 228 cm<sup>2</sup>

2. 212 cm<sup>2</sup>

3. 193.2 cm<sup>2</sup>

4. 25.8 cm<sup>2</sup>

5. 45.4 cm<sup>2</sup>

6. 50 cm<sup>2</sup>

7. 286 cm<sup>2</sup>

8. 180 cm<sup>2</sup>