




Use the diagrams below to create a rectangle with the area/perimeter shown. Each SVGREPLACE = 1 unit(u). Answer with the length and height. Answers will vary.


1) Area of 72 square units.




2) Perimeter of 4 units.




3) Perimeter of 18 units.




4) Perimeter of 16 units.




5) Perimeter of 22 units.




6) Area of 2 square units.




7) Perimeter of 12 units.




8) Perimeter of 32 units.




9) Area of 54 square units.




10) Area of 7 square units.



11) Area of 6 square units.




12) Area of 49 square units.

**Answers**1. _____ $=72u^2$ 2. _____ $=4u$ 3. _____ $=18u$ 4. _____ $=16u$ 5. _____ $=22u$ 6. _____ $=2u^2$ 7. _____ $=12u$ 8. _____ $=32u$ 9. _____ $=54u^2$ 10. _____ $=7u^2$ 11. _____ $=6u^2$ 12. _____ $=49u^2$




Use the diagrams below to create a rectangle with the area/perimeter shown. Each SVGREPLACE = 1 unit(u). Answer with the length and height. Answers will vary.


1) Area of 72 square units.




2) Perimeter of 4 units.




3) Perimeter of 18 units.




4) Perimeter of 16 units.




5) Perimeter of 22 units.




6) Area of 2 square units.




7) Perimeter of 12 units.




8) Perimeter of 32 units.




9) Area of 54 square units.




10) Area of 7 square units.



11) Area of 6 square units.



12) Area of 49 square units.

**Answers**1. _____ $=72u^2$ 2. _____ $=4u$ 3. _____ $=18u$ 4. _____ $=16u$ 5. _____ $=22u$ 6. _____ $=2u^2$ 7. _____ $=12u$ 8. _____ $=32u$ 9. _____ $=54u^2$ 10. _____ $=7u^2$ 11. _____ $=6u^2$ 12. _____ $=49u^2$