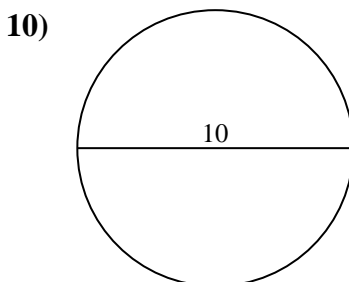
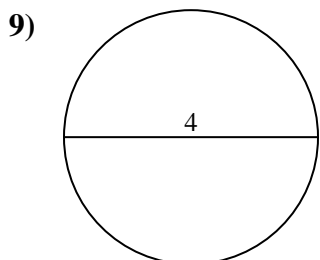
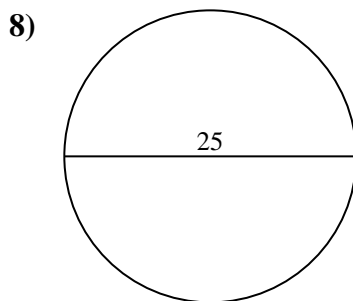
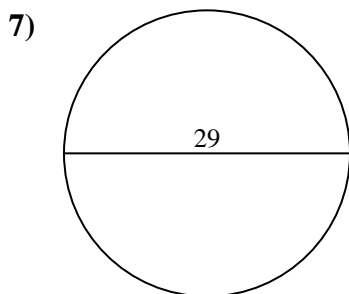
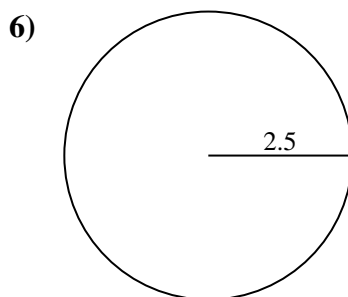
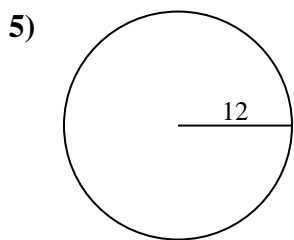
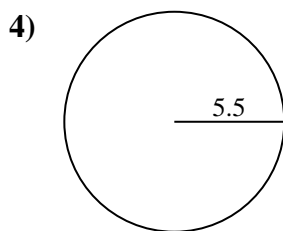
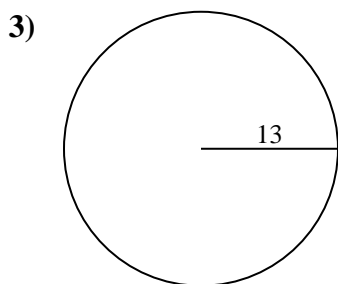
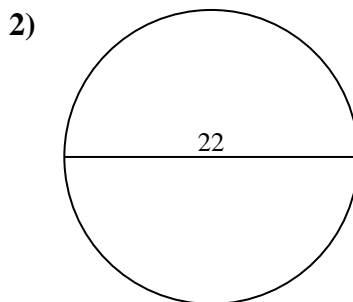
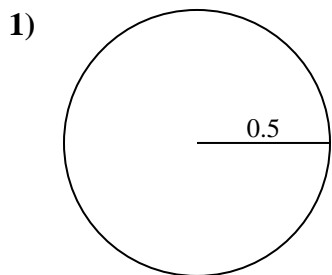




Find the area of the circle. Round to the nearest 10th.

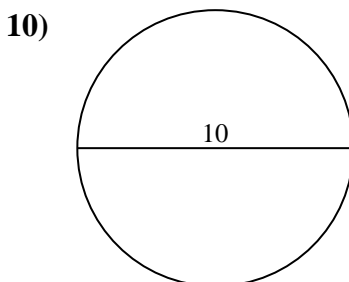
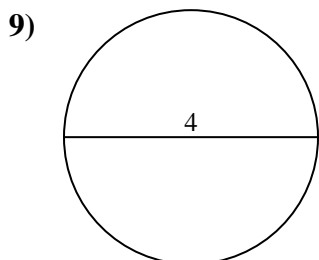
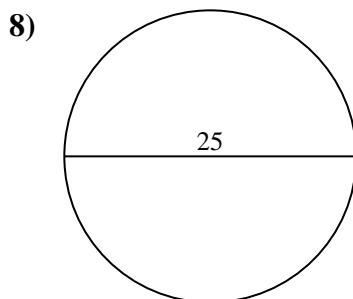
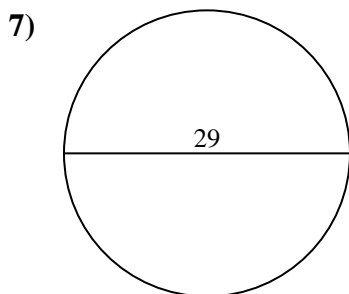
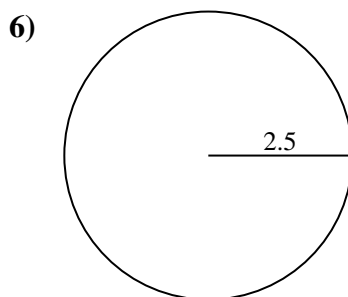
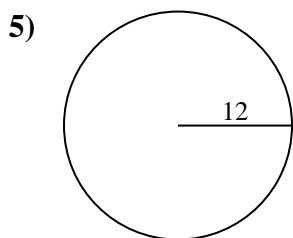
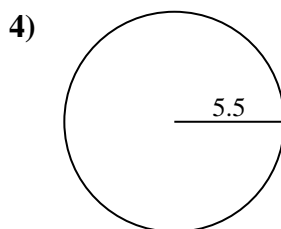
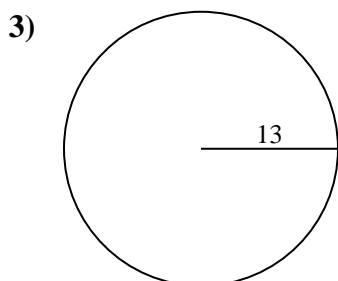
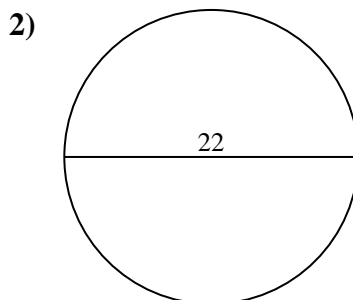
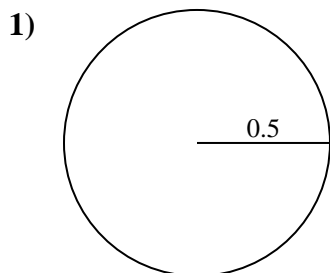
Answers



- 1. _____
- 2. _____
- 3. _____
- 4. _____
- 5. _____
- 6. _____
- 7. _____
- 8. _____
- 9. _____
- 10. _____



Find the area of the circle. Round to the nearest 10th.



Answers

- 1. 0.8
- 2. 380.1
- 3. 530.9
- 4. 95
- 5. 452.4
- 6. 19.6
- 7. 660.5
- 8. 490.9
- 9. 12.6
- 10. 78.5



Find the area of the circle. Round to the nearest 10th.

| | | | | |
|-------|-------|------|-------|-------|
| 452.4 | 19.6 | 0.8 | 95 | 530.9 |
| 490.9 | 660.5 | 12.6 | 380.1 | |

Answers

1. _____
2. _____
3. _____
4. _____
5. _____
6. _____
7. _____
8. _____
9. _____

