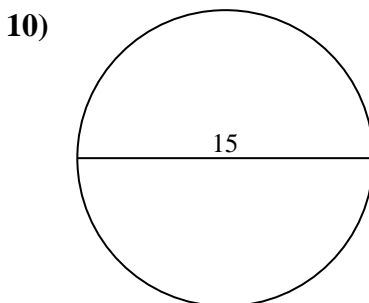
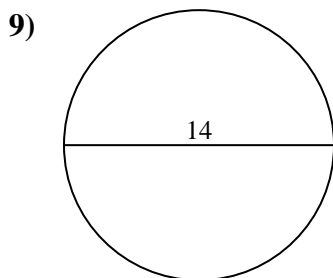
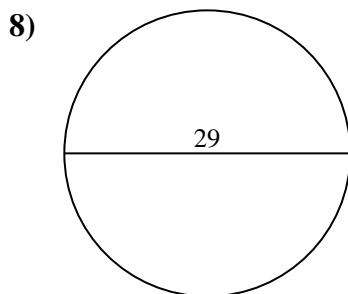
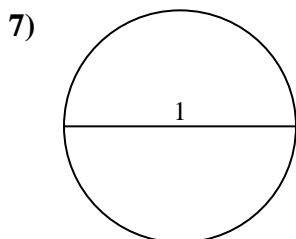
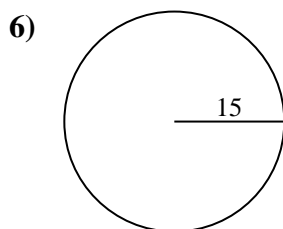
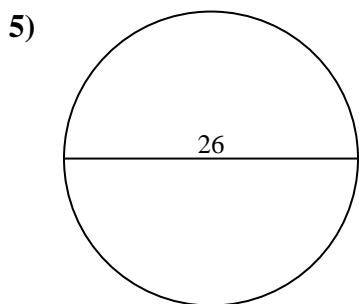
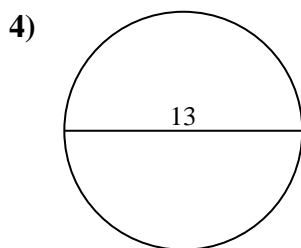
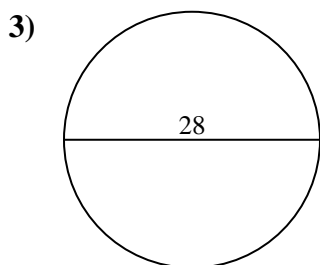
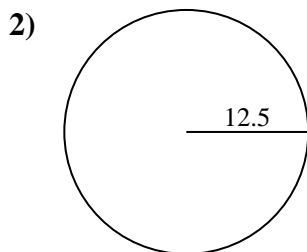
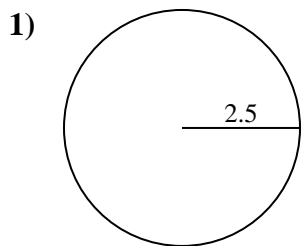




Find the area of the circle. Round to the nearest 10th.

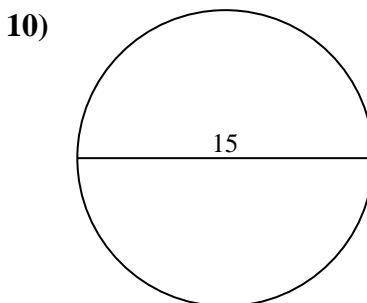
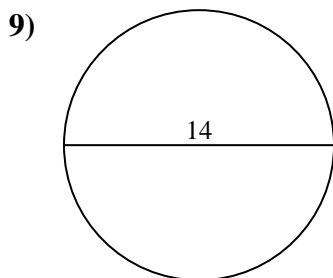
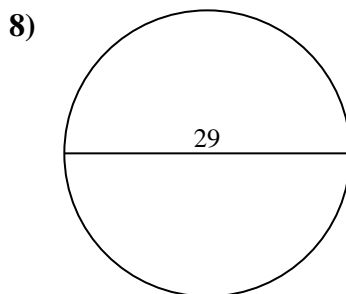
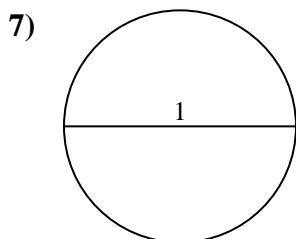
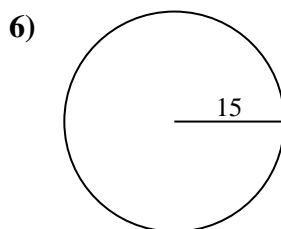
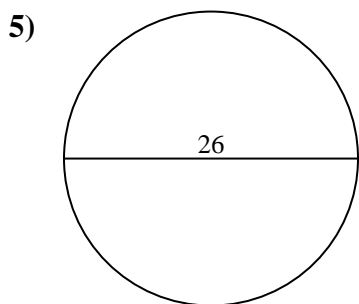
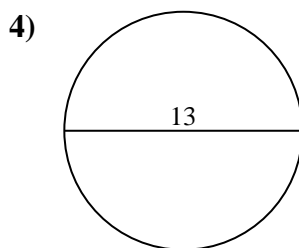
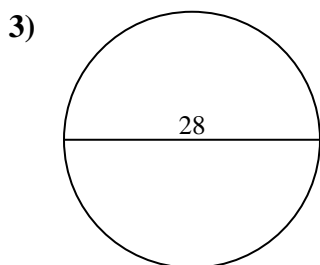
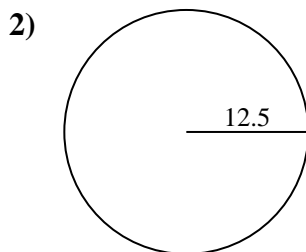
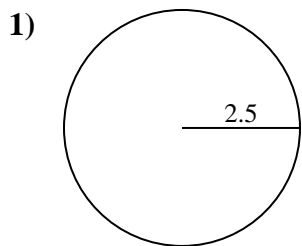
Answers



- 1. _____
- 2. _____
- 3. _____
- 4. _____
- 5. _____
- 6. _____
- 7. _____
- 8. _____
- 9. _____
- 10. _____



Find the area of the circle. Round to the nearest 10th.



Answers

- 1. 19.6
- 2. 490.9
- 3. 615.8
- 4. 132.7
- 5. 530.9
- 6. 706.9
- 7. 0.8
- 8. 660.5
- 9. 153.9
- 10. 176.7



Find the area of the circle. Round to the nearest 10th.

490.9	615.8	706.9	132.7	153.9
19.6	530.9	0.8	660.5	

Answers

1. _____
2. _____
3. _____
4. _____
5. _____
6. _____
7. _____
8. _____
9. _____

