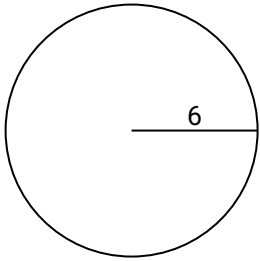




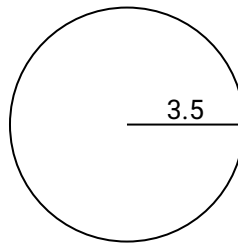
Find the area of the circle. Round to the nearest 10th.

Answers

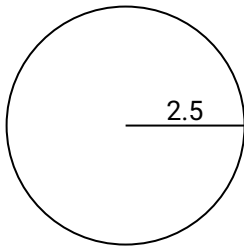
1)



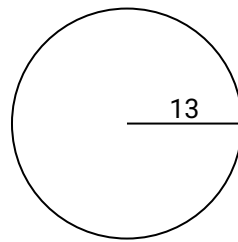
2)



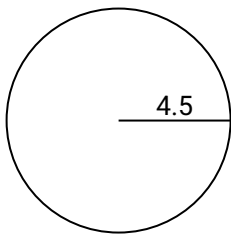
3)



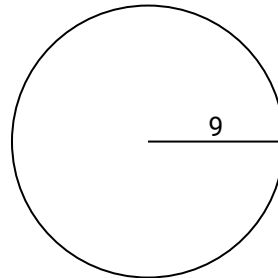
4)



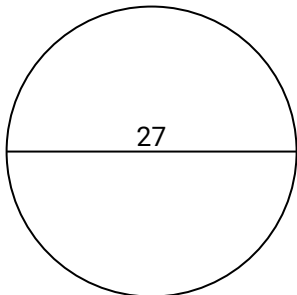
5)



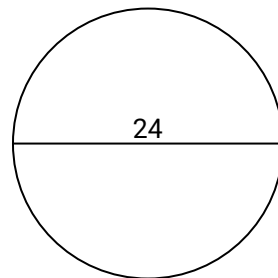
6)



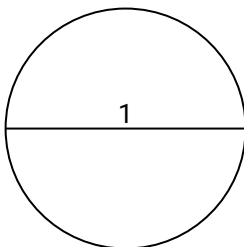
7)



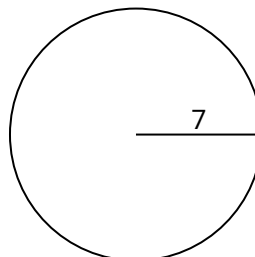
8)



9)



10)

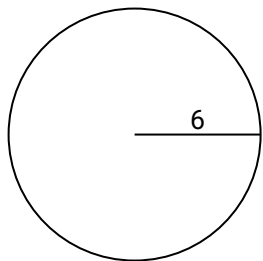


- 1. _____
- 2. _____
- 3. _____
- 4. _____
- 5. _____
- 6. _____
- 7. _____
- 8. _____
- 9. _____
- 10. _____

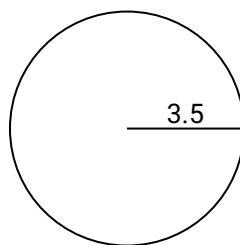


Find the area of the circle. Round to the nearest 10th.

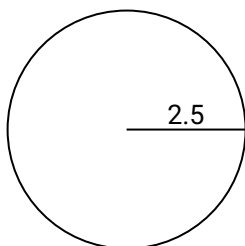
1)



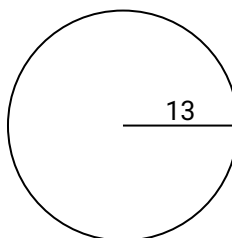
2)



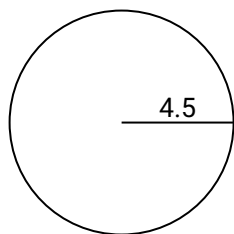
3)



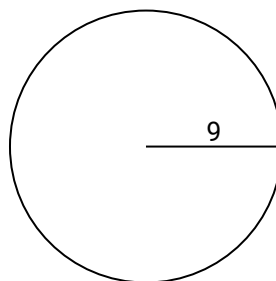
4)



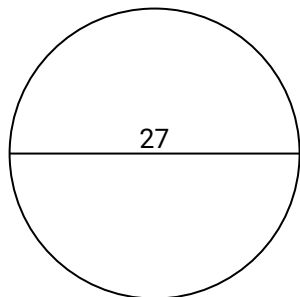
5)



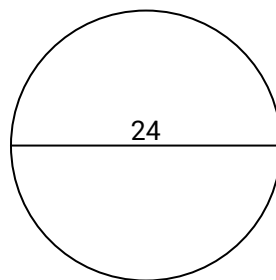
6)



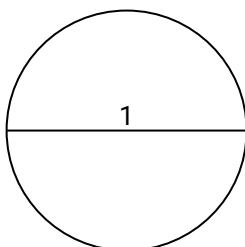
7)



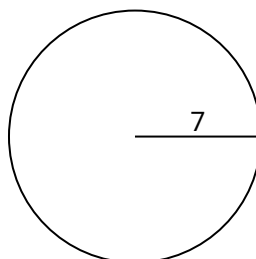
8)




9)



10)

**Answers**

1. 113.1
2. 38.5
3. 19.6
4. 530.9
5. 63.6
6. 254.5
7. 572.6
8. 452.4
9. 0.8
10. 153.9



Finding the Area of a Circle

Name: _____

Find the area of the circle. Round to the nearest 10th.

Answers

19.6
113.1

452.4
0.8

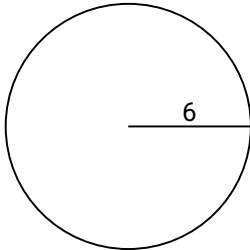
63.6
38.5

572.6
254.5

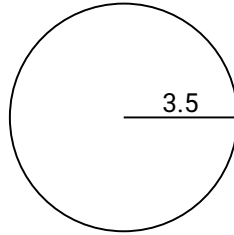
530.9

1. _____
2. _____
3. _____
4. _____
5. _____
6. _____
7. _____
8. _____
9. _____
10. _____

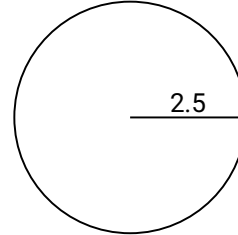
1)



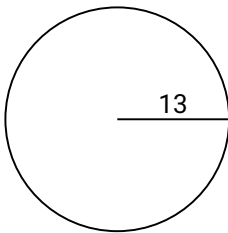
2)



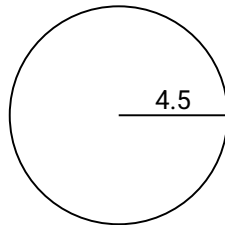
3)



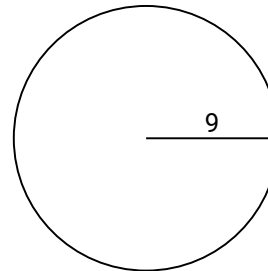
4)



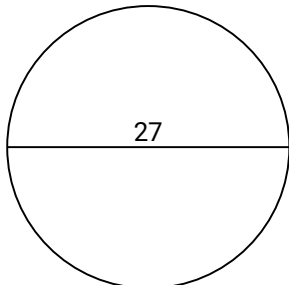
5)



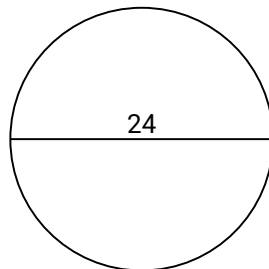
6)



7)



8)



9)

