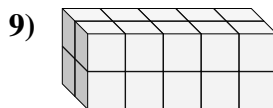
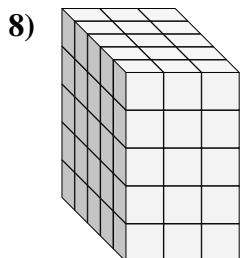
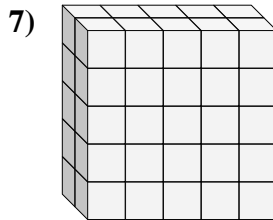
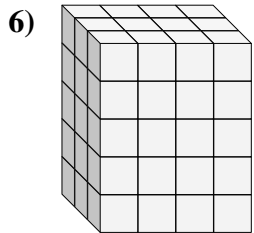
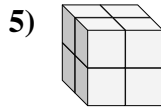
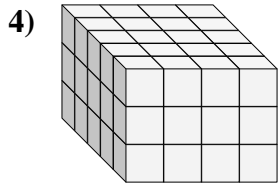
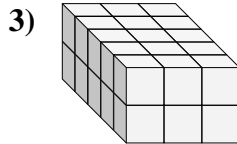
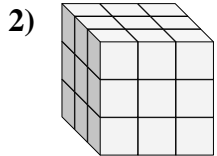
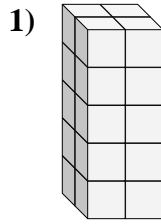
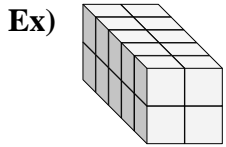




Find the length, width and height of the rectangular prism. Then find the volume.



Answers

Ex. 5 2 2 20

1. _____

2. _____

3. _____

4. _____

5. _____

6. _____

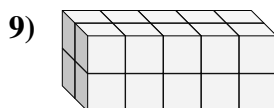
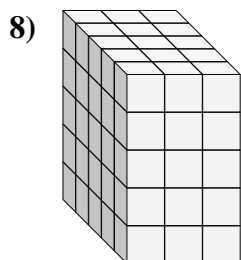
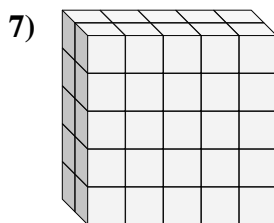
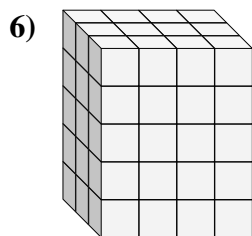
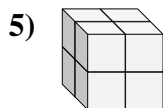
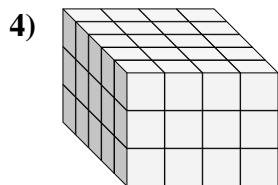
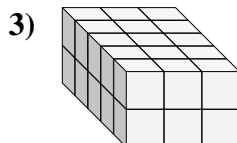
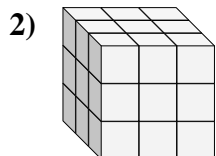
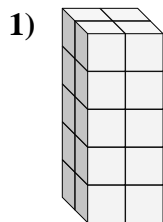
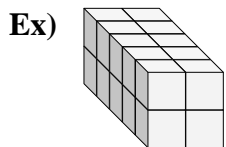
7. _____

8. _____

9. _____



Find the length, width and height of the rectangular prism. Then find the volume.



Answers

Ex. 5 2 2 20

1. 2 2 5 20

2. 3 3 3 27

3. 5 3 2 30

4. 5 4 3 60

5. 2 2 2 8

6. 3 4 5 60

7. 2 5 5 50

8. 5 3 5 75

9. 2 5 2 20