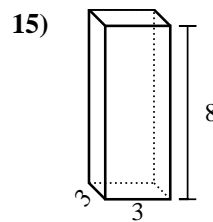
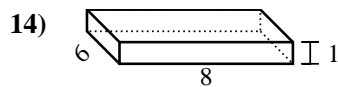
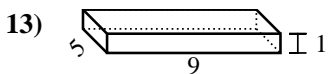
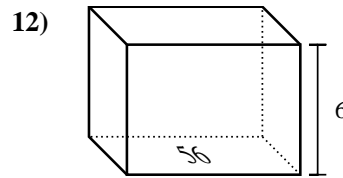
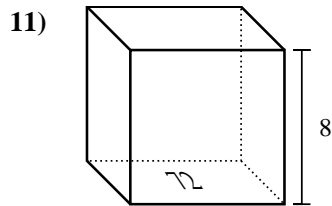
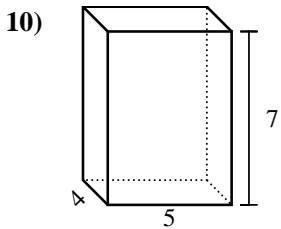
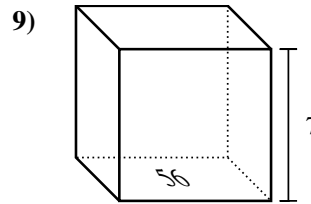
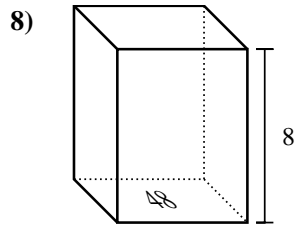
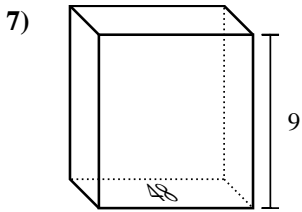
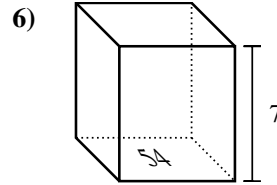
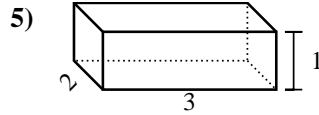
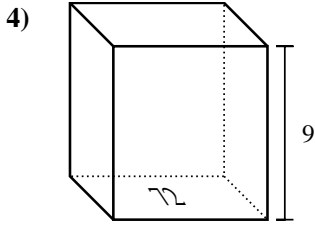
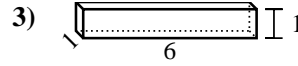
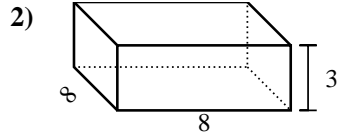
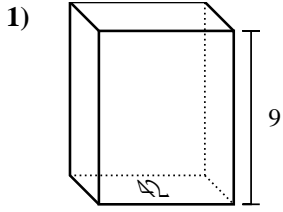




Find the volume of each rectangular prism. Units are in cm (not to scale). Remember $V = BH$ and $V = L \times W \times H$

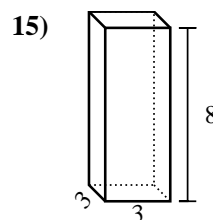
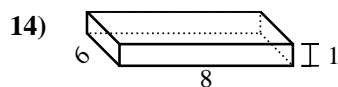
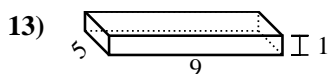
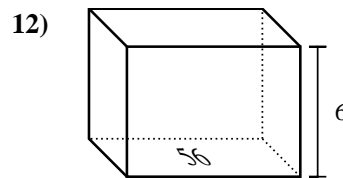
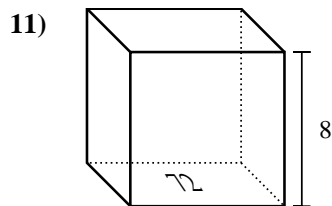
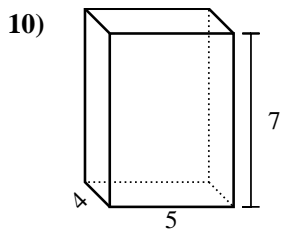
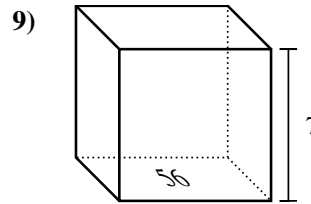
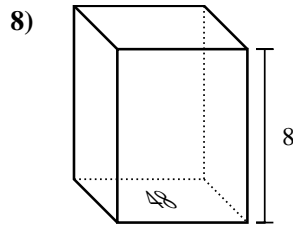
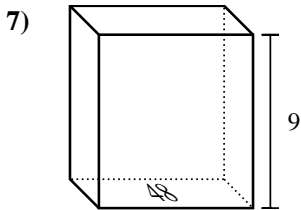
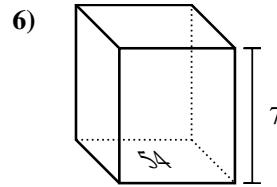
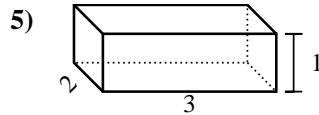
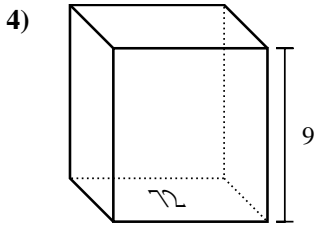
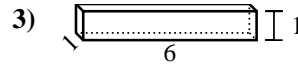
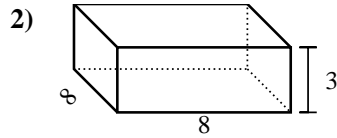
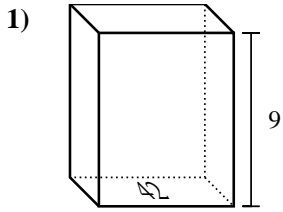


Answers

1. _____
2. _____
3. _____
4. _____
5. _____
6. _____
7. _____
8. _____
9. _____
10. _____
11. _____
12. _____
13. _____
14. _____
15. _____



Find the volume of each rectangular prism. Units are in cm (not to scale). Remember $V = BH$ and $V = L \times W \times H$



Answers

1. 378 cm³

2. 192 cm³

3. 6 cm³

4. 648 cm³

5. 6 cm³

6. 378 cm³

7. 432 cm³

8. 384 cm³

9. 392 cm³

10. 140 cm³

11. 576 cm³

12. 336 cm³

13. 45 cm³

14. 48 cm³

15. 72 cm³