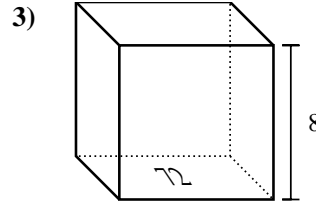
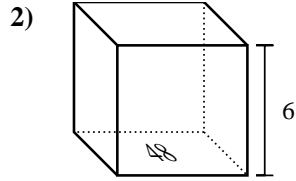
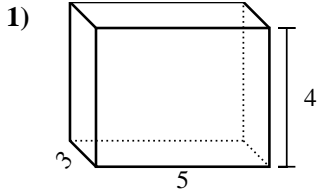




Find the volume of each rectangular prism. Units are in cm (not to scale). Remember $V = BH$ and $V = L \times W \times H$

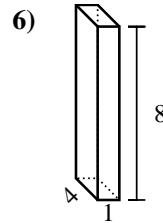
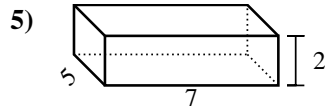
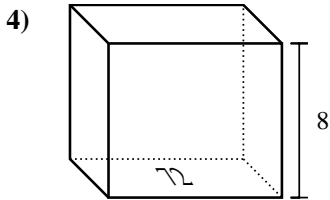
Answers



1. _____

2. _____

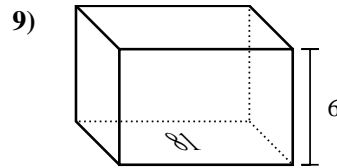
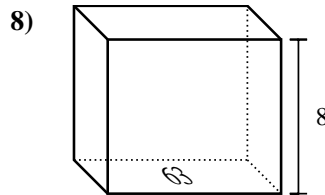
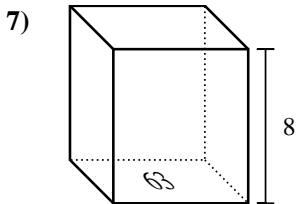
3. _____



4. _____

5. _____

6. _____

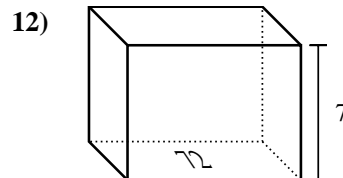
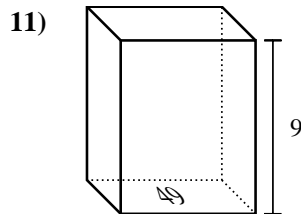
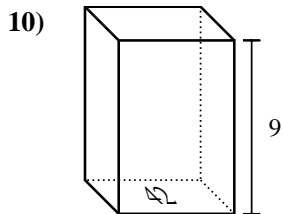


7. _____

8. _____

9. _____

10. _____

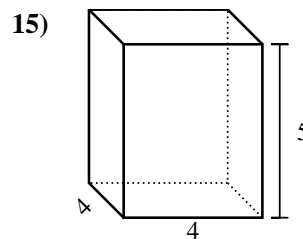
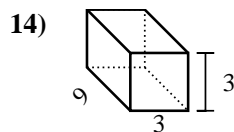
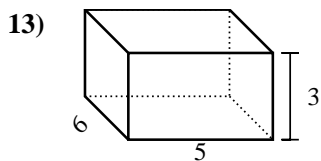


11. _____

12. _____

13. _____

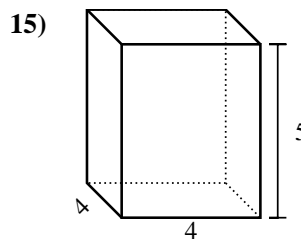
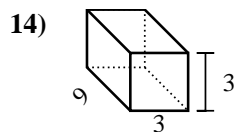
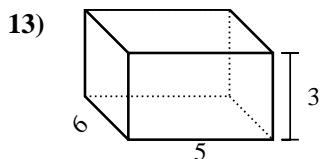
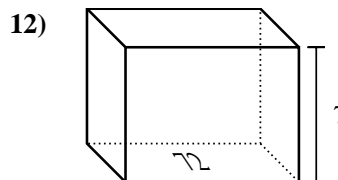
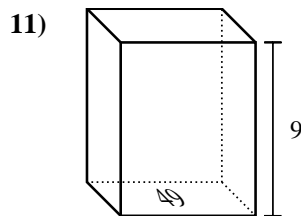
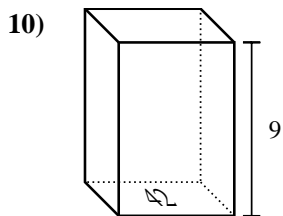
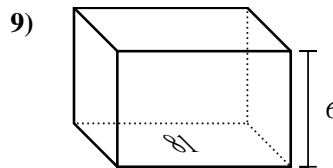
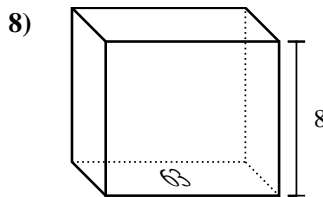
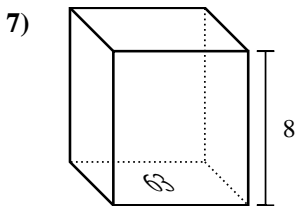
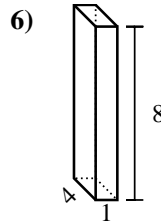
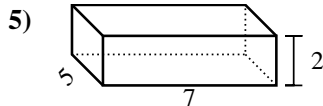
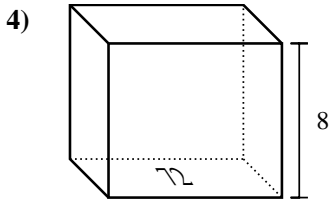
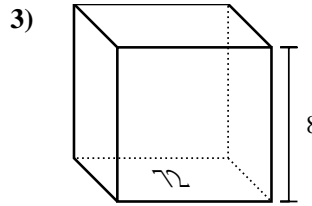
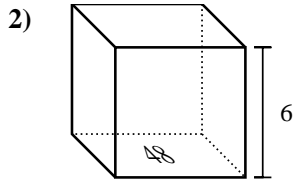
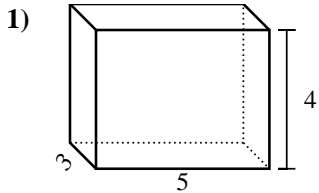
14. _____



15. _____



Find the volume of each rectangular prism. Units are in cm (not to scale). Remember $V = BH$ and $V = L \times W \times H$



Answers

1. 60 cm³

2. 288 cm³

3. 576 cm³

4. 576 cm³

5. 70 cm³

6. 32 cm³

7. 504 cm³

8. 504 cm³

9. 486 cm³

10. 378 cm³

11. 441 cm³

12. 504 cm³

13. 90 cm³

14. 81 cm³

15. 80 cm³