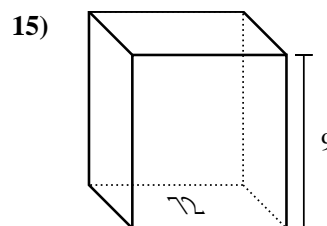
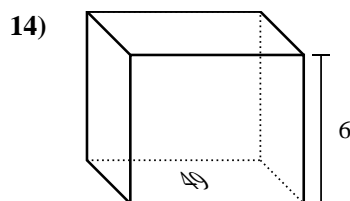
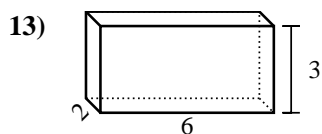
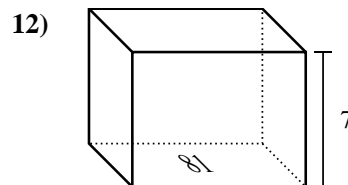
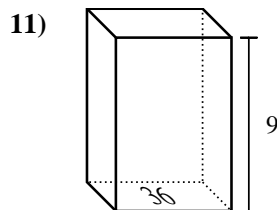
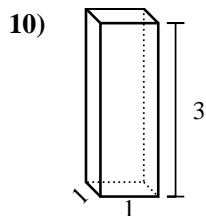
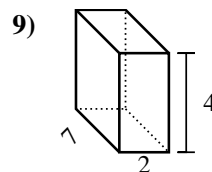
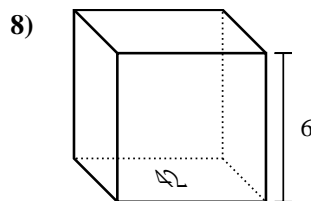
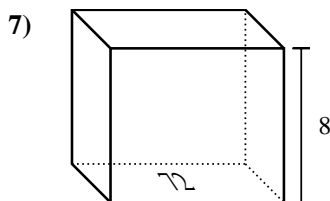
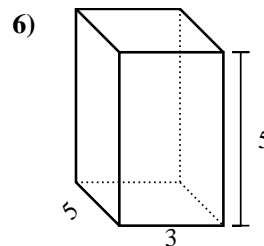
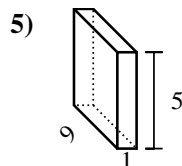
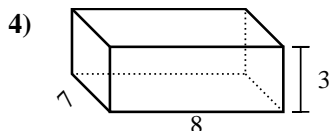
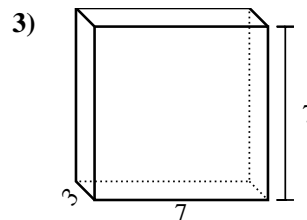
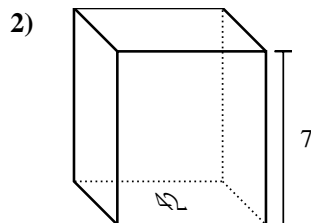
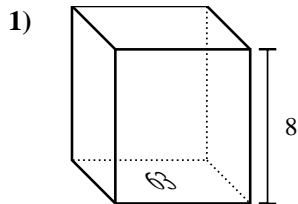




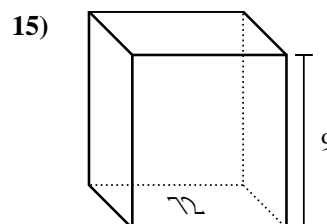
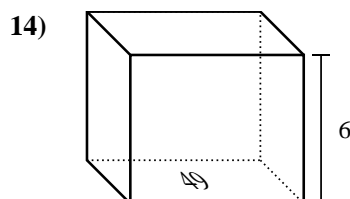
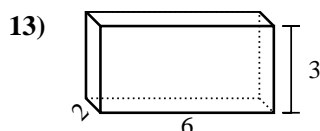
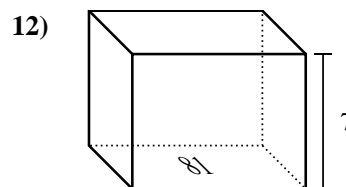
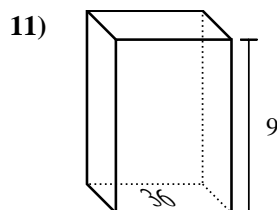
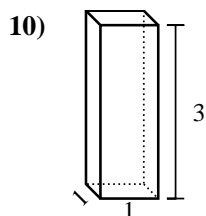
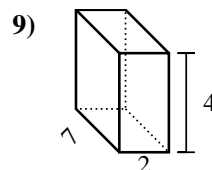
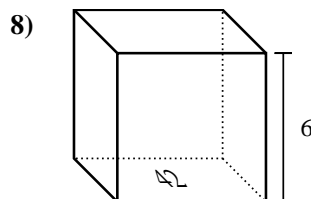
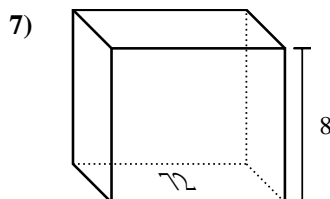
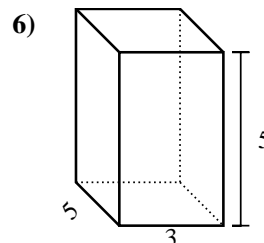
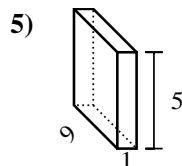
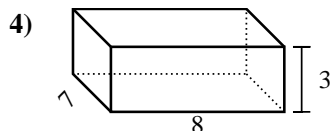
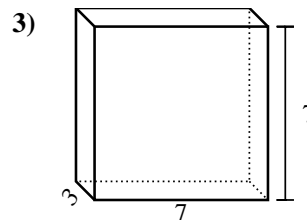
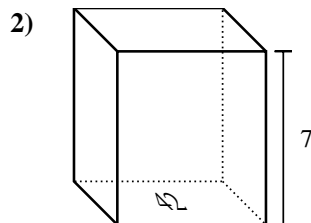
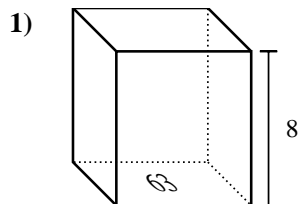
Find the volume of each rectangular prism. Units are in cm (not to scale). Remember $V = BH$ and $V = L \times W \times H$

Answers

1. _____
2. _____
3. _____
4. _____
5. _____
6. _____
7. _____
8. _____
9. _____
10. _____
11. _____
12. _____
13. _____
14. _____
15. _____



Find the volume of each rectangular prism. Units are in cm (not to scale). Remember $V = BH$ and $V = L \times W \times H$

**Answers**

1. **504 cm³**
2. **294 cm³**
3. **147 cm³**
4. **168 cm³**
5. **45 cm³**
6. **75 cm³**
7. **576 cm³**
8. **252 cm³**
9. **56 cm³**
10. **3 cm³**
11. **324 cm³**
12. **567 cm³**
13. **36 cm³**
14. **294 cm³**
15. **648 cm³**