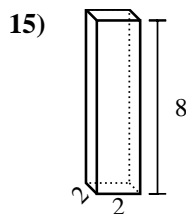
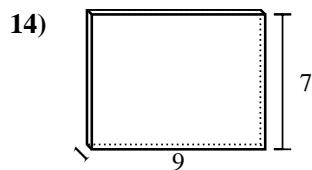
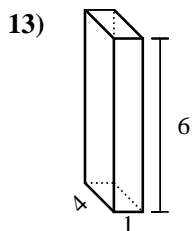
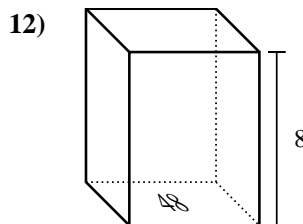
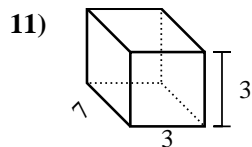
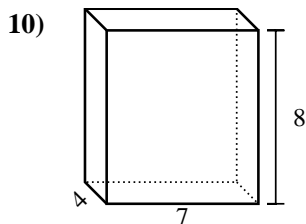
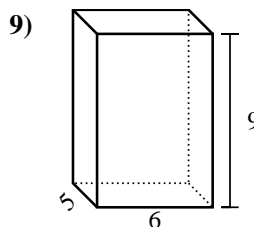
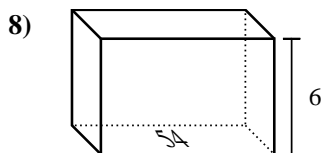
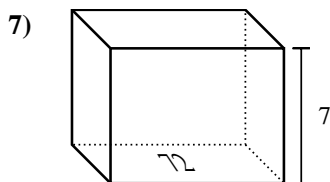
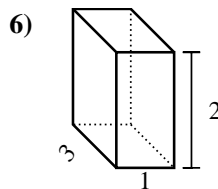
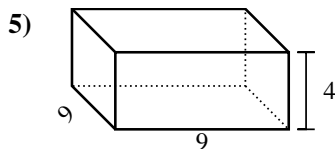
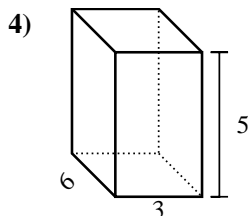
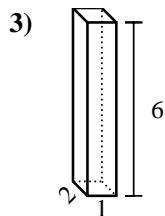
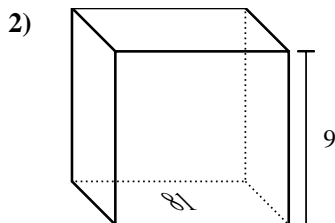
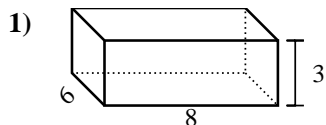




Find the volume of each rectangular prism. Units are in cm (not to scale). Remember  $V = BH$  and  $V = L \times W \times H$

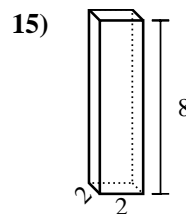
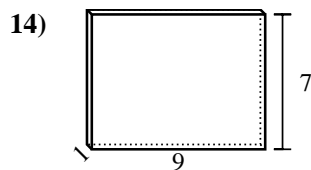
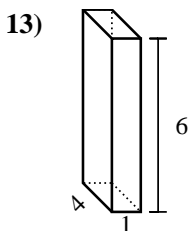
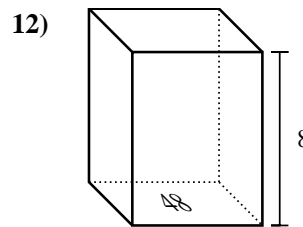
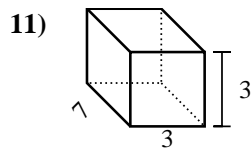
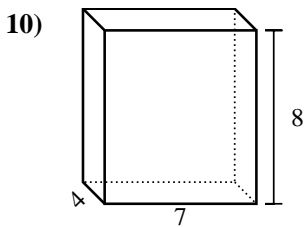
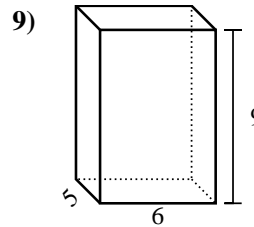
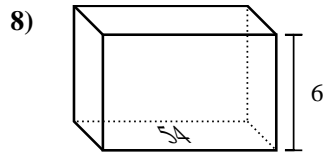
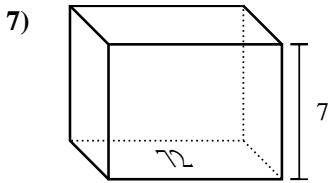
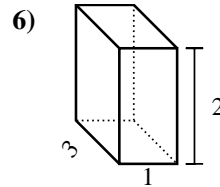
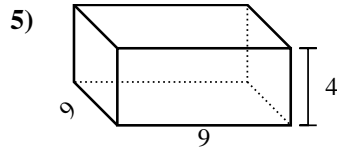
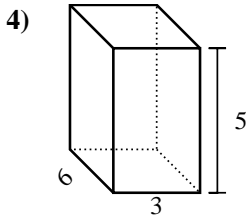
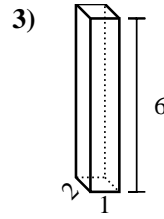
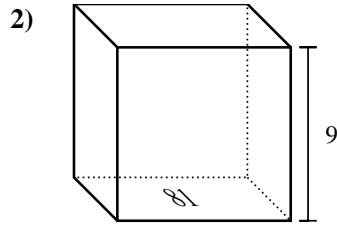
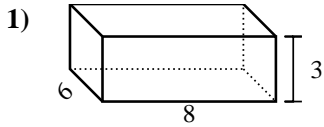


Answers

1. \_\_\_\_\_
2. \_\_\_\_\_
3. \_\_\_\_\_
4. \_\_\_\_\_
5. \_\_\_\_\_
6. \_\_\_\_\_
7. \_\_\_\_\_
8. \_\_\_\_\_
9. \_\_\_\_\_
10. \_\_\_\_\_
11. \_\_\_\_\_
12. \_\_\_\_\_
13. \_\_\_\_\_
14. \_\_\_\_\_
15. \_\_\_\_\_



Find the volume of each rectangular prism. Units are in cm (not to scale). Remember  $V = BH$  and  $V = L \times W \times H$



Answers

1. **144 cm<sup>3</sup>**

2. **729 cm<sup>3</sup>**

3. **12 cm<sup>3</sup>**

4. **90 cm<sup>3</sup>**

5. **324 cm<sup>3</sup>**

6. **6 cm<sup>3</sup>**

7. **504 cm<sup>3</sup>**

8. **324 cm<sup>3</sup>**

9. **270 cm<sup>3</sup>**

10. **224 cm<sup>3</sup>**

11. **63 cm<sup>3</sup>**

12. **384 cm<sup>3</sup>**

13. **24 cm<sup>3</sup>**

14. **63 cm<sup>3</sup>**

15. **32 cm<sup>3</sup>**