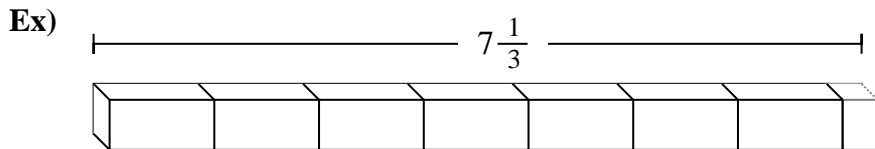




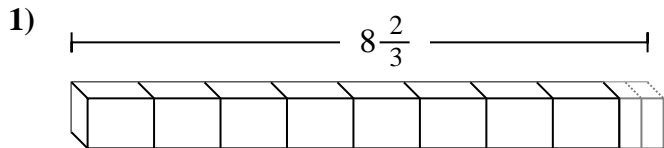
Determine the number of smaller fractional pieces that can be made from the larger piece.

Answers



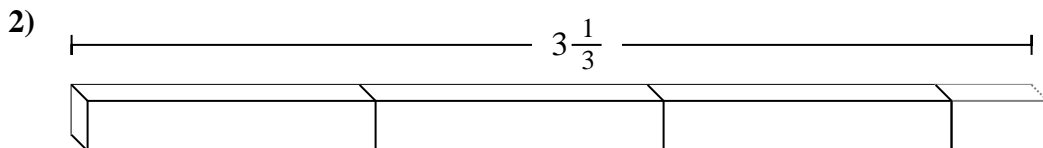
Ex. 22

1. _____



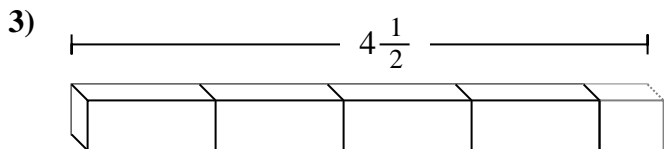
2. _____

3. _____



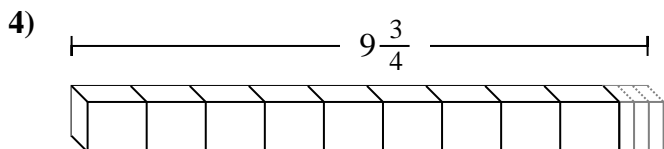
4. _____

5. _____



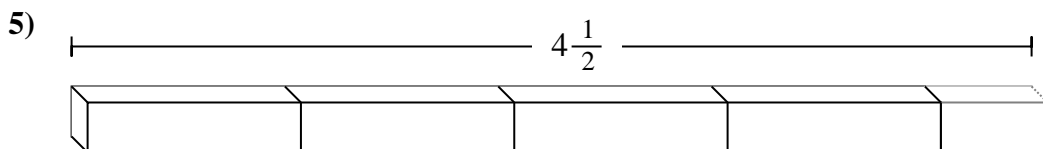
6. _____

7. _____

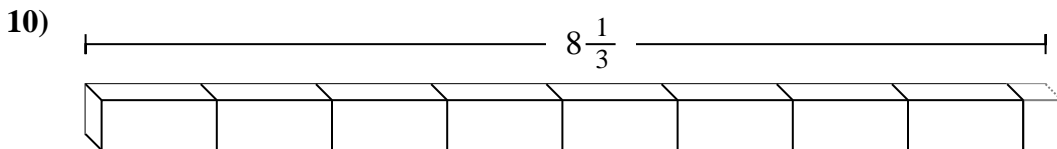
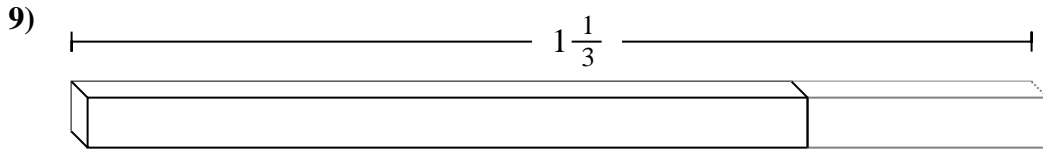
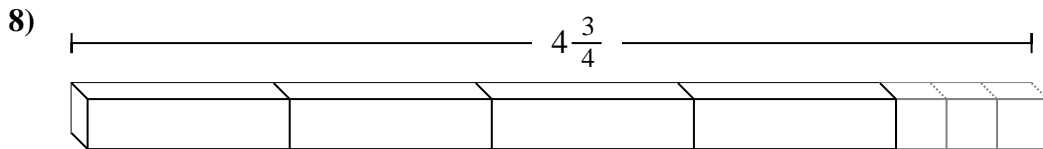
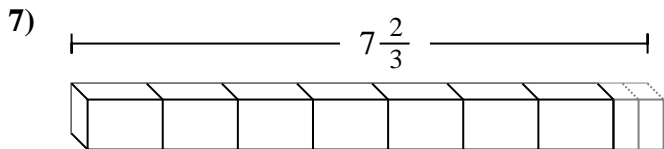
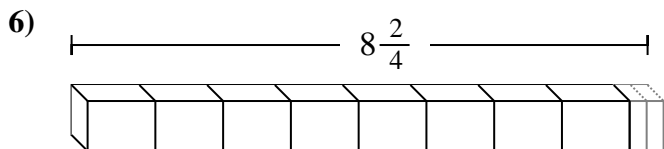


8. _____

9. _____



10. _____





Determine the number of smaller fractional pieces that can be made from the larger piece.

Answers

Ex) $7\frac{1}{3}$

1) $8\frac{2}{3}$

2) $3\frac{1}{3}$

3) $4\frac{1}{2}$

4) $9\frac{3}{4}$

5) $4\frac{1}{2}$

6) $8\frac{2}{4}$

7) $7\frac{2}{3}$

8) $4\frac{3}{4}$

9) $1\frac{1}{3}$

10) $8\frac{1}{3}$

- Ex. 22
1. 26
2. 10
3. 9
4. 39
5. 9
6. 34
7. 23
8. 19
9. 4
10. 25